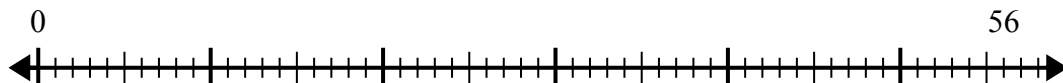


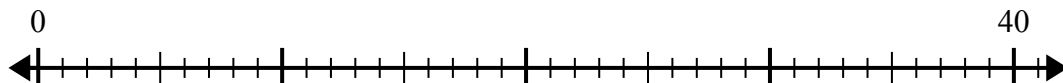


Используйте числовую прямую для решения задачи деления.

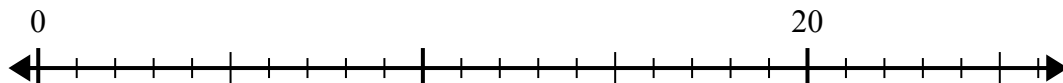
1) $56:7=$



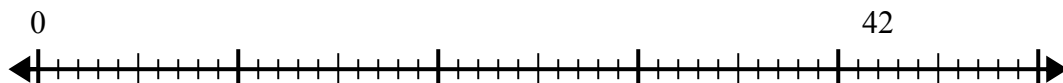
2) $40:5=$



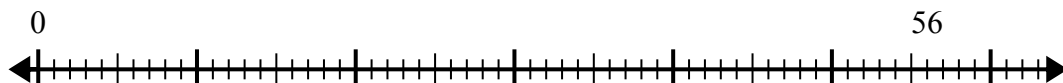
3) $20:4=$



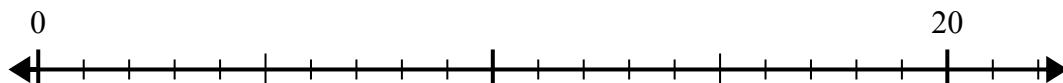
4) $42:7=$



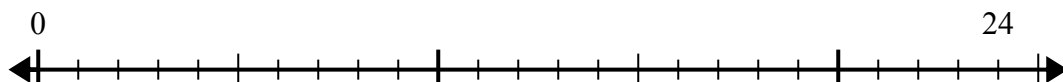
5) $56:8=$



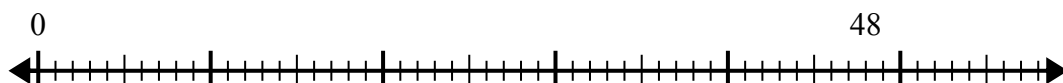
6) $20:5=$



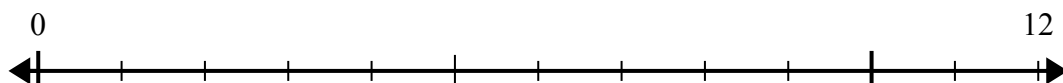
7) $24:4=$



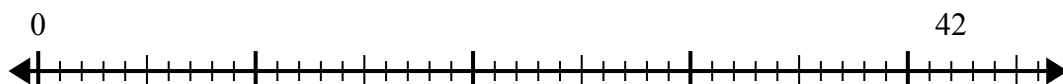
8) $48:8=$



9) $12:4=$



10) $42:6=$



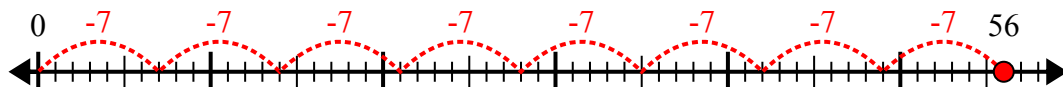
Ответы

1. _____
2. _____
3. _____
4. _____
5. _____
6. _____
7. _____
8. _____
9. _____
10. _____

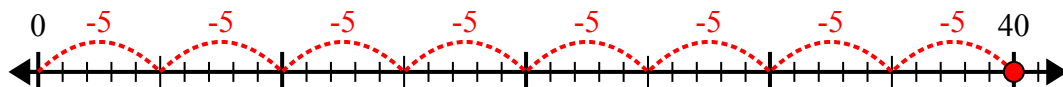


Используйте числовую прямую для решения задачи деления.

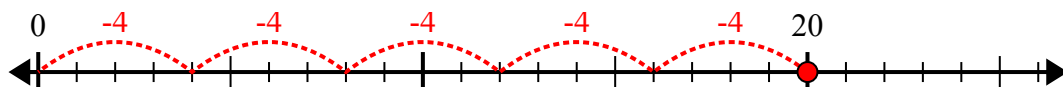
1) $56:7=$



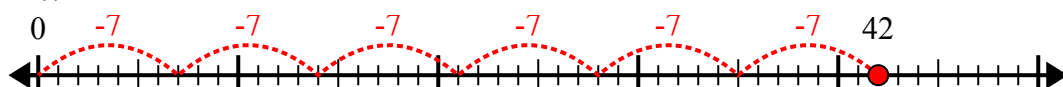
2) $40:5=$



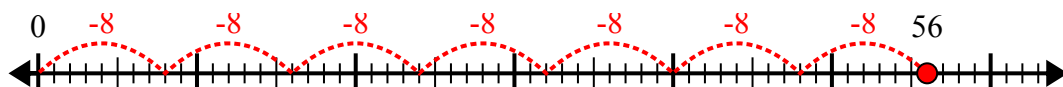
3) $20:4=$



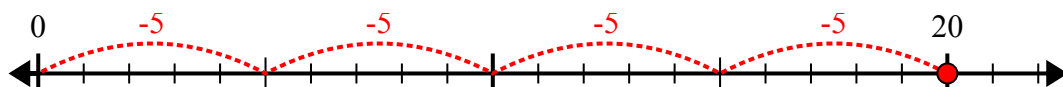
4) $42:7=$



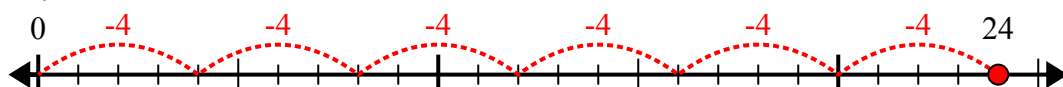
5) $56:8=$



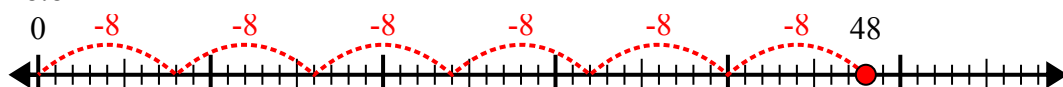
6) $20:5=$



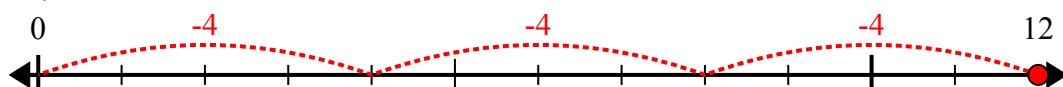
7) $24:4=$



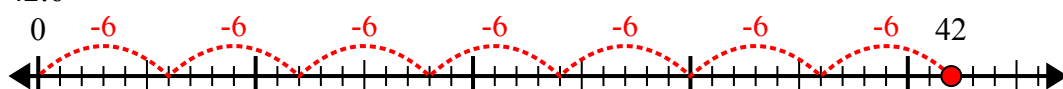
8) $48:8=$



9) $12:4=$



10) $42:6=$



Ответы

1. 8

2. 8

3. 5

4. 6

5. 7

6. 4

7. 6

8. 6

9. 3

10. 7