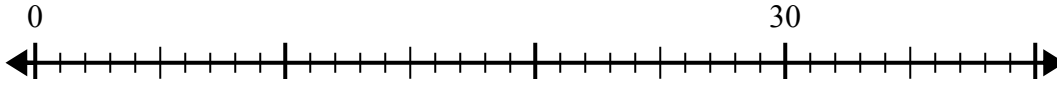


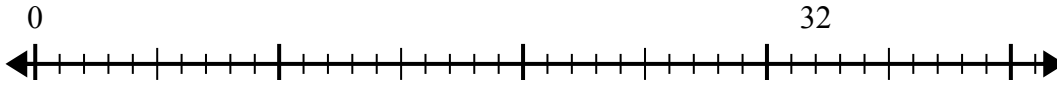


Используйте числовую прямую для решения задачи деления.

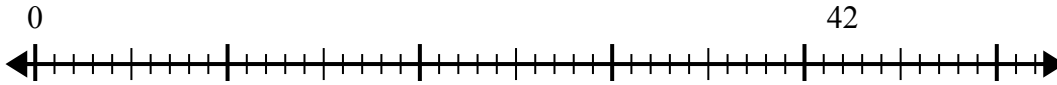
1)  $30:6=$   
0



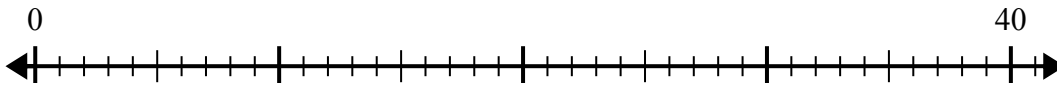
2)  $32:4=$   
0



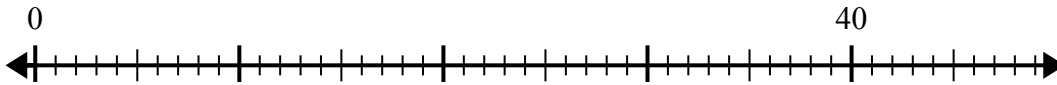
3)  $42:7=$   
0



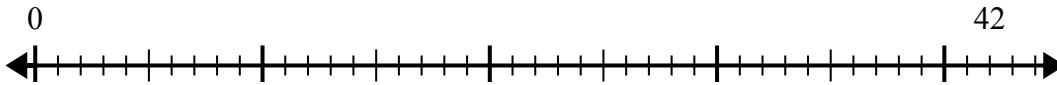
4)  $40:5=$   
0



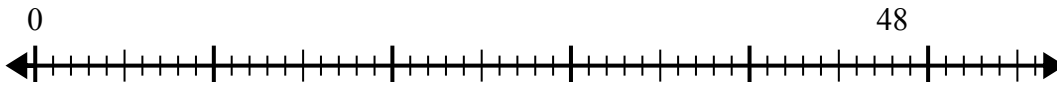
5)  $40:8=$   
0



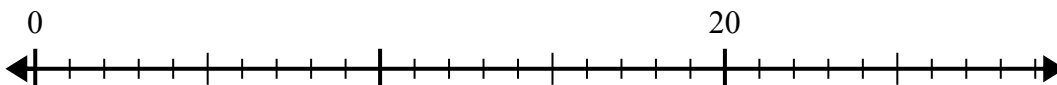
6)  $42:6=$   
0



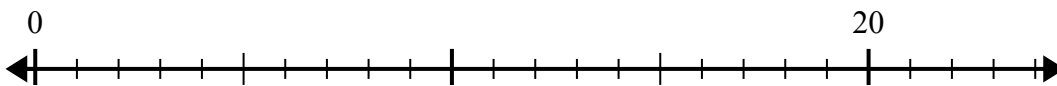
7)  $48:6=$   
0



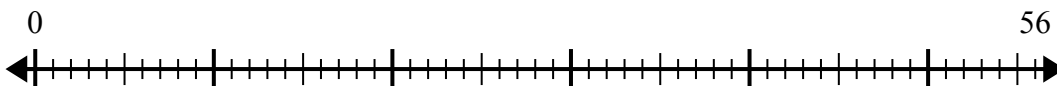
8)  $20:4=$   
0



9)  $20:5=$   
0



10)  $56:8=$   
0



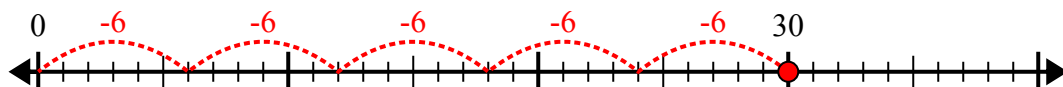
**Отв**

1. \_\_\_\_\_
2. \_\_\_\_\_
3. \_\_\_\_\_
4. \_\_\_\_\_
5. \_\_\_\_\_
6. \_\_\_\_\_
7. \_\_\_\_\_
8. \_\_\_\_\_
9. \_\_\_\_\_
10. \_\_\_\_\_

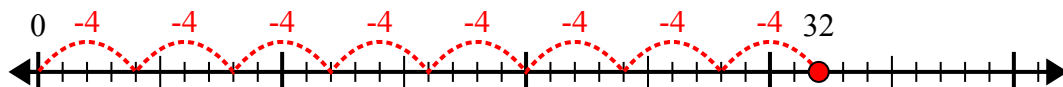


Используйте числовую прямую для решения задачи деления.

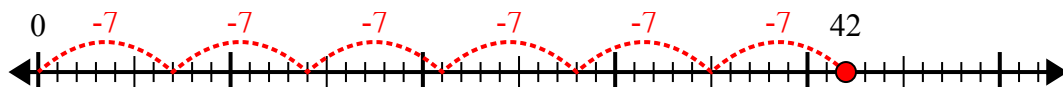
1)  $30:6=$



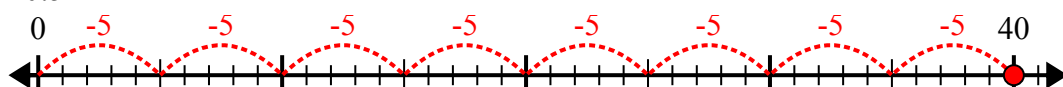
2)  $32:4=$



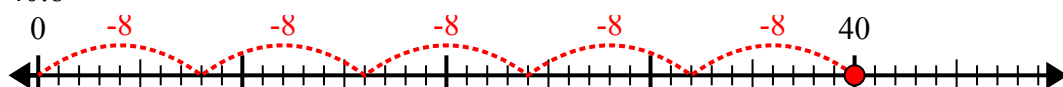
3)  $42:7=$



4)  $40:5=$



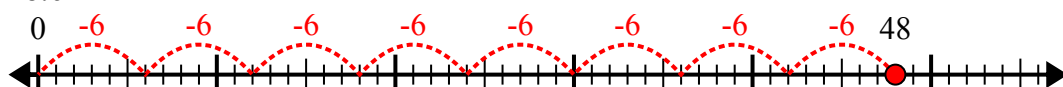
5)  $40:8=$



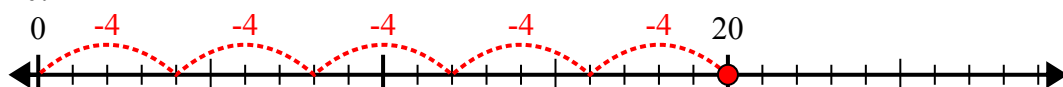
6)  $42:6=$



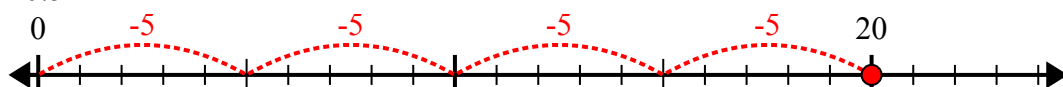
7)  $48:6=$



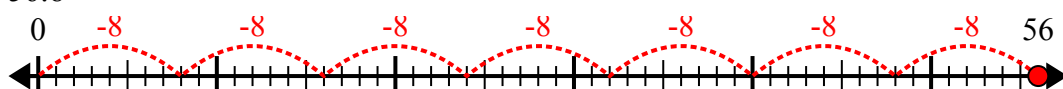
8)  $20:4=$



9)  $20:5=$



10)  $56:8=$



**ОТВЕТЫ**

1. 5

2. 8

3. 6

4. 8

5. 5

6. 7

7. 8

8. 5

9. 4

10. 7