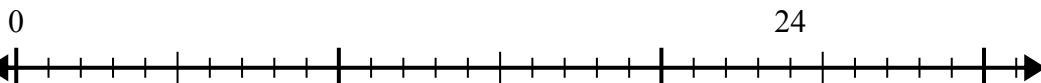


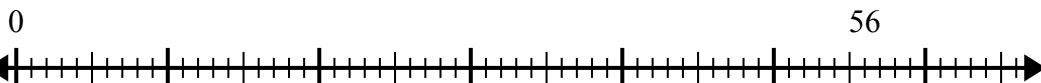


Используйте числовую прямую для решения задачи деления.

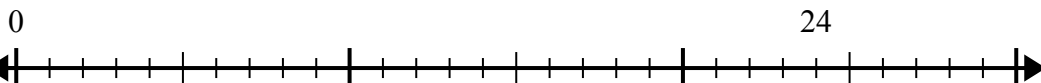
1) $24:8=$



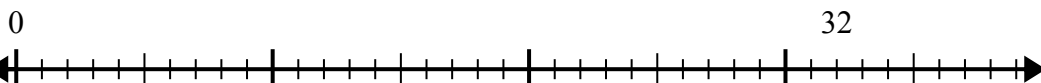
2) $56:8=$



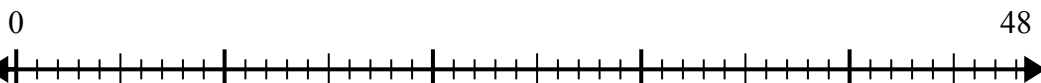
3) $24:4=$



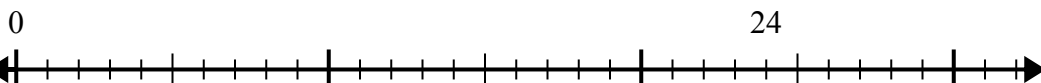
4) $32:4=$



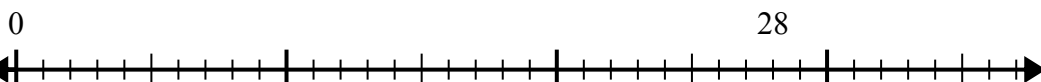
5) $48:8=$



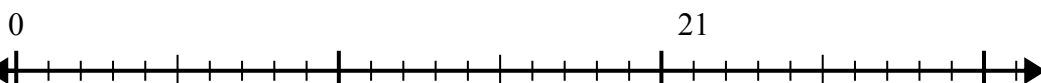
6) $24:6=$



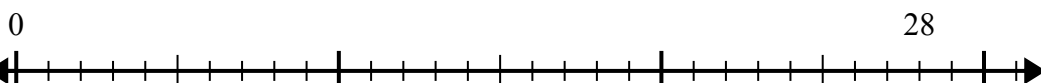
7) $28:4=$



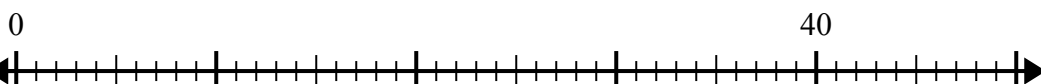
8) $21:7=$



9) $28:7=$



10) $40:5=$



Отвты

1. _____

2. _____

3. _____

4. _____

5. _____

6. _____

7. _____

8. _____

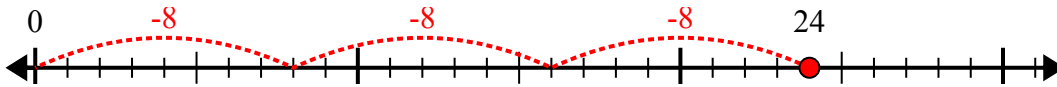
9. _____

10. _____

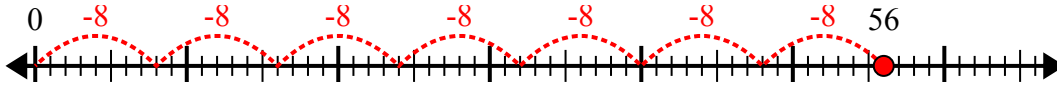


Используйте числовую прямую для решения задачи деления.

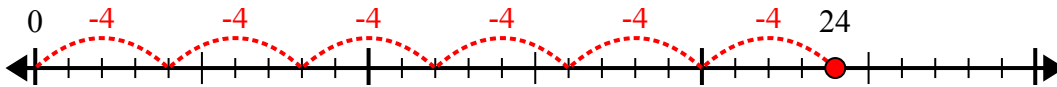
1) $24:8=$



2) $56:8=$



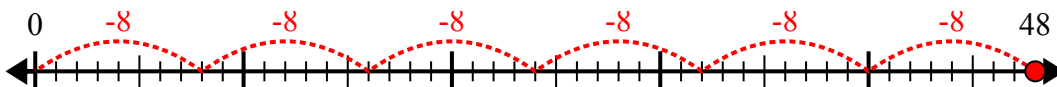
3) $24:4=$



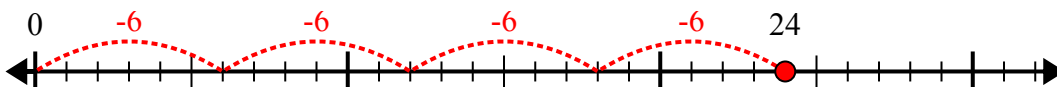
4) $32:4=$



5) $48:8=$



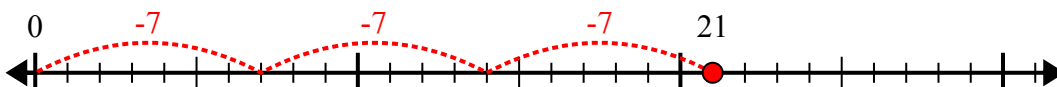
6) $24:6=$



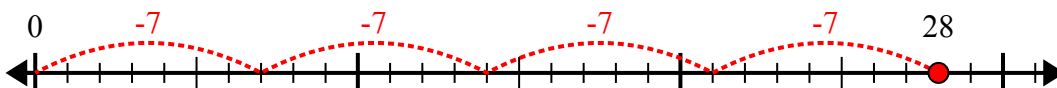
7) $28:4=$



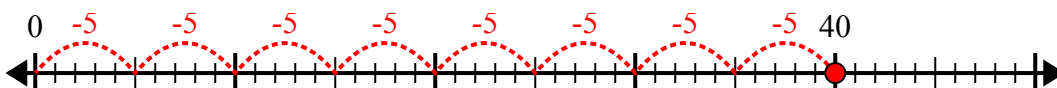
8) $21:7=$



9) $28:7=$



10) $40:5=$



ОТВЕТЫ

1. 3

2. 7

3. 6

4. 8

5. 6

6. 4

7. 7

8. 3

9. 4

10. 8