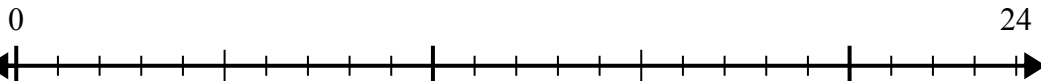


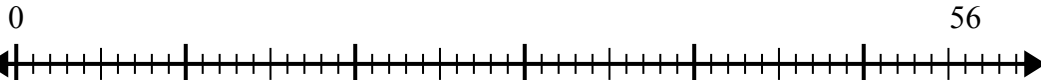


Используйте числовую прямую для решения задачи деления.

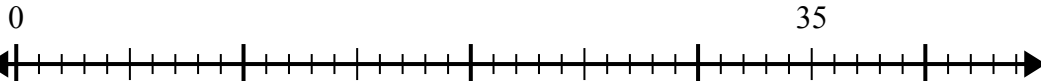
1) $24:4=$



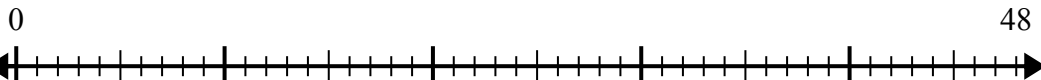
2) $56:8=$



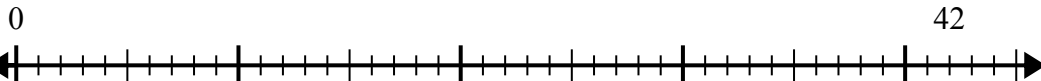
3) $35:5=$



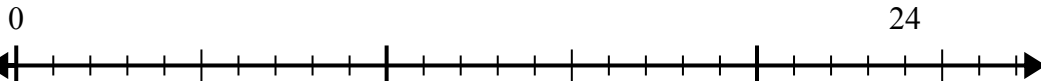
4) $48:8=$



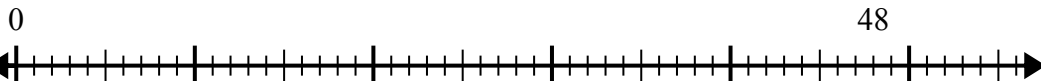
5) $42:6=$



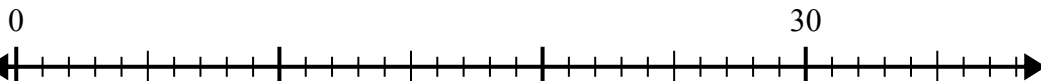
6) $24:6=$



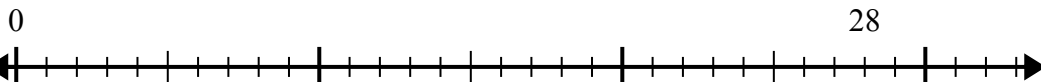
7) $48:6=$



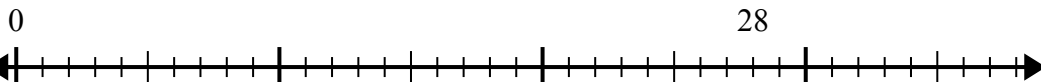
8) $30:5=$



9) $28:7=$



10) $28:4=$



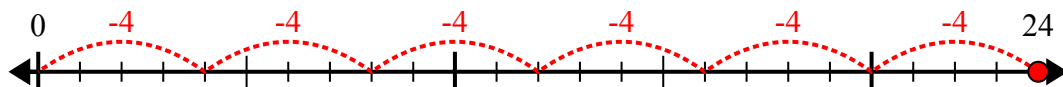
ОТВЕТЫ

1. _____
2. _____
3. _____
4. _____
5. _____
6. _____
7. _____
8. _____
9. _____
10. _____

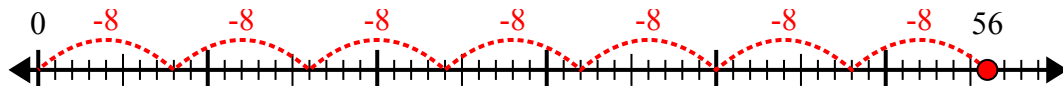


Используйте числовую прямую для решения задачи деления.

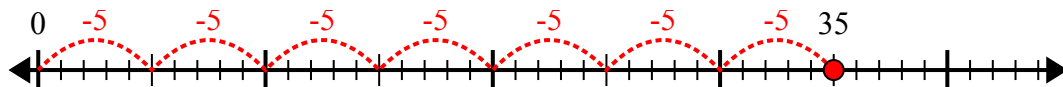
1) $24:4=$



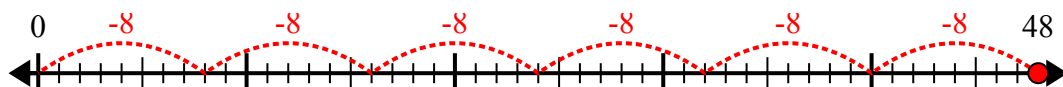
2) $56:8=$



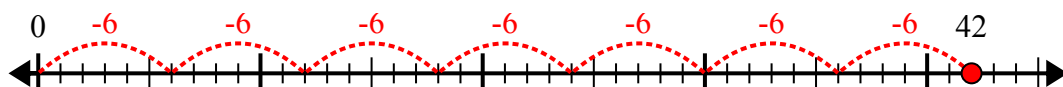
3) $35:5=$



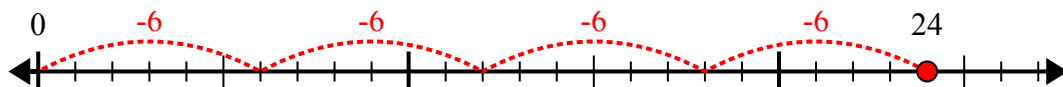
4) $48:8=$



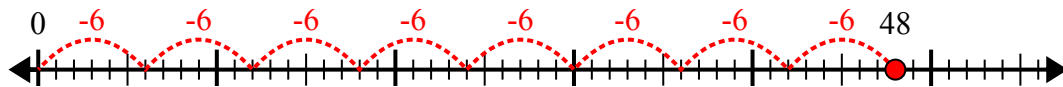
5) $42:6=$



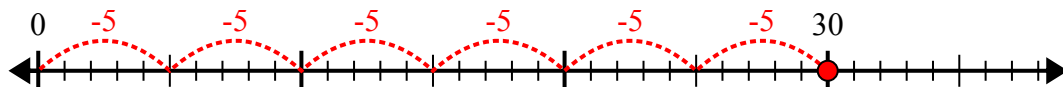
6) $24:6=$



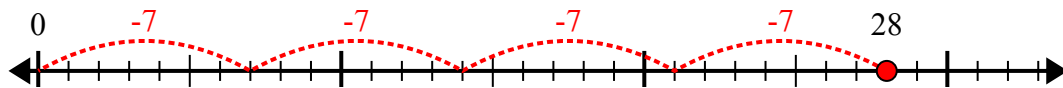
7) $48:6=$



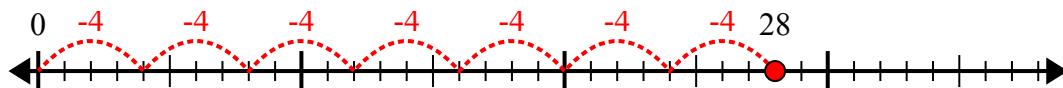
8) $30:5=$



9) $28:7=$



10) $28:4=$



ОТВЕТЫ

1. 6

2. 7

3. 7

4. 6

5. 7

6. 4

7. 8

8. 6

9. 4

10. 7