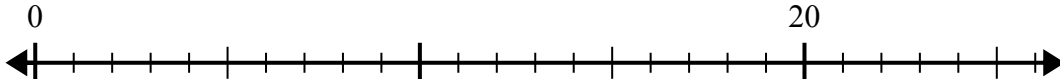


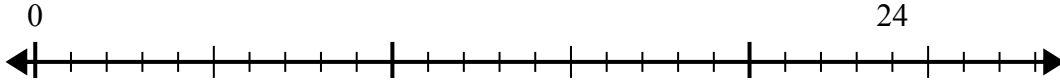


Используйте числовую прямую для решения задачи деления.

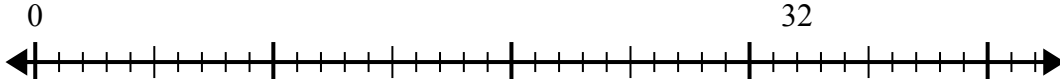
1)  $20:5=$   
0



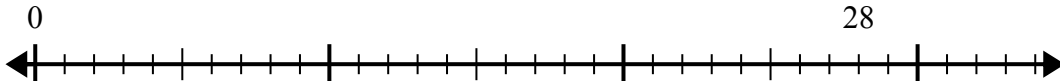
2)  $24:6=$   
0



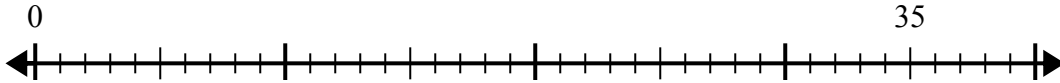
3)  $32:8=$   
0



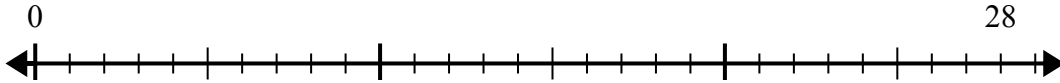
4)  $28:7=$   
0



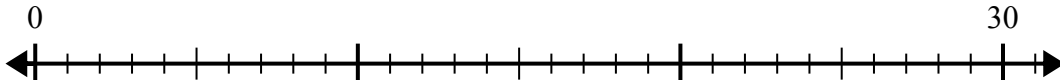
5)  $35:5=$   
0



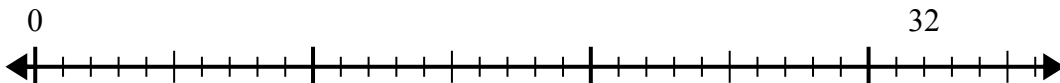
6)  $28:4=$   
0



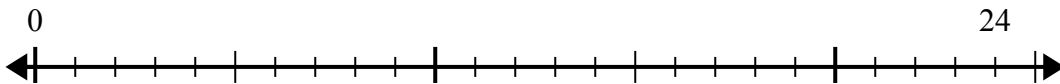
7)  $30:6=$   
0



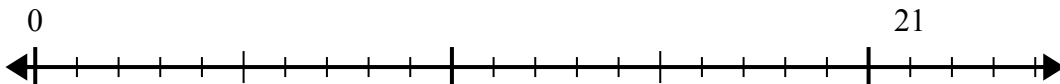
8)  $32:4=$   
0



9)  $24:4=$   
0



10)  $21:7=$   
0



Отвeты

1. \_\_\_\_\_

2. \_\_\_\_\_

3. \_\_\_\_\_

4. \_\_\_\_\_

5. \_\_\_\_\_

6. \_\_\_\_\_

7. \_\_\_\_\_

8. \_\_\_\_\_

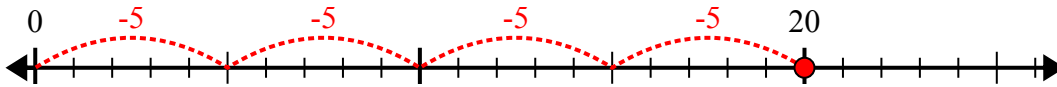
9. \_\_\_\_\_

10. \_\_\_\_\_

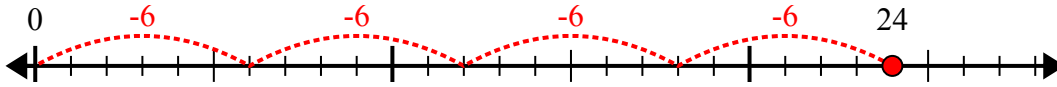


Используйте числовую прямую для решения задачи деления.

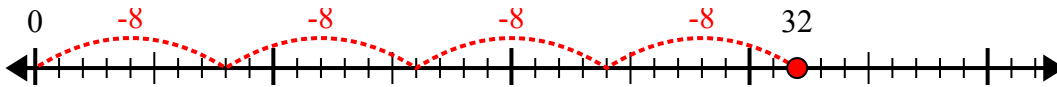
1)  $20:5=$



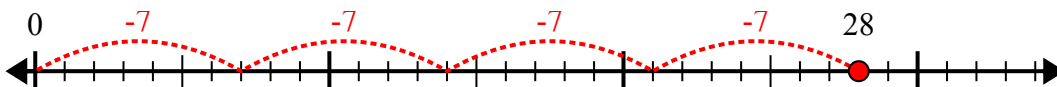
2)  $24:6=$



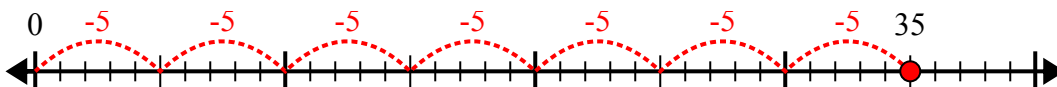
3)  $32:8=$



4)  $28:7=$



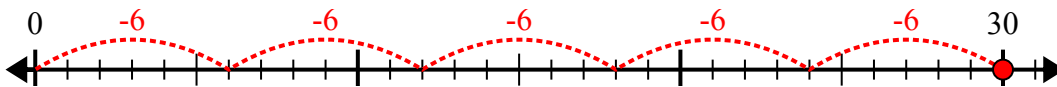
5)  $35:5=$



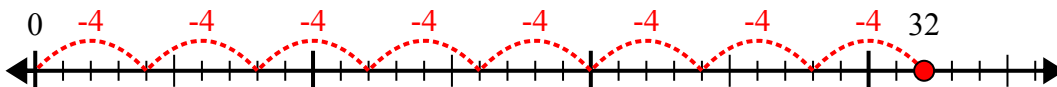
6)  $28:4=$



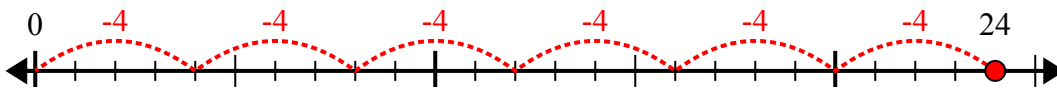
7)  $30:6=$



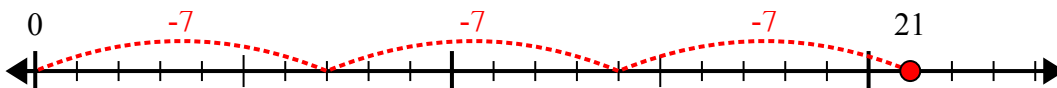
8)  $32:4=$



9)  $24:4=$



10)  $21:7=$



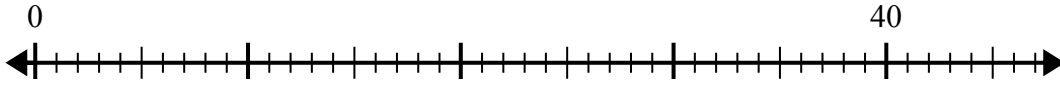
**ОТВЕТЫ**

1. 4
2. 4
3. 4
4. 4
5. 7
6. 7
7. 5
8. 8
9. 6
10. 3

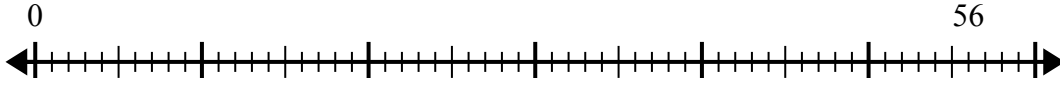


Используйте числовую прямую для решения задачи деления.

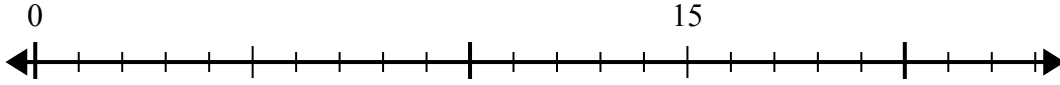
1)  $40:5=$   
0



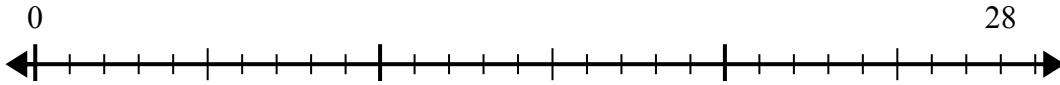
2)  $56:7=$   
0



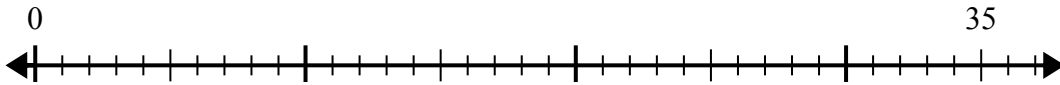
3)  $15:5=$   
0



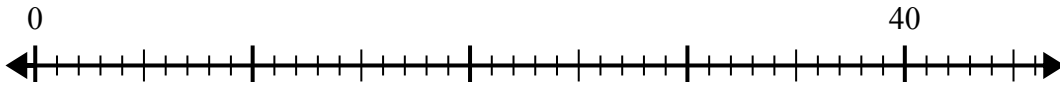
4)  $28:4=$   
0



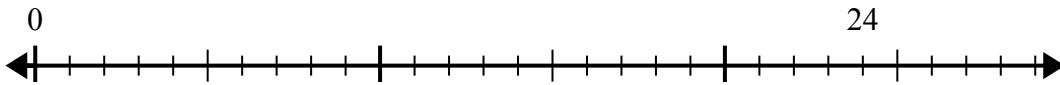
5)  $35:7=$   
0



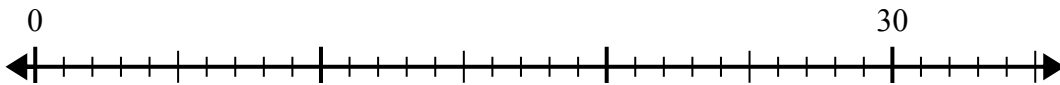
6)  $40:8=$   
0



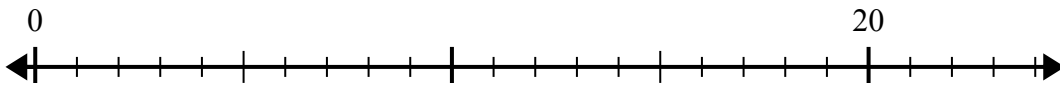
7)  $24:4=$   
0



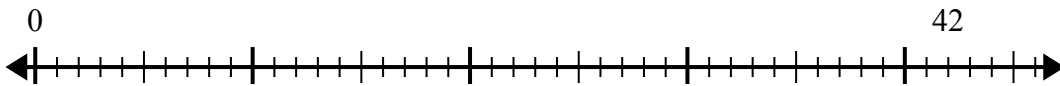
8)  $30:5=$   
0



9)  $20:4=$   
0



10)  $42:6=$   
0



**Отв**еты

1. \_\_\_\_\_

2. \_\_\_\_\_

3. \_\_\_\_\_

4. \_\_\_\_\_

5. \_\_\_\_\_

6. \_\_\_\_\_

7. \_\_\_\_\_

8. \_\_\_\_\_

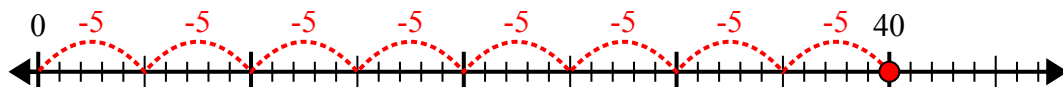
9. \_\_\_\_\_

10. \_\_\_\_\_

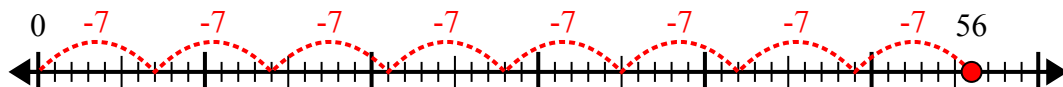


Используйте числовую прямую для решения задачи деления.

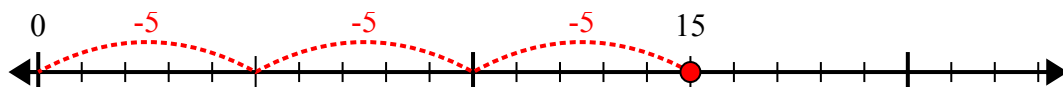
1)  $40:5=$



2)  $56:7=$



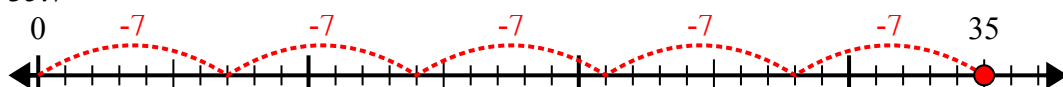
3)  $15:5=$



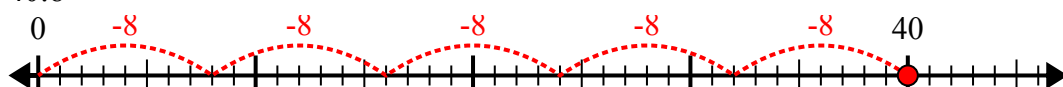
4)  $28:4=$



5)  $35:7=$



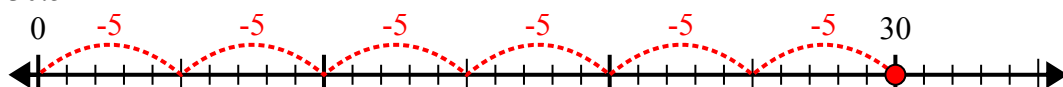
6)  $40:8=$



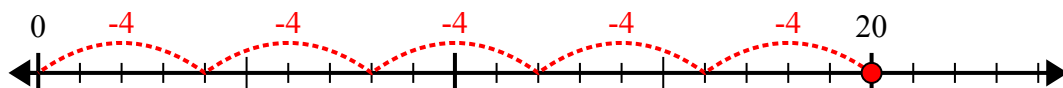
7)  $24:4=$



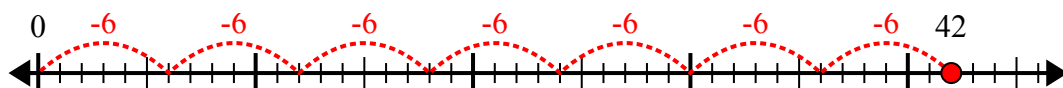
8)  $30:5=$



9)  $20:4=$



10)  $42:6=$



**ОТВЕТЫ**

1. 8

2. 8

3. 3

4. 7

5. 5

6. 5

7. 6

8. 6

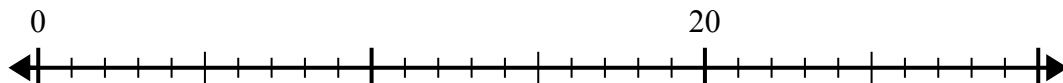
9. 5

10. 7

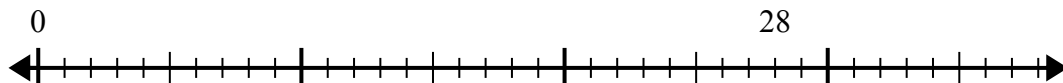


Используйте числовую прямую для решения задачи деления.

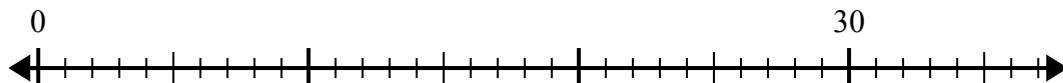
1)  $20:5=$



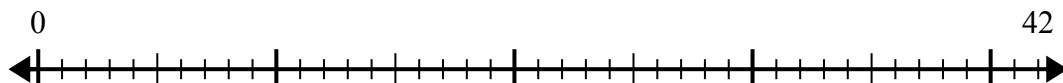
2)  $28:4=$



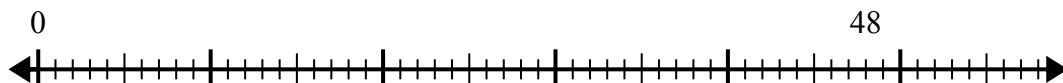
3)  $30:6=$



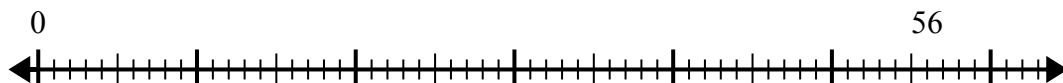
4)  $42:6=$



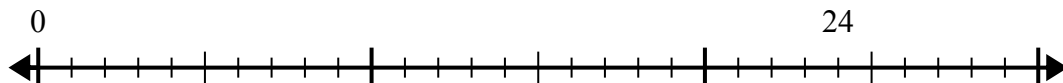
5)  $48:6=$



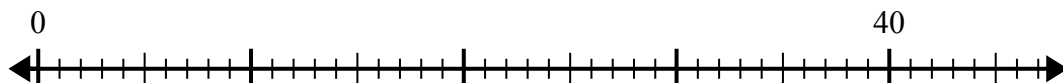
6)  $56:8=$



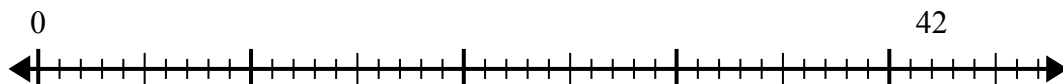
7)  $24:6=$



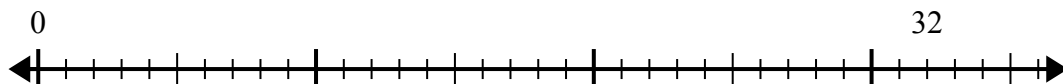
8)  $40:8=$



9)  $42:7=$



10)  $32:4=$



**Отв**еты

1. \_\_\_\_\_

2. \_\_\_\_\_

3. \_\_\_\_\_

4. \_\_\_\_\_

5. \_\_\_\_\_

6. \_\_\_\_\_

7. \_\_\_\_\_

8. \_\_\_\_\_

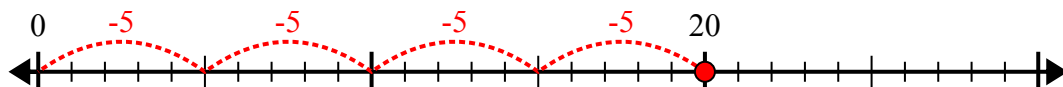
9. \_\_\_\_\_

10. \_\_\_\_\_

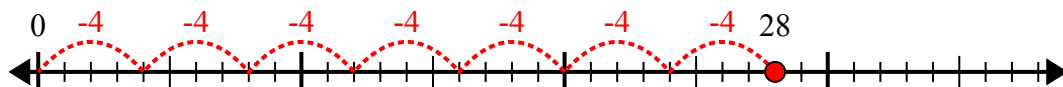


Используйте числовую прямую для решения задачи деления.

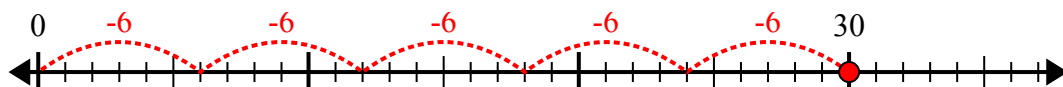
1)  $20:5=$



2)  $28:4=$



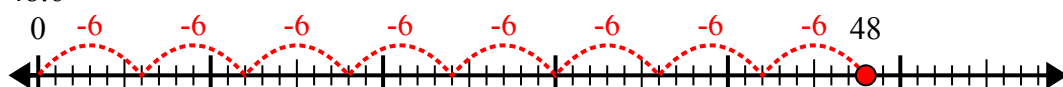
3)  $30:6=$



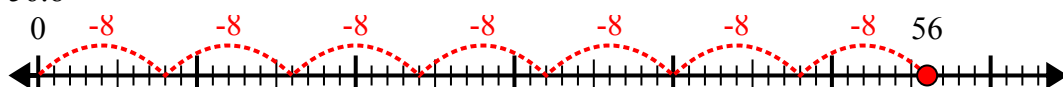
4)  $42:6=$



5)  $48:6=$



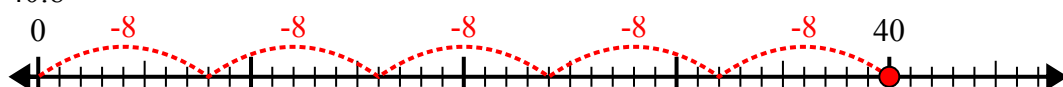
6)  $56:8=$



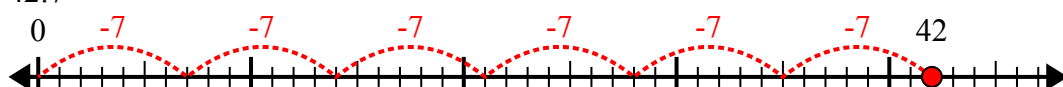
7)  $24:6=$



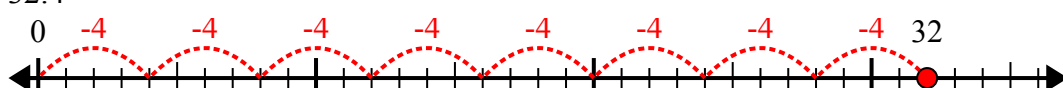
8)  $40:8=$



9)  $42:7=$



10)  $32:4=$



**ОТВЕТЫ**

1. 4

2. 7

3. 5

4. 7

5. 8

6. 7

7. 4

8. 5

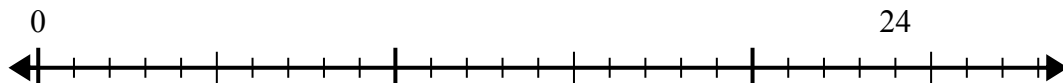
9. 6

10. 8

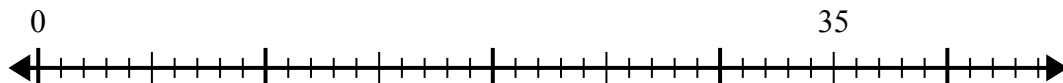


Используйте числовую прямую для решения задачи деления.

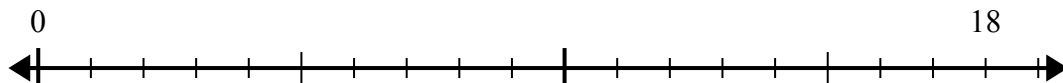
1)  $24:6=$



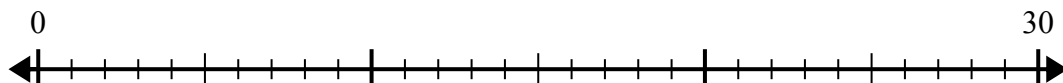
2)  $35:7=$



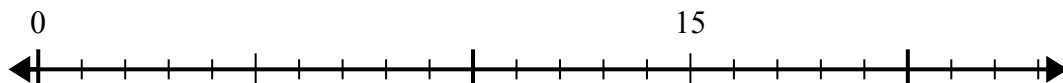
3)  $18:6=$



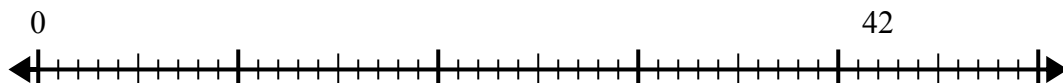
4)  $30:6=$



5)  $15:5=$



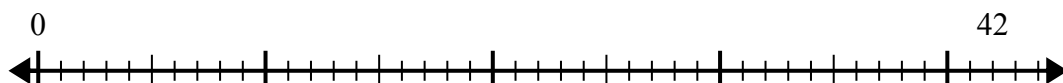
6)  $42:6=$



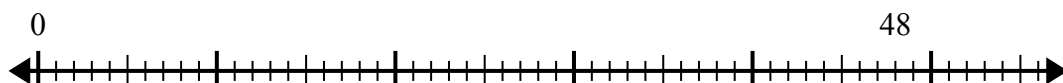
7)  $56:8=$



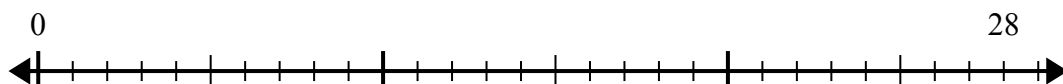
8)  $42:7=$



9)  $48:8=$



10)  $28:4=$



**Отв**еты

1. \_\_\_\_\_

2. \_\_\_\_\_

3. \_\_\_\_\_

4. \_\_\_\_\_

5. \_\_\_\_\_

6. \_\_\_\_\_

7. \_\_\_\_\_

8. \_\_\_\_\_

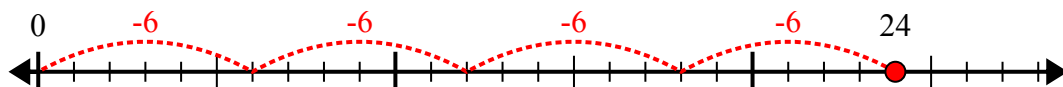
9. \_\_\_\_\_

10. \_\_\_\_\_

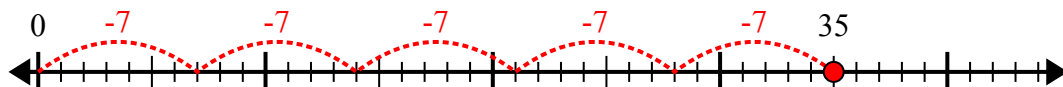


Используйте числовую прямую для решения задачи деления.

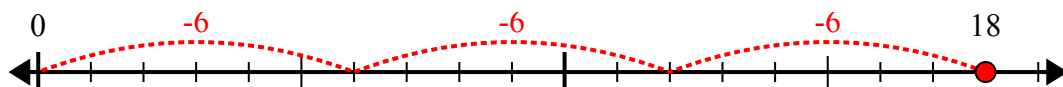
1)  $24:6=$



2)  $35:7=$



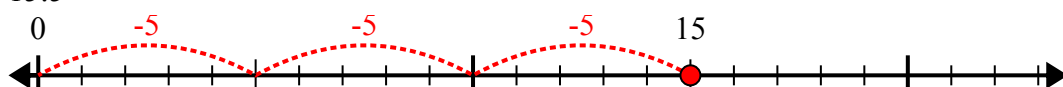
3)  $18:6=$



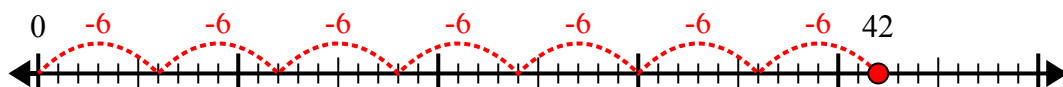
4)  $30:6=$



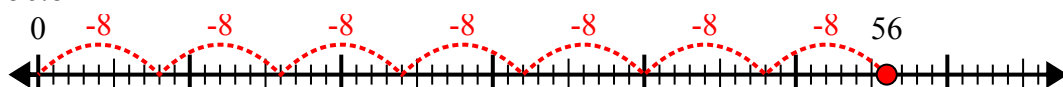
5)  $15:5=$



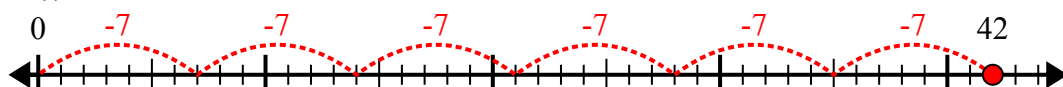
6)  $42:6=$



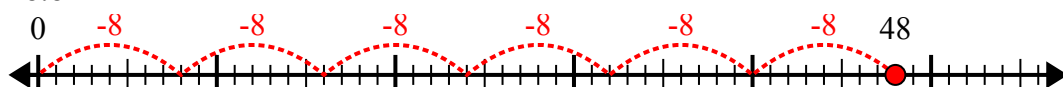
7)  $56:8=$



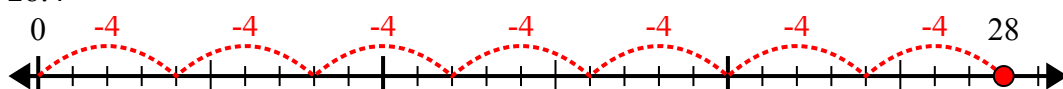
8)  $42:7=$



9)  $48:8=$



10)  $28:4=$



**ОТВЕТЫ**

1. 4

2. 5

3. 3

4. 5

5. 3

6. 7

7. 7

8. 6

9. 6

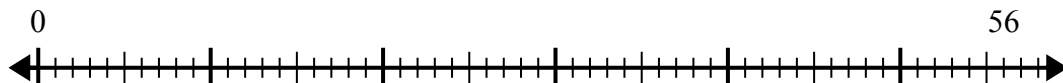
10. 7



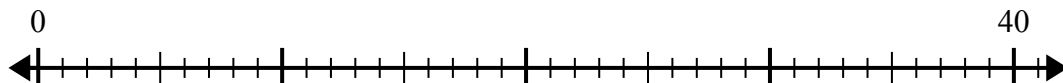


Используйте числовую прямую для решения задачи деления.

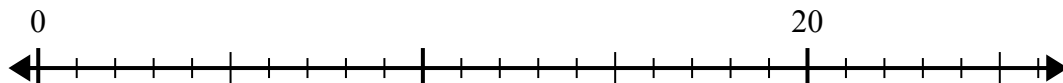
1)  $56:7=$



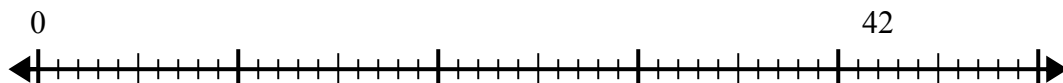
2)  $40:5=$



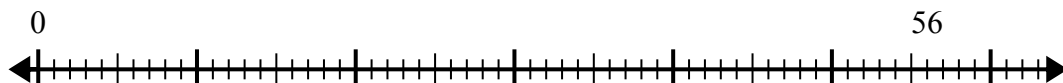
3)  $20:4=$



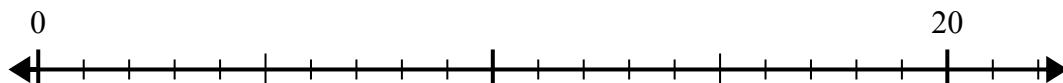
4)  $42:7=$



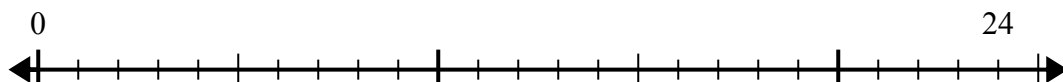
5)  $56:8=$



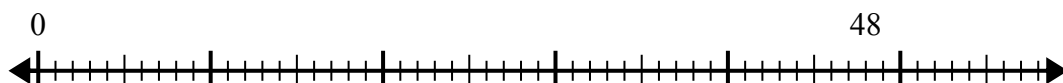
6)  $20:5=$



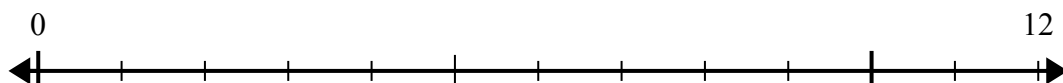
7)  $24:4=$



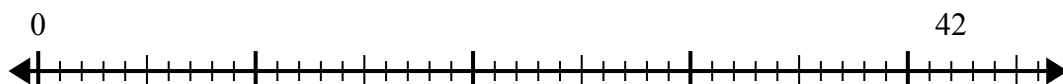
8)  $48:8=$



9)  $12:4=$



10)  $42:6=$



**Отв**еты

1. \_\_\_\_\_

2. \_\_\_\_\_

3. \_\_\_\_\_

4. \_\_\_\_\_

5. \_\_\_\_\_

6. \_\_\_\_\_

7. \_\_\_\_\_

8. \_\_\_\_\_

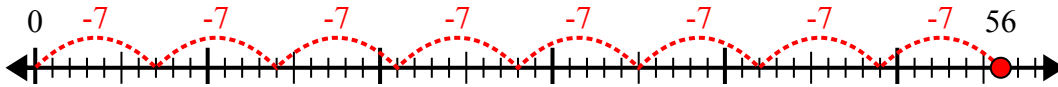
9. \_\_\_\_\_

10. \_\_\_\_\_

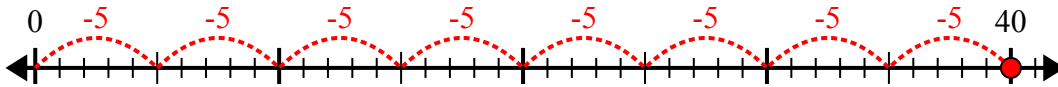


Используйте числовую прямую для решения задачи деления.

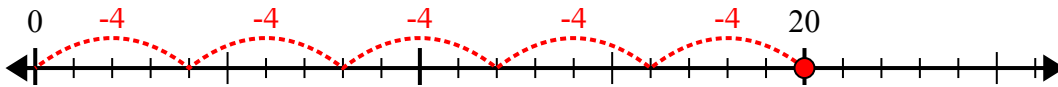
1)  $56:7=$



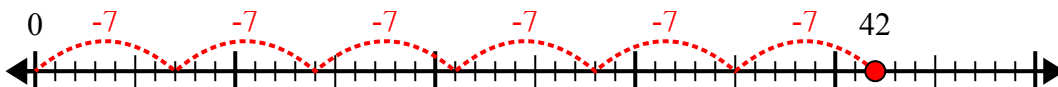
2)  $40:5=$



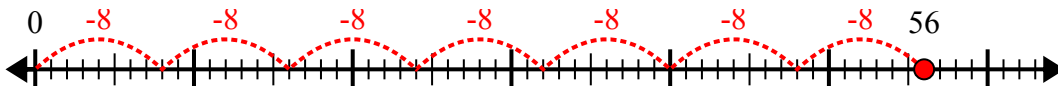
3)  $20:4=$



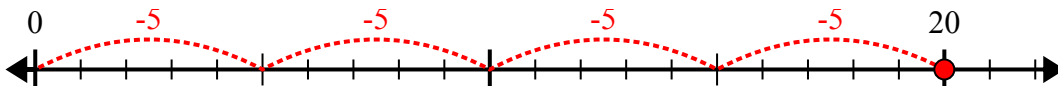
4)  $42:7=$



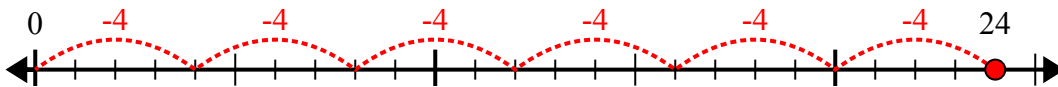
5)  $56:8=$



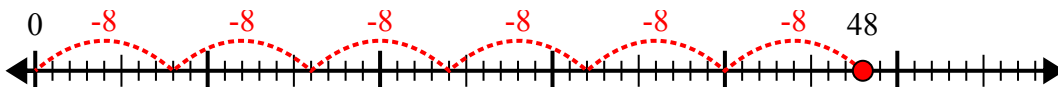
6)  $20:5=$



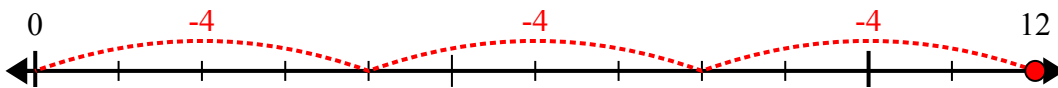
7)  $24:4=$



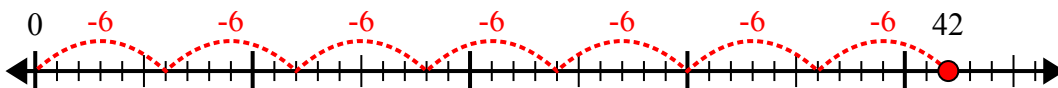
8)  $48:8=$



9)  $12:4=$



10)  $42:6=$



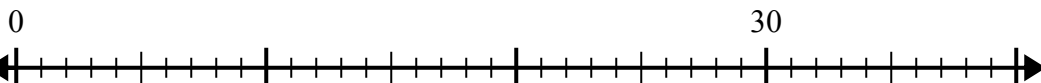
**Отв**еты

1. 8
2. 8
3. 5
4. 6
5. 7
6. 4
7. 6
8. 6
9. 3
10. 7

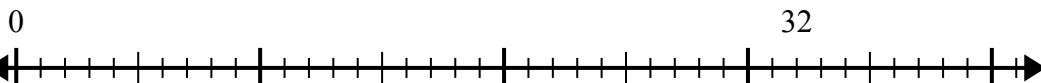


Используйте числовую прямую для решения задачи деления.

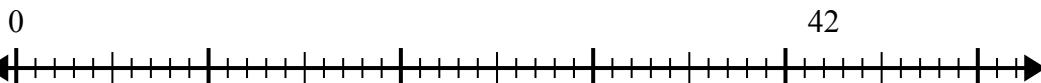
1)  $30:6=$



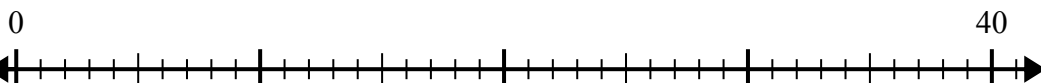
2)  $32:4=$



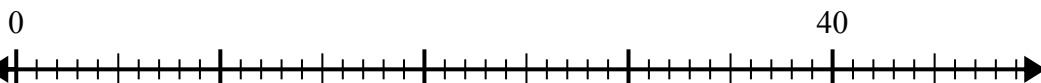
3)  $42:7=$



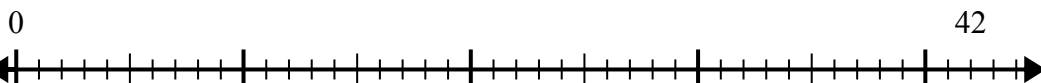
4)  $40:5=$



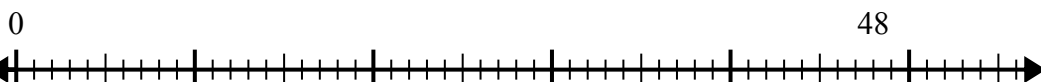
5)  $40:8=$



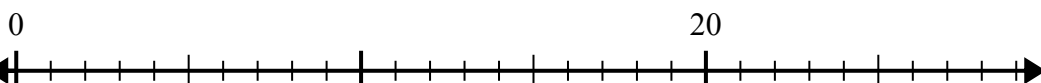
6)  $42:6=$



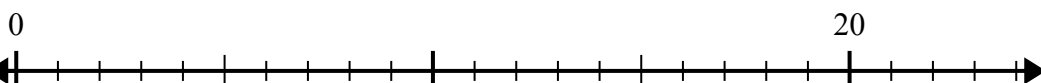
7)  $48:6=$



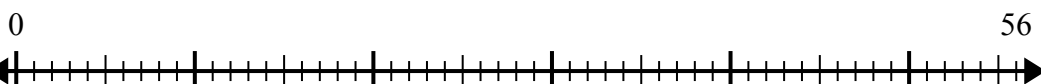
8)  $20:4=$



9)  $20:5=$



10)  $56:8=$



**Отвѣты**

1. \_\_\_\_\_

2. \_\_\_\_\_

3. \_\_\_\_\_

4. \_\_\_\_\_

5. \_\_\_\_\_

6. \_\_\_\_\_

7. \_\_\_\_\_

8. \_\_\_\_\_

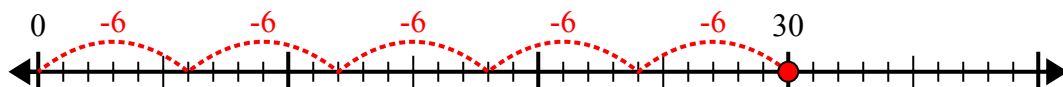
9. \_\_\_\_\_

10. \_\_\_\_\_

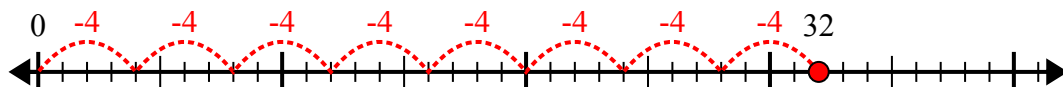


Используйте числовую прямую для решения задачи деления.

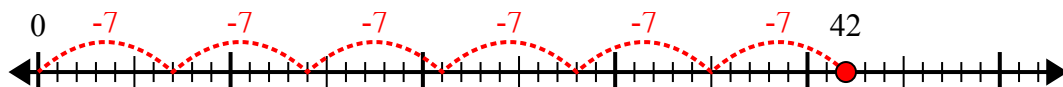
1)  $30:6=$



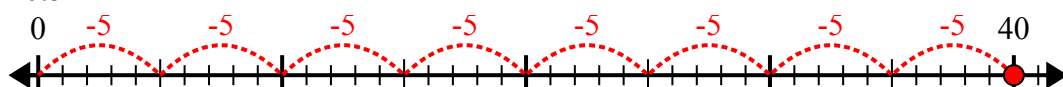
2)  $32:4=$



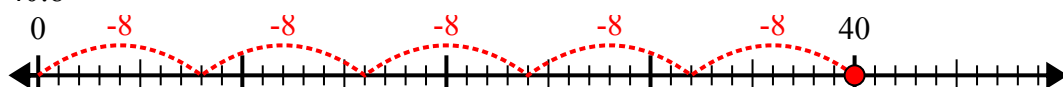
3)  $42:7=$



4)  $40:5=$



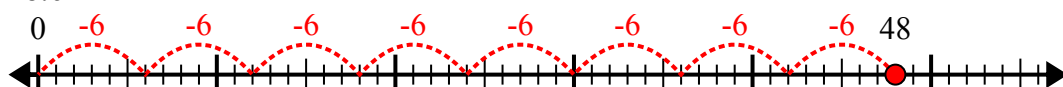
5)  $40:8=$



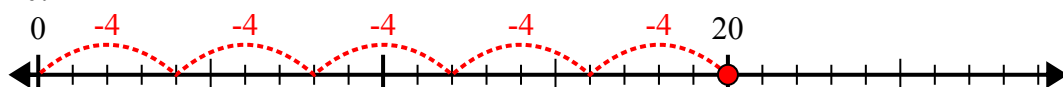
6)  $42:6=$



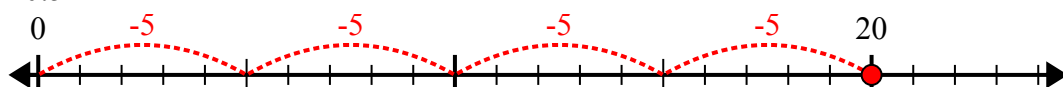
7)  $48:6=$



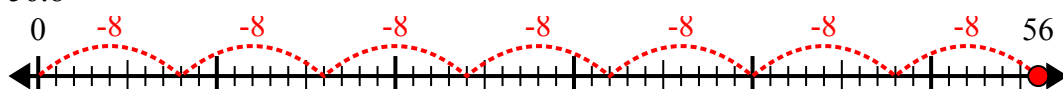
8)  $20:4=$



9)  $20:5=$



10)  $56:8=$



**ОТВЕТЫ**

1. 5

2. 8

3. 6

4. 8

5. 5

6. 7

7. 8

8. 5

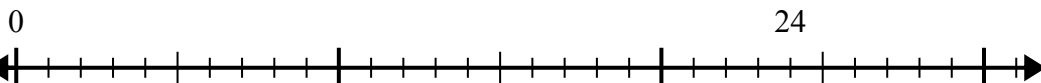
9. 4

10. 7

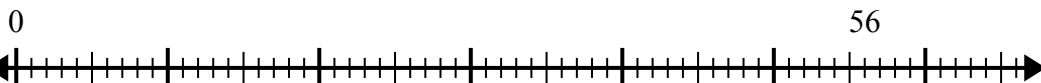


Используйте числовую прямую для решения задачи деления.

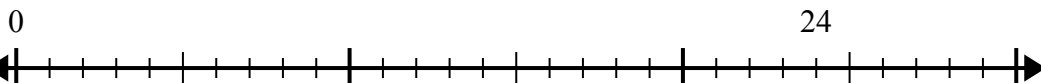
1)  $24:8=$



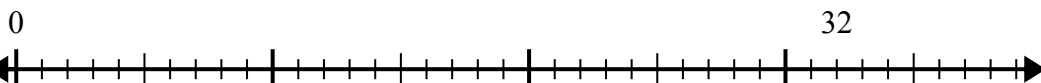
2)  $56:8=$



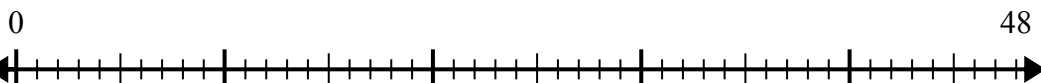
3)  $24:4=$



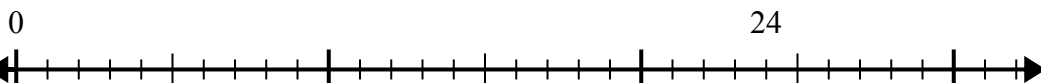
4)  $32:4=$



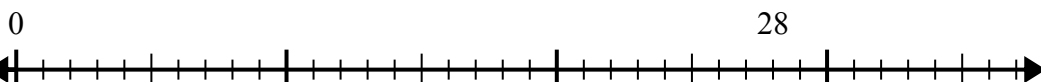
5)  $48:8=$



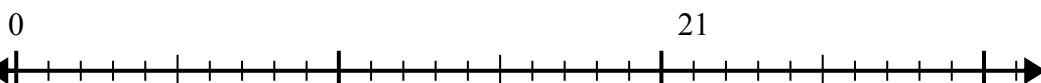
6)  $24:6=$



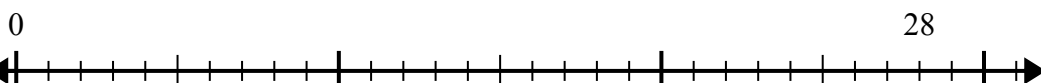
7)  $28:4=$



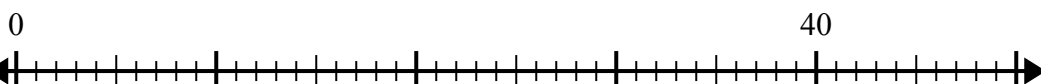
8)  $21:7=$



9)  $28:7=$



10)  $40:5=$



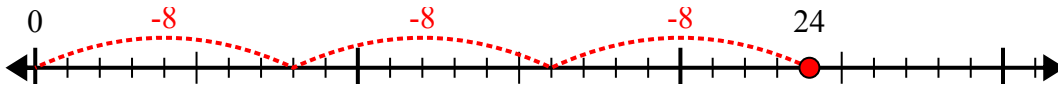
**Отв**ты

1. \_\_\_\_\_
2. \_\_\_\_\_
3. \_\_\_\_\_
4. \_\_\_\_\_
5. \_\_\_\_\_
6. \_\_\_\_\_
7. \_\_\_\_\_
8. \_\_\_\_\_
9. \_\_\_\_\_
10. \_\_\_\_\_

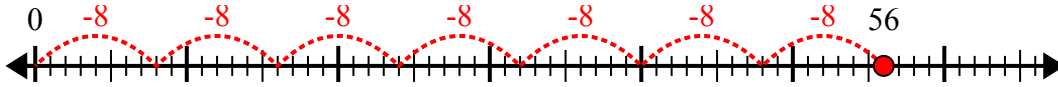


Используйте числовую прямую для решения задачи деления.

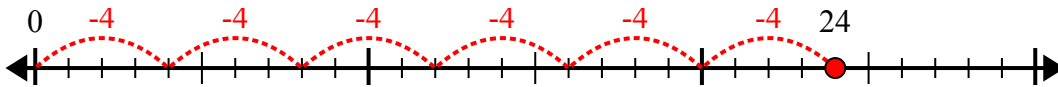
1)  $24:8=$



2)  $56:8=$



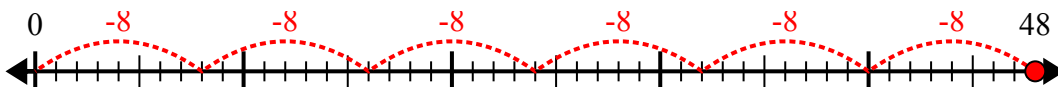
3)  $24:4=$



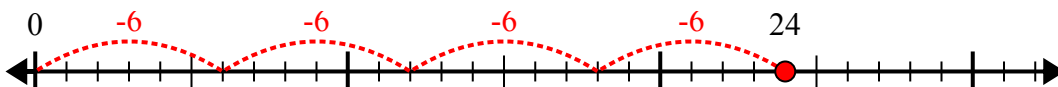
4)  $32:4=$



5)  $48:8=$



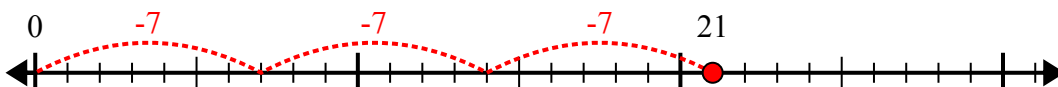
6)  $24:6=$



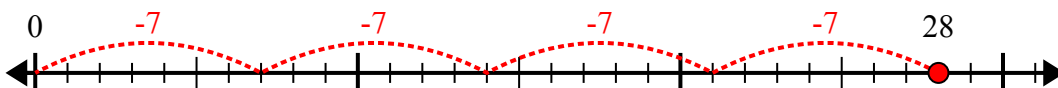
7)  $28:4=$



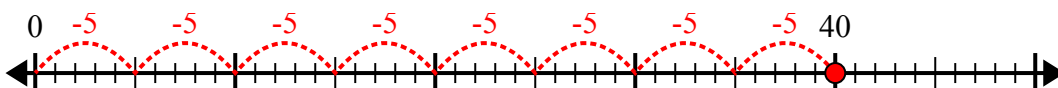
8)  $21:7=$



9)  $28:7=$



10)  $40:5=$



**Ответы**

1. 3

2. 7

3. 6

4. 8

5. 6

6. 4

7. 7

8. 3

9. 4

10. 8

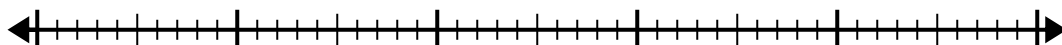


Используйте числовую прямую для решения задачи деления.

1)  $40:5=$

0

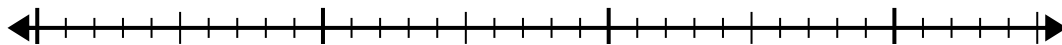
40



2)  $28:4=$

0

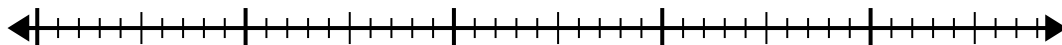
28



3)  $42:6=$

0

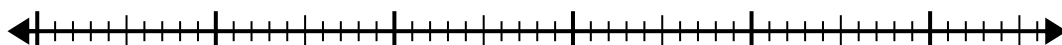
42



4)  $56:8=$

0


56



5)  $56:7=$

0

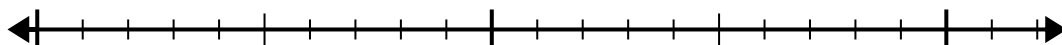
56



6)  $20:5=$

0

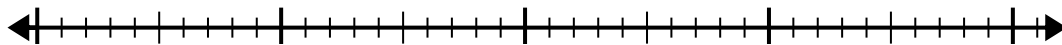
20



7)  $35:7=$

0

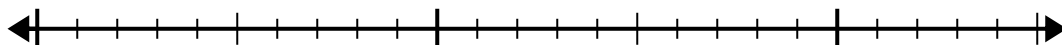
35



8)  $24:8=$

0

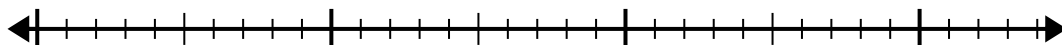
24



9)  $30:5=$

0

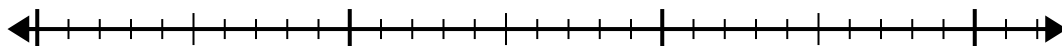
30



10)  $32:4=$

0

32



**Ответы**

1. \_\_\_\_\_

2. \_\_\_\_\_

3. \_\_\_\_\_

4. \_\_\_\_\_

5. \_\_\_\_\_

6. \_\_\_\_\_

7. \_\_\_\_\_

8. \_\_\_\_\_

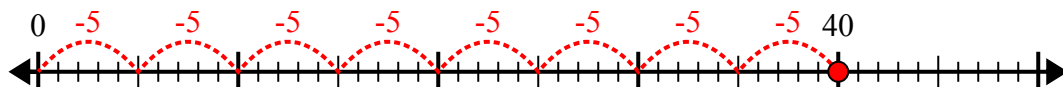
9. \_\_\_\_\_

10. \_\_\_\_\_

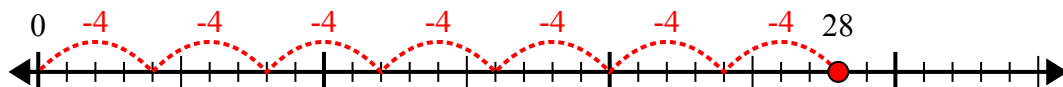


Используйте числовую прямую для решения задачи деления.

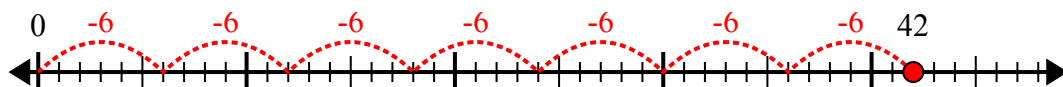
1)  $40:5=$



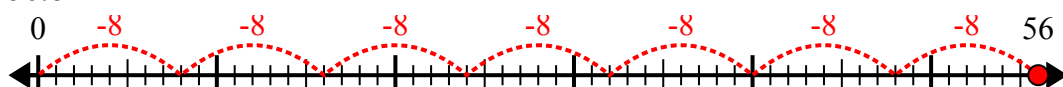
2)  $28:4=$



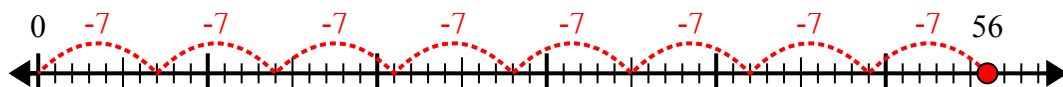
3)  $42:6=$



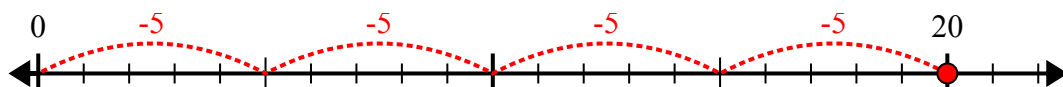
4)  $56:8=$



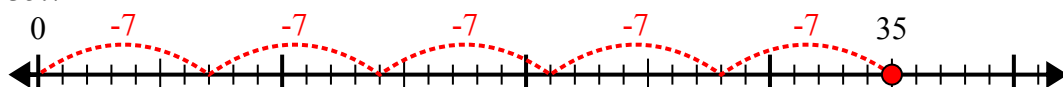
5)  $56:7=$



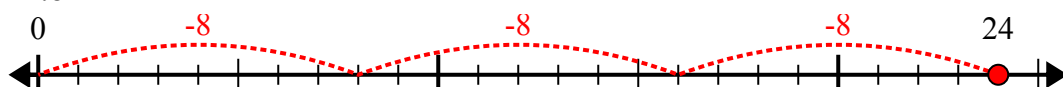
6)  $20:5=$



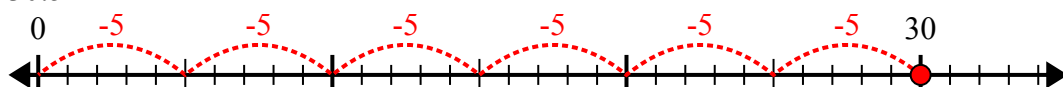
7)  $35:7=$



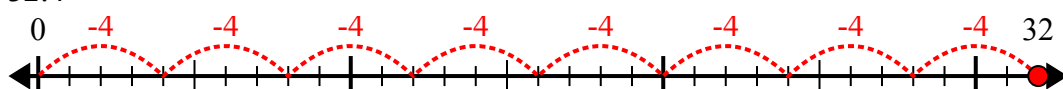
8)  $24:8=$



9)  $30:5=$



10)  $32:4=$



**ОТВЕТЫ**

1. 8

2. 7

3. 7

4. 7

5. 8

6. 4

7. 5

8. 3

9. 6

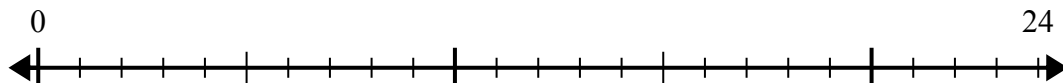
10. 8



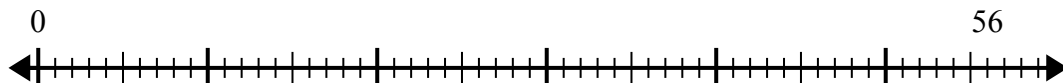


Используйте числовую прямую для решения задачи деления.

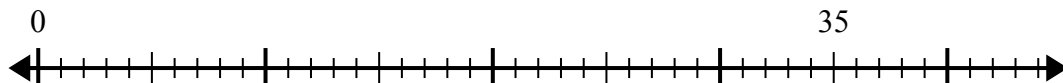
1)  $24:4=$



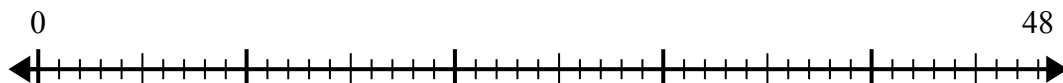
2)  $56:8=$



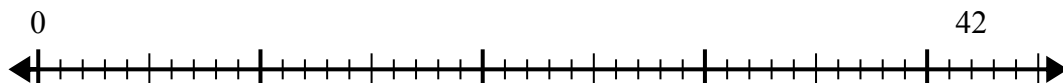
3)  $35:5=$



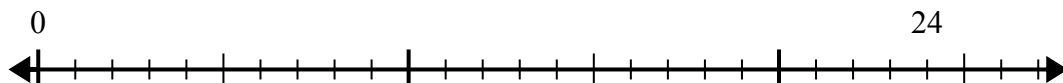
4)  $48:8=$



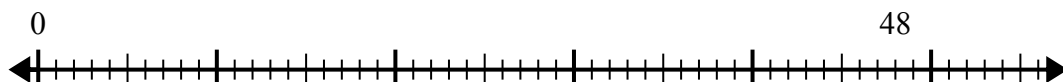
5)  $42:6=$



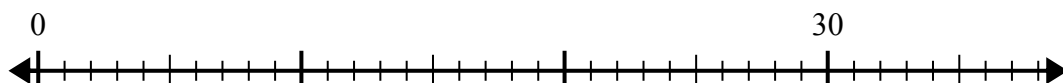
6)  $24:6=$



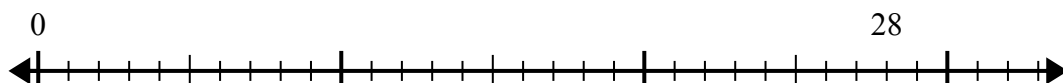
7)  $48:6=$



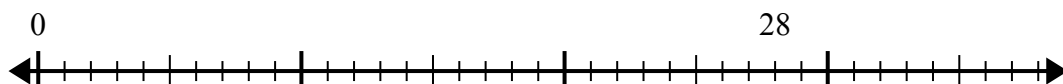
8)  $30:5=$



9)  $28:7=$



10)  $28:4=$



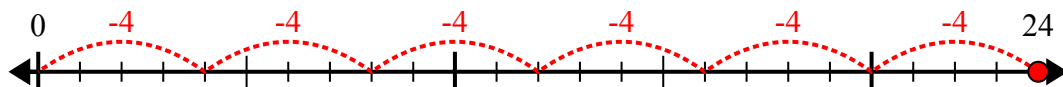
**Отв**еты

- 1. \_\_\_\_\_
- 2. \_\_\_\_\_
- 3. \_\_\_\_\_
- 4. \_\_\_\_\_
- 5. \_\_\_\_\_
- 6. \_\_\_\_\_
- 7. \_\_\_\_\_
- 8. \_\_\_\_\_
- 9. \_\_\_\_\_
- 10. \_\_\_\_\_

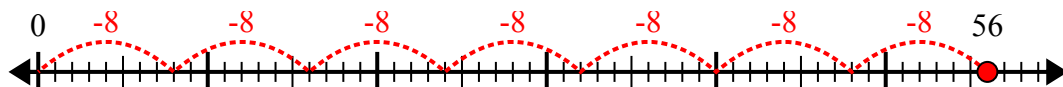


Используйте числовую прямую для решения задачи деления.

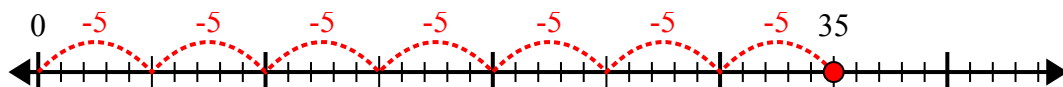
1)  $24:4=$



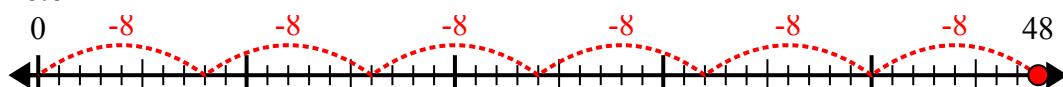
2)  $56:8=$



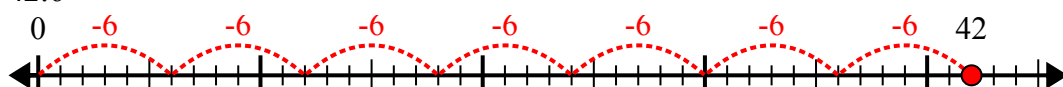
3)  $35:5=$



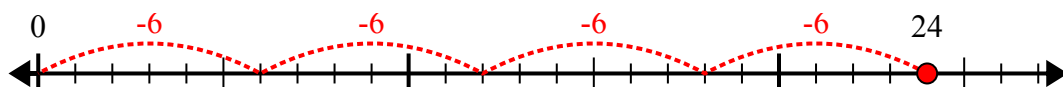
4)  $48:8=$



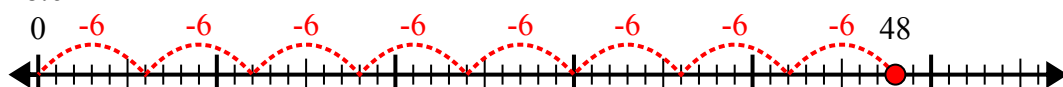
5)  $42:6=$



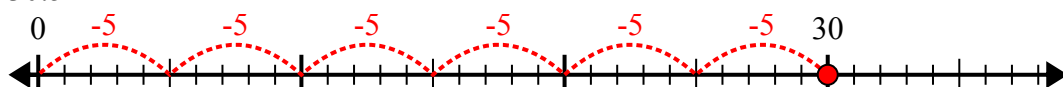
6)  $24:6=$



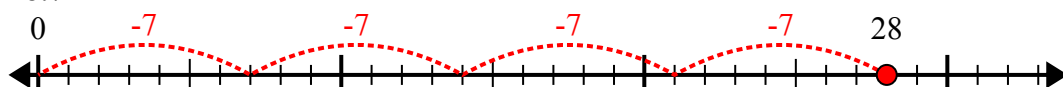
7)  $48:6=$



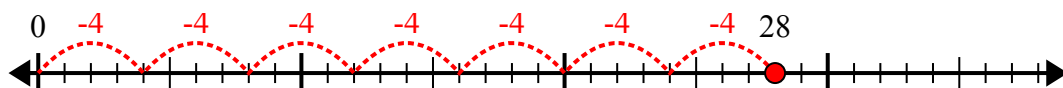
8)  $30:5=$



9)  $28:7=$



10)  $28:4=$



**ОТВЕТЫ**

1. 6

2. 7

3. 7

4. 6

5. 7

6. 4

7. 8

8. 6

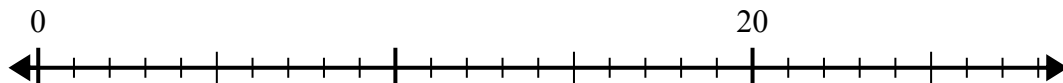
9. 4

10. 7

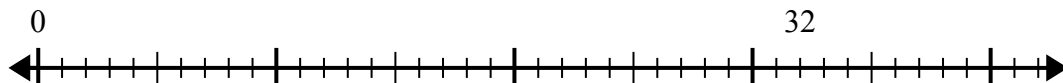


Используйте числовую прямую для решения задачи деления.

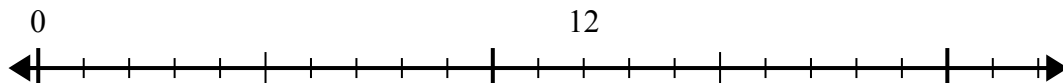
1)  $20:4=$



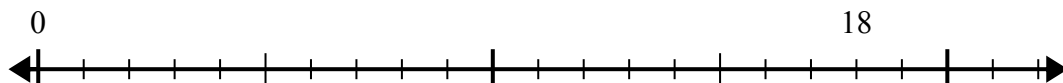
2)  $32:8=$



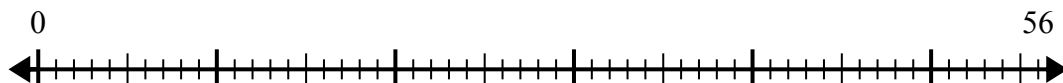
3)  $12:4=$



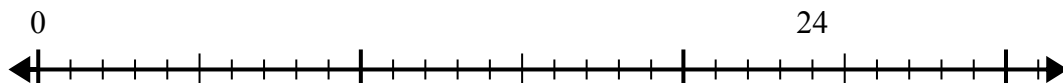
4)  $18:6=$



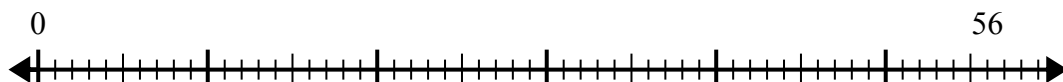
5)  $56:8=$



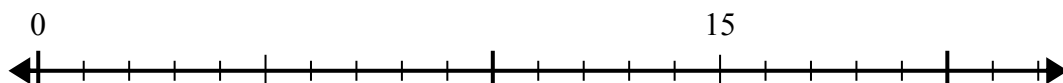
6)  $24:8=$



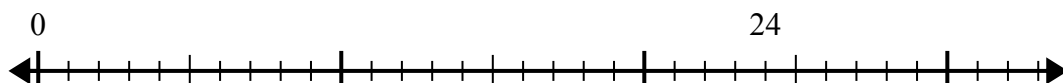
7)  $56:7=$



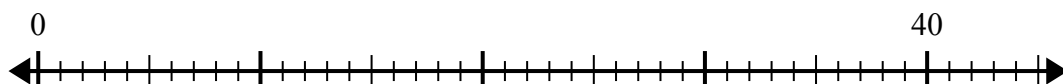
8)  $15:5=$



9)  $24:4=$



10)  $40:5=$



**Отв**еты

1. \_\_\_\_\_

2. \_\_\_\_\_

3. \_\_\_\_\_

4. \_\_\_\_\_

5. \_\_\_\_\_

6. \_\_\_\_\_

7. \_\_\_\_\_

8. \_\_\_\_\_

9. \_\_\_\_\_

10. \_\_\_\_\_

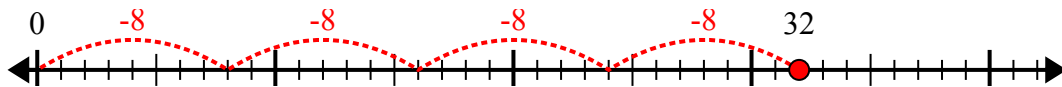


Используйте числовую прямую для решения задачи деления.

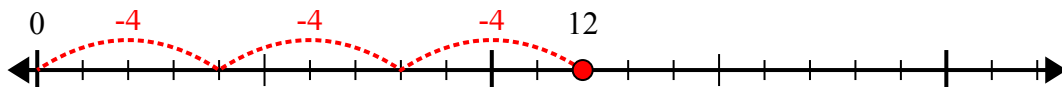
1)  $20:4=$



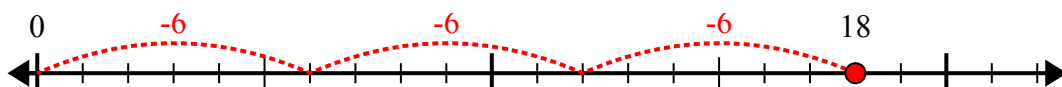
2)  $32:8=$



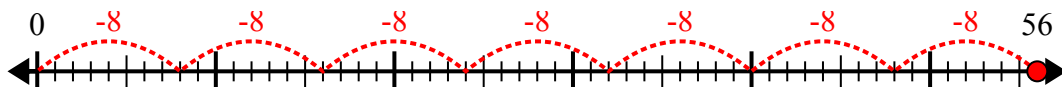
3)  $12:4=$



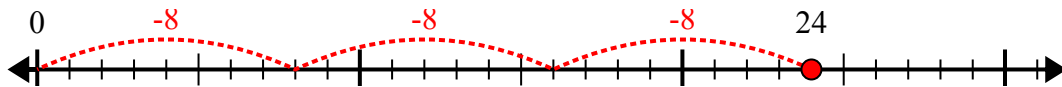
4)  $18:6=$



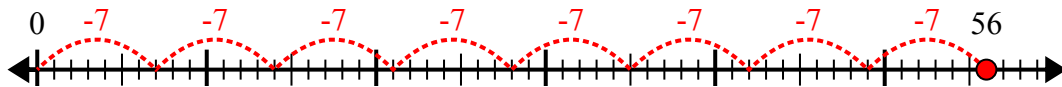
5)  $56:8=$



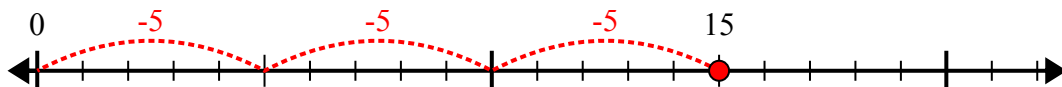
6)  $24:8=$



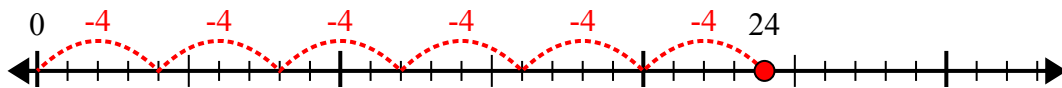
7)  $56:7=$



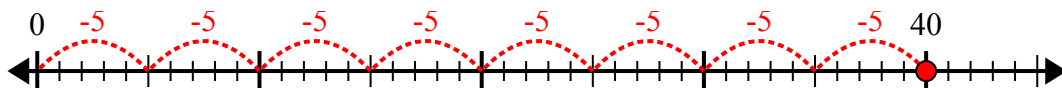
8)  $15:5=$



9)  $24:4=$



10)  $40:5=$



**ОТВЕТЫ**

1. 5

2. 4

3. 3

4. 3

5. 7

6. 3

7. 8

8. 3

9. 6

10. 8