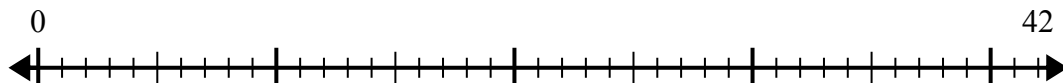


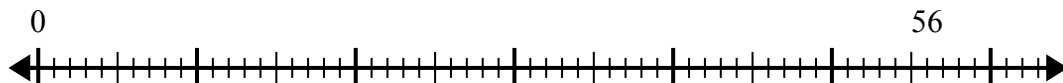


Используйте числовую прямую для решения задачи деления.

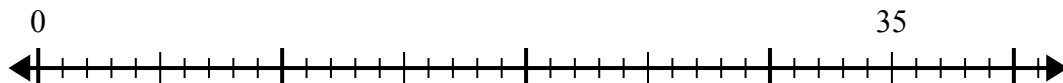
1) $42:7=$



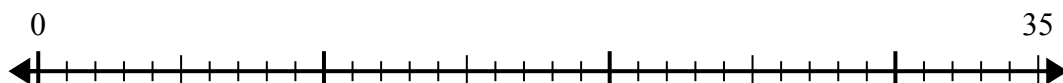
2) $56:7=$



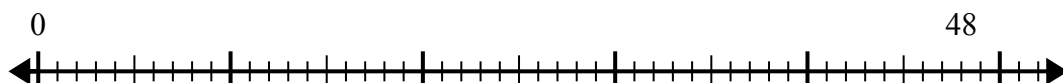
3) $35:7=$



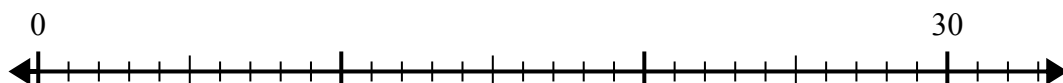
4) $35:5=$



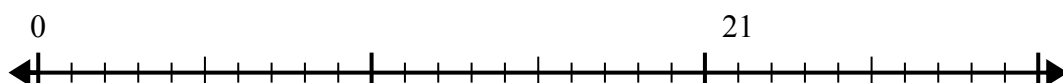
5) $48:8=$



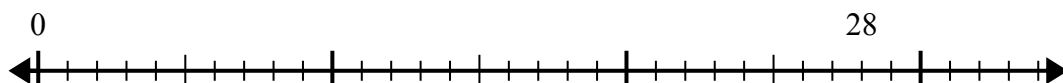
6) $30:6=$



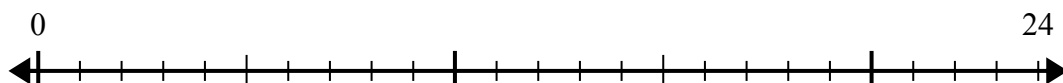
7) $21:7=$



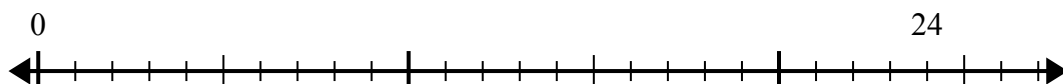
8) $28:4=$



9) $24:6=$



10) $24:8=$



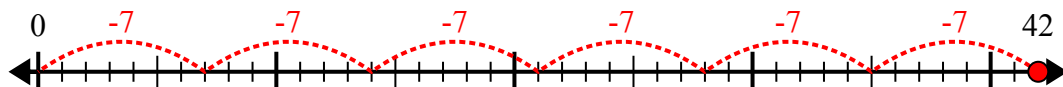
Ответы

- 1. _____
- 2. _____
- 3. _____
- 4. _____
- 5. _____
- 6. _____
- 7. _____
- 8. _____
- 9. _____
- 10. _____

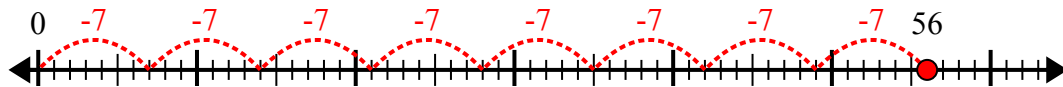


Используйте числовую прямую для решения задачи деления.

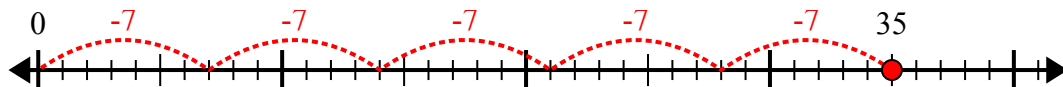
1) $42:7=$



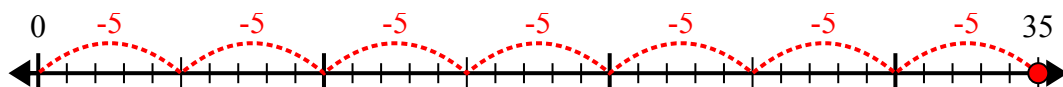
2) $56:7=$



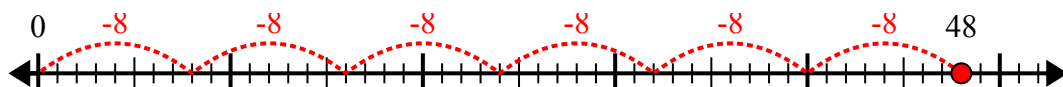
3) $35:7=$



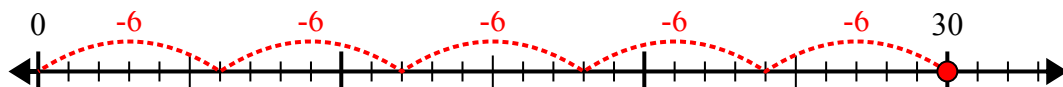
4) $35:5=$



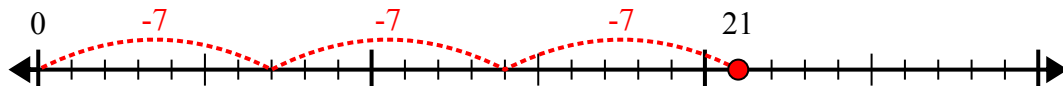
5) $48:8=$



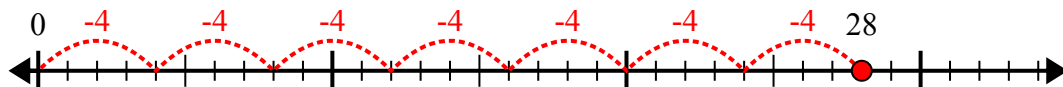
6) $30:6=$



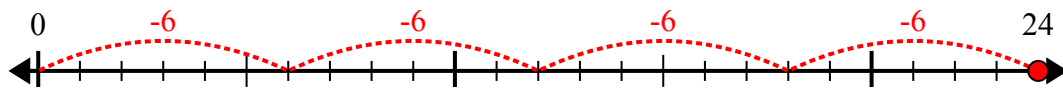
7) $21:7=$



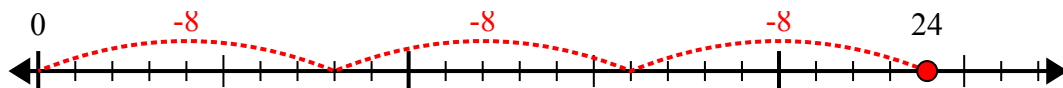
8) $28:4=$



9) $24:6=$



10) $24:8=$



ОТВЕТЫ

1. 6

2. 8

3. 5

4. 7

5. 6

6. 5

7. 3

8. 7

9. 4

10. 3