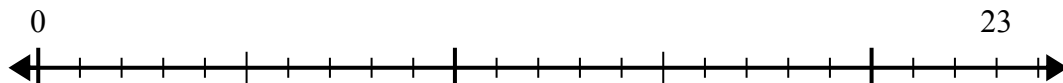




Используйте числовую прямую для решения задачи деления.

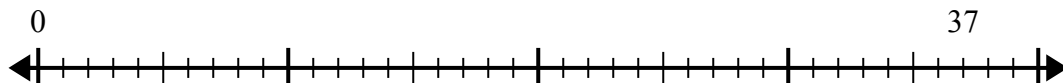
Отвeты

1) $23:4=$



1. _____

2) $37:8=$



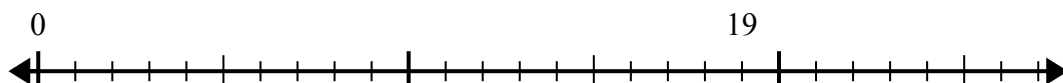
2. _____

3) $15:4=$



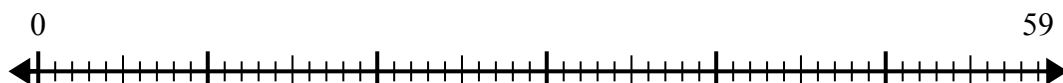
3. _____

4) $19:6=$



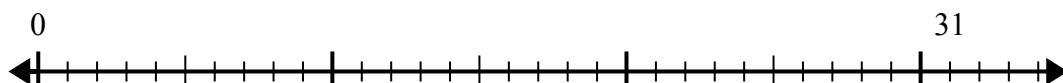
4. _____

5) $59:8=$



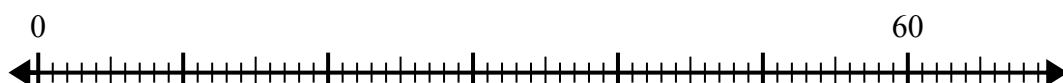
5. _____

6) $31:8=$



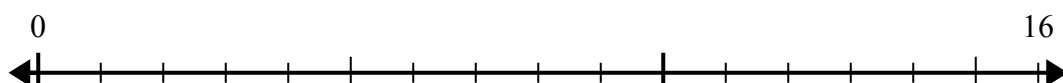
6. _____

7) $60:7=$



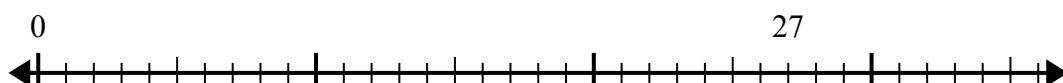
7. _____

8) $16:5=$



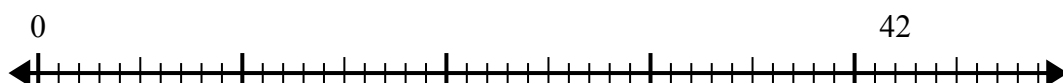
8. _____

9) $27:4=$



9. _____

10) $42:5=$

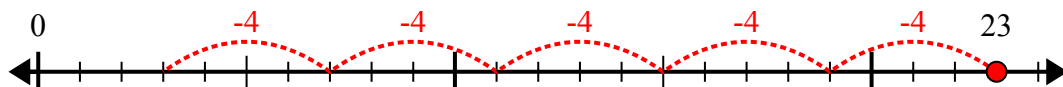


10. _____

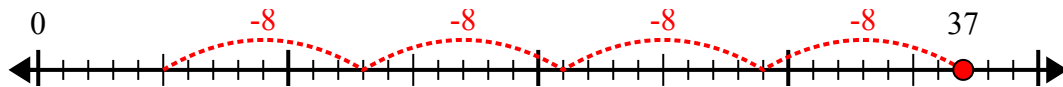


Используйте числовую прямую для решения задачи деления.

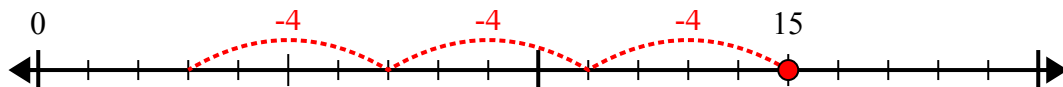
1) $23:4=$



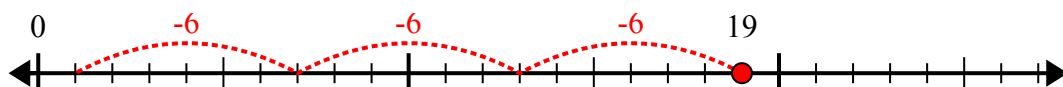
2) $37:8=$



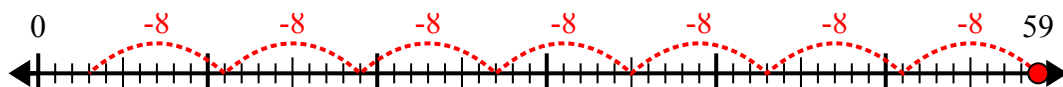
3) $15:4=$



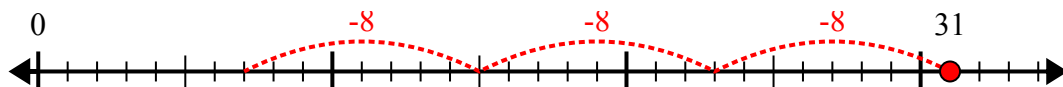
4) $19:6=$



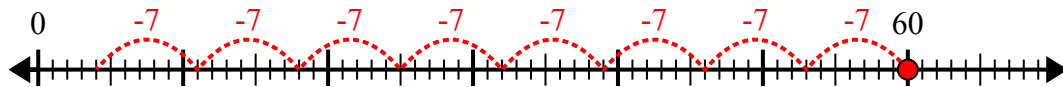
5) $59:8=$



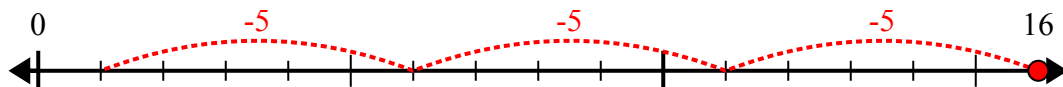
6) $31:8=$



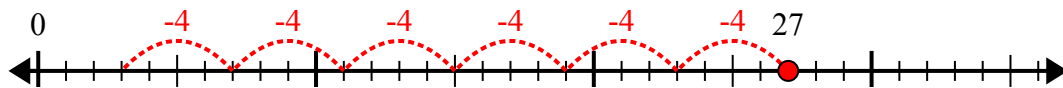
7) $60:7=$



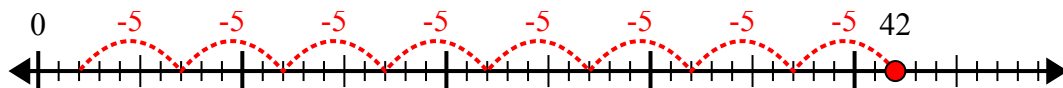
8) $16:5=$



9) $27:4=$



10) $42:5=$



Отвeты

1. 5r3

2. 4r5

3. 3r3

4. 3r1

5. 7r3

6. 3r7

7. 8r4

8. 3r1

9. 6r3

10. 8r2