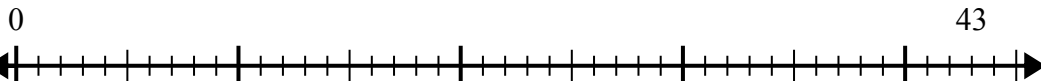




Используйте числовую прямую для решения задачи деления.

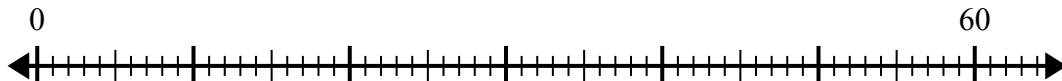
Ответы

1) $43:5=$



1. _____

2) $60:7=$



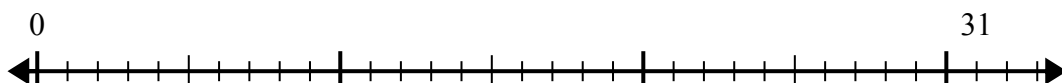
2. _____

3) $16:5=$



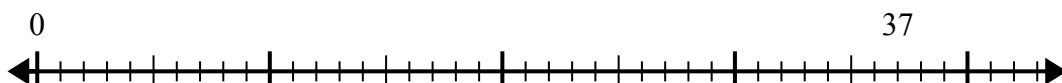
3. _____

4) $31:4=$



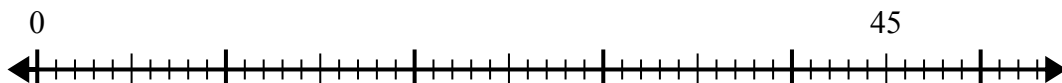
4. _____

5) $37:7=$



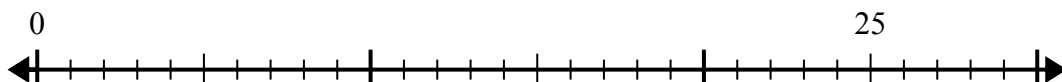
5. _____

6) $45:8=$



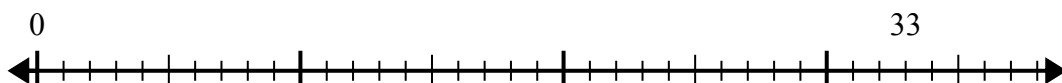
6. _____

7) $25:4=$



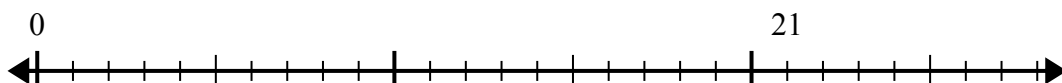
7. _____

8) $33:5=$



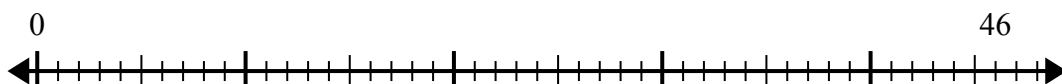
8. _____

9) $21:4=$



9. _____

10) $46:6=$

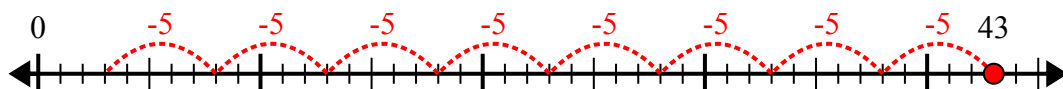


10. _____

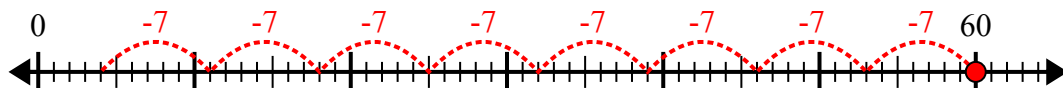


Используйте числовую прямую для решения задачи деления.

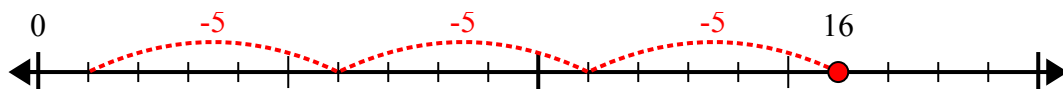
1) $43:5=$



2) $60:7=$



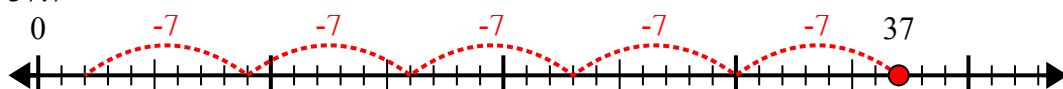
3) $16:5=$



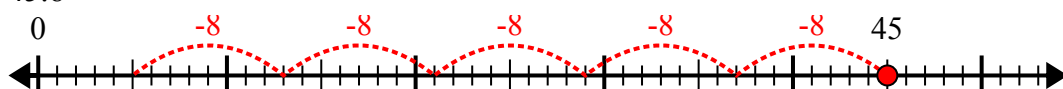
4) $31:4=$



5) $37:7=$



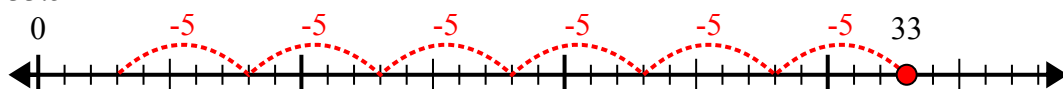
6) $45:8=$



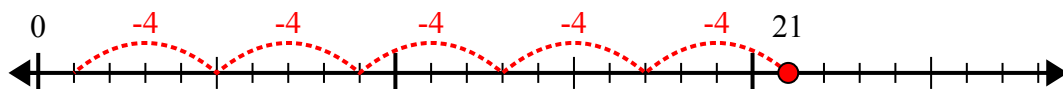
7) $25:4=$



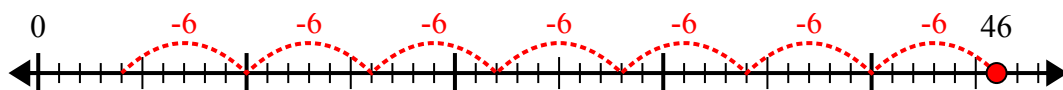
8) $33:5=$



9) $21:4=$



10) $46:6=$



ОТВЕТЫ

1. 8r3

2. 8r4

3. 3r1

4. 7r3

5. 5r2

6. 5r5

7. 6r1

8. 6r3

9. 5r1

10. 7r4