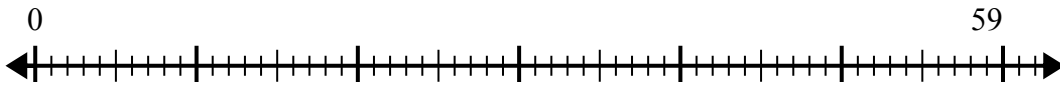




Используйте числовую прямую для решения задачи деления.

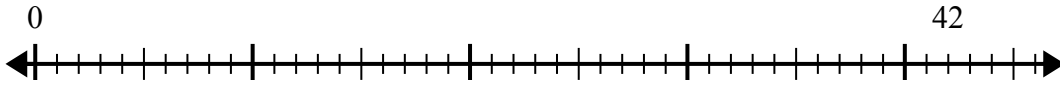
**ОТВЕТЫ**

1)  $59:7=$



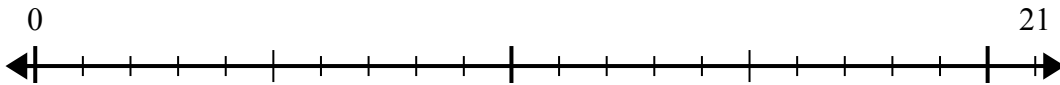
1. \_\_\_\_\_

2)  $42:5=$



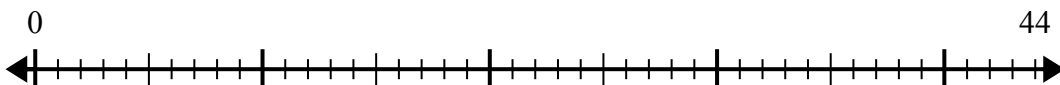
2. \_\_\_\_\_

3)  $21:4=$



3. \_\_\_\_\_

4)  $44:7=$



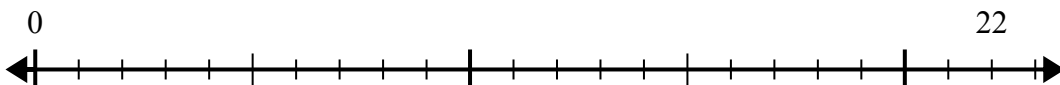
4. \_\_\_\_\_

5)  $60:8=$



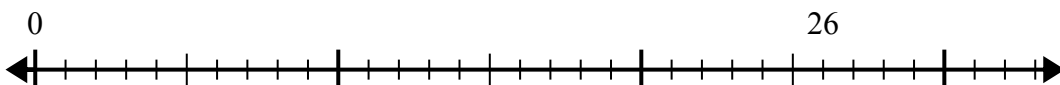
5. \_\_\_\_\_

6)  $22:5=$



6. \_\_\_\_\_

7)  $26:4=$



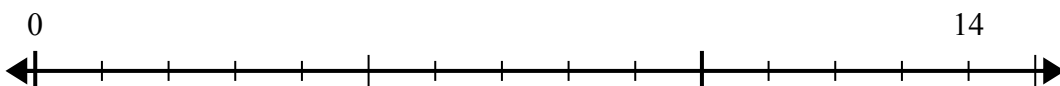
7. \_\_\_\_\_

8)  $54:8=$



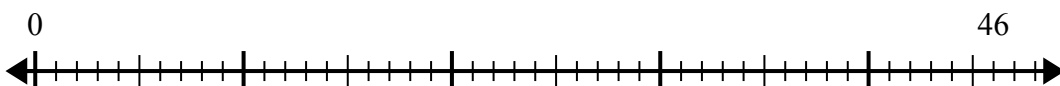
8. \_\_\_\_\_

9)  $14:4=$



9. \_\_\_\_\_

10)  $46:6=$

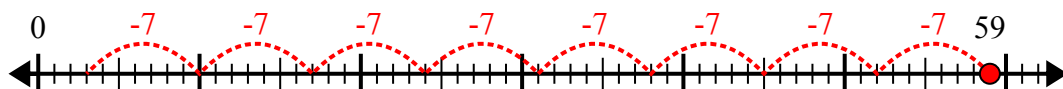


10. \_\_\_\_\_

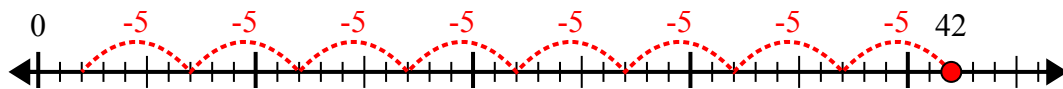


Используйте числовую прямую для решения задачи деления.

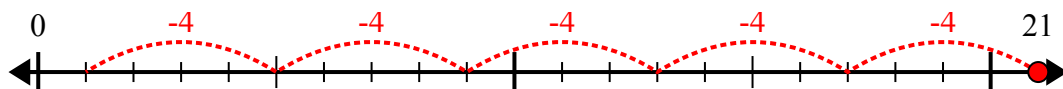
1)  $59:7=$



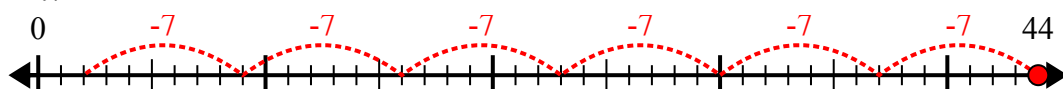
2)  $42:5=$



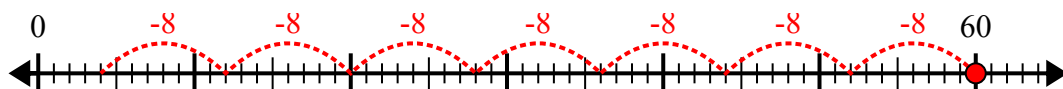
3)  $21:4=$



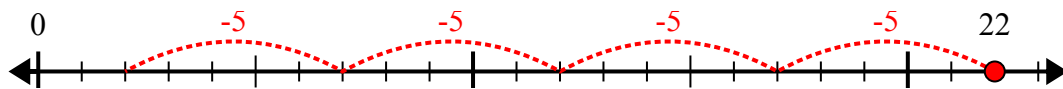
4)  $44:7=$



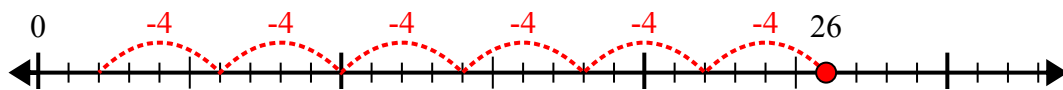
5)  $60:8=$



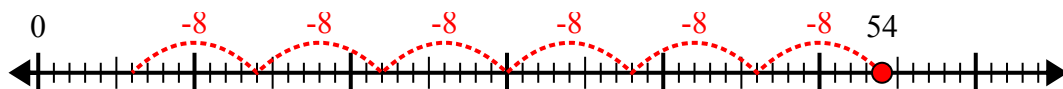
6)  $22:5=$



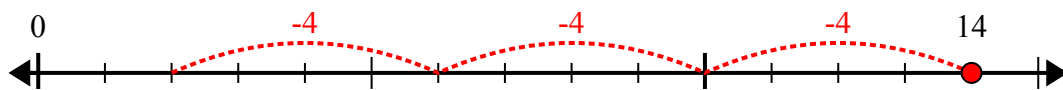
7)  $26:4=$



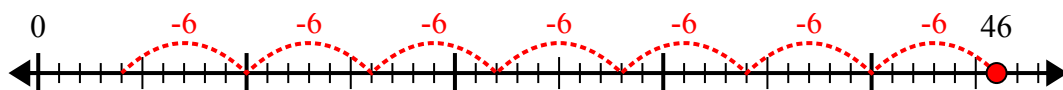
8)  $54:8=$



9)  $14:4=$



10)  $46:6=$



**Отв**еты

1. 8r3

2. 8r2

3. 5r1

4. 6r2

5. 7r4

6. 4r2

7. 6r2

8. 6r6

9. 3r2

10. 7r4