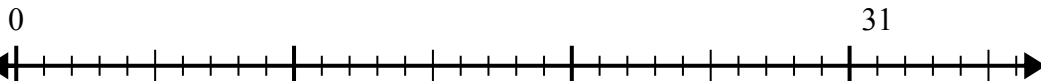


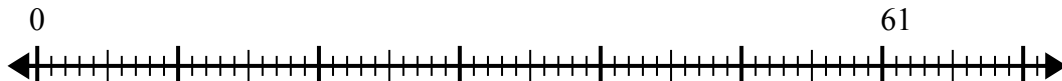


Используйте числовую прямую для решения задачи деления.

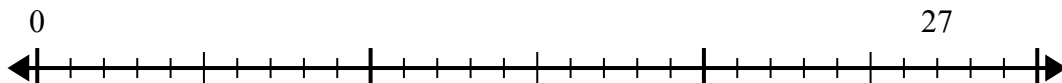
1)  $31:8=$



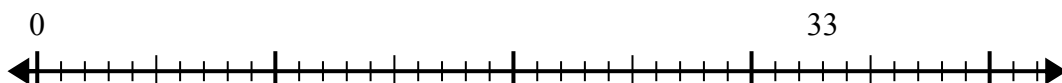
2)  $61:8=$



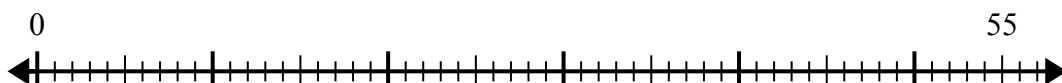
3)  $27:4=$



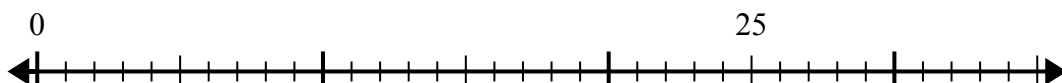
4)  $33:4=$



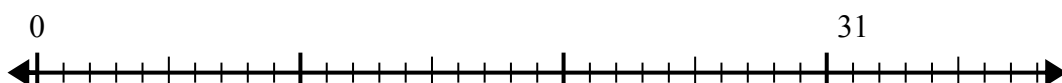
5)  $55:8=$



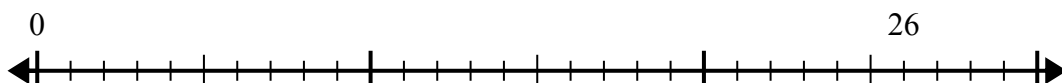
6)  $25:6=$



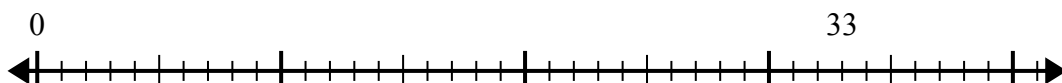
7)  $31:4=$



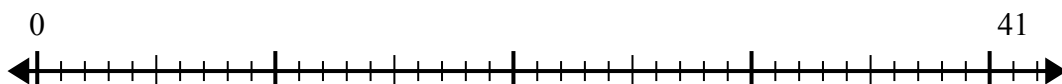
8)  $26:7=$



9)  $33:7=$



10)  $41:5=$



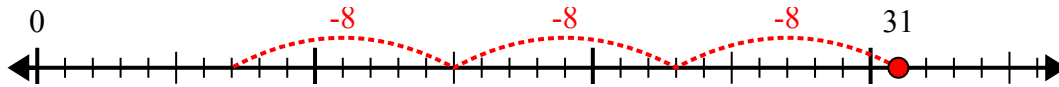
**Ответы**

1. \_\_\_\_\_
2. \_\_\_\_\_
3. \_\_\_\_\_
4. \_\_\_\_\_
5. \_\_\_\_\_
6. \_\_\_\_\_
7. \_\_\_\_\_
8. \_\_\_\_\_
9. \_\_\_\_\_
10. \_\_\_\_\_

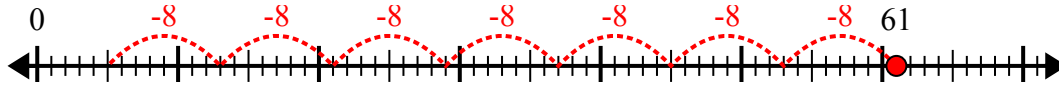


Используйте числовую прямую для решения задачи деления.

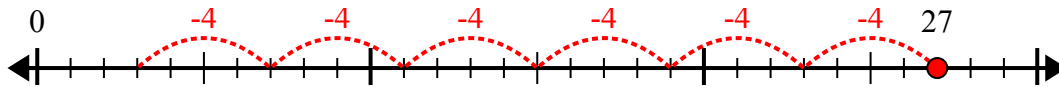
1)  $31:8=$



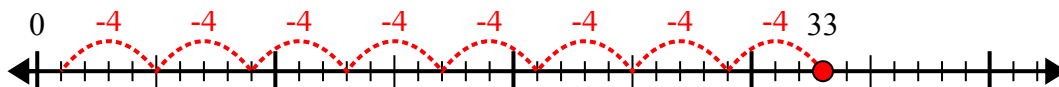
2)  $61:8=$



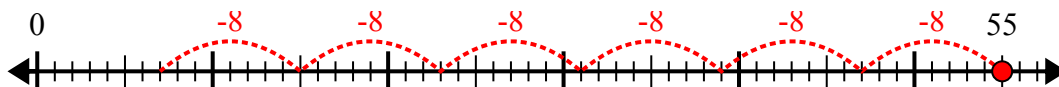
3)  $27:4=$



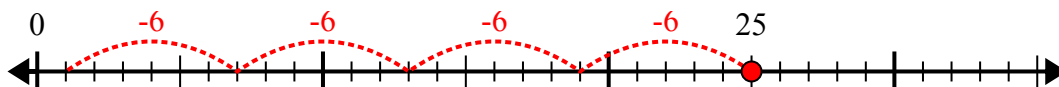
4)  $33:4=$



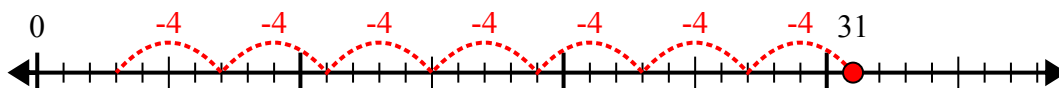
5)  $55:8=$



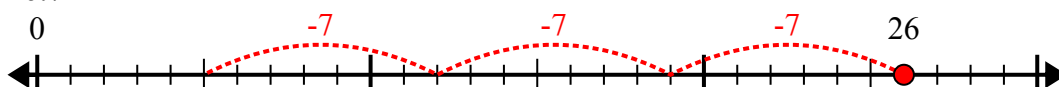
6)  $25:6=$



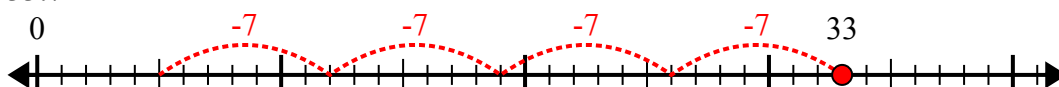
7)  $31:4=$



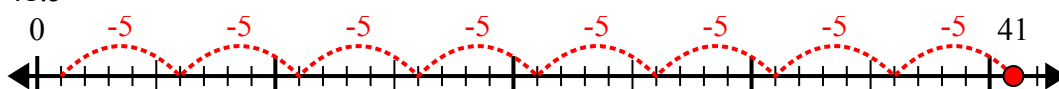
8)  $26:7=$



9)  $33:7=$



10)  $41:5=$



**Ответы**

1. 3r7

2. 7r5

3. 6r3

4. 8r1

5. 6r7

6. 4r1

7. 7r3

8. 3r5

9. 4r5

10. 8r1