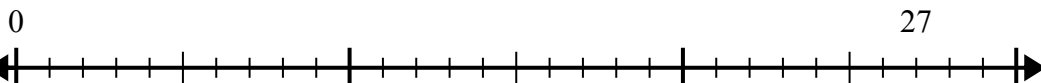




Используйте числовую прямую для решения задачи деления.

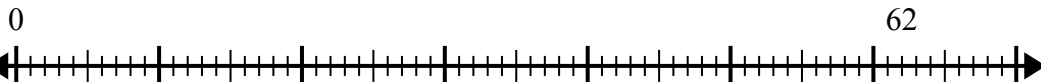
Ответы

1) $27:4=$



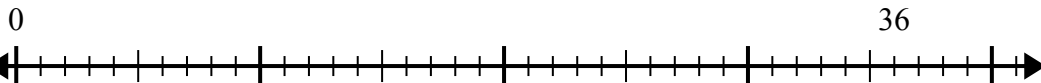
1. _____

2) $62:8=$



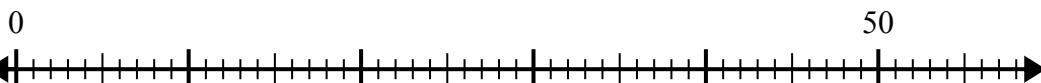
2. _____

3) $36:5=$



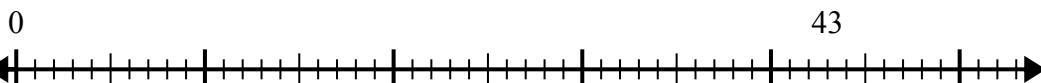
3. _____

4) $50:8=$



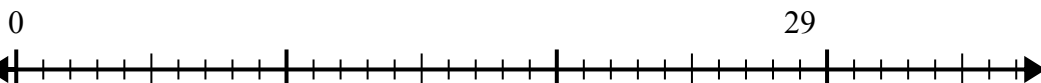
4. _____

5) $43:6=$



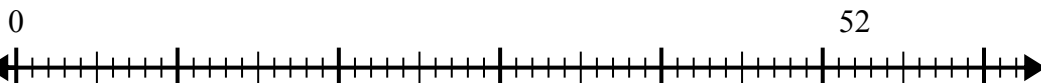
5. _____

6) $29:6=$



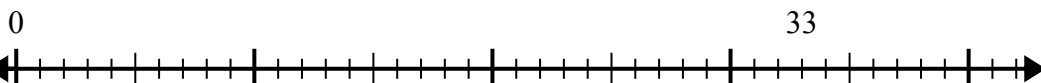
6. _____

7) $52:6=$



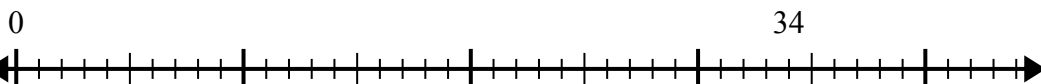
7. _____

8) $33:5=$



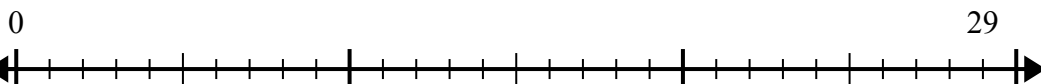
8. _____

9) $34:7=$



9. _____

10) $29:4=$

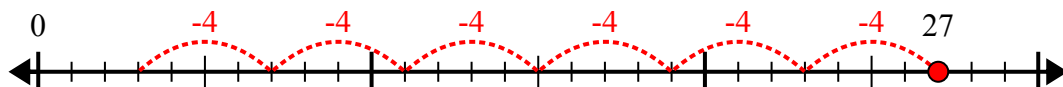


10. _____

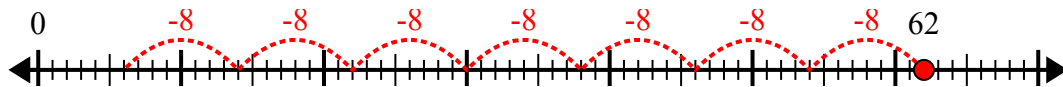


Используйте числовую прямую для решения задачи деления.

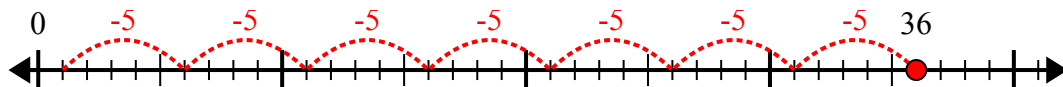
1) $27:4=$



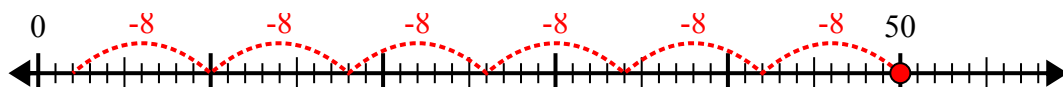
2) $62:8=$



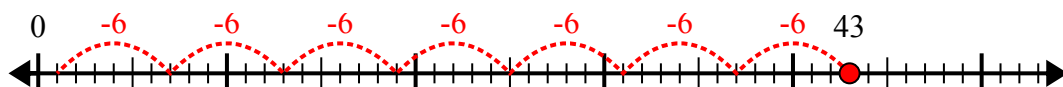
3) $36:5=$



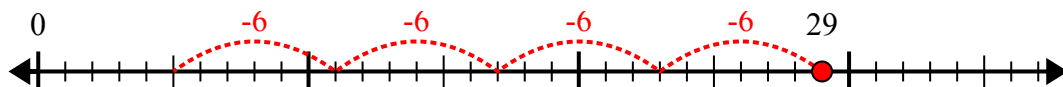
4) $50:8=$



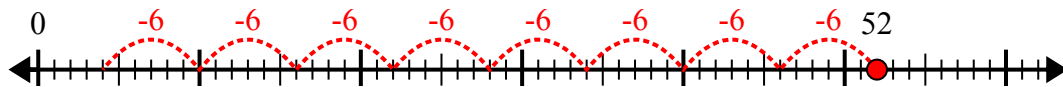
5) $43:6=$



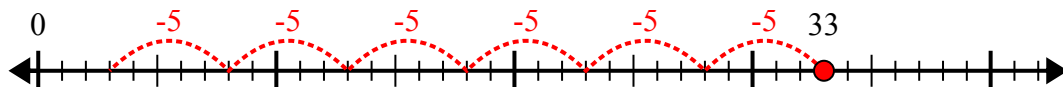
6) $29:6=$



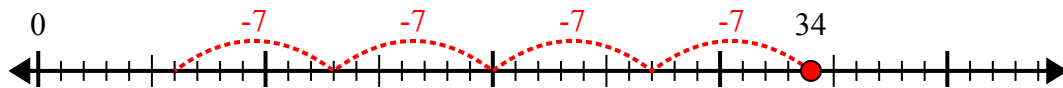
7) $52:6=$



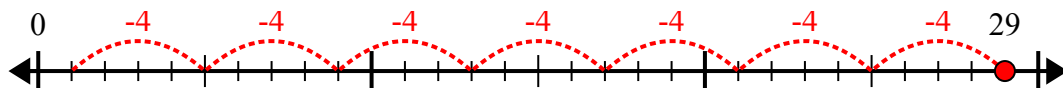
8) $33:5=$



9) $34:7=$



10) $29:4=$



ОТВЕТЫ

1. 6r3

2. 7r6

3. 7r1

4. 6r2

5. 7r1

6. 4r5

7. 8r4

8. 6r3

9. 4r6

10. 7r1