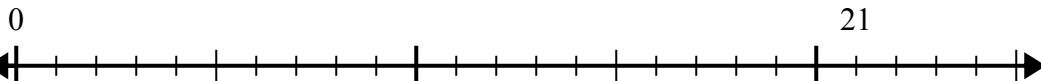


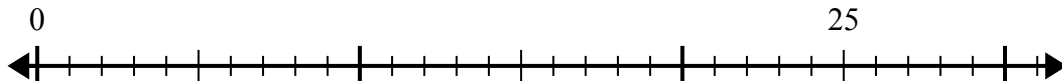


Используйте числовую прямую для решения задачи деления.

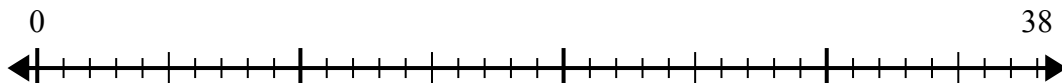
1) $21:5=$



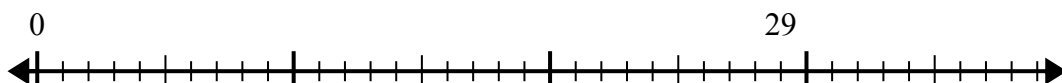
2) $25:6=$



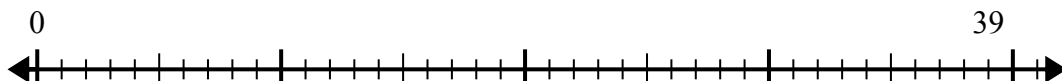
3) $38:8=$



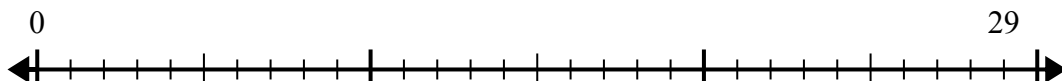
4) $29:7=$



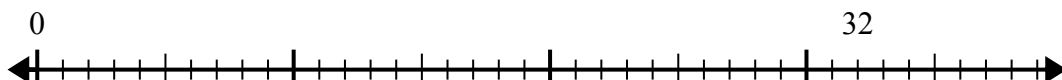
5) $39:5=$



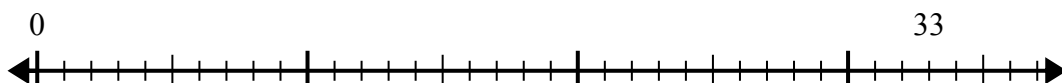
6) $29:4=$



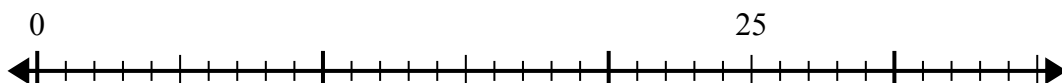
7) $32:6=$



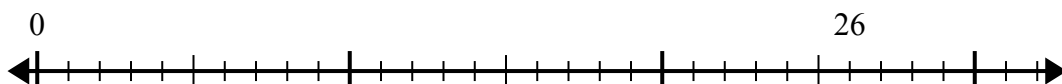
8) $33:4=$



9) $25:4=$



10) $26:7=$



Ответы

1. _____

2. _____

3. _____

4. _____

5. _____

6. _____

7. _____

8. _____

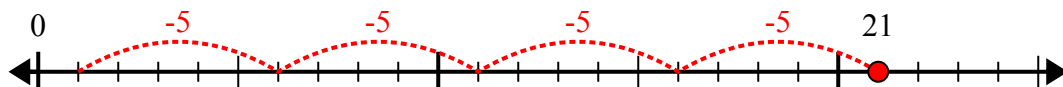
9. _____

10. _____

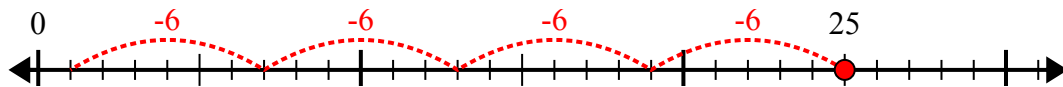


Используйте числовую прямую для решения задачи деления.

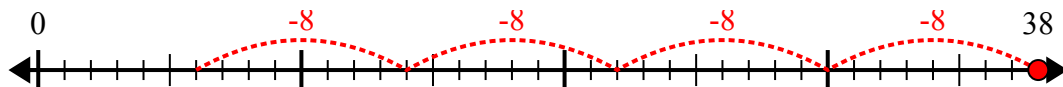
1) $21:5=$



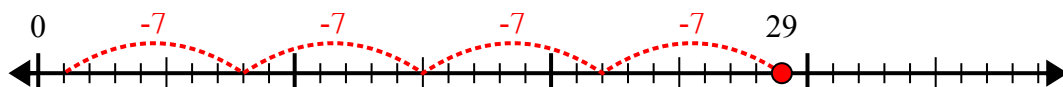
2) $25:6=$



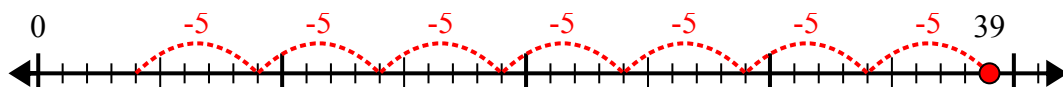
3) $38:8=$



4) $29:7=$



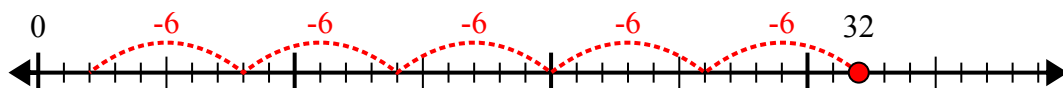
5) $39:5=$



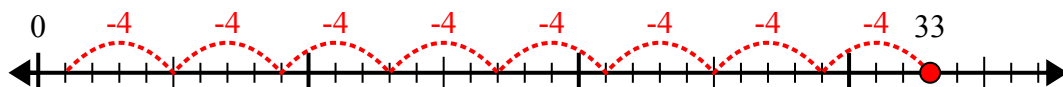
6) $29:4=$



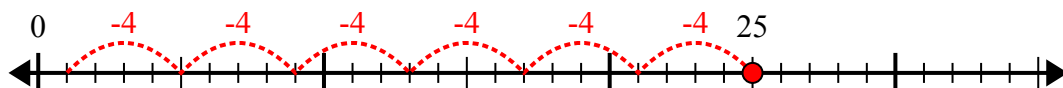
7) $32:6=$



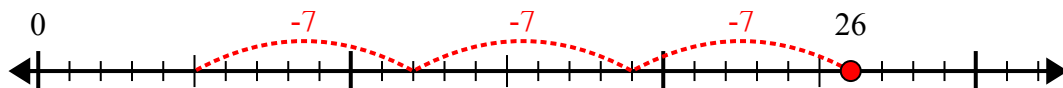
8) $33:4=$



9) $25:4=$



10) $26:7=$



ОТВЕТЫ

1. 4r1

2. 4r1

3. 4r6

4. 4r1

5. 7r4

6. 7r1

7. 5r2

8. 8r1

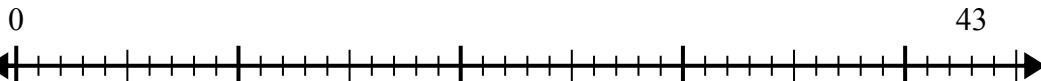
9. 6r1

10. 3r5

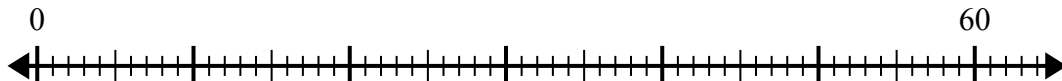


Используйте числовую прямую для решения задачи деления.

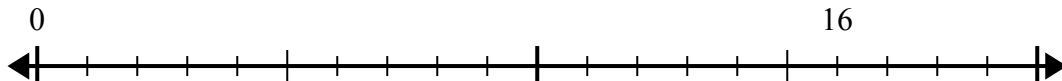
1) $43:5=$



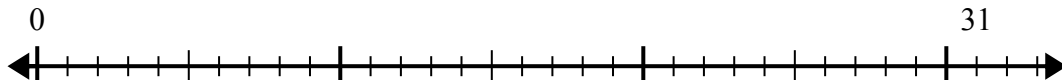
2) $60:7=$



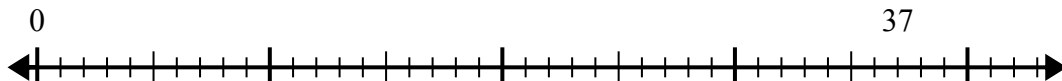
3) $16:5=$



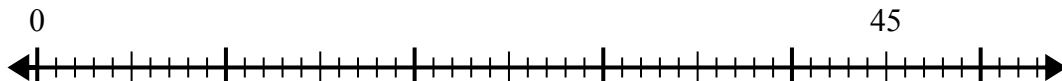
4) $31:4=$



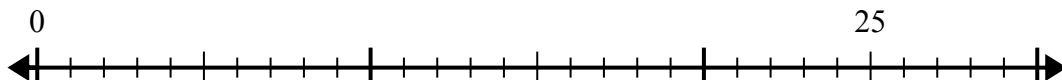
5) $37:7=$



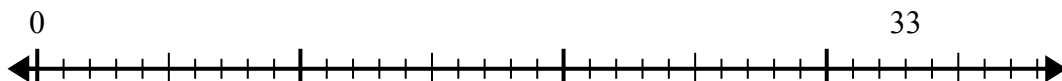
6) $45:8=$



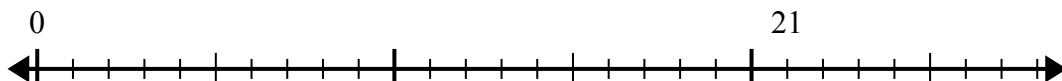
7) $25:4=$



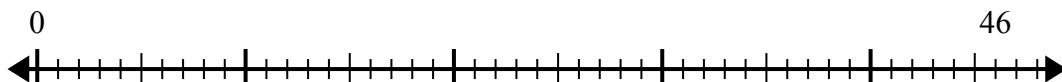
8) $33:5=$



9) $21:4=$



10) $46:6=$



Ответы

1. _____

2. _____

3. _____

4. _____

5. _____

6. _____

7. _____

8. _____

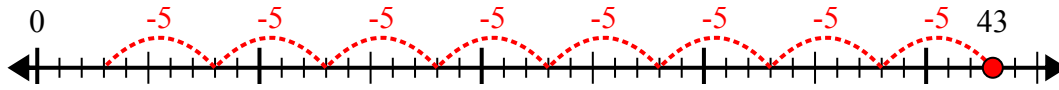
9. _____

10. _____

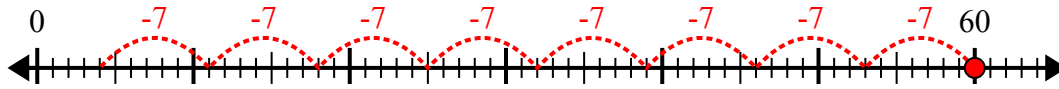


Используйте числовую прямую для решения задачи деления.

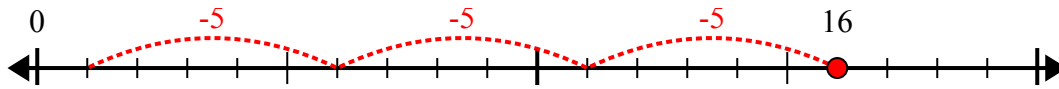
1) $43:5=$



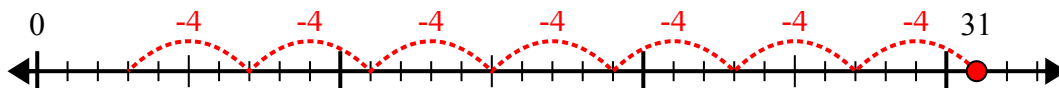
2) $60:7=$



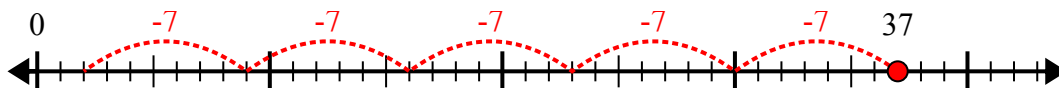
3) $16:5=$



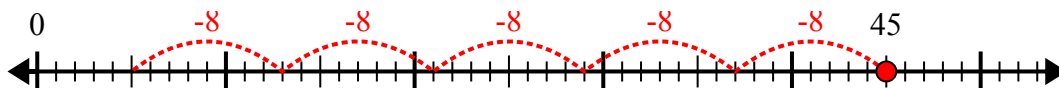
4) $31:4=$



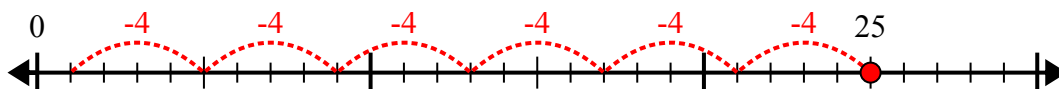
5) $37:7=$



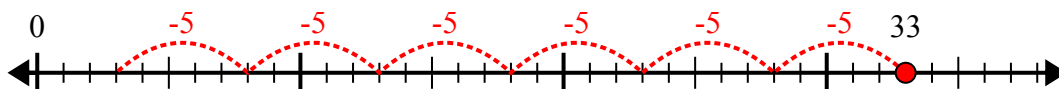
6) $45:8=$



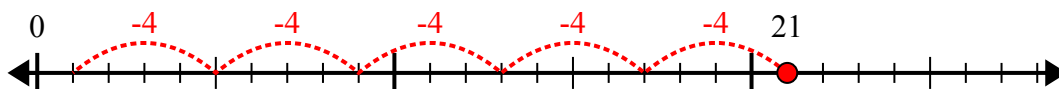
7) $25:4=$



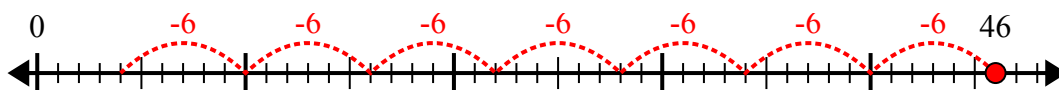
8) $33:5=$



9) $21:4=$



10) $46:6=$



Ответы

1. 8r3

2. 8r4

3. 3r1

4. 7r3

5. 5r2

6. 5r5

7. 6r1

8. 6r3

9. 5r1

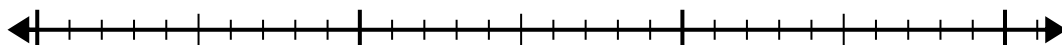
10. 7r4



Используйте числовую прямую для решения задачи деления.

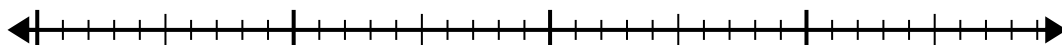
1) $23:5=$

0 23



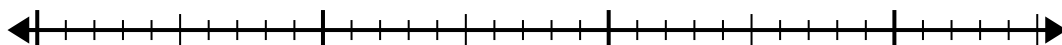
2) $30:4=$

0 30



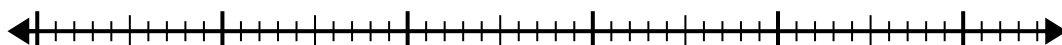
3) $33:6=$

0 33



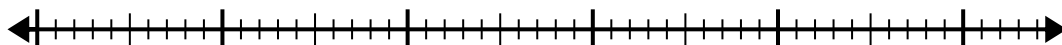
4) $44:6=$

0 44



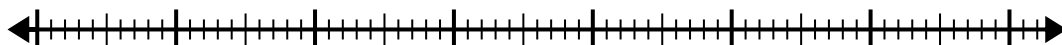
5) $50:6=$

0 50



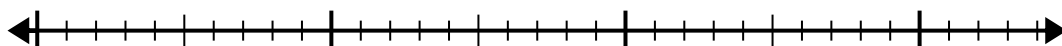
6) $62:8=$

0 62



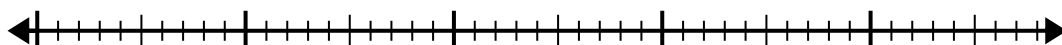
7) $26:6=$

0 26



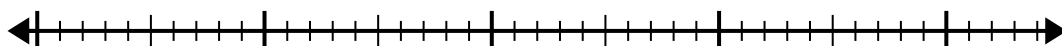
8) $43:8=$

0 43



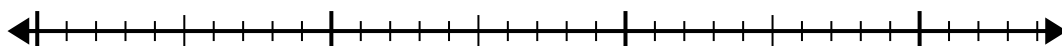
9) $44:7=$

0 44



10) $34:4=$

0 34



Ответы

1. _____

2. _____

3. _____

4. _____

5. _____

6. _____

7. _____

8. _____

9. _____

10. _____

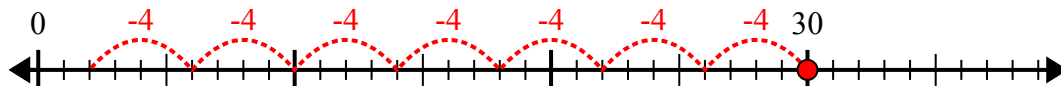


Используйте числовую прямую для решения задачи деления.

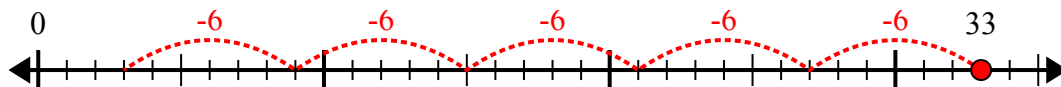
1) $23:5=$



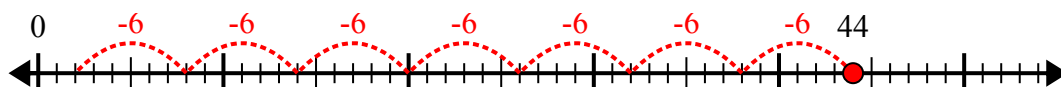
2) $30:4=$



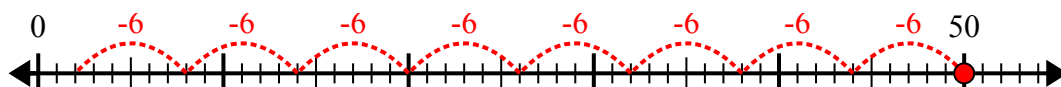
3) $33:6=$



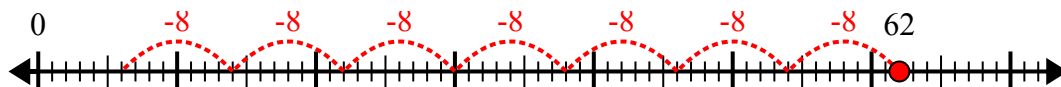
4) $44:6=$



5) $50:6=$



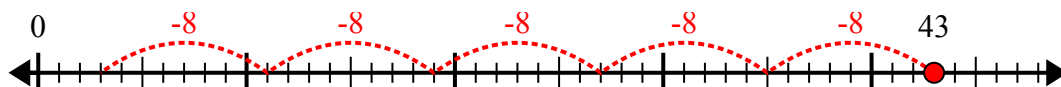
6) $62:8=$



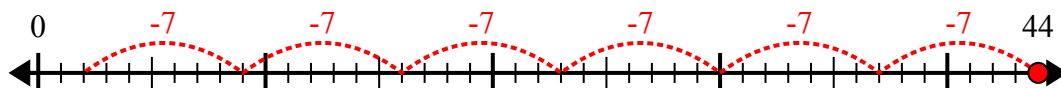
7) $26:6=$



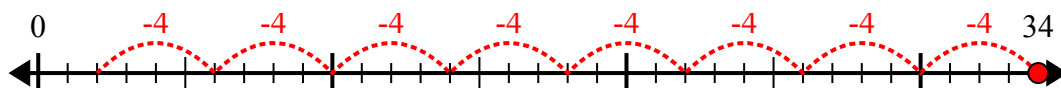
8) $43:8=$



9) $44:7=$



10) $34:4=$



Ответы

1. 4r3

2. 7r2

3. 5r3

4. 7r2

5. 8r2

6. 7r6

7. 4r2

8. 5r3

9. 6r2

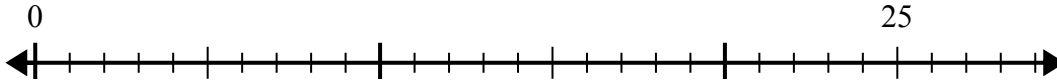
10. 8r2



Используйте числовую прямую для решения задачи деления.

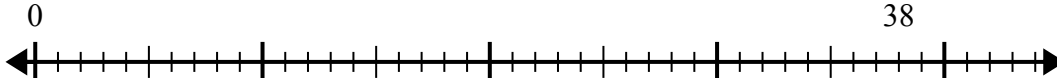
ОТВЕТЫ

1) $25:6=$
0



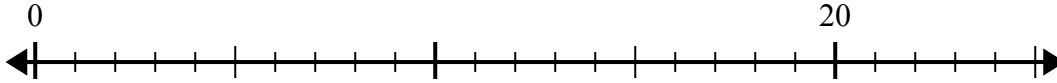
1. _____

2) $38:7=$
0



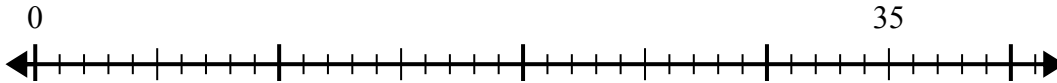
2. _____

3) $20:6=$
0



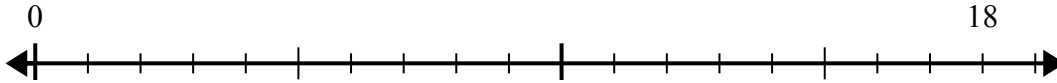
3. _____

4) $35:6=$
0



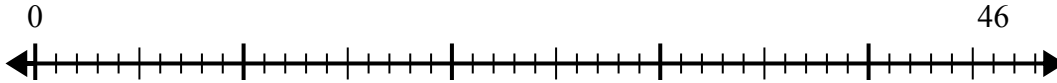
4. _____

5) $18:5=$
0



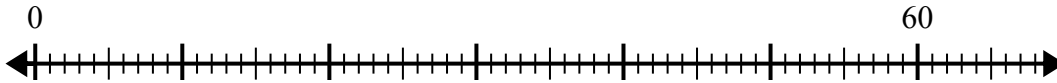
5. _____

6) $46:6=$
0



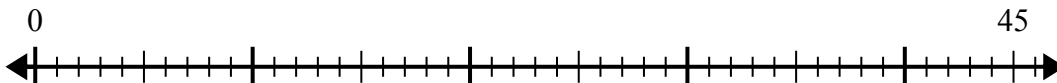
6. _____

7) $60:8=$
0



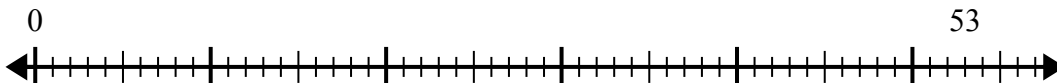
7. _____

8) $45:7=$
0



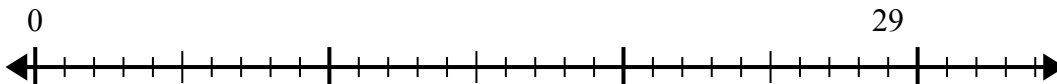
8. _____

9) $53:8=$
0



9. _____

10) $29:4=$
0

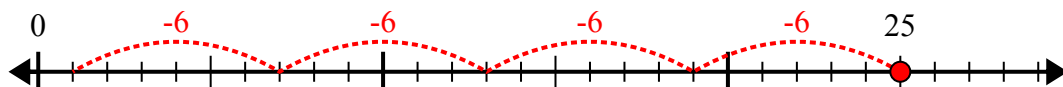


10. _____

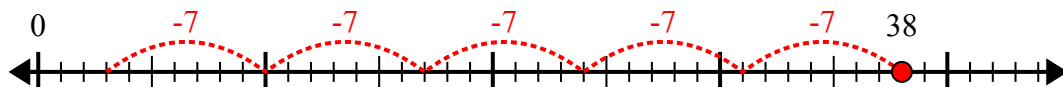


Используйте числовую прямую для решения задачи деления.

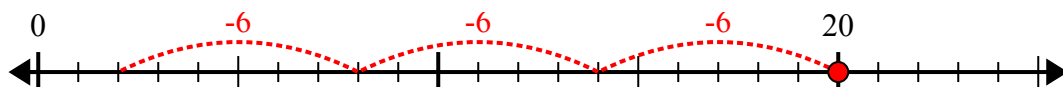
1) $25:6=$



2) $38:7=$



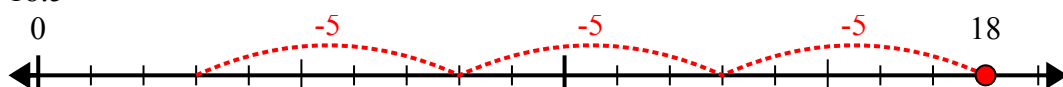
3) $20:6=$



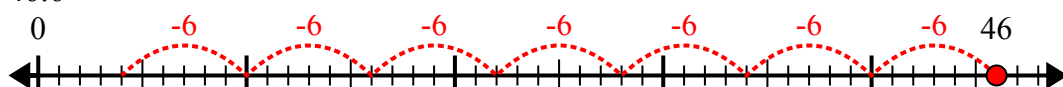
4) $35:6=$



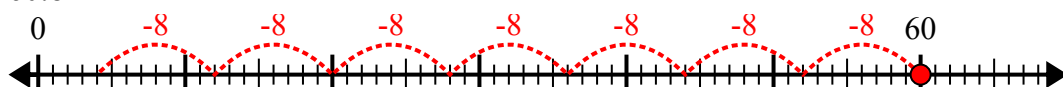
5) $18:5=$



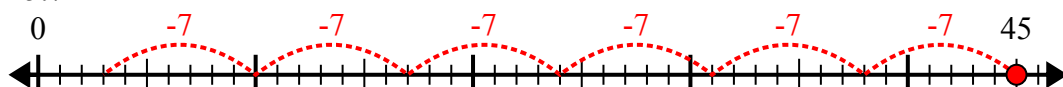
6) $46:6=$



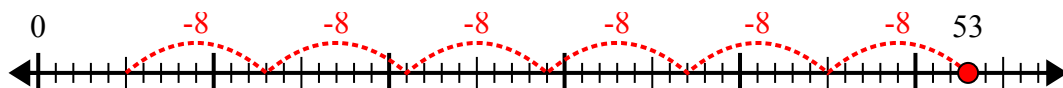
7) $60:8=$



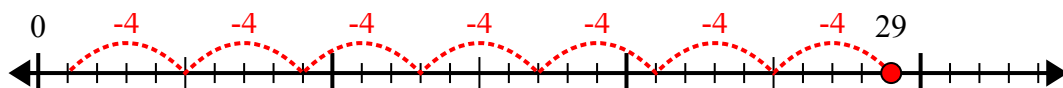
8) $45:7=$



9) $53:8=$



10) $29:4=$



Ответы

1. 4r1

2. 5r3

3. 3r2

4. 5r5

5. 3r3

6. 7r4

7. 7r4

8. 6r3

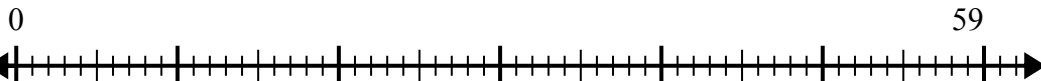
9. 6r5

10. 7r1

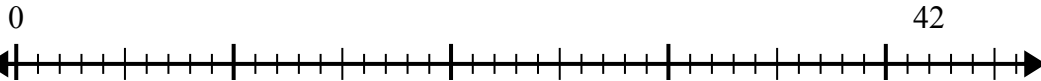


Используйте числовую прямую для решения задачи деления.

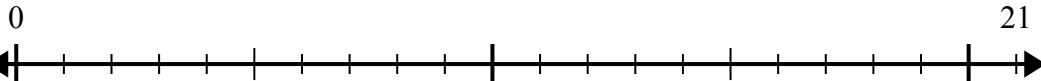
1) $59:7=$



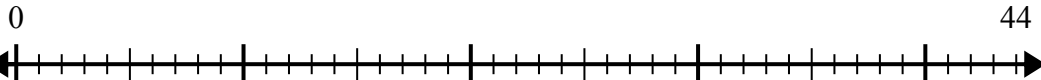
2) $42:5=$



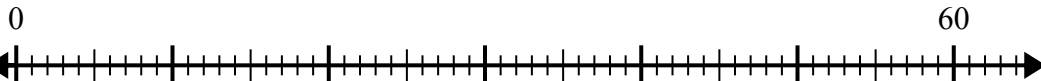
3) $21:4=$



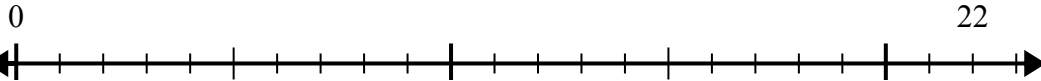
4) $44:7=$



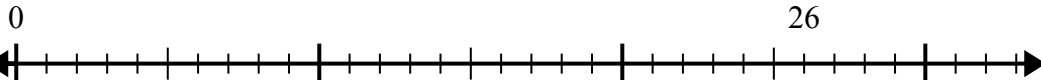
5) $60:8=$



6) $22:5=$



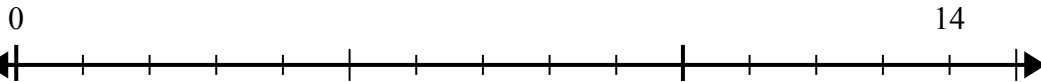
7) $26:4=$



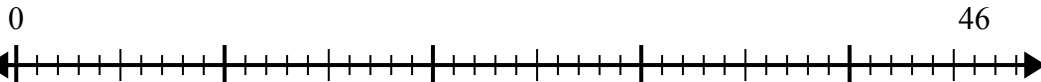
8) $54:8=$



9) $14:4=$



10) $46:6=$



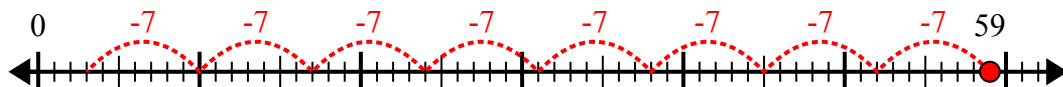
Ответы

1. _____
2. _____
3. _____
4. _____
5. _____
6. _____
7. _____
8. _____
9. _____
10. _____

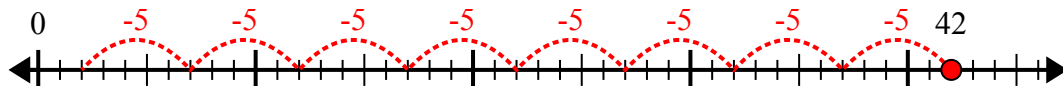


Используйте числовую прямую для решения задачи деления.

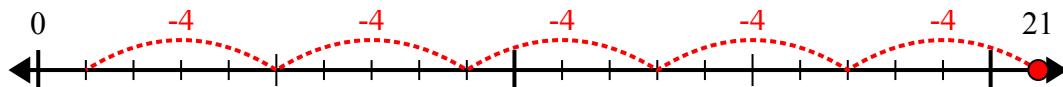
1) $59:7=$



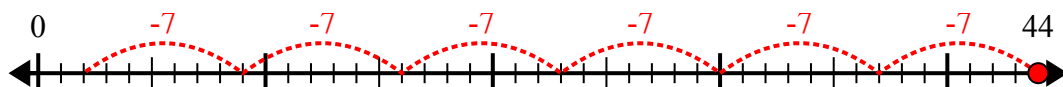
2) $42:5=$



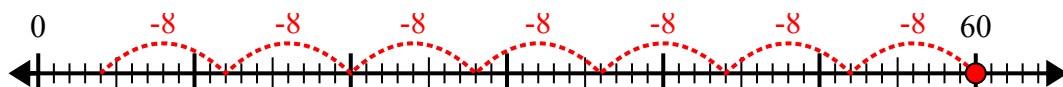
3) $21:4=$



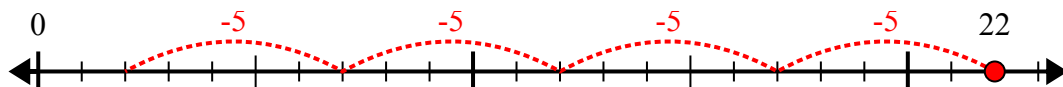
4) $44:7=$



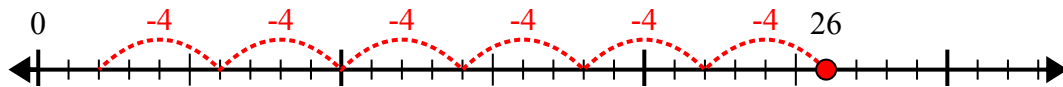
5) $60:8=$



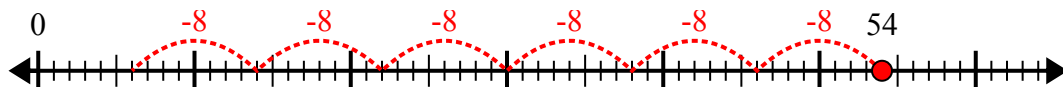
6) $22:5=$



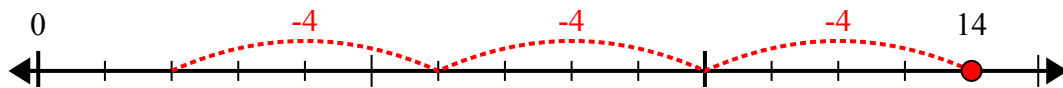
7) $26:4=$



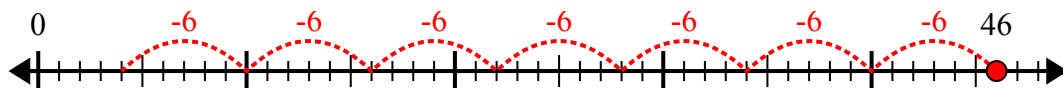
8) $54:8=$



9) $14:4=$



10) $46:6=$



ОТВЕТЫ

1. 8r3

2. 8r2

3. 5r1

4. 6r2

5. 7r4

6. 4r2

7. 6r2

8. 6r6

9. 3r2

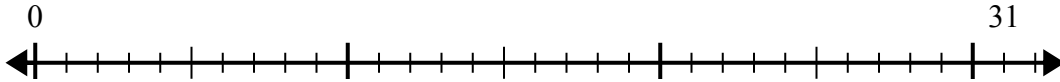
10. 7r4



Используйте числовую прямую для решения задачи деления.

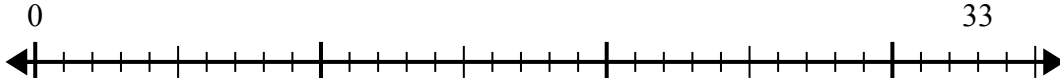
ОТВЕТЫ

1) $31:6=$
0



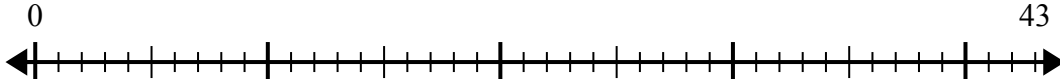
1. _____

2) $33:4=$
0



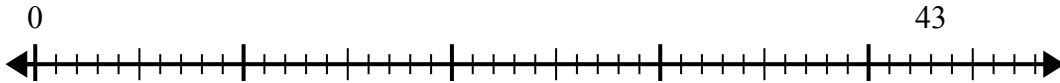
2. _____

3) $43:7=$
0



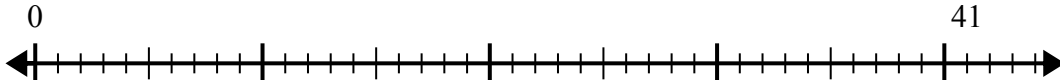
3. _____

4) $43:5=$
0



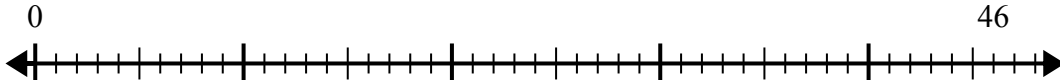
4. _____

5) $41:8=$
0



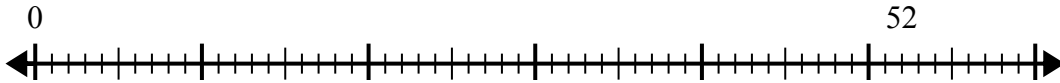
5. _____

6) $46:6=$
0



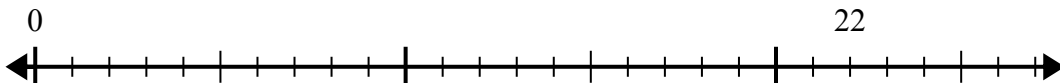
6. _____

7) $52:6=$
0



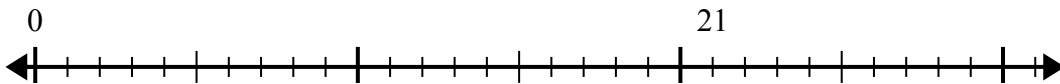
7. _____

8) $22:4=$
0



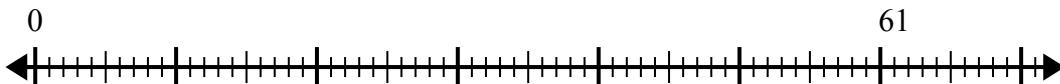
8. _____

9) $21:5=$
0



9. _____

10) $61:8=$
0



10. _____

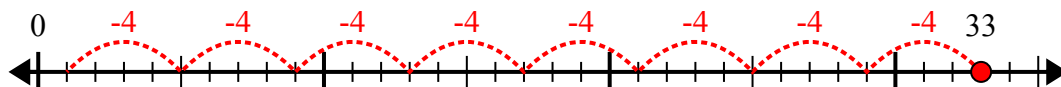


Используйте числовую прямую для решения задачи деления.

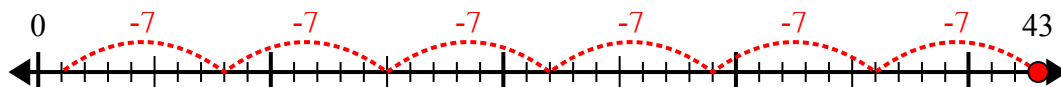
1) $31:6=$



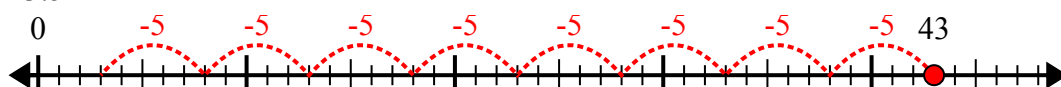
2) $33:4=$



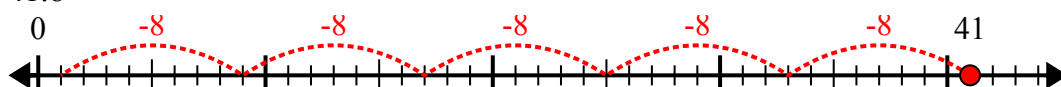
3) $43:7=$



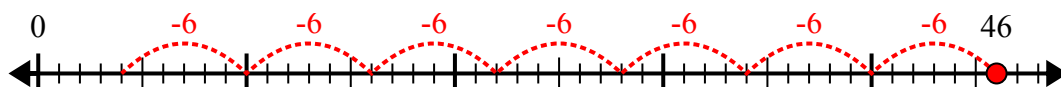
4) $43:5=$



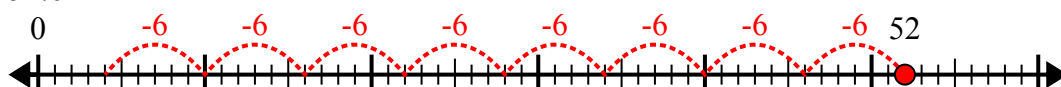
5) $41:8=$



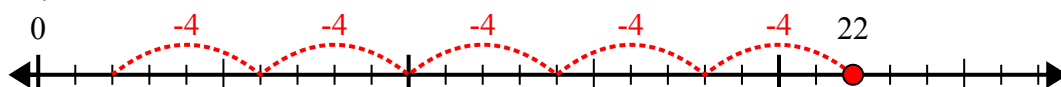
6) $46:6=$



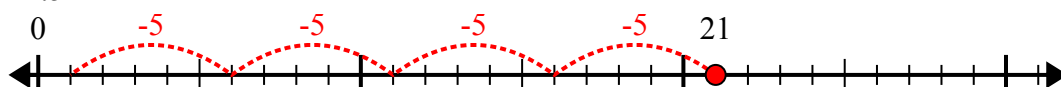
7) $52:6=$



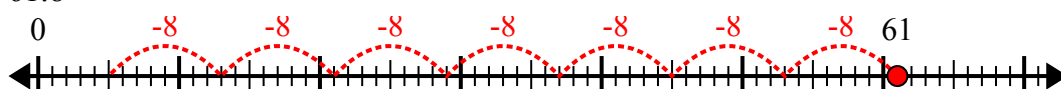
8) $22:4=$



9) $21:5=$



10) $61:8=$



ОТВЕТЫ

1. 5r1

2. 8r1

3. 6r1

4. 8r3

5. 5r1

6. 7r4

7. 8r4

8. 5r2

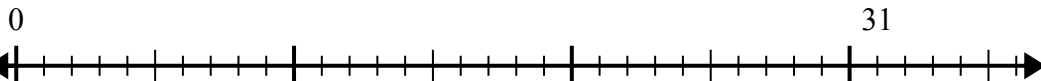
9. 4r1

10. 7r5

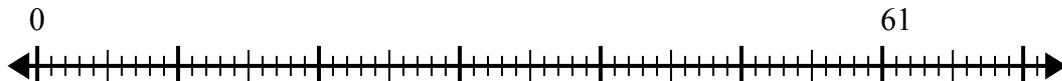


Используйте числовую прямую для решения задачи деления.

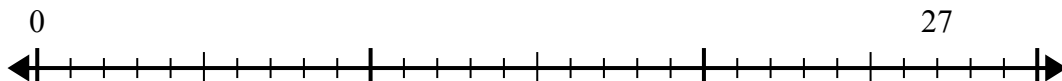
1) $31:8=$



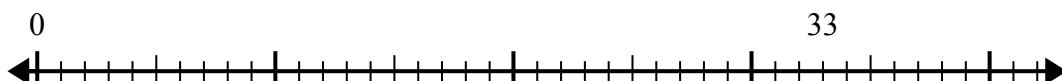
2) $61:8=$



3) $27:4=$



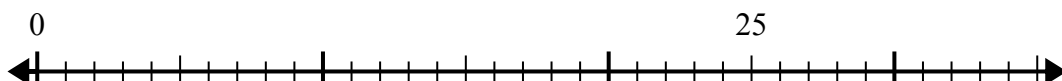
4) $33:4=$



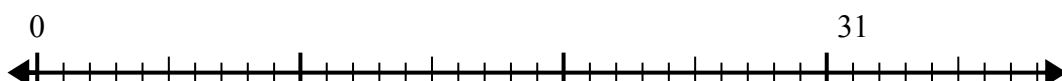
5) $55:8=$



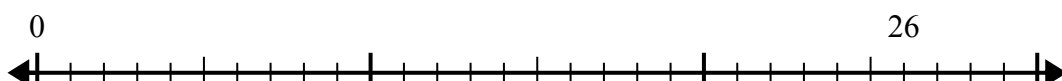
6) $25:6=$



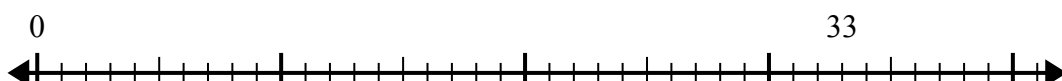
7) $31:4=$



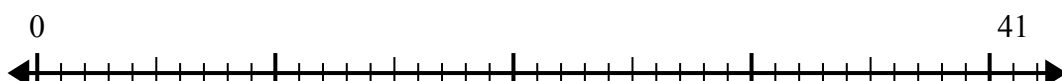
8) $26:7=$



9) $33:7=$



10) $41:5=$



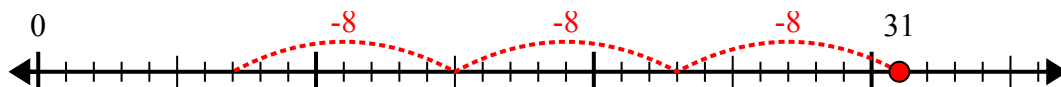
Ответы

1. _____
2. _____
3. _____
4. _____
5. _____
6. _____
7. _____
8. _____
9. _____
10. _____

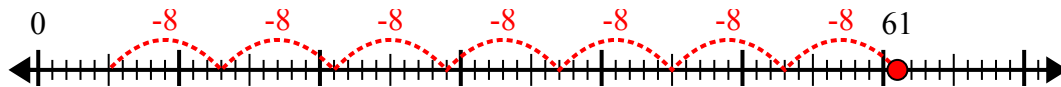


Используйте числовую прямую для решения задачи деления.

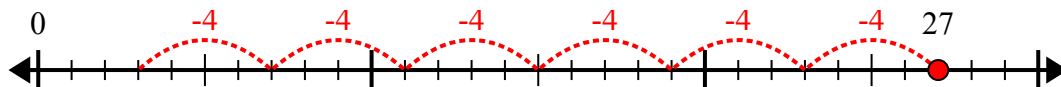
1) $31:8=$



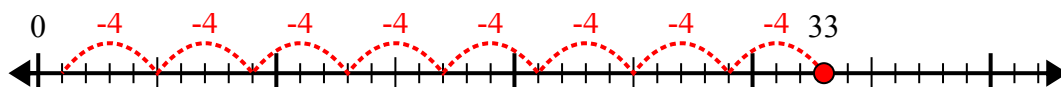
2) $61:8=$



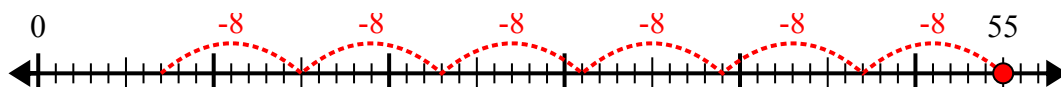
3) $27:4=$



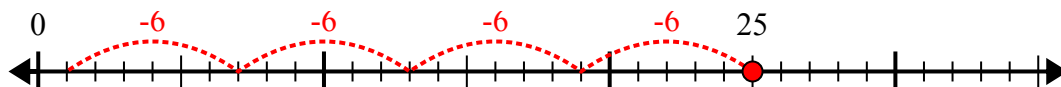
4) $33:4=$



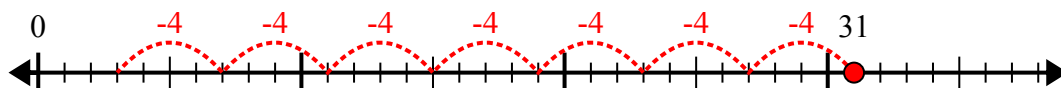
5) $55:8=$



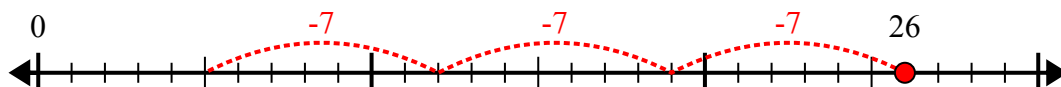
6) $25:6=$



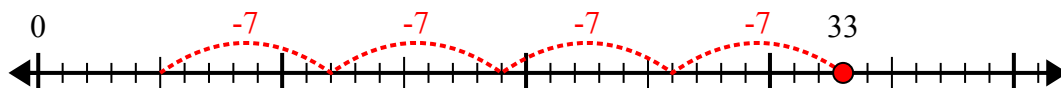
7) $31:4=$



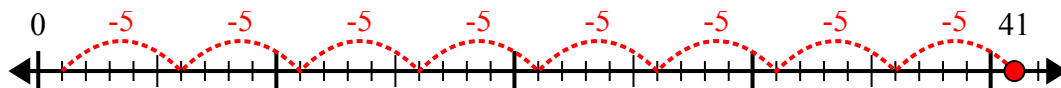
8) $26:7=$



9) $33:7=$



10) $41:5=$



Ответы

1. 3r7

2. 7r5

3. 6r3

4. 8r1

5. 6r7

6. 4r1

7. 7r3

8. 3r5

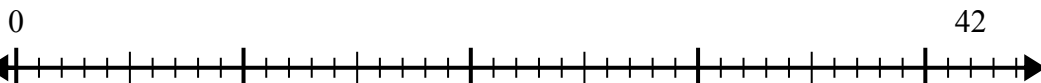
9. 4r5

10. 8r1

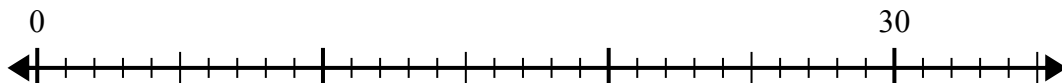


Используйте числовую прямую для решения задачи деления.

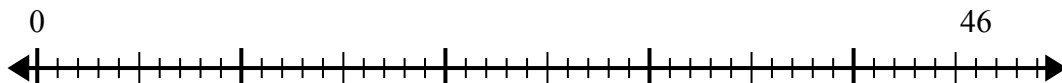
1) $42:5=$



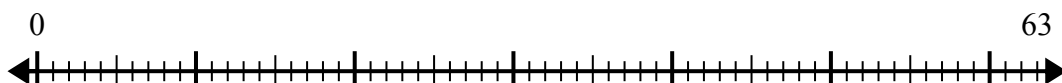
2) $30:4=$



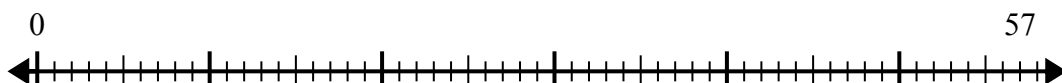
3) $46:6=$



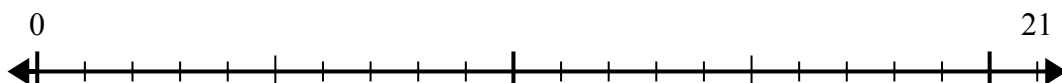
4) $63:8=$



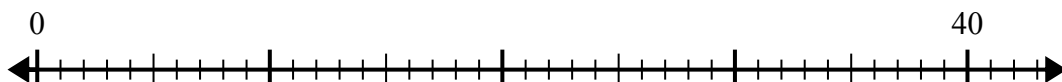
5) $57:7=$



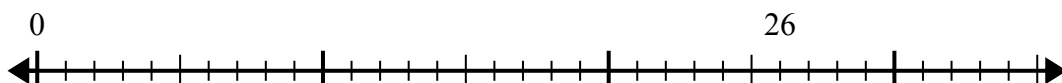
6) $21:5=$



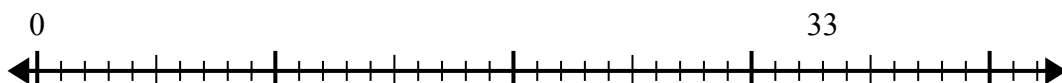
7) $40:7=$



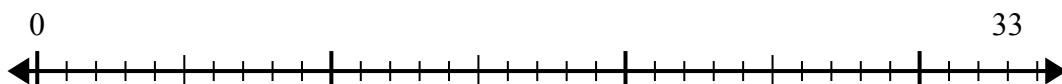
8) $26:8=$



9) $33:5=$



10) $33:4=$



Ответы

1. _____

2. _____

3. _____

4. _____

5. _____

6. _____

7. _____

8. _____

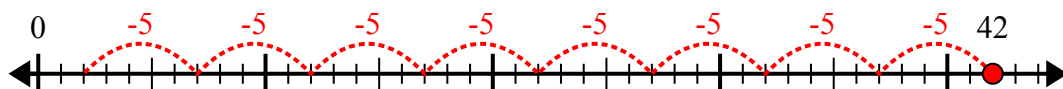
9. _____

10. _____

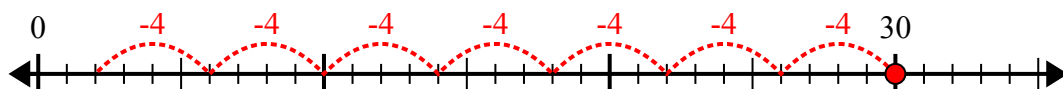


Используйте числовую прямую для решения задачи деления.

1) $42:5=$



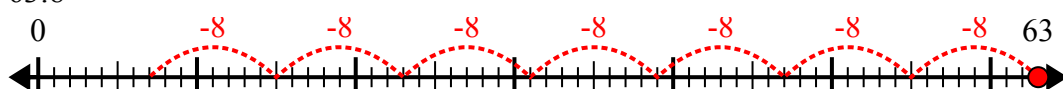
2) $30:4=$



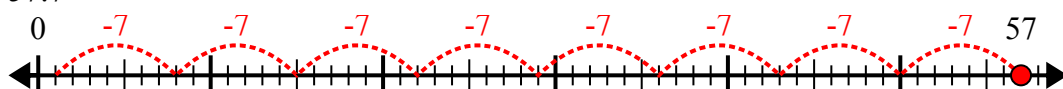
3) $46:6=$



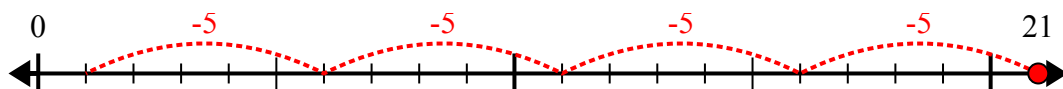
4) $63:8=$



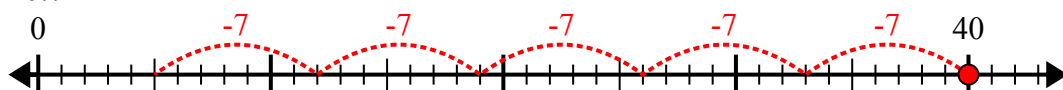
5) $57:7=$



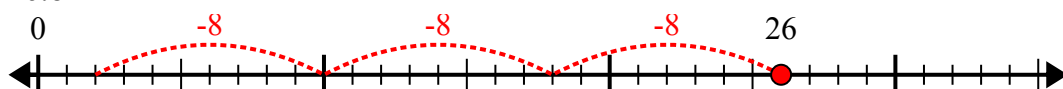
6) $21:5=$



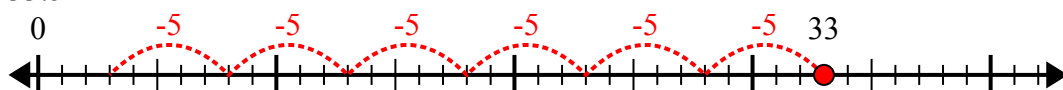
7) $40:7=$



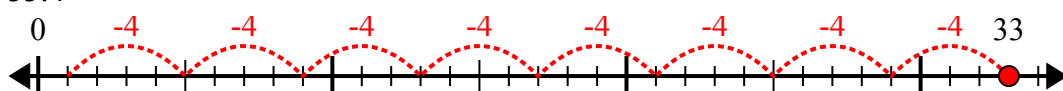
8) $26:8=$



9) $33:5=$



10) $33:4=$



ОТВЕТЫ

1. 8r2

2. 7r2

3. 7r4

4. 7r7

5. 8r1

6. 4r1

7. 5r5

8. 3r2

9. 6r3

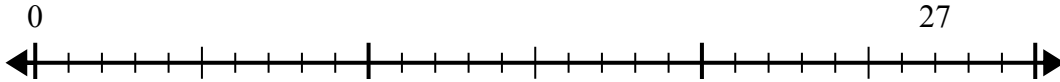
10. 8r1



Используйте числовую прямую для решения задачи деления.

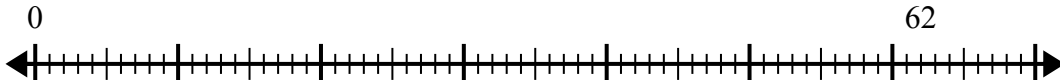
Отвѣты

1) $27:4=$
0



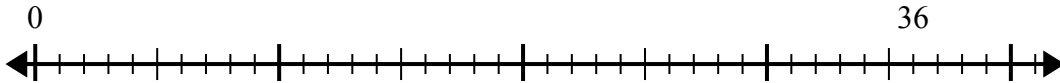
1. _____

2) $62:8=$
0



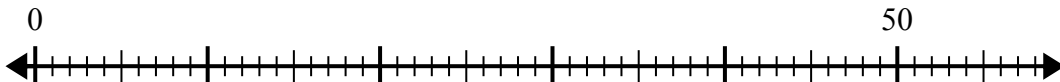
2. _____

3) $36:5=$
0



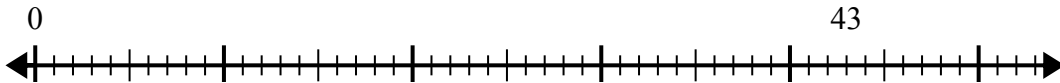
3. _____

4) $50:8=$
0



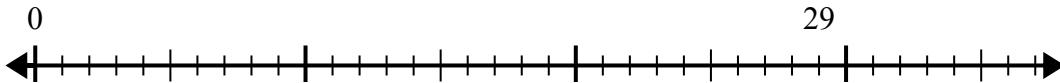
4. _____

5) $43:6=$
0



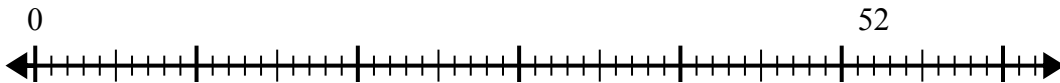
5. _____

6) $29:6=$
0



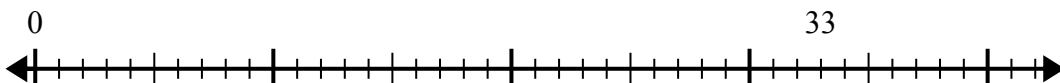
6. _____

7) $52:6=$
0



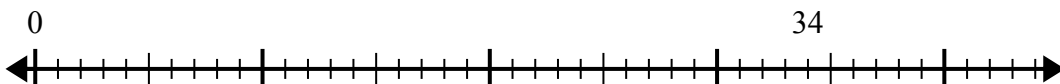
7. _____

8) $33:5=$
0



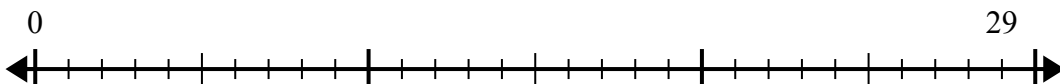
8. _____

9) $34:7=$
0



9. _____

10) $29:4=$
0

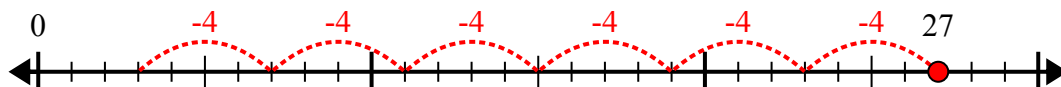


10. _____

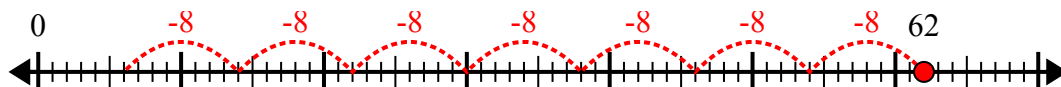


Используйте числовую прямую для решения задачи деления.

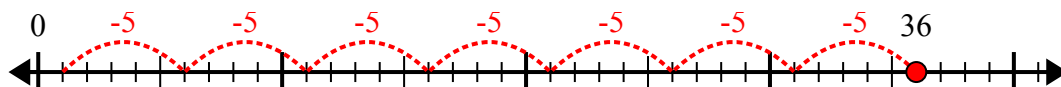
1) $27:4=$



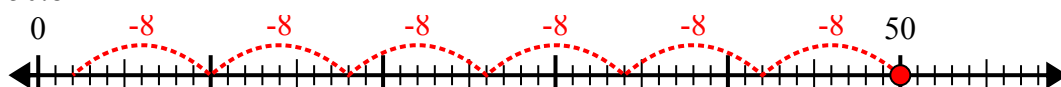
2) $62:8=$



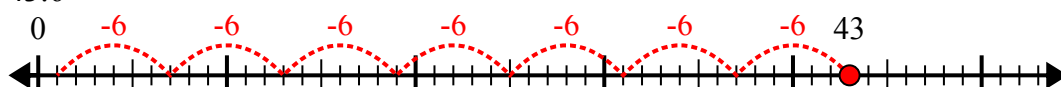
3) $36:5=$



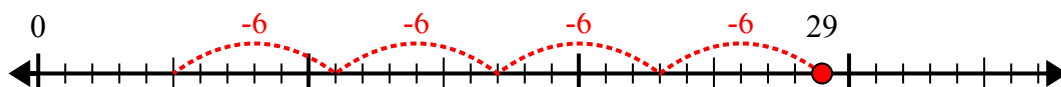
4) $50:8=$



5) $43:6=$



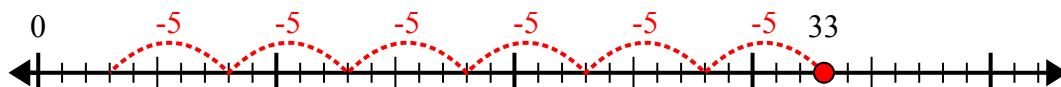
6) $29:6=$



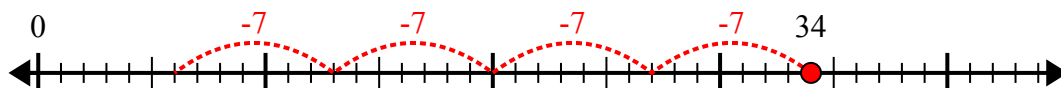
7) $52:6=$



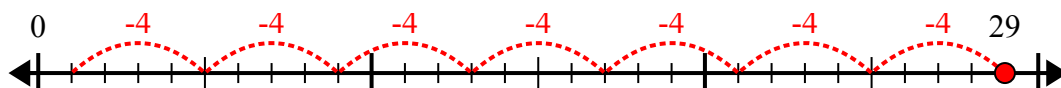
8) $33:5=$



9) $34:7=$



10) $29:4=$



ОТВЕТЫ

1. 6r3

2. 7r6

3. 7r1

4. 6r2

5. 7r1

6. 4r5

7. 8r4

8. 6r3

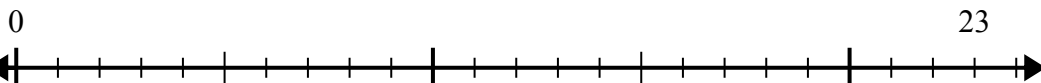
9. 4r6

10. 7r1

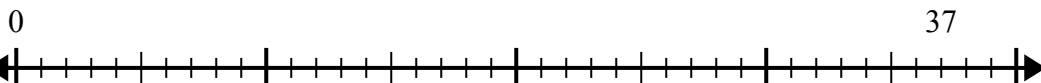


Используйте числовую прямую для решения задачи деления.

1) $23:4=$



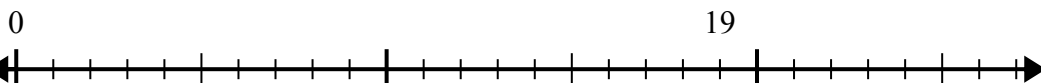
2) $37:8=$



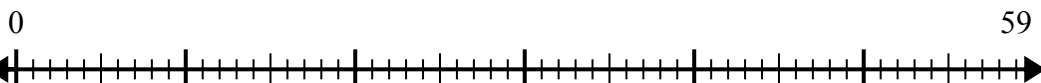
3) $15:4=$



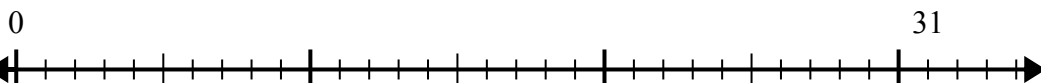
4) $19:6=$



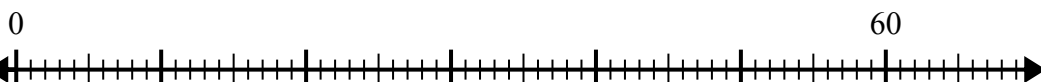
5) $59:8=$



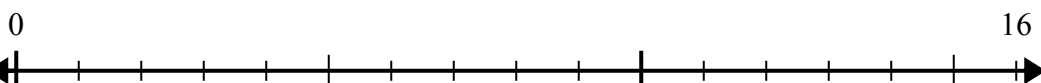
6) $31:8=$



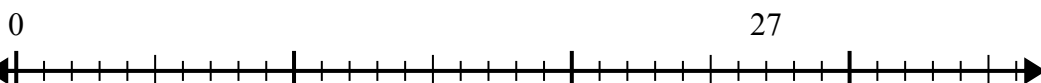
7) $60:7=$



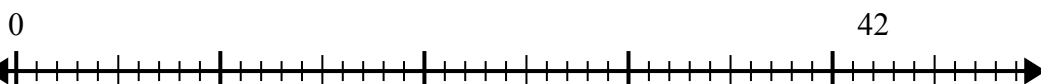
8) $16:5=$



9) $27:4=$



10) $42:5=$



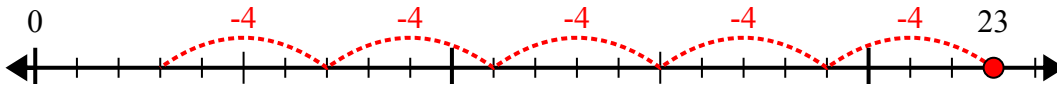
Ответы

1. _____
2. _____
3. _____
4. _____
5. _____
6. _____
7. _____
8. _____
9. _____
10. _____

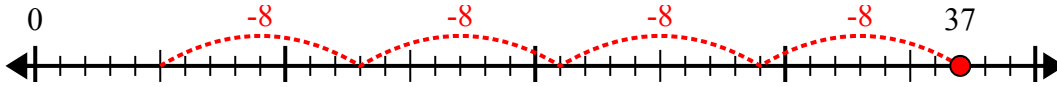


Используйте числовую прямую для решения задачи деления.

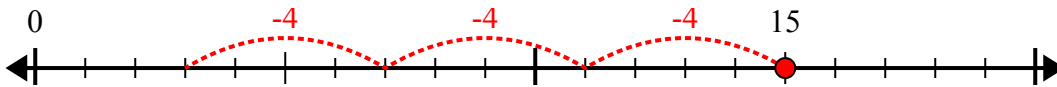
1) $23:4=$



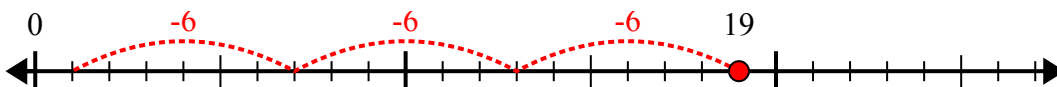
2) $37:8=$



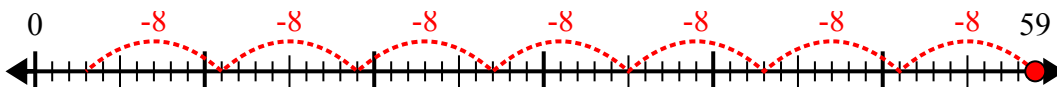
3) $15:4=$



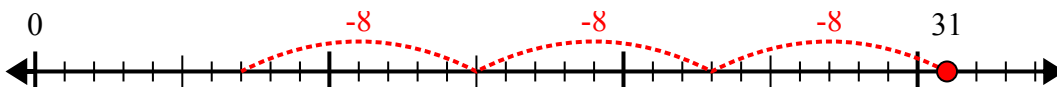
4) $19:6=$



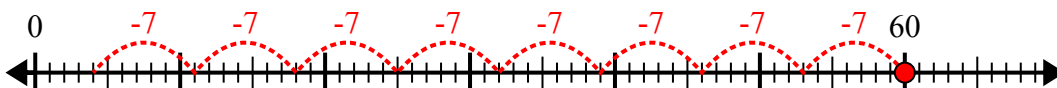
5) $59:8=$



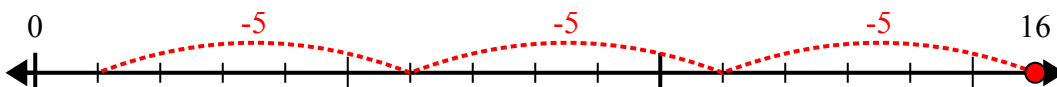
6) $31:8=$



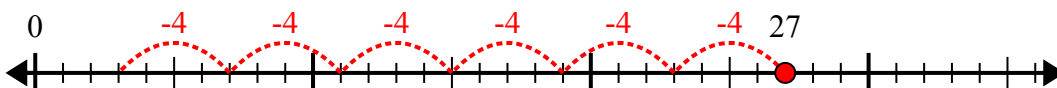
7) $60:7=$



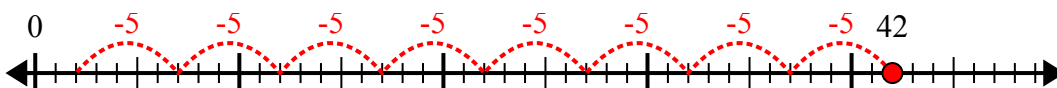
8) $16:5=$



9) $27:4=$



10) $42:5=$



Ответы

1. 5r3

2. 4r5

3. 3r3

4. 3r1

5. 7r3

6. 3r7

7. 8r4

8. 3r1

9. 6r3

10. 8r2