







Выразите визуальную проблему в виде уравнения с ответом.



ОТВЕТЫ

1)  + 

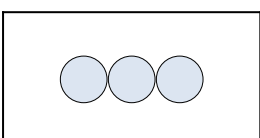
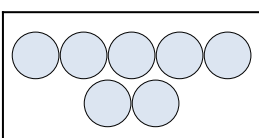
1. _____

2)  + 

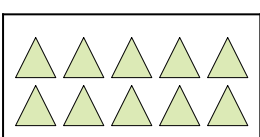
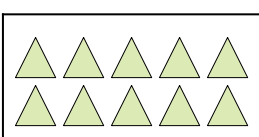
2. _____

3)  + 



3. _____

4)  + 

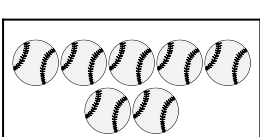
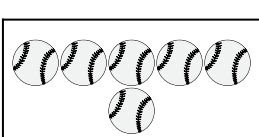
4. _____

5)  + 

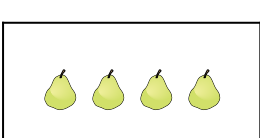
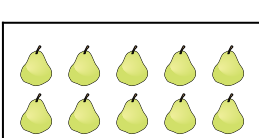
5. _____

6)  + 

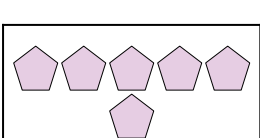
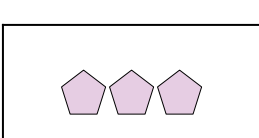
6. _____

7)  + 

7. _____

8)  + 

8. _____

9)  + 

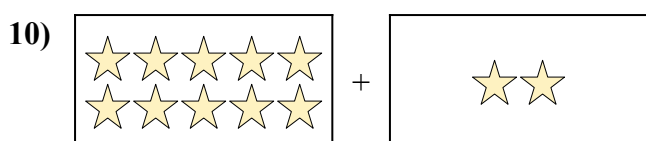
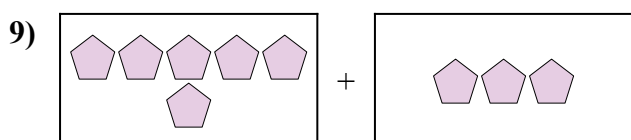
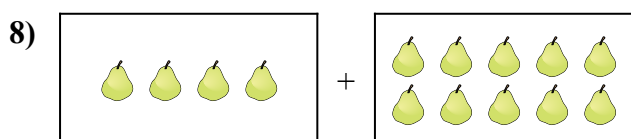
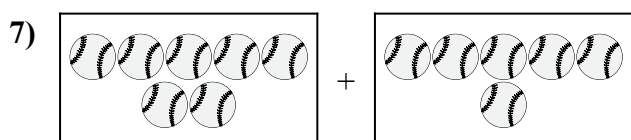

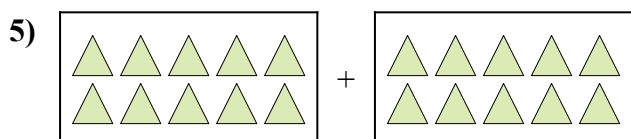
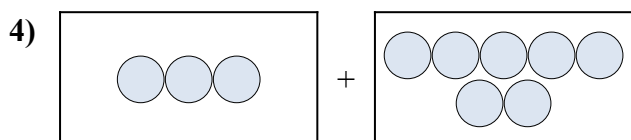

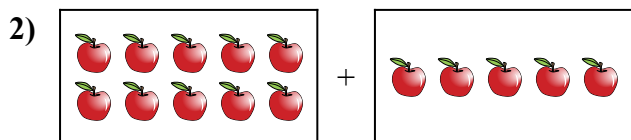
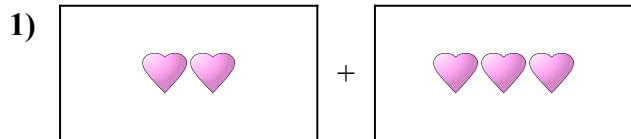
9. _____

10)  + 

10. _____



Выразите визуальную проблему в виде уравнения с ответом.

**ОТВЕТЫ**

1. $2 + 3 = 5$

2. $10 + 5 = 15$

3. $3 + 6 = 9$

4. $3 + 7 = 10$

5. $10 + 10 = 20$

6. $10 + 3 = 13$

7. $7 + 6 = 13$

8. $4 + 10 = 14$

9. $6 + 3 = 9$

10. $10 + 2 = 12$