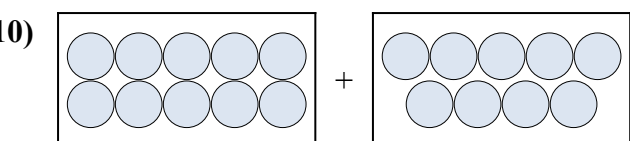
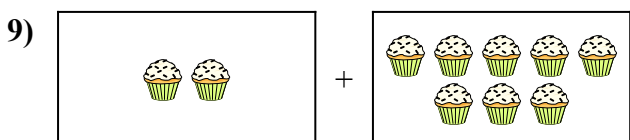
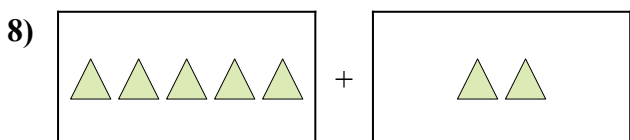
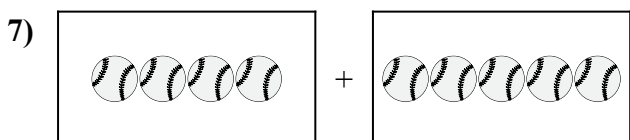
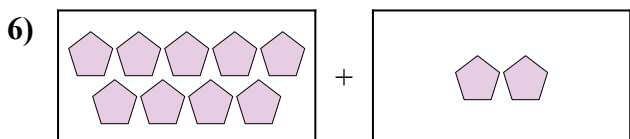
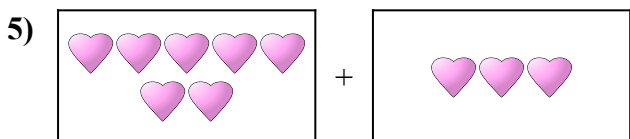
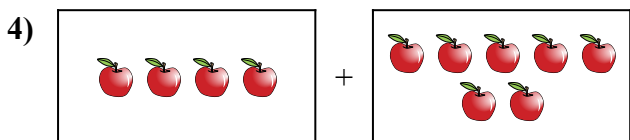
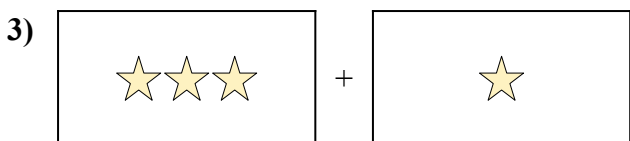
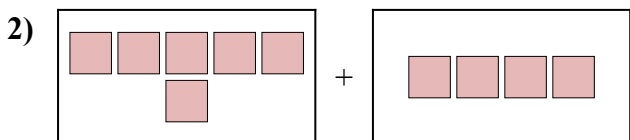
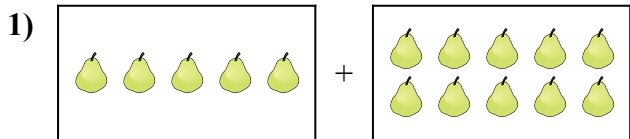




Выразите визуальную проблему в виде уравнения с ответом.

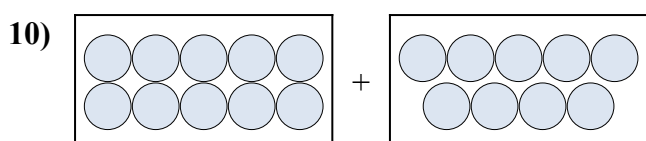
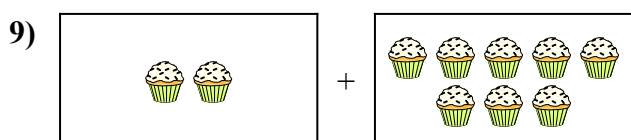
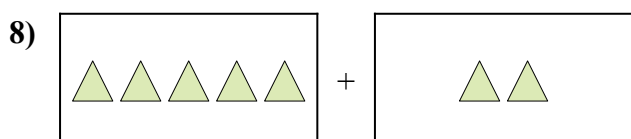
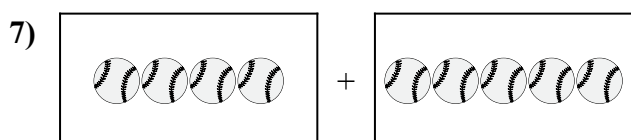
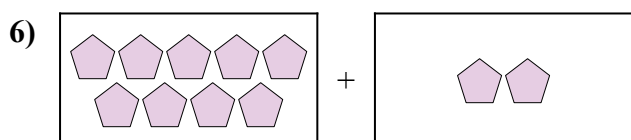
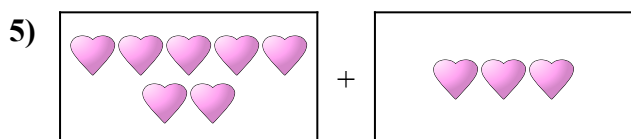
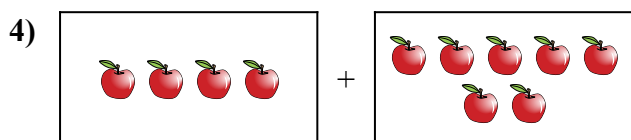
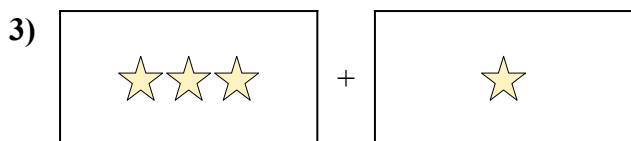
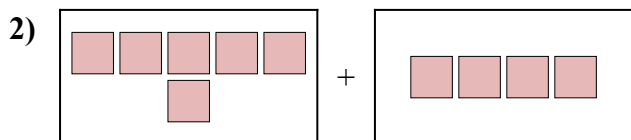
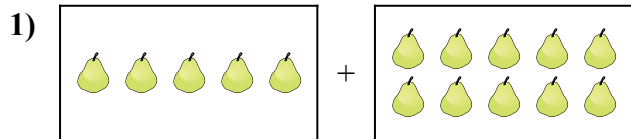
ОТВЕТЫ



1. _____
2. _____
3. _____
4. _____
5. _____
6. _____
7. _____
8. _____
9. _____
10. _____



Выразите визуальную проблему в виде уравнения с ответом.

ОТВЕТЫ

1. $5 + 10 = 15$

2. $6 + 4 = 10$

3. $3 + 1 = 4$

4. $4 + 7 = 11$

5. $7 + 3 = 10$

6. $9 + 2 = 11$

7. $4 + 5 = 9$

8. $5 + 2 = 7$

9. $2 + 8 = 10$

10. $10 + 9 = 19$