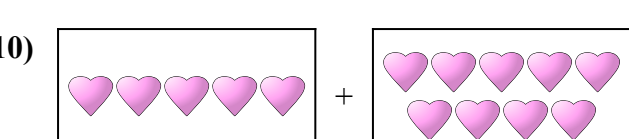
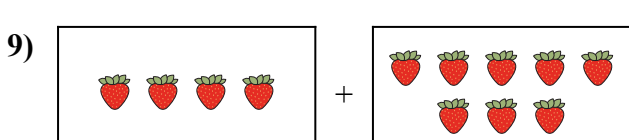
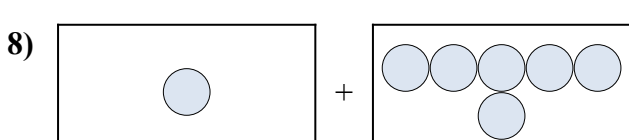
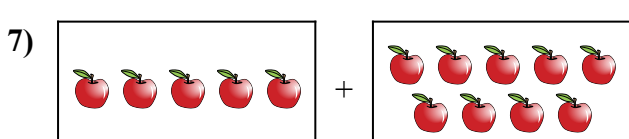

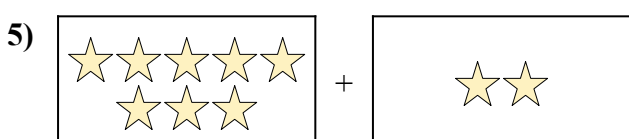
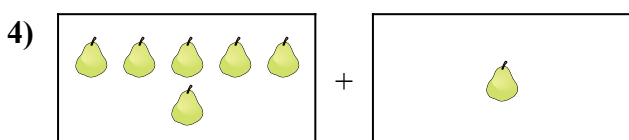
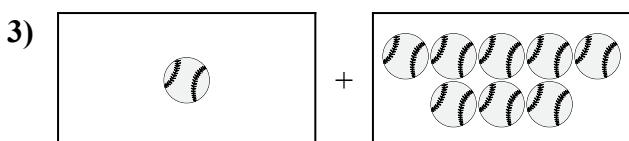
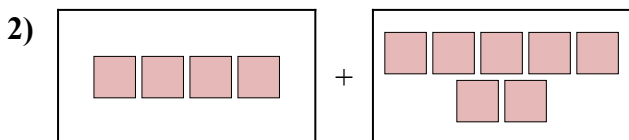
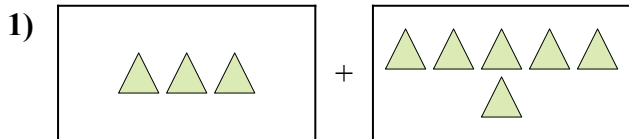




Выразите визуальную проблему в виде уравнения с ответом.

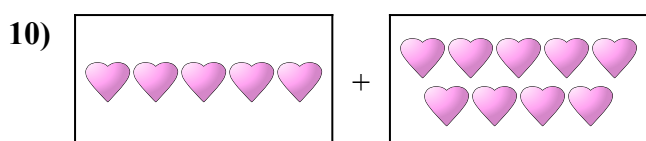
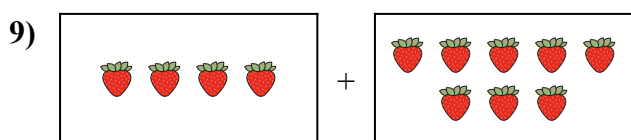
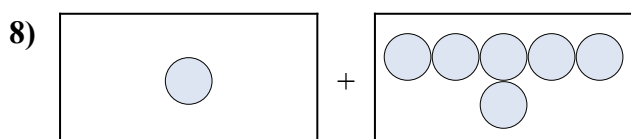
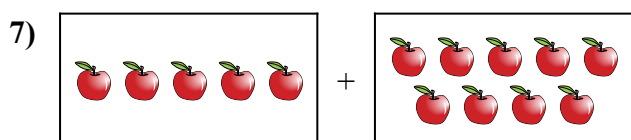

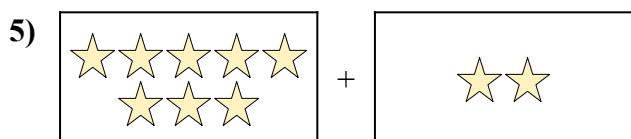
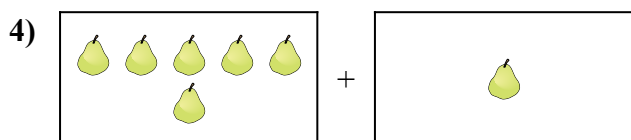
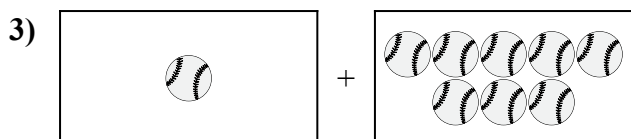
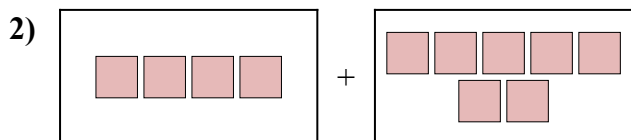
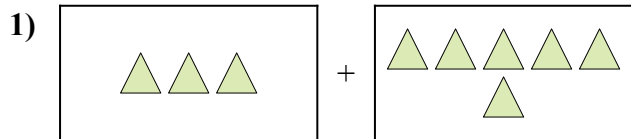
ОТВЕТЫ



1. _____
2. _____
3. _____
4. _____
5. _____
6. _____
7. _____
8. _____
9. _____
10. _____



Выразите визуальную проблему в виде уравнения с ответом.

ОТВЕТЫ

1. $3 + 6 = 9$

2. $4 + 7 = 11$

3. $1 + 8 = 9$

4. $6 + 1 = 7$

5. $8 + 2 = 10$

6. $10 + 9 = 19$

7. $5 + 9 = 14$

8. $1 + 6 = 7$

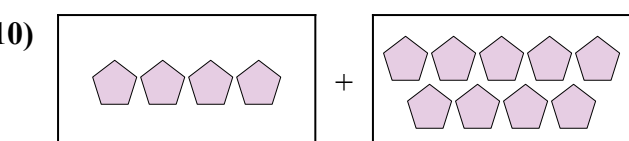
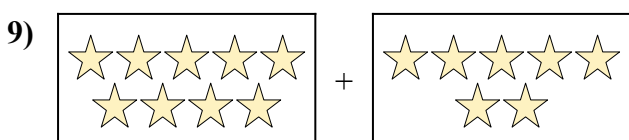
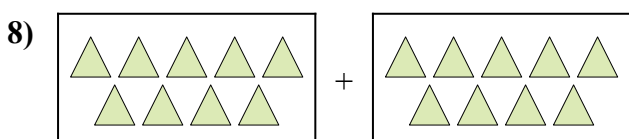

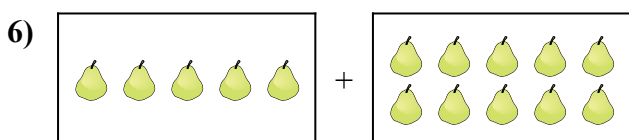
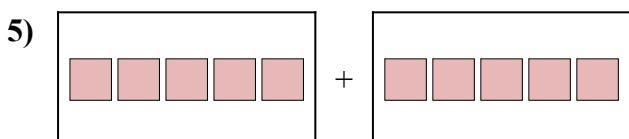
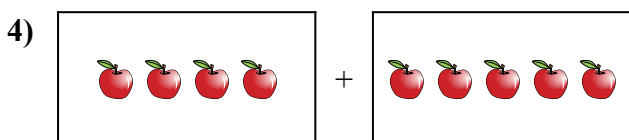

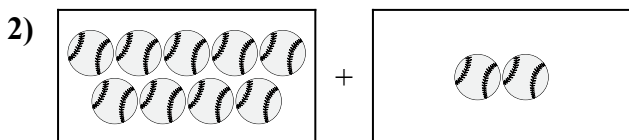
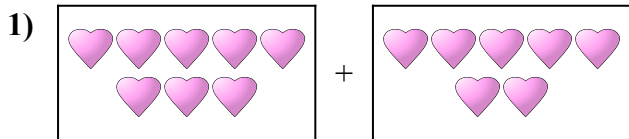
9. $4 + 8 = 12$

10. $5 + 9 = 14$



Выразите визуальную проблему в виде уравнения с ответом.

Ответы



1. _____

2. _____

3. _____

4. _____

5. _____

6. _____

7. _____

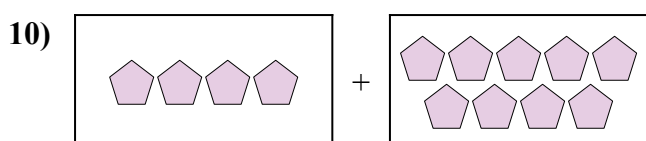
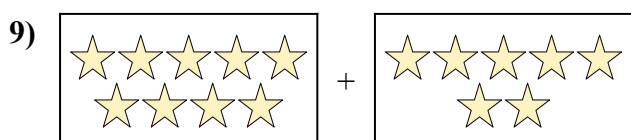
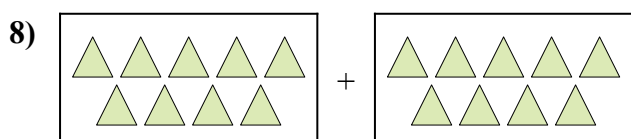

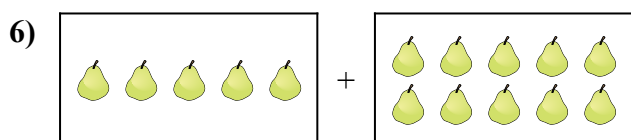
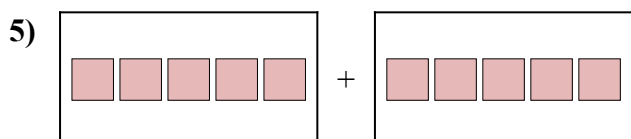
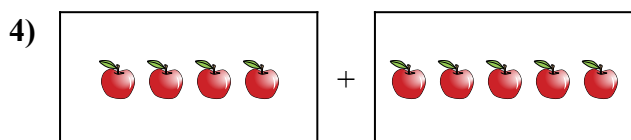

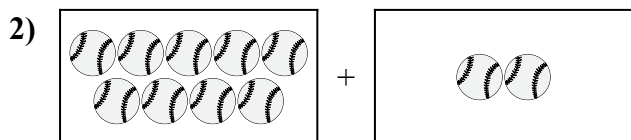
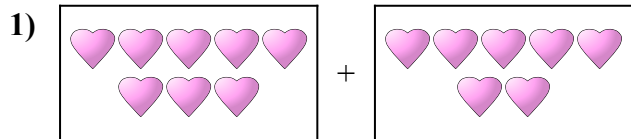
8. _____

9. _____

10. _____



Выразите визуальную проблему в виде уравнения с ответом.

ОТВЕТЫ

1. $8 + 7 = 15$

2. $9 + 2 = 11$

3. $8 + 7 = 15$

4. $4 + 5 = 9$

5. $5 + 5 = 10$

6. $5 + 10 = 15$

7. $5 + 7 = 12$

8. $9 + 9 = 18$



9. $9 + 7 = 16$

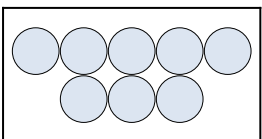
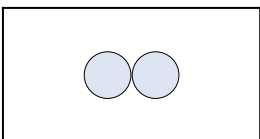
10. $4 + 9 = 13$







Выразите визуальную проблему в виде уравнения с ответом.

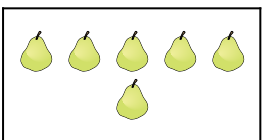

ОТВЕТЫ

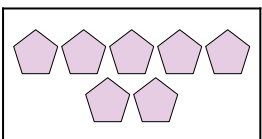
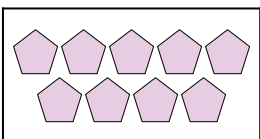
1)  + 

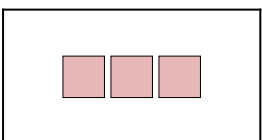
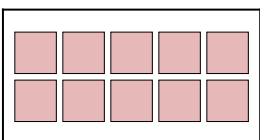
2)  + 



3)  + 

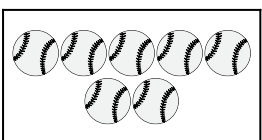
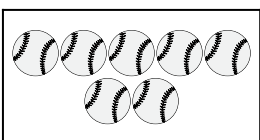
4)  + 



5)  + 

6)  + 

7)  + 

8)  + 

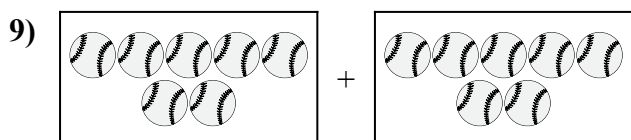
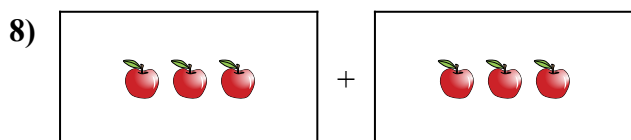
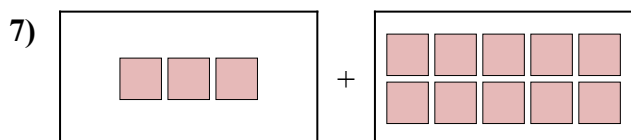
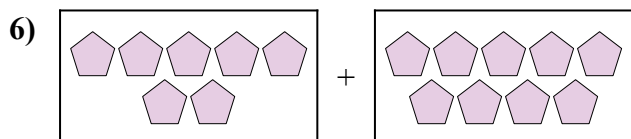
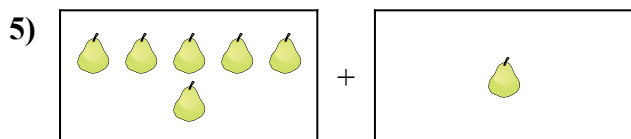
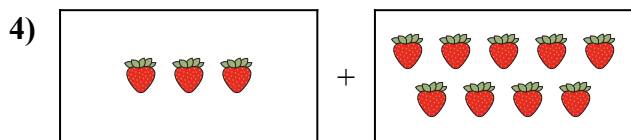
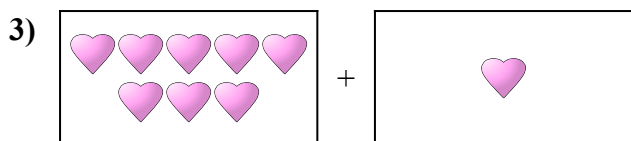
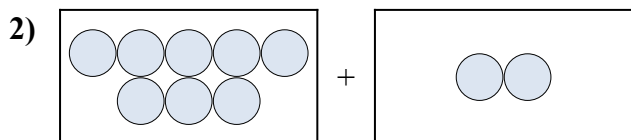

9)  + 

10)  + 

1. _____
2. _____
3. _____
4. _____
5. _____
6. _____
7. _____
8. _____
9. _____
10. _____



Выразите визуальную проблему в виде уравнения с ответом.

ОТВЕТЫ

1. $9 + 1 = 10$

2. $8 + 2 = 10$

3. $8 + 1 = 9$

4. $3 + 9 = 12$

5. $6 + 1 = 7$

6. $7 + 9 = 16$

7. $3 + 10 = 13$

8. $3 + 3 = 6$

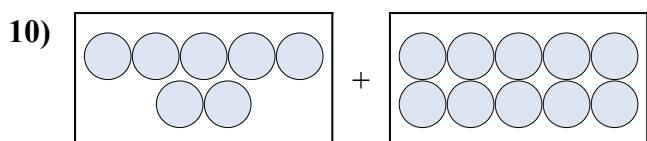

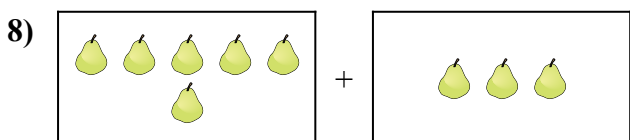

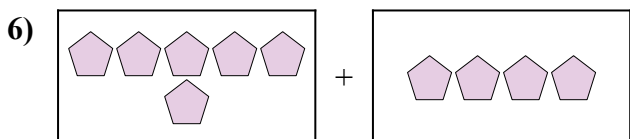
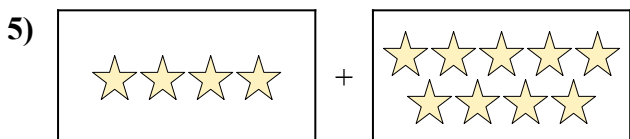
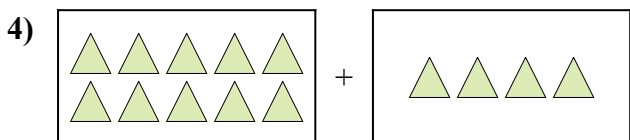
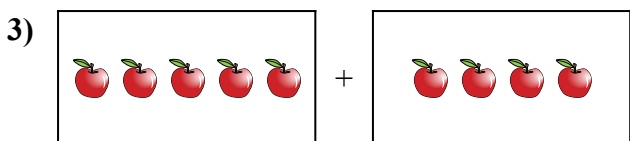
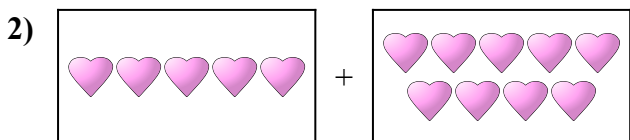
9. $7 + 7 = 14$

10. $5 + 2 = 7$



Выразите визуальную проблему в виде уравнения с ответом.

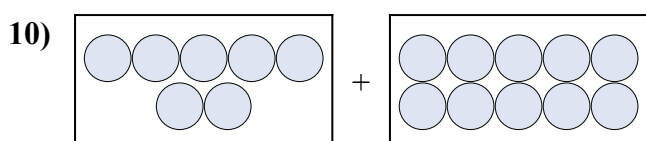

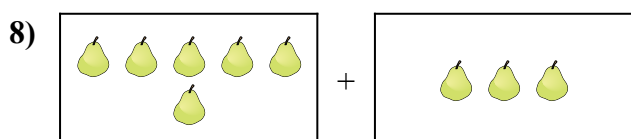

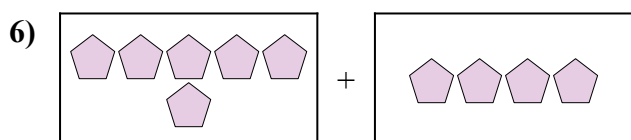
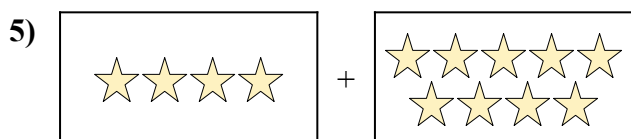
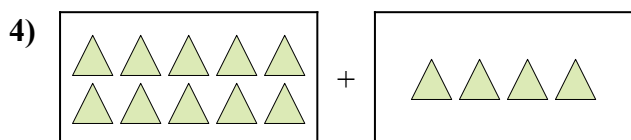
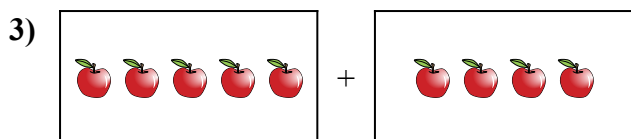
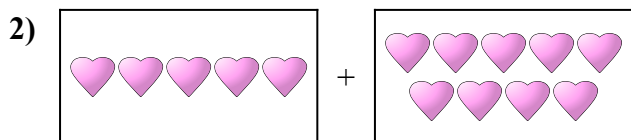
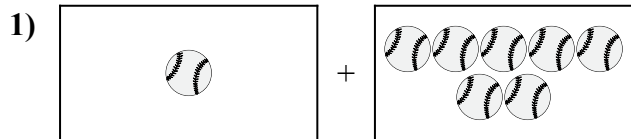
ОТВЕТЫ



1. _____
2. _____
3. _____
4. _____
5. _____
6. _____
7. _____
8. _____
9. _____
10. _____



Выразите визуальную проблему в виде уравнения с ответом.

ОТВЕТЫ

1. $1 + 7 = 8$

2. $5 + 9 = 14$

3. $5 + 4 = 9$

4. $10 + 4 = 14$

5. $4 + 9 = 13$

6. $6 + 4 = 10$

7. $6 + 10 = 16$

8. $6 + 3 = 9$



9. $7 + 4 = 11$

10. $7 + 10 = 17$





Выразите визуальную проблему в виде уравнения с ответом.



ОТВЕТЫ

1)  + 

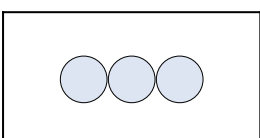
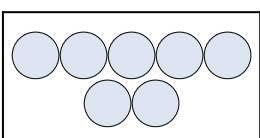
1. _____

2)  + 

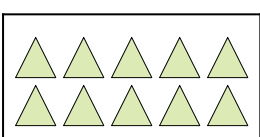
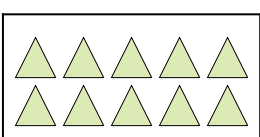
2. _____

3)  + 



3. _____

4)  + 

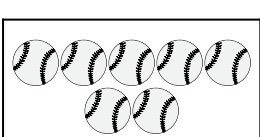
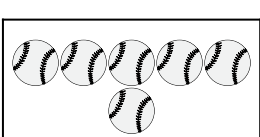
4. _____

5)  + 

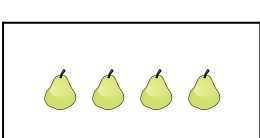
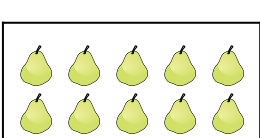
5. _____

6)  + 

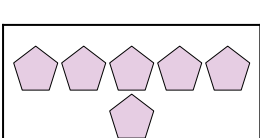
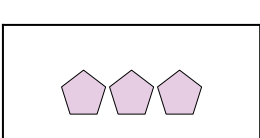
6. _____

7)  + 



7. _____

8)  + 

8. _____

9)  + 

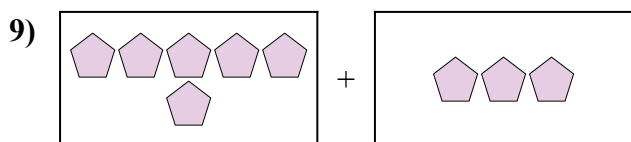
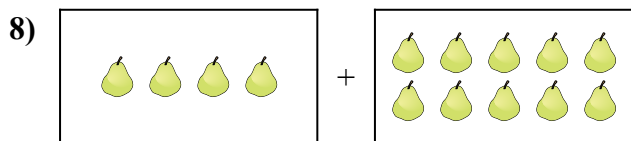
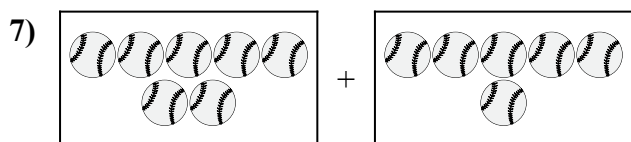

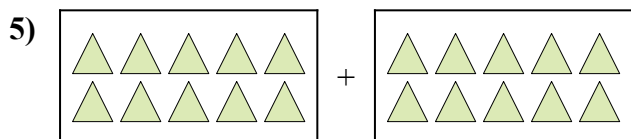
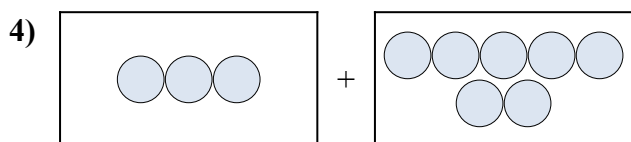

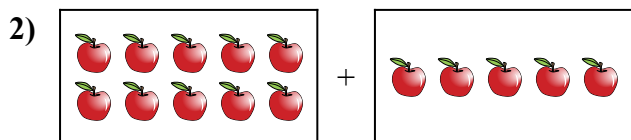
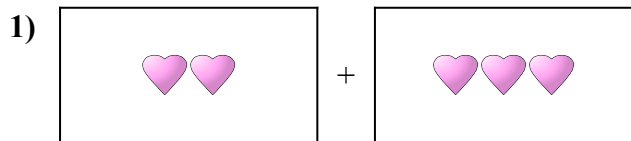
9. _____

10)  + 

10. _____



Выразите визуальную проблему в виде уравнения с ответом.

**ОТВЕТЫ**

1. $2 + 3 = 5$

2. $10 + 5 = 15$

3. $3 + 6 = 9$

4. $3 + 7 = 10$

5. $10 + 10 = 20$

6. $10 + 3 = 13$

7. $7 + 6 = 13$

8. $4 + 10 = 14$

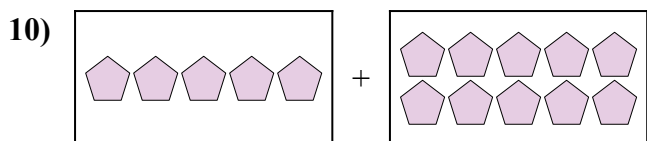
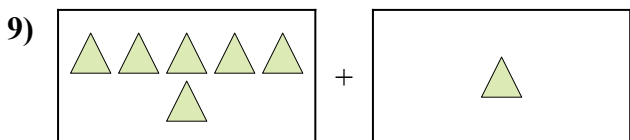
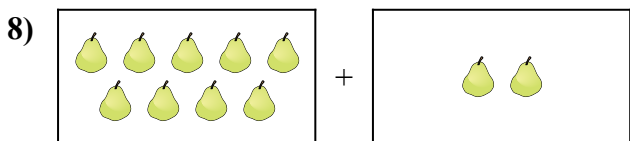
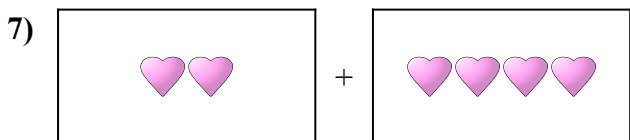
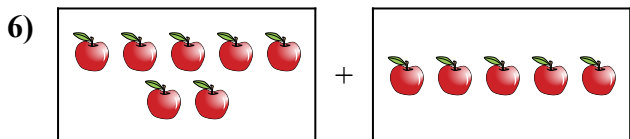
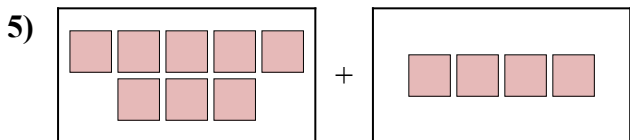
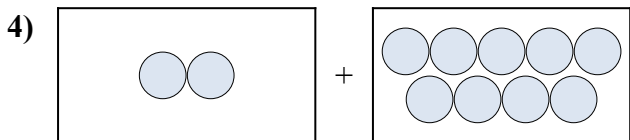
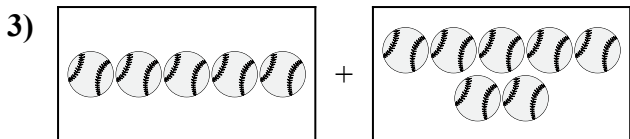

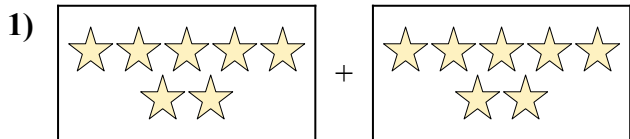
9. $6 + 3 = 9$

10. $10 + 2 = 12$



Выразите визуальную проблему в виде уравнения с ответом.

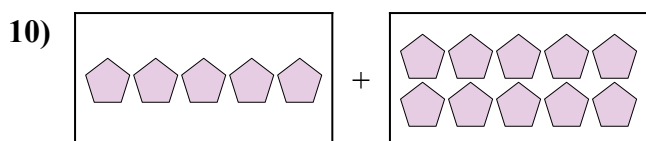
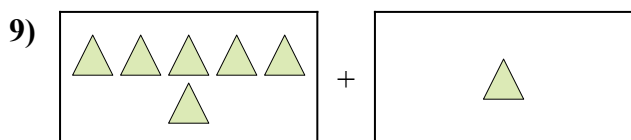
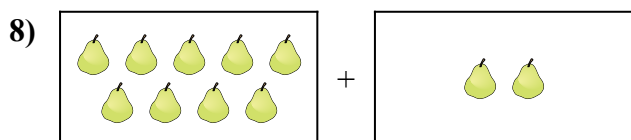
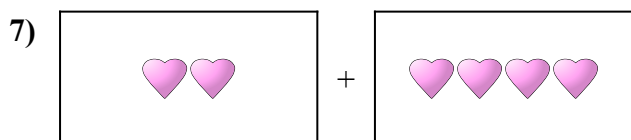
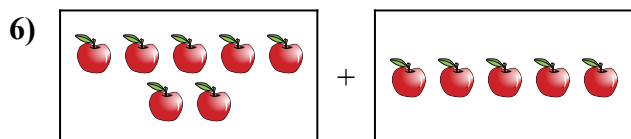
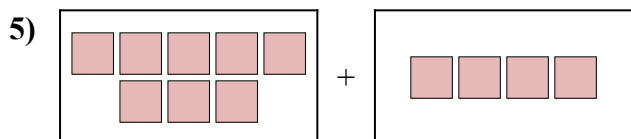
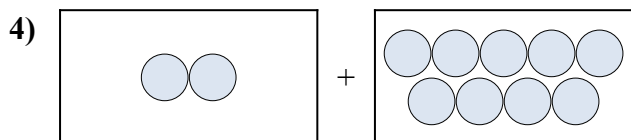
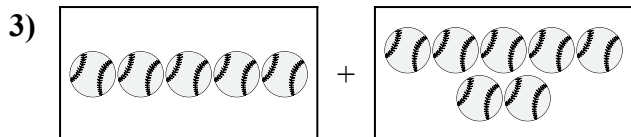

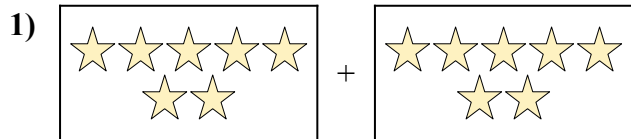
ОТВЕТЫ



1. _____
2. _____
3. _____
4. _____
5. _____
6. _____
7. _____
8. _____
9. _____
10. _____



Выразите визуальную проблему в виде уравнения с ответом.

ОТВЕТЫ

1. $7 + 7 = 14$

2. $6 + 1 = 7$

3. $5 + 7 = 12$

4. $2 + 9 = 11$

5. $8 + 4 = 12$

6. $7 + 5 = 12$

7. $2 + 4 = 6$

8. $9 + 2 = 11$

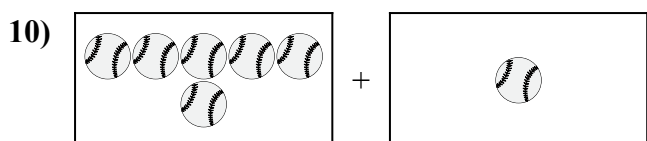
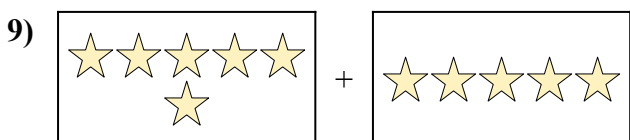
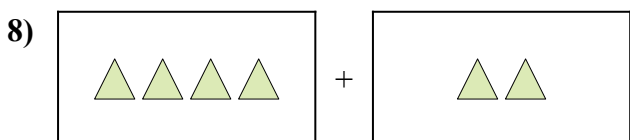
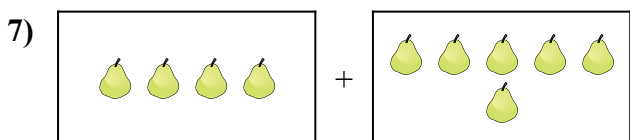
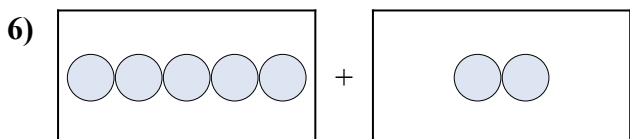
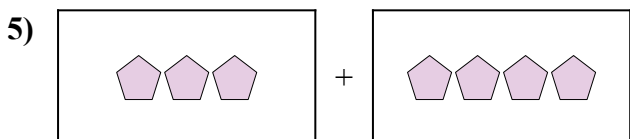
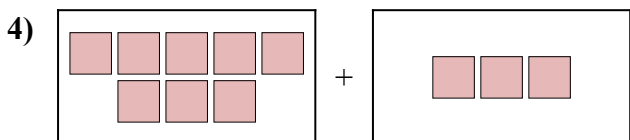

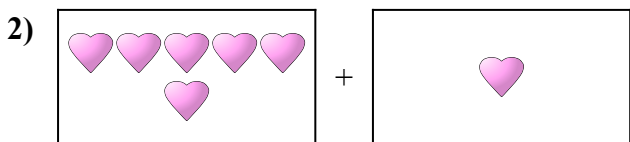
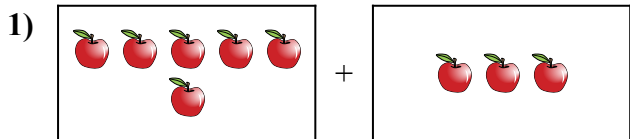
9. $6 + 1 = 7$

10. $5 + 10 = 15$



Выразите визуальную проблему в виде уравнения с ответом.

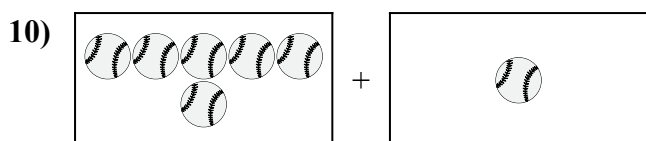
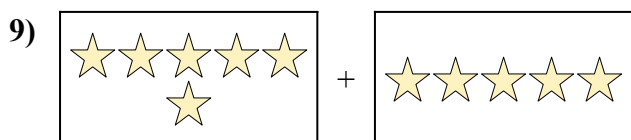
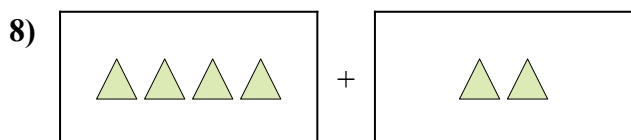
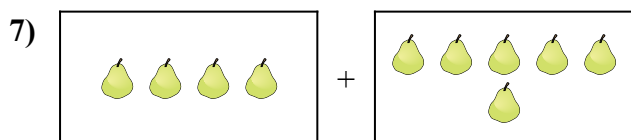
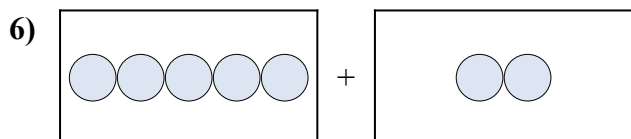
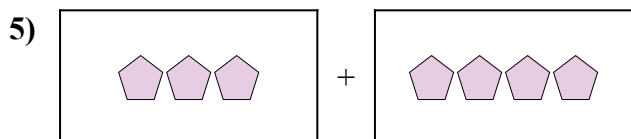
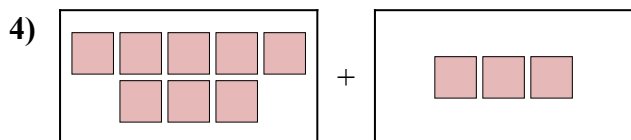

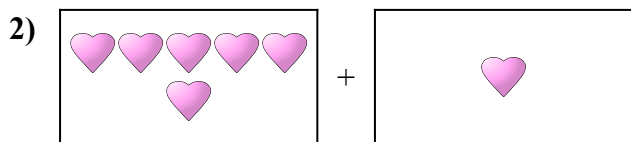
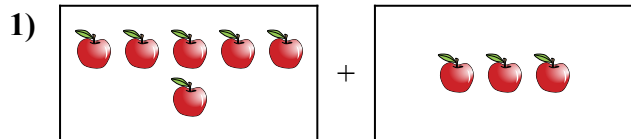
ОТВЕТЫ



1. _____
2. _____
3. _____
4. _____
5. _____
6. _____
7. _____
8. _____
9. _____
10. _____



Выразите визуальную проблему в виде уравнения с ответом.

ОТВЕТЫ

1. $6 + 3 = 9$

2. $6 + 1 = 7$

3. $10 + 4 = 14$

4. $8 + 3 = 11$

5. $3 + 4 = 7$

6. $5 + 2 = 7$

7. $4 + 6 = 10$

8. $4 + 2 = 6$


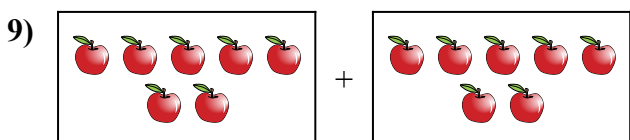
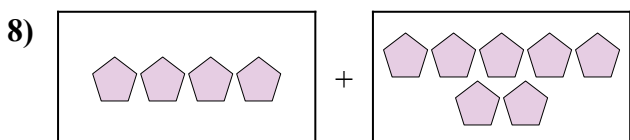
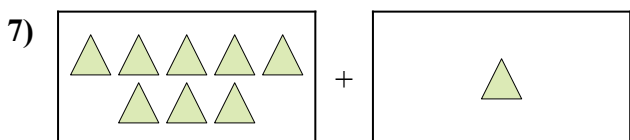
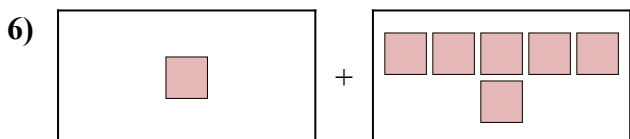
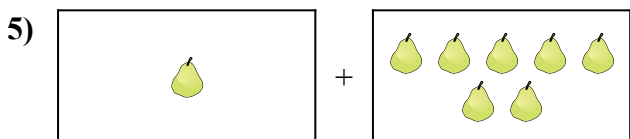
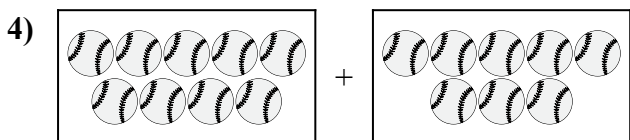
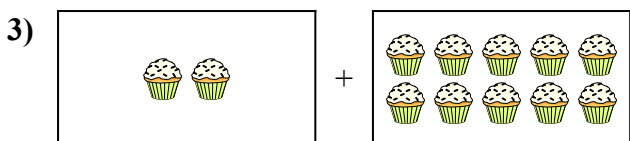
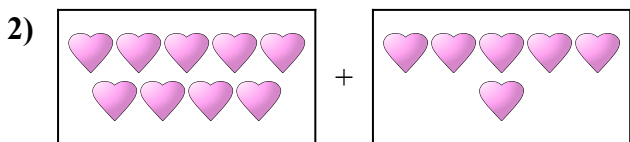
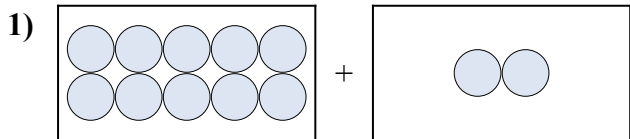
9. $6 + 5 = 11$

10. $6 + 1 = 7$



Выразите визуальную проблему в виде уравнения с ответом.


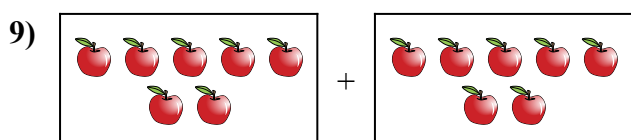
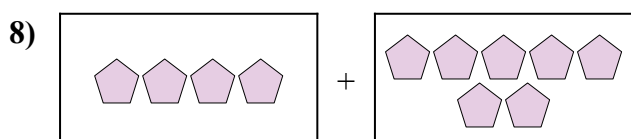
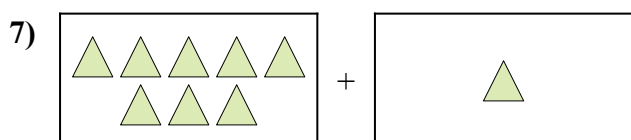
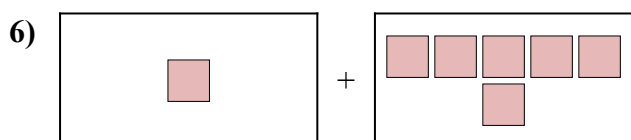
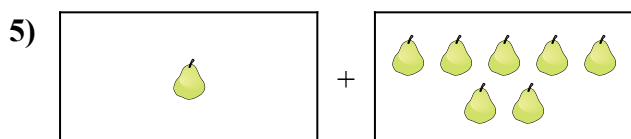
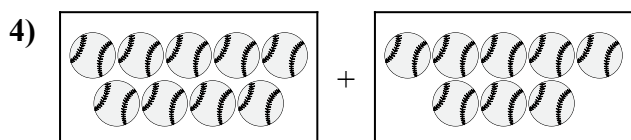
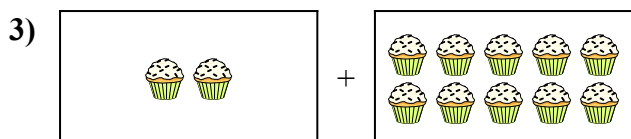
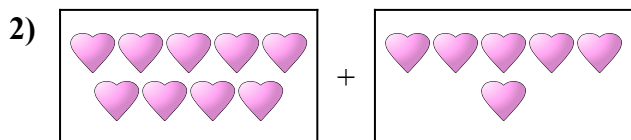
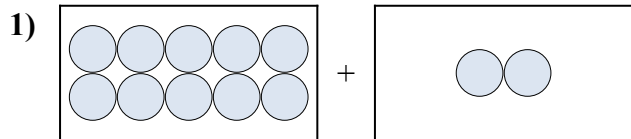
ОТВЕТЫ



1. _____
2. _____
3. _____
4. _____
5. _____
6. _____
7. _____
8. _____
9. _____
10. _____



Выразите визуальную проблему в виде уравнения с ответом.

ОТВЕТЫ

1. $10 + 2 = 12$

2. $9 + 6 = 15$

3. $2 + 10 = 12$

4. $9 + 8 = 17$

5. $1 + 7 = 8$

6. $1 + 6 = 7$

7. $8 + 1 = 9$

8. $4 + 7 = 11$

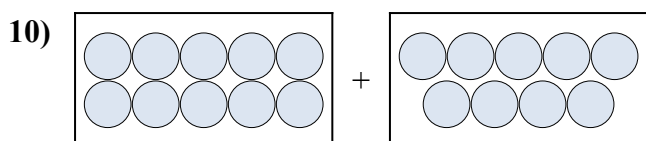
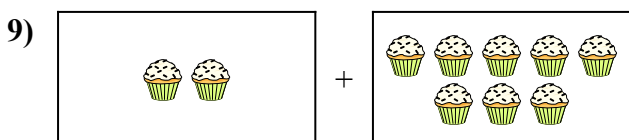
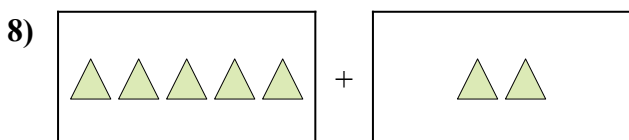
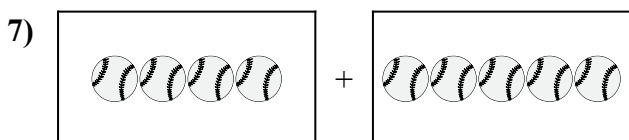
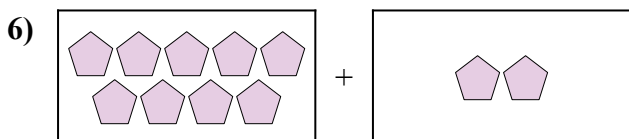
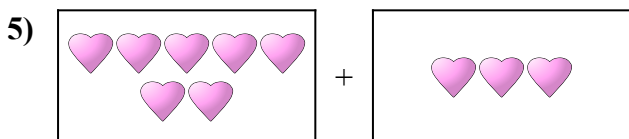
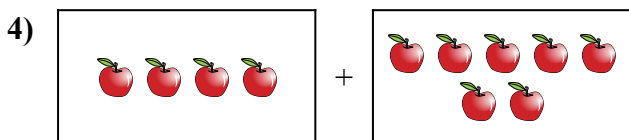
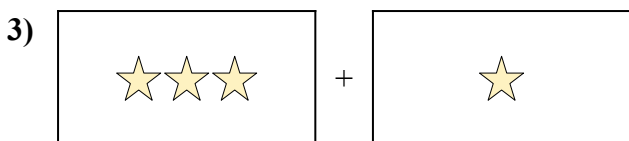
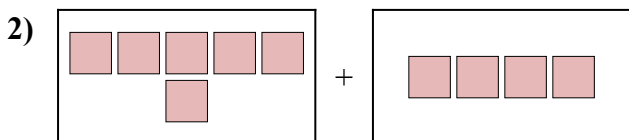
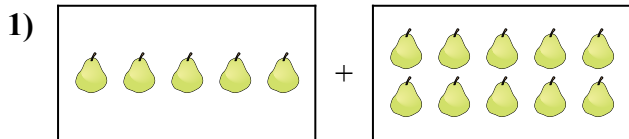
9. $7 + 7 = 14$

10. $9 + 7 = 16$



Выразите визуальную проблему в виде уравнения с ответом.

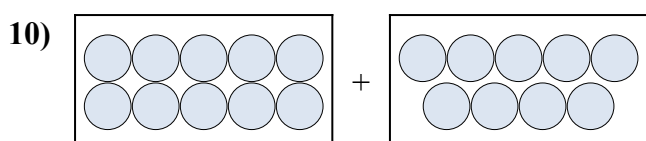
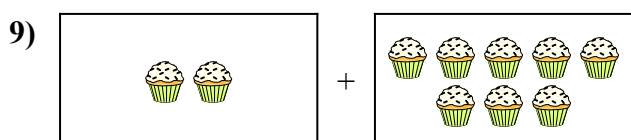
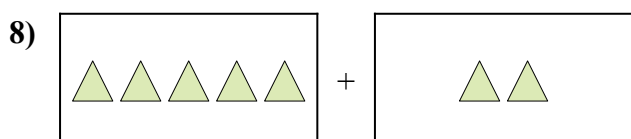
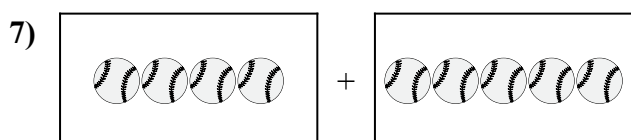
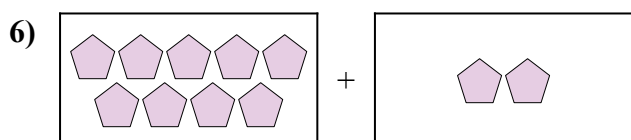
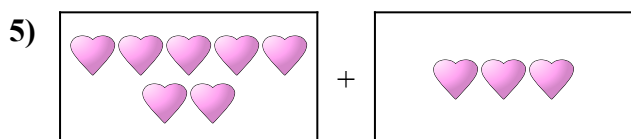
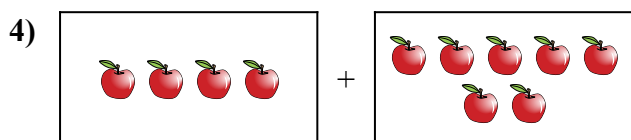
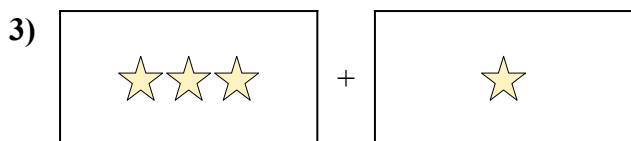
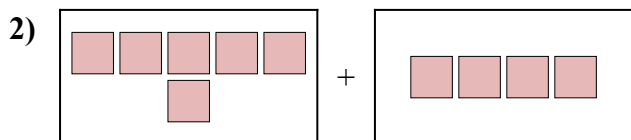
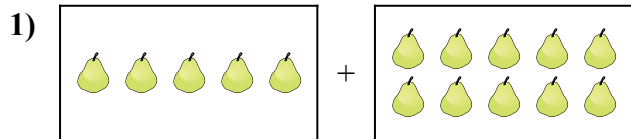
ОТВЕТЫ



1. _____
2. _____
3. _____
4. _____
5. _____
6. _____
7. _____
8. _____
9. _____
10. _____



Выразите визуальную проблему в виде уравнения с ответом.

ОТВЕТЫ

1. $5 + 10 = 15$

2. $6 + 4 = 10$

3. $3 + 1 = 4$

4. $4 + 7 = 11$

5. $7 + 3 = 10$

6. $9 + 2 = 11$

7. $4 + 5 = 9$

8. $5 + 2 = 7$

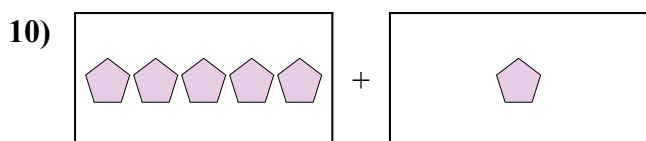
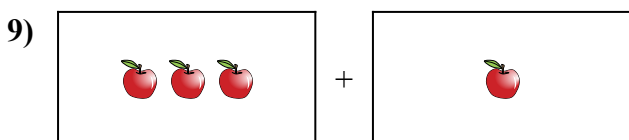
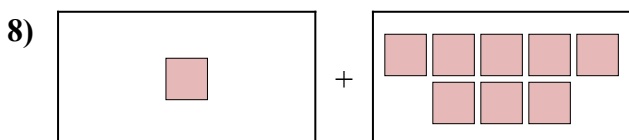
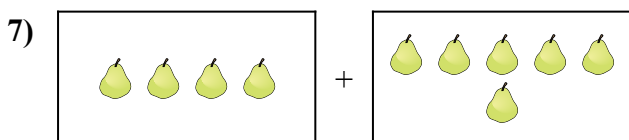

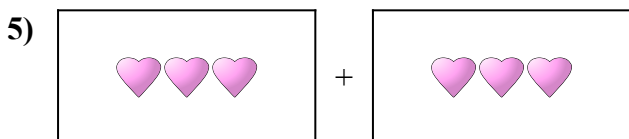
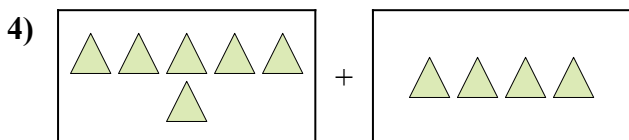
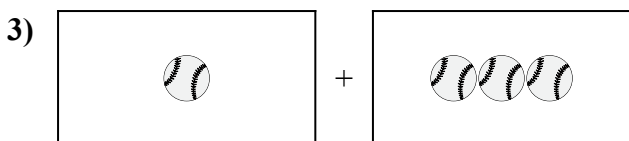

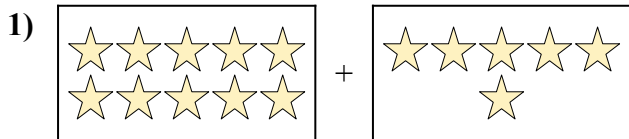
9. $2 + 8 = 10$

10. $10 + 9 = 19$



Выразите визуальную проблему в виде уравнения с ответом.

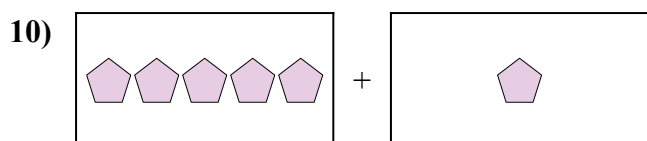
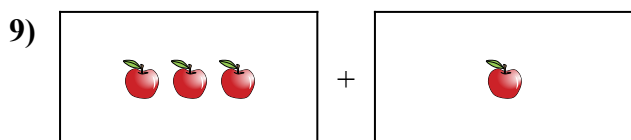
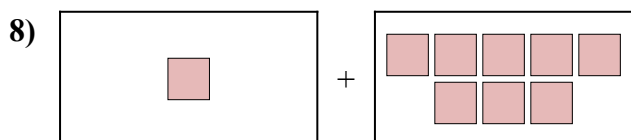
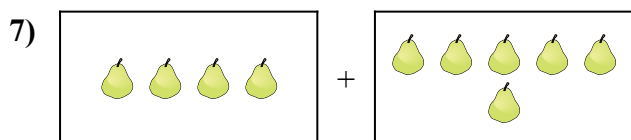

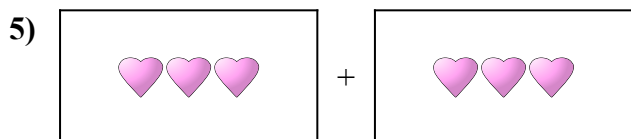
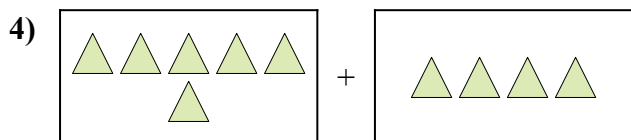
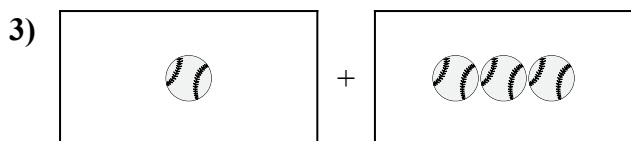

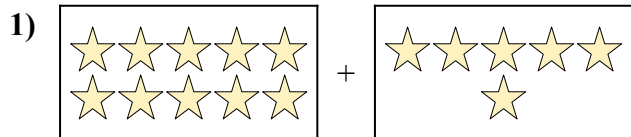
ОТВЕТЫ



1. _____
2. _____
3. _____
4. _____
5. _____
6. _____
7. _____
8. _____
9. _____
10. _____



Выразите визуальную проблему в виде уравнения с ответом.

ОТВЕТЫ

1. $10 + 6 = 16$

2. $3 + 9 = 12$

3. $1 + 3 = 4$

4. $6 + 4 = 10$

5. $3 + 3 = 6$

6. $7 + 3 = 10$

7. $4 + 6 = 10$

8. $1 + 8 = 9$

9. $3 + 1 = 4$

10. $5 + 1 = 6$