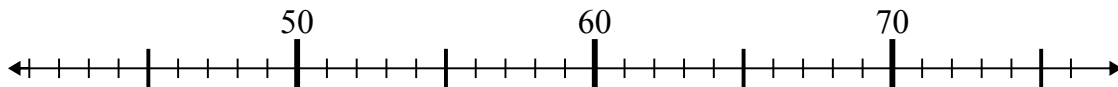




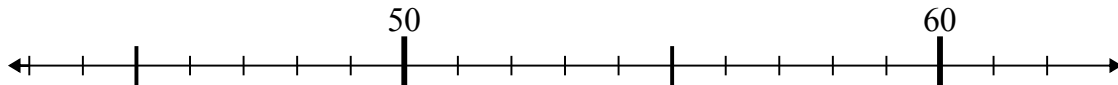
Используйте числовые прямые для решения примеров.

Ответы

1) $52 - 10 =$



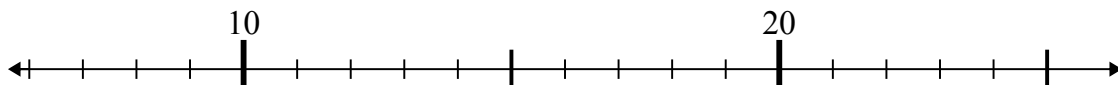
2) $60 - 1 =$



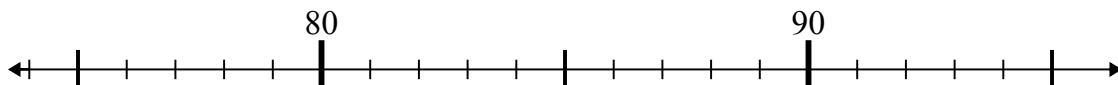
3) $58 - 6 =$



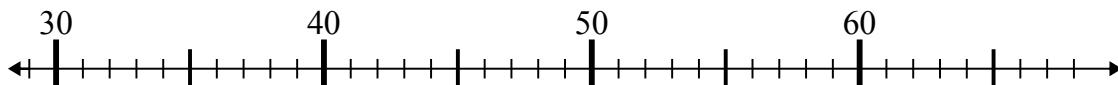
4) $13 - 1 =$



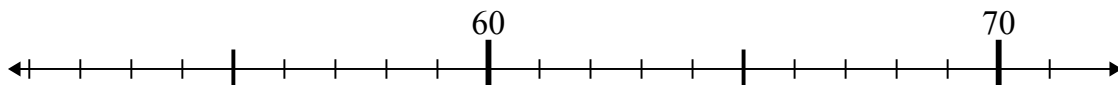
5) $86 + 9 =$



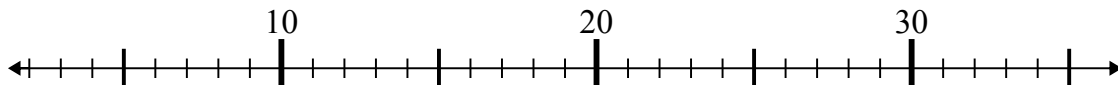
6) $31 + 26 =$



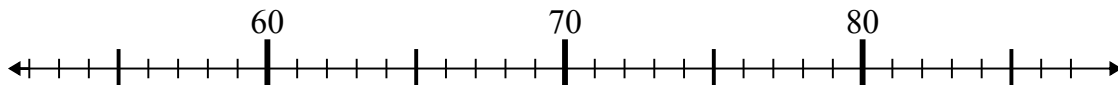
7) $55 + 2 =$



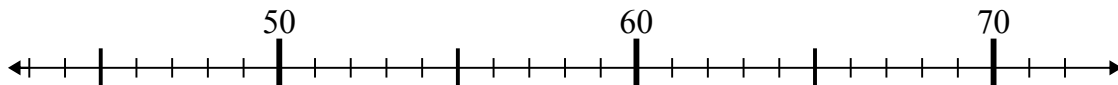
8) $35 - 18 =$



9) $76 - 24 =$



10) $46 + 15 =$

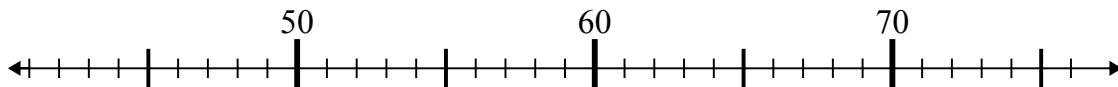


1. _____
2. _____
3. _____
4. _____
5. _____
6. _____
7. _____
8. _____
9. _____
10. _____

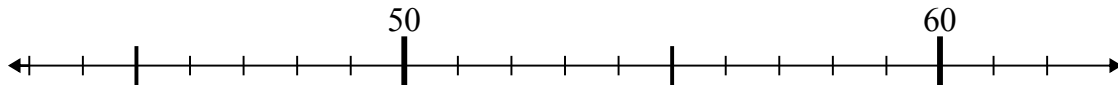


Используйте числовые прямые для решения примеров.

1) $52 - 10 =$



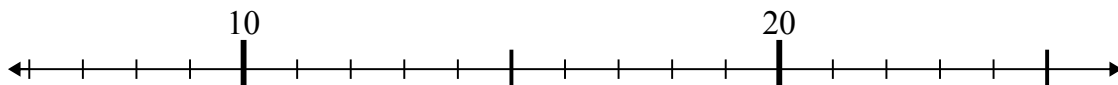
2) $60 - 1 =$



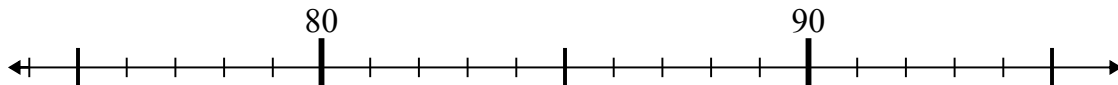
3) $58 - 6 =$



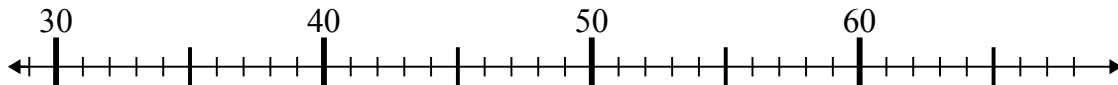
4) $13 - 1 =$



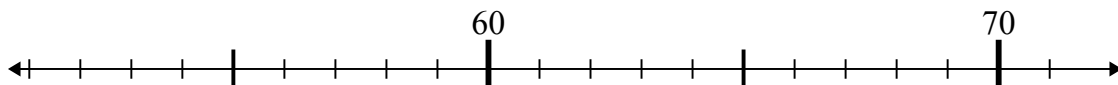
5) $86 + 9 =$



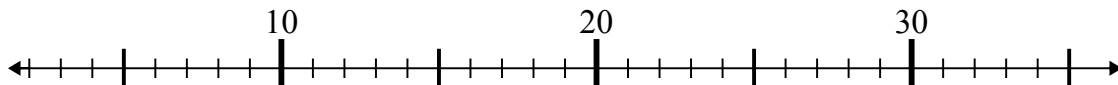
6) $31 + 26 =$



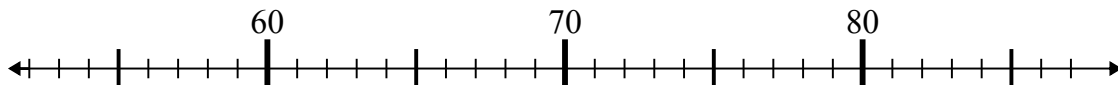
7) $55 + 2 =$



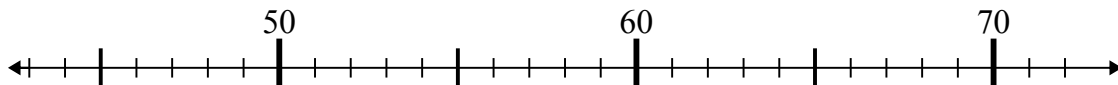
8) $35 - 18 =$



9) $76 - 24 =$



10) $46 + 15 =$

**Отв**еты1. 422. 593. 524. 125. 956. 577. 578. 179. 5210. 61