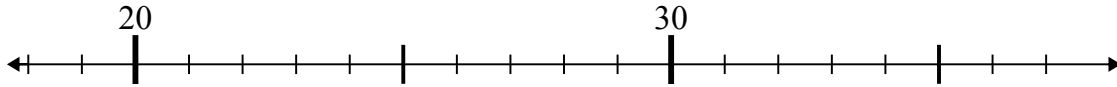




Используйте числовые прямые для решения примеров.

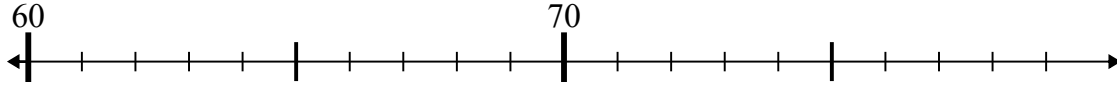
Ответы

1)  $23 - 4 =$



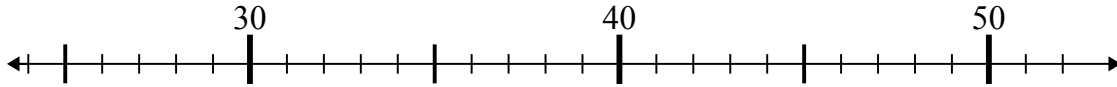
1. \_\_\_\_\_

2)  $73 - 6 =$



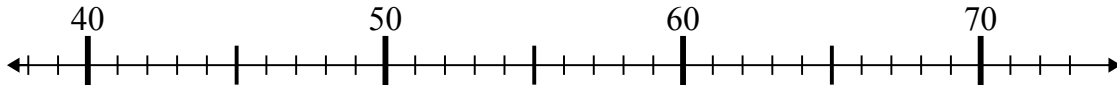
2. \_\_\_\_\_

3)  $44 + 2 =$



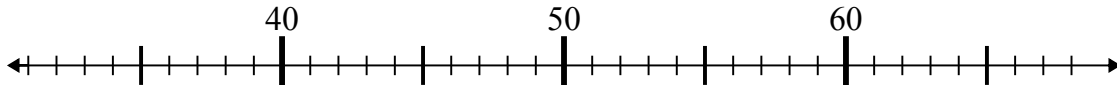
3. \_\_\_\_\_

4)  $42 + 1 =$



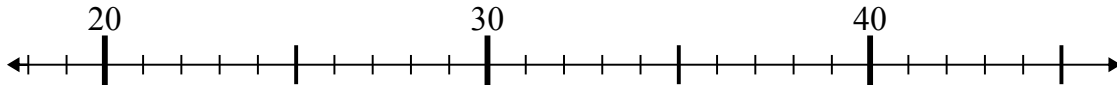
4. \_\_\_\_\_

5)  $40 + 13 =$



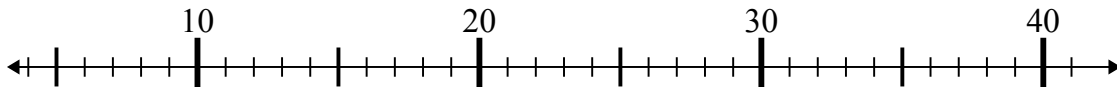
5. \_\_\_\_\_

6)  $26 + 0 =$



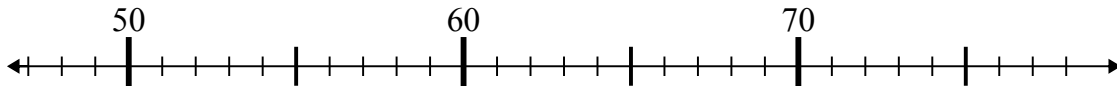
6. \_\_\_\_\_

7)  $36 - 27 =$



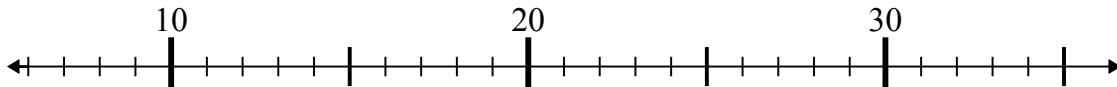
7. \_\_\_\_\_

8)  $54 - 5 =$



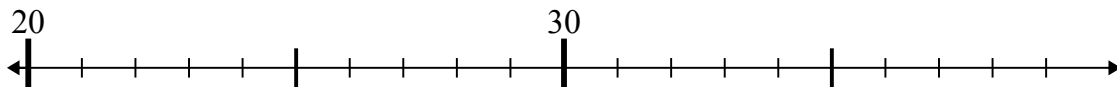
8. \_\_\_\_\_

9)  $10 + 1 =$



9. \_\_\_\_\_

10)  $24 + 1 =$

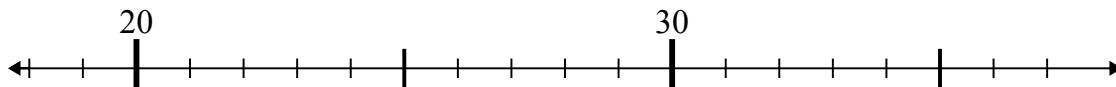


10. \_\_\_\_\_



Используйте числовые прямые для решения примеров.

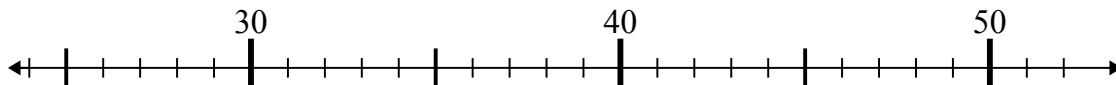
1)  $23 - 4 =$



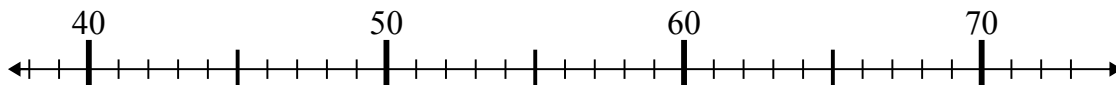
2)  $73 - 6 =$



3)  $44 + 2 =$



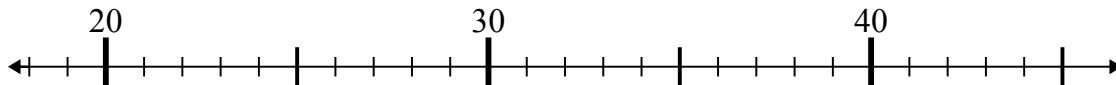
4)  $42 + 1 =$



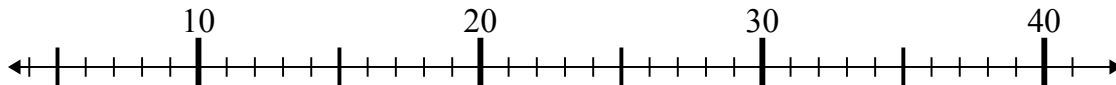
5)  $40 + 13 =$



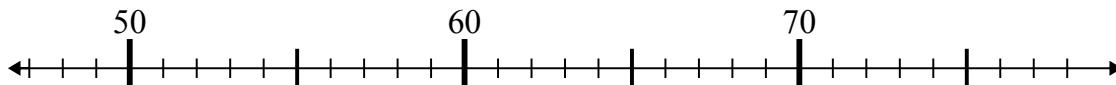
6)  $26 + 0 =$



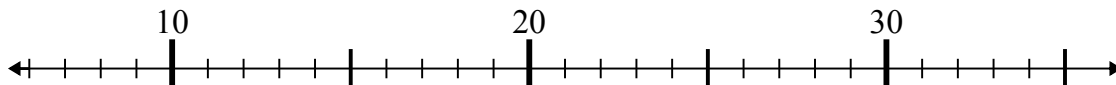
7)  $36 - 27 =$



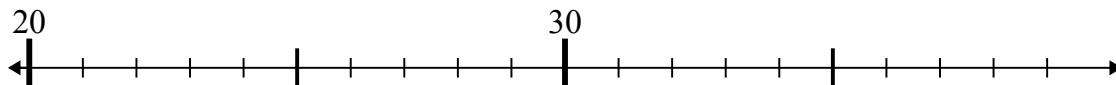
8)  $54 - 5 =$



9)  $10 + 1 =$



10)  $24 + 1 =$

Ответы1. 192. 673. 464. 435. 536. 267. 98. 499. 1110. 25