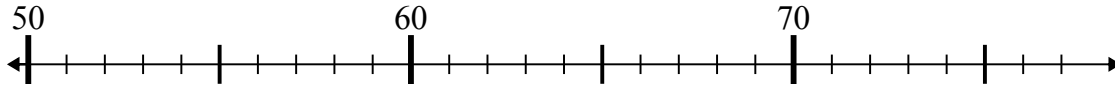




Используйте числовые прямые для решения примеров.

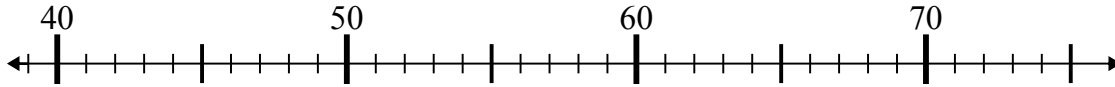
Ответы

1) $70 - 16 =$



1. _____

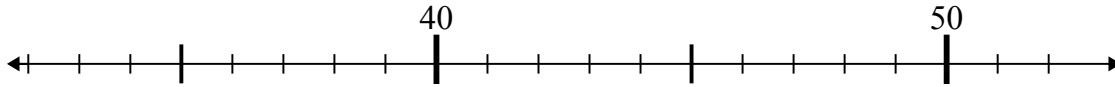
2) $39 + 6 =$



2. _____

3. _____

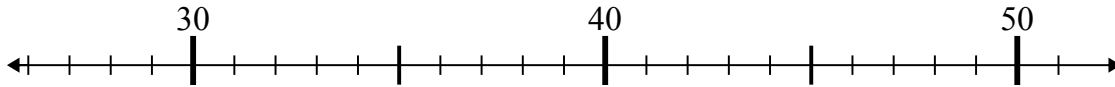
3) $46 + 3 =$



4. _____

5. _____

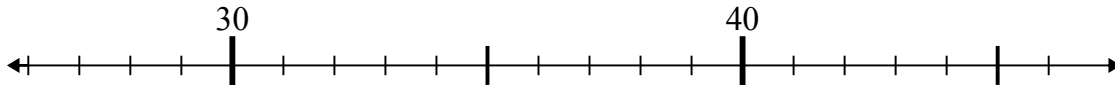
4) $31 + 8 =$



6. _____

7. _____

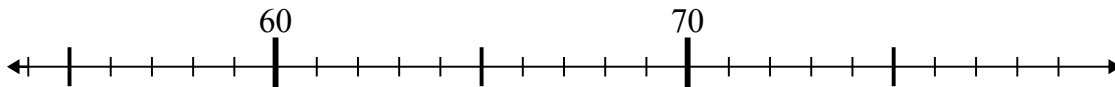
5) $36 - 1 =$



8. _____

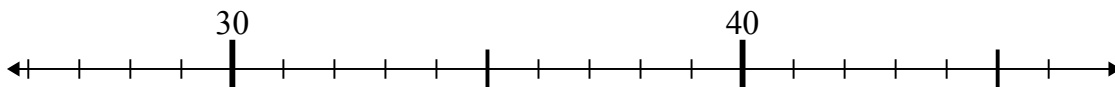
9. _____

6) $70 + 8 =$

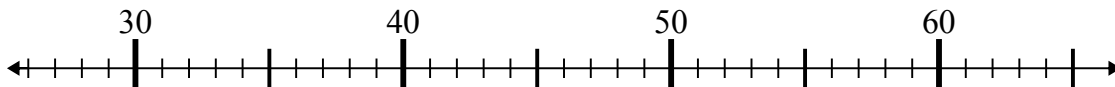


10. _____

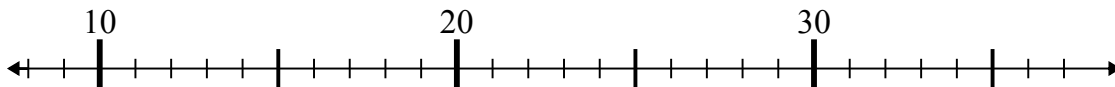
7) $46 - 1 =$



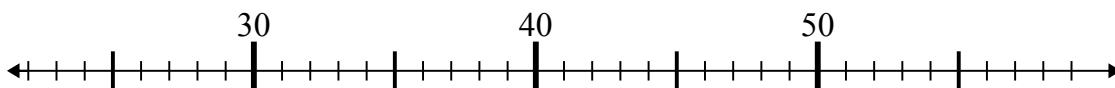
8) $27 + 8 =$



9) $18 + 1 =$



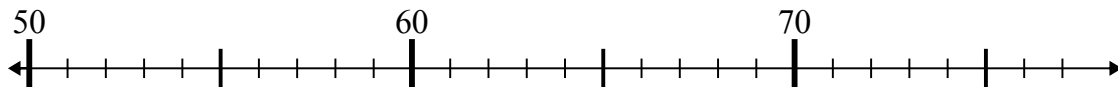
10) $25 + 3 =$



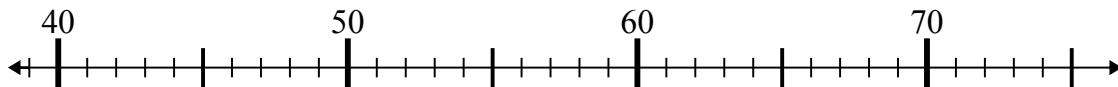


Используйте числовые прямые для решения примеров.

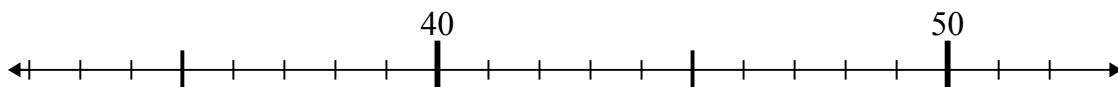
1) $70 - 16 =$



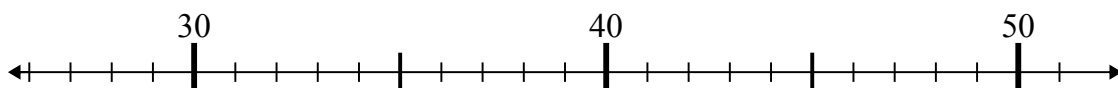
2) $39 + 6 =$



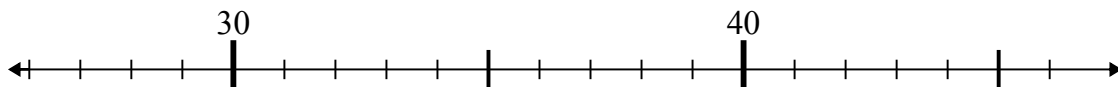
3) $46 + 3 =$



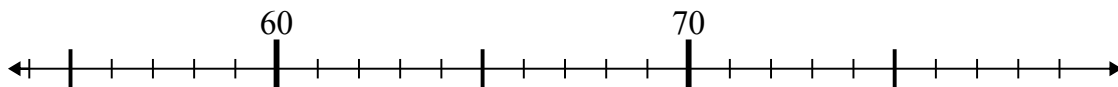
4) $31 + 8 =$



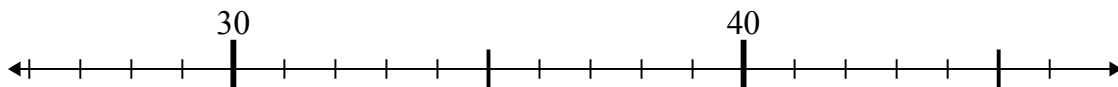
5) $36 - 1 =$



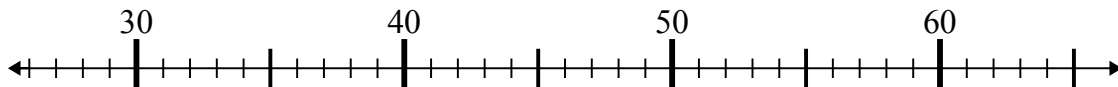
6) $70 + 8 =$



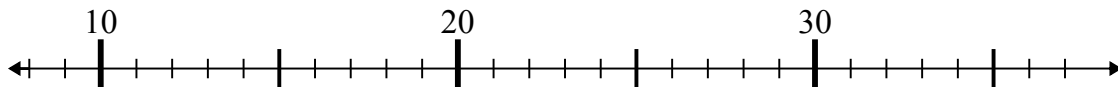
7) $46 - 1 =$



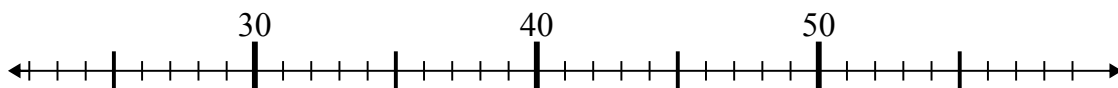
8) $27 + 8 =$



9) $18 + 1 =$



10) $25 + 3 =$

Ответы1. 542. 453. 494. 395. 356. 787. 458. 359. 1910. 28