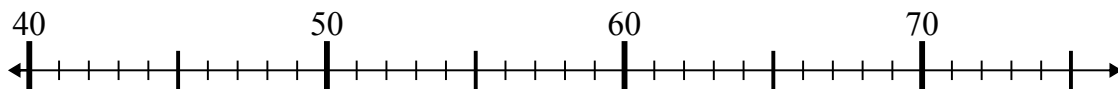




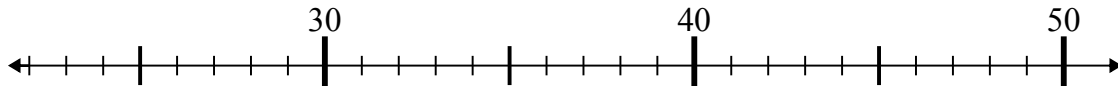
Используйте числовые прямые для решения примеров.

**Ответы**

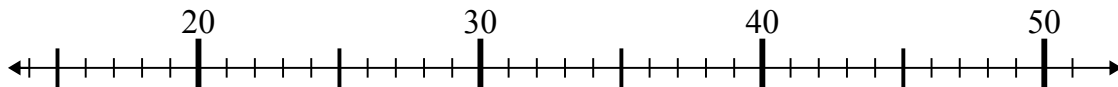
1)  $46 - 5 =$



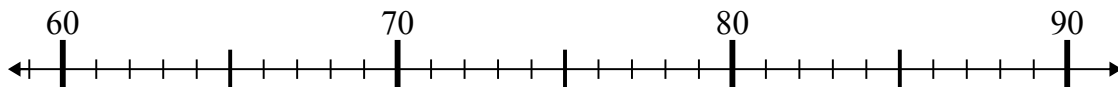
2)  $22 + 19 =$



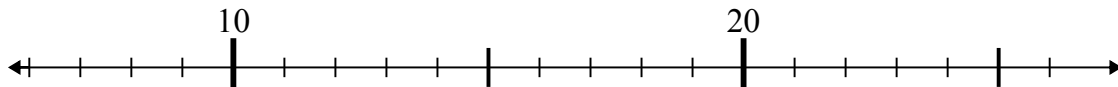
3)  $21 + 25 =$



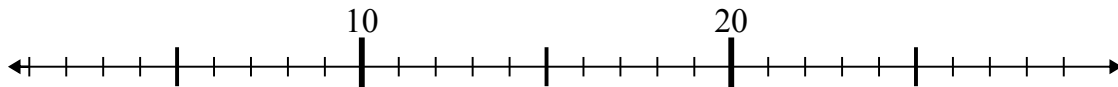
4)  $73 + 15 =$



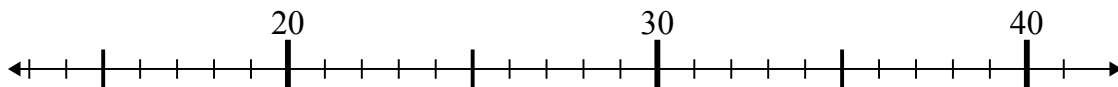
5)  $11 + 2 =$



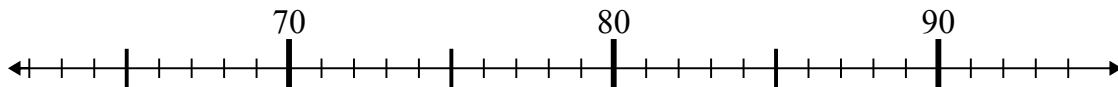
6)  $5 + 1 =$



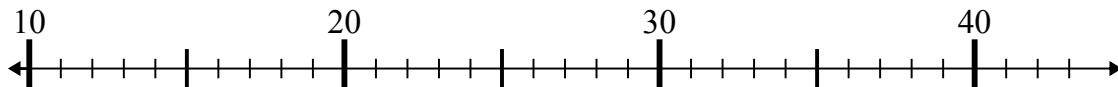
7)  $23 + 4 =$



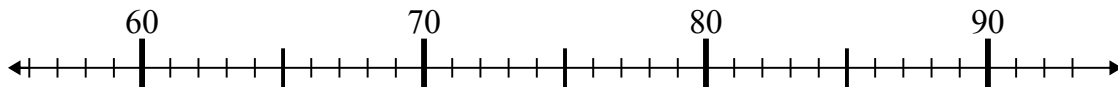
8)  $82 - 14 =$



9)  $22 - 10 =$



10)  $65 + 1 =$

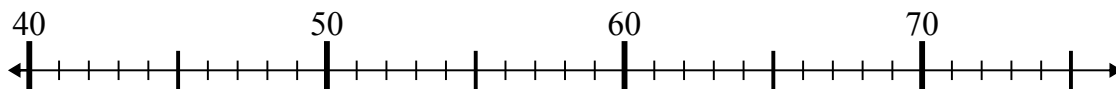


1. \_\_\_\_\_
2. \_\_\_\_\_
3. \_\_\_\_\_
4. \_\_\_\_\_
5. \_\_\_\_\_
6. \_\_\_\_\_
7. \_\_\_\_\_
8. \_\_\_\_\_
9. \_\_\_\_\_
10. \_\_\_\_\_

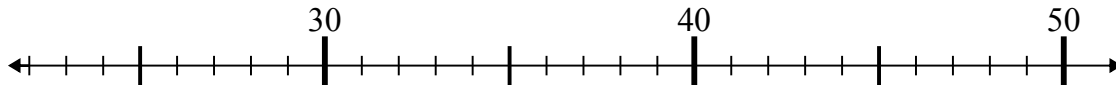


Используйте числовые прямые для решения примеров.

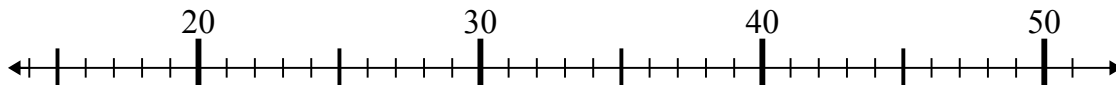
1)  $46 - 5 =$



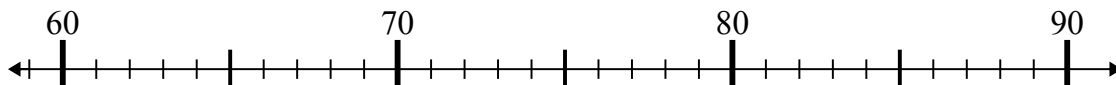
2)  $22 + 19 =$



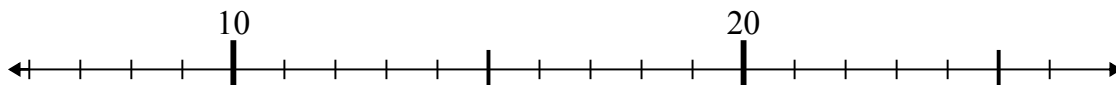
3)  $21 + 25 =$



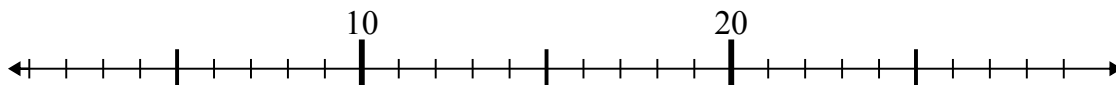
4)  $73 + 15 =$



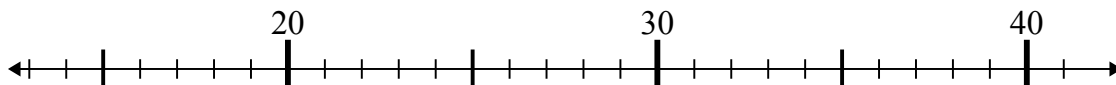
5)  $11 + 2 =$



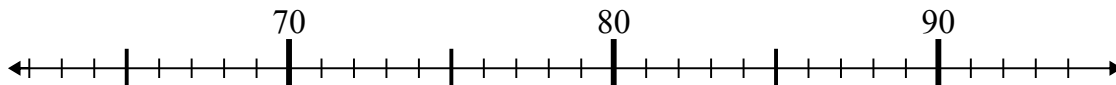
6)  $5 + 1 =$



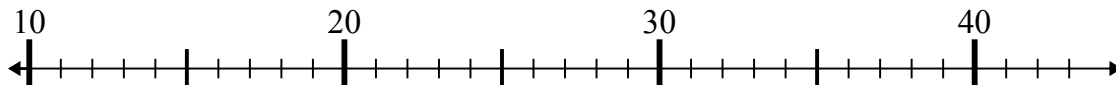
7)  $23 + 4 =$



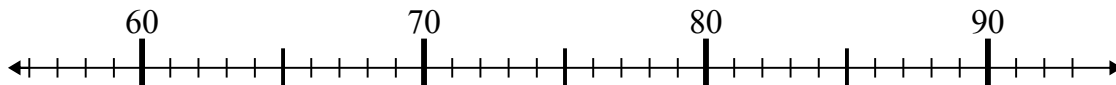
8)  $82 - 14 =$



9)  $22 - 10 =$



10)  $65 + 1 =$

Ответы1. 412. 413. 464. 885. 136. 67. 278. 689. 1210. 66