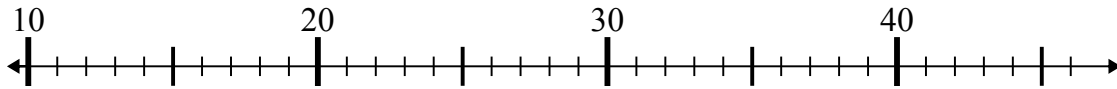




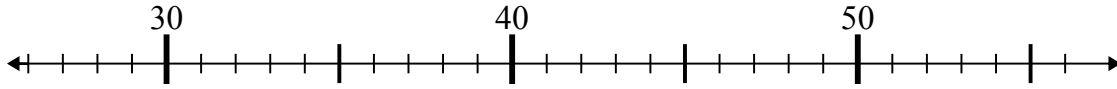
Используйте числовые прямые для решения примеров.

Ответы

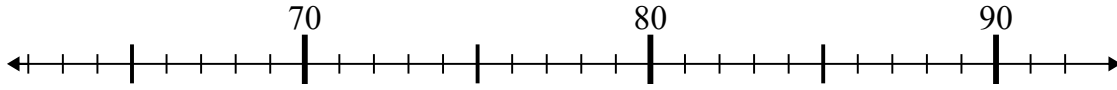
1) $24 - 11 =$



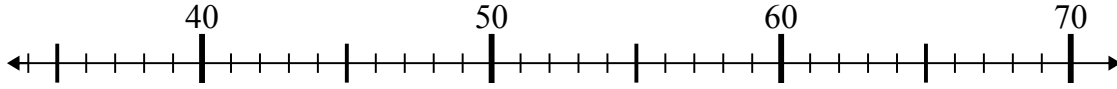
2) $29 + 6 =$



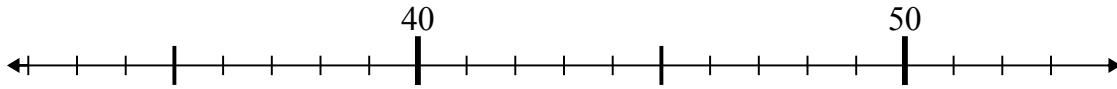
3) $72 + 7 =$



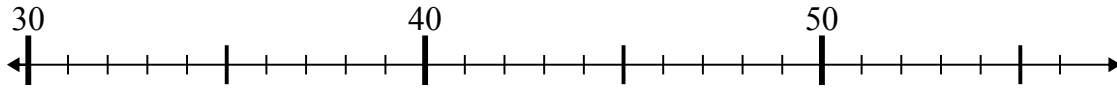
4) $41 + 16 =$



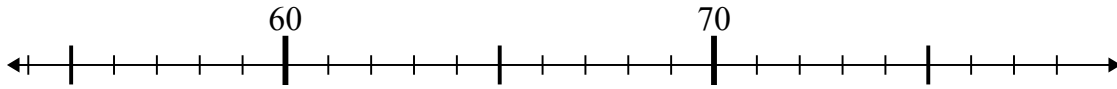
5) $51 - 3 =$



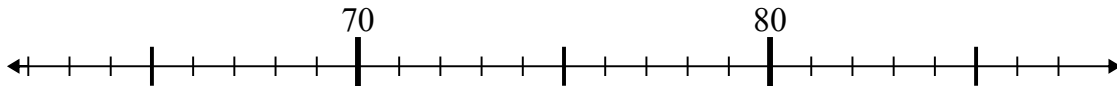
6) $35 - 0 =$



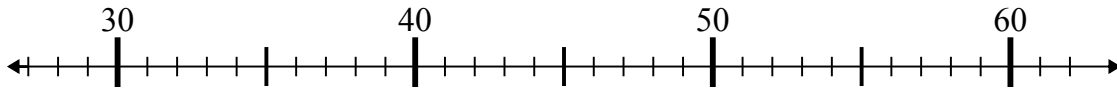
7) $65 + 10 =$



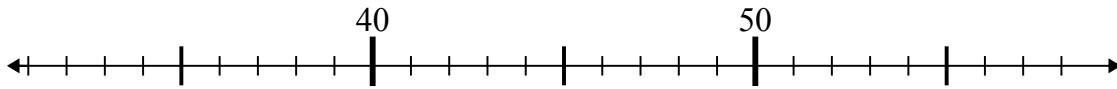
8) $65 + 14 =$



9) $57 - 16 =$



10) $58 - 19 =$



1. _____

2. _____

3. _____

4. _____

5. _____

6. _____

7. _____

8. _____

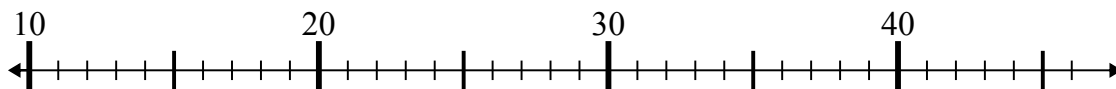
9. _____

10. _____

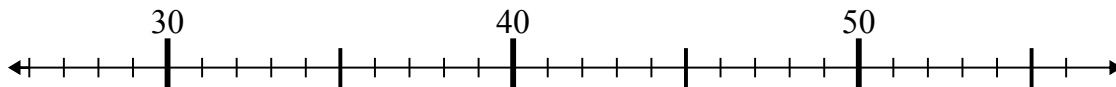


Используйте числовые прямые для решения примеров.

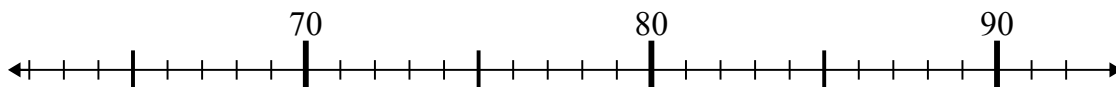
1) $24 - 11 =$



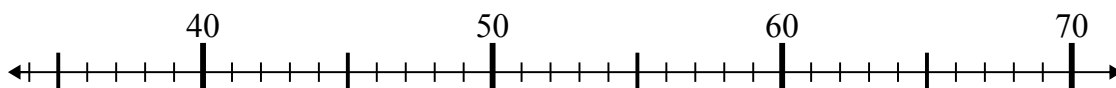
2) $29 + 6 =$



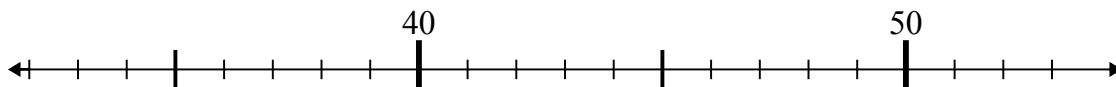
3) $72 + 7 =$



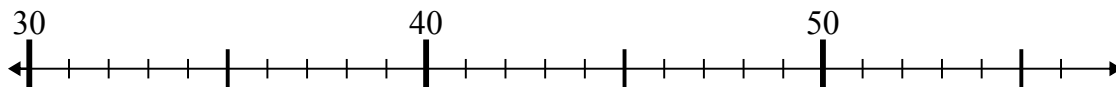
4) $41 + 16 =$



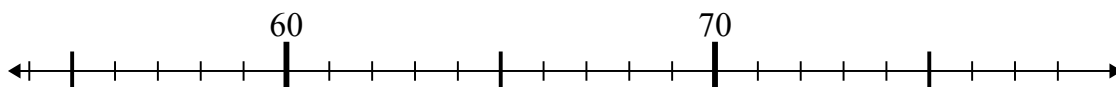
5) $51 - 3 =$



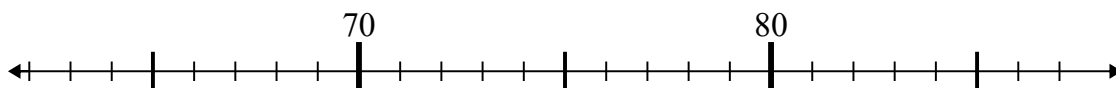
6) $35 - 0 =$



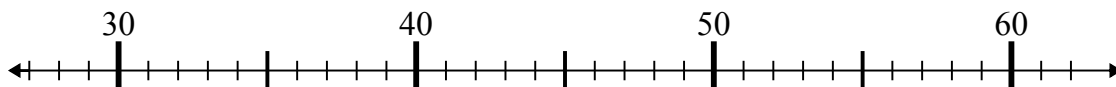
7) $65 + 10 =$



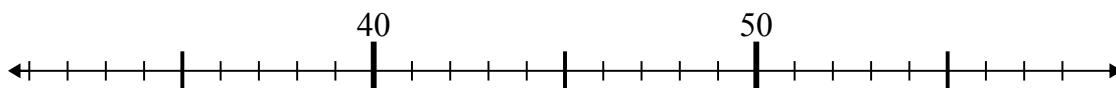
8) $65 + 14 =$



9) $57 - 16 =$



10) $58 - 19 =$

Ответы1. 132. 353. 794. 575. 486. 357. 758. 799. 4110. 39