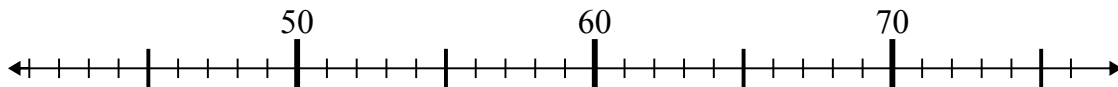




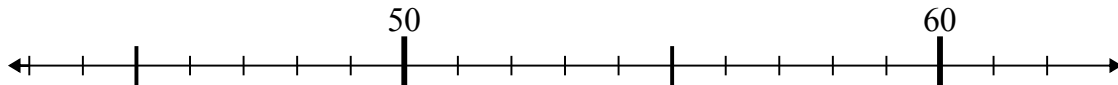
Используйте числовые прямые для решения примеров.

Отвeты

1) $52 - 10 =$



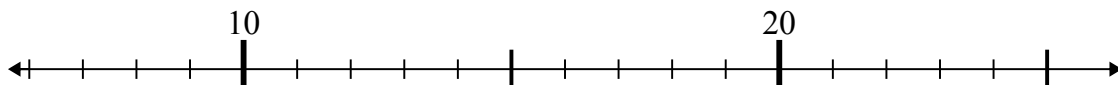
2) $60 - 1 =$



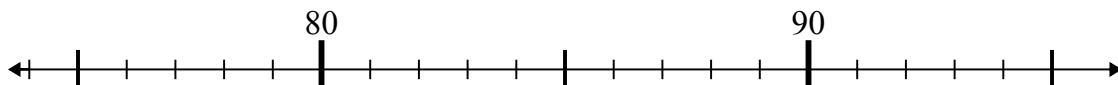
3) $58 - 6 =$



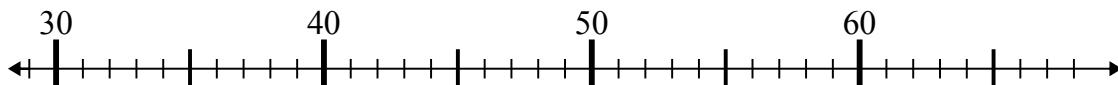
4) $13 - 1 =$



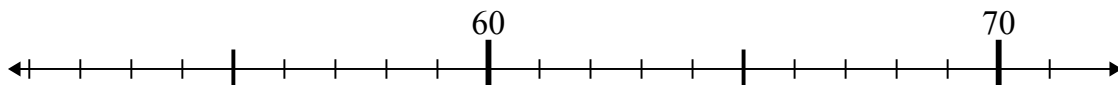
5) $86 + 9 =$



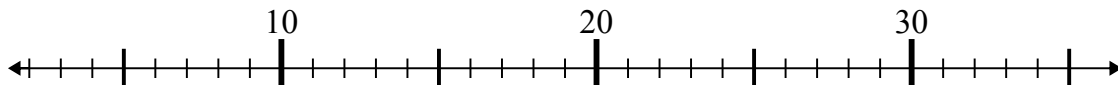
6) $31 + 26 =$



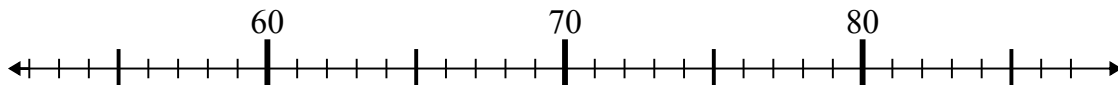
7) $55 + 2 =$



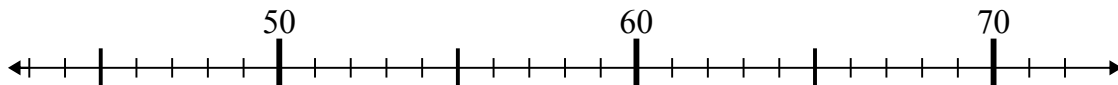
8) $35 - 18 =$



9) $76 - 24 =$



10) $46 + 15 =$

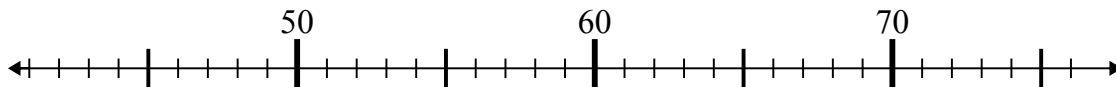


1. _____
2. _____
3. _____
4. _____
5. _____
6. _____
7. _____
8. _____
9. _____
10. _____

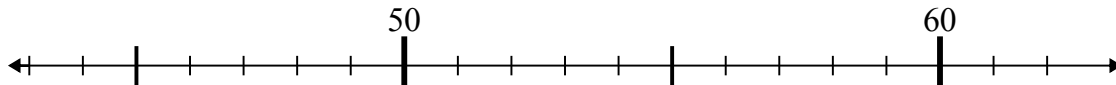


Используйте числовые прямые для решения примеров.

1) $52 - 10 =$



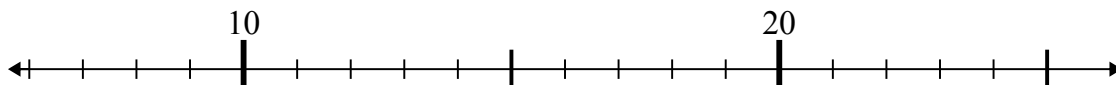
2) $60 - 1 =$



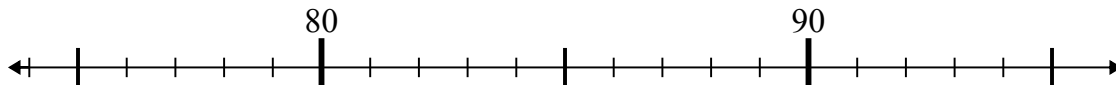
3) $58 - 6 =$



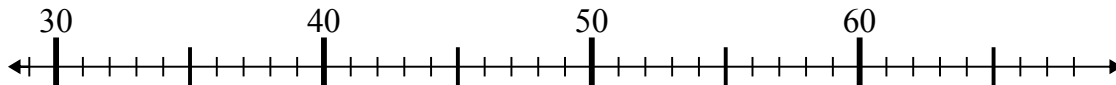
4) $13 - 1 =$



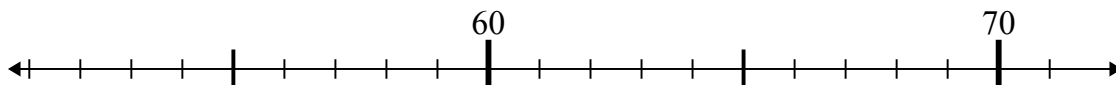
5) $86 + 9 =$



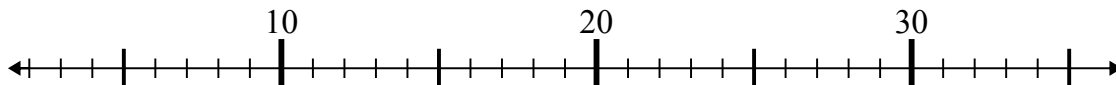
6) $31 + 26 =$



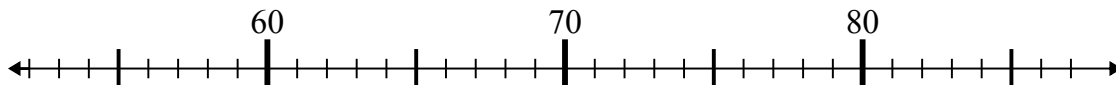
7) $55 + 2 =$



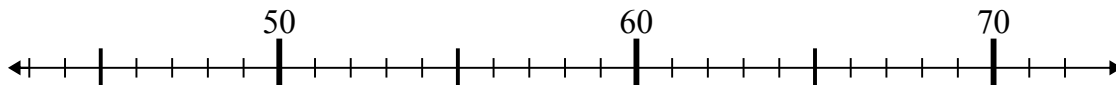
8) $35 - 18 =$



9) $76 - 24 =$



10) $46 + 15 =$

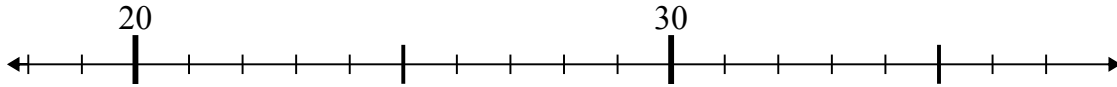
**Отв**1. 422. 593. 524. 125. 956. 577. 578. 179. 5210. 61



Используйте числовые прямые для решения примеров.

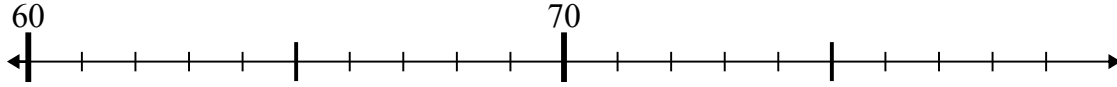
Ответы

1) $23 - 4 =$



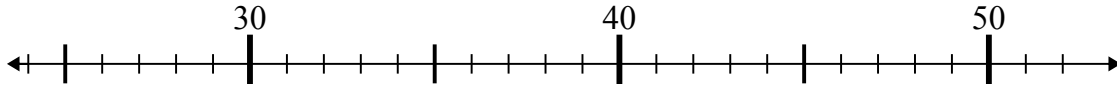
1. _____

2) $73 - 6 =$



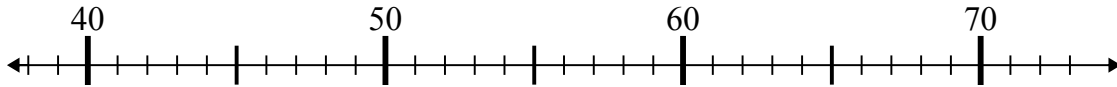
2. _____

3) $44 + 2 =$



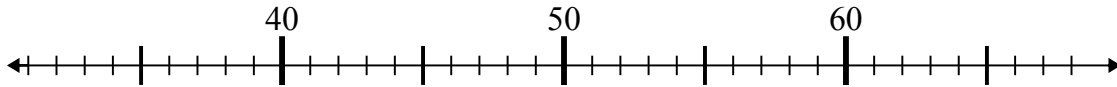
3. _____

4) $42 + 1 =$



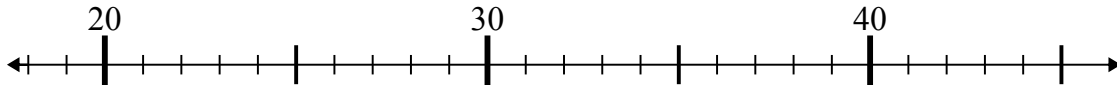
4. _____

5) $40 + 13 =$



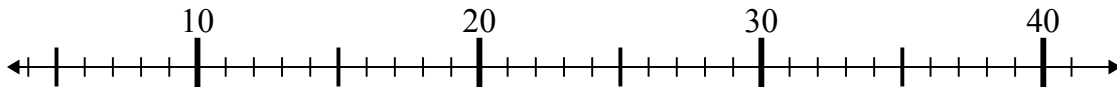
5. _____

6) $26 + 0 =$



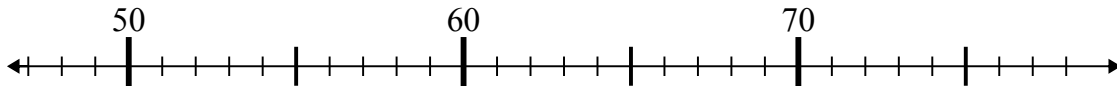
6. _____

7) $36 - 27 =$



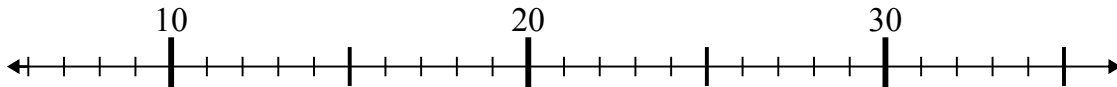
7. _____

8) $54 - 5 =$



8. _____

9) $10 + 1 =$



9. _____

10) $24 + 1 =$

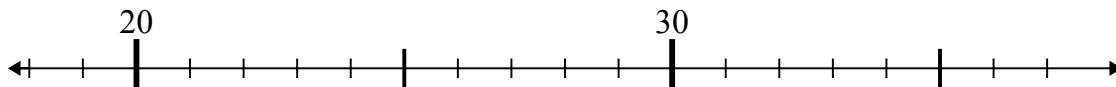


10. _____



Используйте числовые прямые для решения примеров.

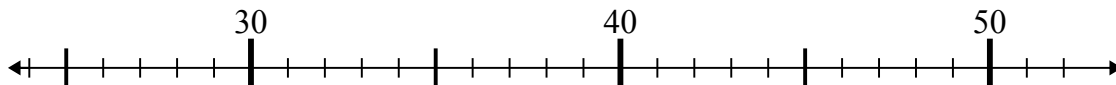
1) $23 - 4 =$



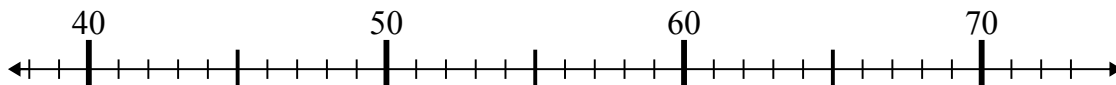
2) $73 - 6 =$



3) $44 + 2 =$



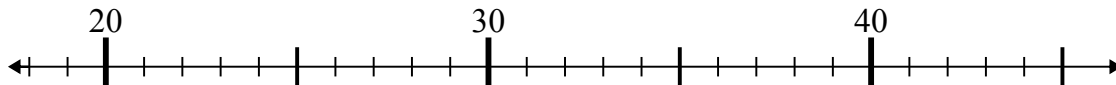
4) $42 + 1 =$



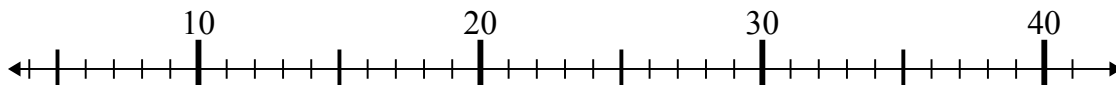
5) $40 + 13 =$



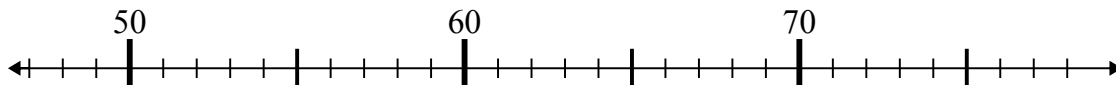
6) $26 + 0 =$



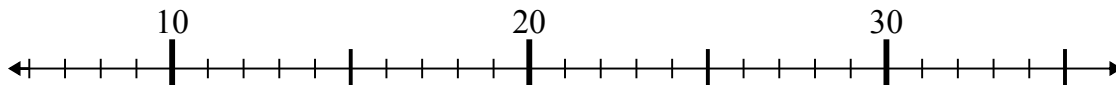
7) $36 - 27 =$



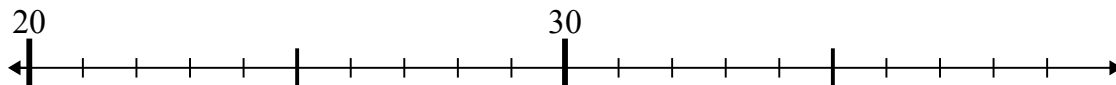
8) $54 - 5 =$



9) $10 + 1 =$



10) $24 + 1 =$

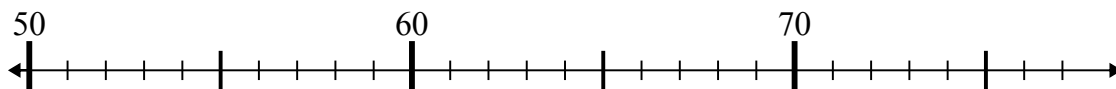
Ответы1. 192. 673. 464. 435. 536. 267. 98. 499. 1110. 25



Используйте числовые прямые для решения примеров.

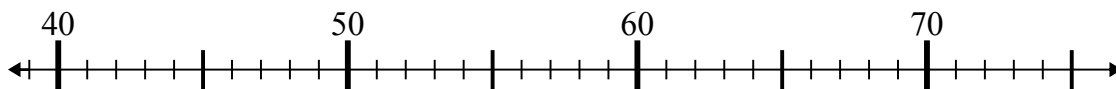
Ответы

1) $70 - 16 =$



1. _____

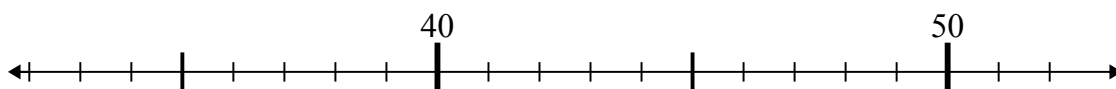
2) $39 + 6 =$



2. _____

3. _____

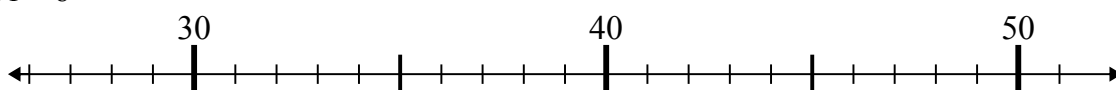
3) $46 + 3 =$



4. _____

5. _____

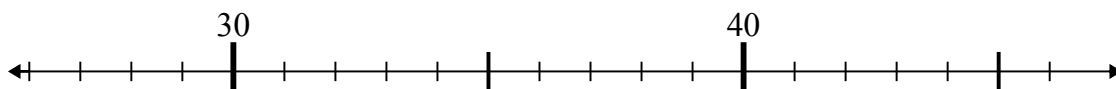
4) $31 + 8 =$



6. _____

7. _____

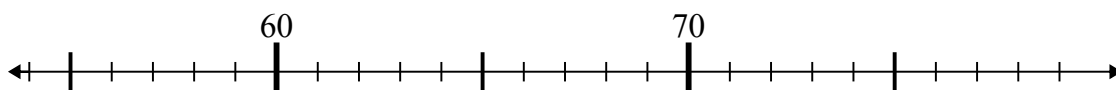
5) $36 - 1 =$



8. _____

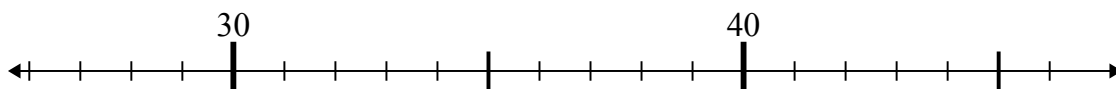
9. _____

6) $70 + 8 =$

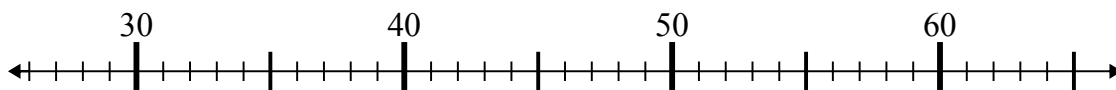


10. _____

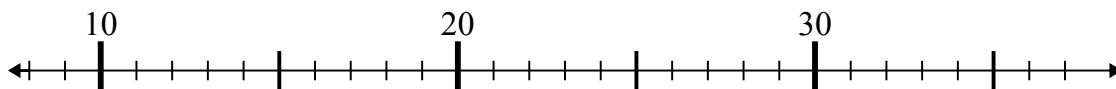
7) $46 - 1 =$



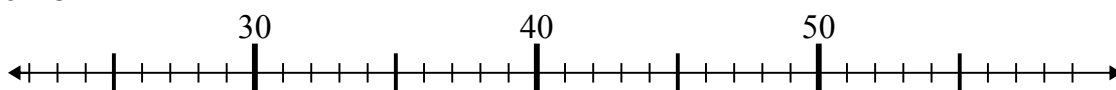
8) $27 + 8 =$



9) $18 + 1 =$



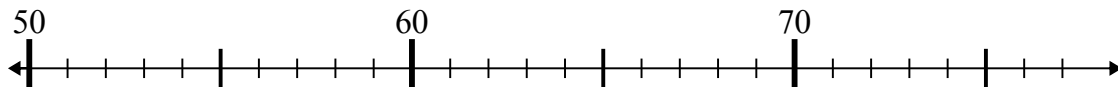
10) $25 + 3 =$



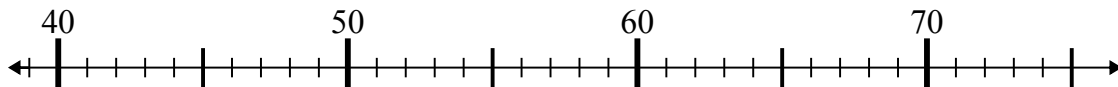


Используйте числовые прямые для решения примеров.

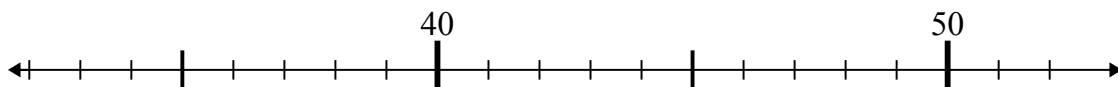
1) $70 - 16 =$



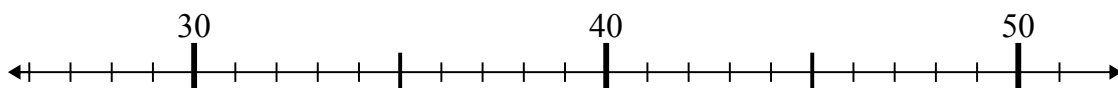
2) $39 + 6 =$



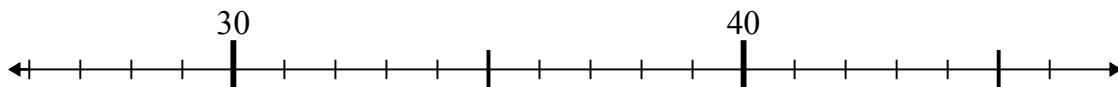
3) $46 + 3 =$



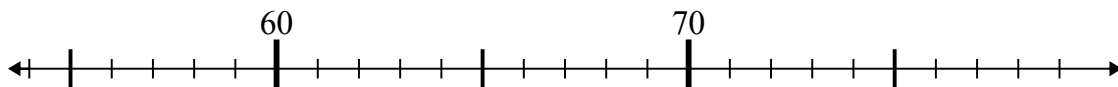
4) $31 + 8 =$



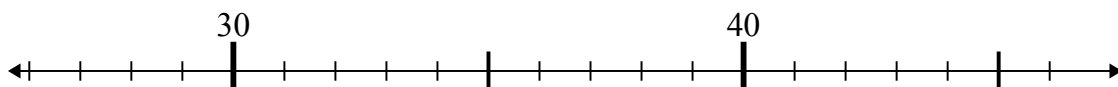
5) $36 - 1 =$



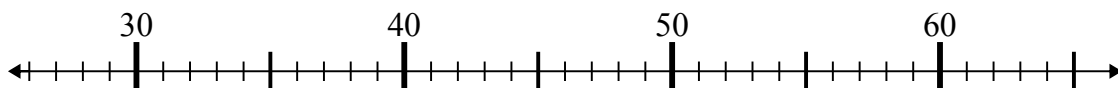
6) $70 + 8 =$



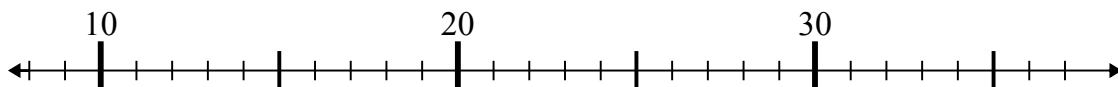
7) $46 - 1 =$



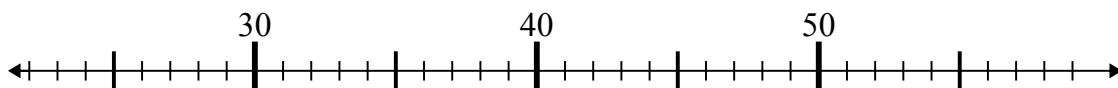
8) $27 + 8 =$



9) $18 + 1 =$



10) $25 + 3 =$

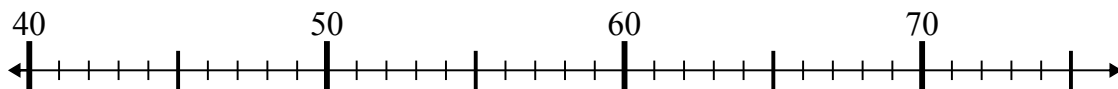
**Отв**еты1. 542. 453. 494. 395. 356. 787. 458. 359. 1910. 28



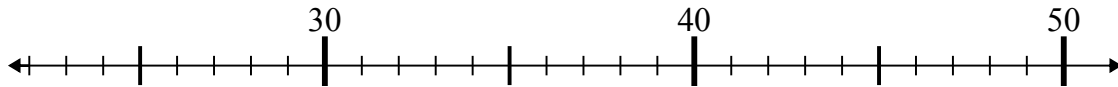
Используйте числовые прямые для решения примеров.

Ответы

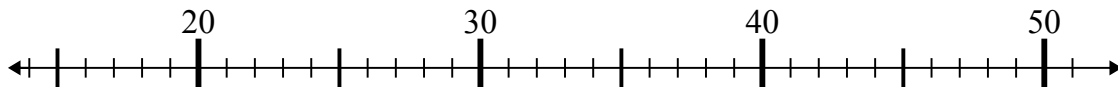
1) $46 - 5 =$



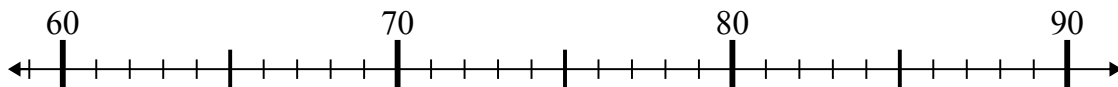
2) $22 + 19 =$



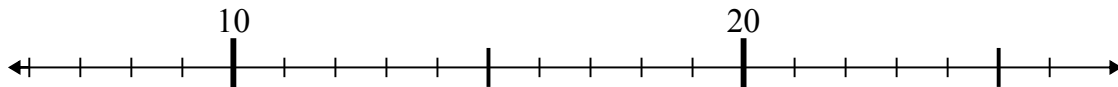
3) $21 + 25 =$



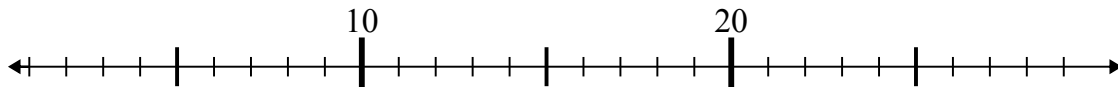
4) $73 + 15 =$



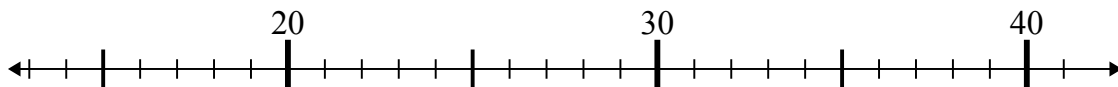
5) $11 + 2 =$



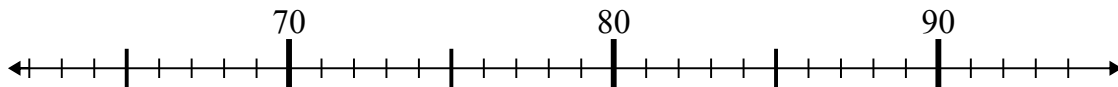
6) $5 + 1 =$



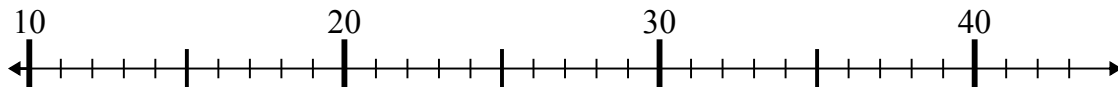
7) $23 + 4 =$



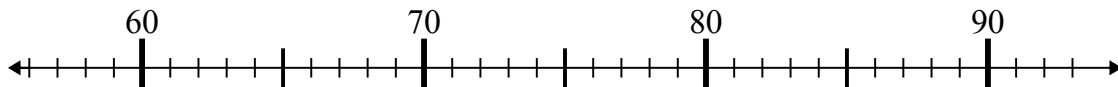
8) $82 - 14 =$



9) $22 - 10 =$



10) $65 + 1 =$

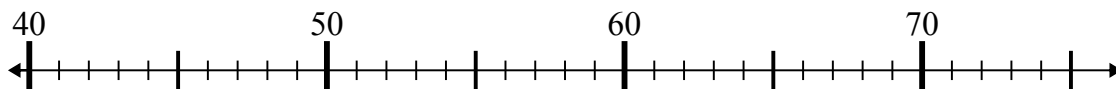


1. _____
2. _____
3. _____
4. _____
5. _____
6. _____
7. _____
8. _____
9. _____
10. _____

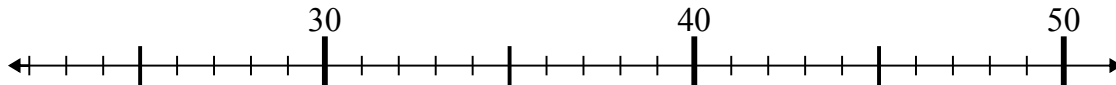


Используйте числовые прямые для решения примеров.

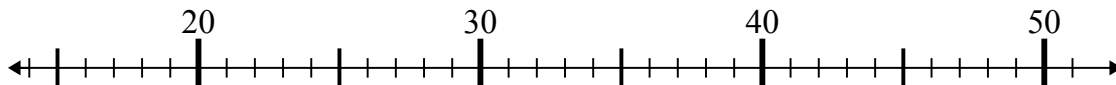
1) $46 - 5 =$



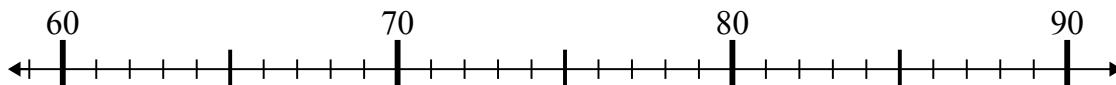
2) $22 + 19 =$



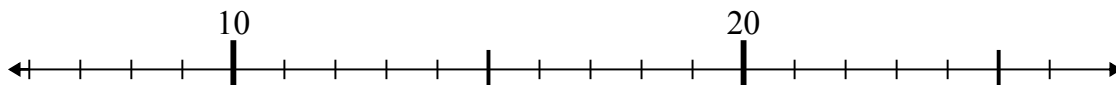
3) $21 + 25 =$



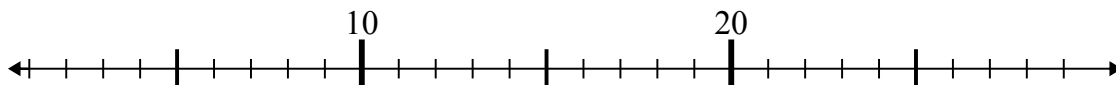
4) $73 + 15 =$



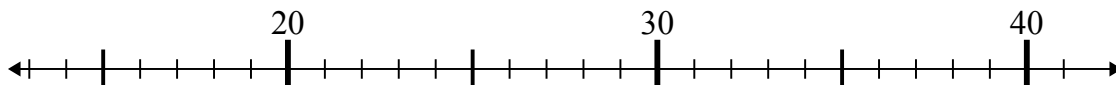
5) $11 + 2 =$



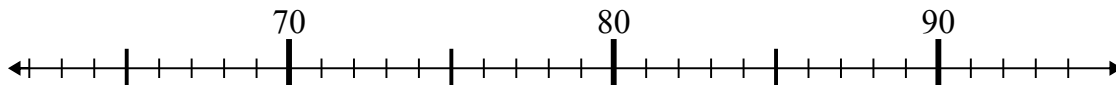
6) $5 + 1 =$



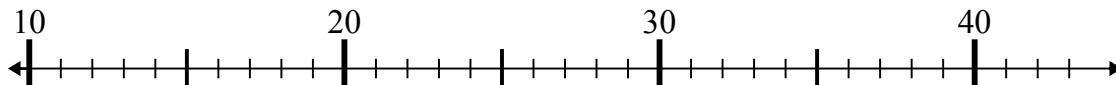
7) $23 + 4 =$



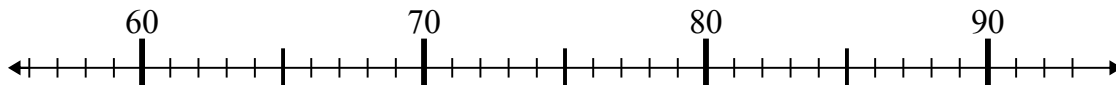
8) $82 - 14 =$



9) $22 - 10 =$



10) $65 + 1 =$

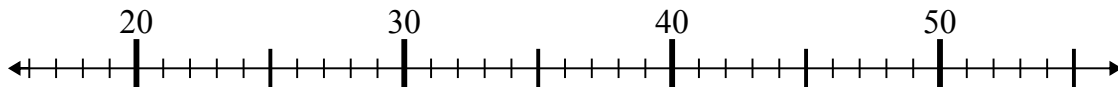
Ответы1. 412. 413. 464. 885. 136. 67. 278. 689. 1210. 66



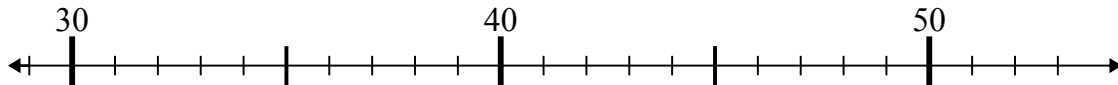
Используйте числовые прямые для решения примеров.

Ответы

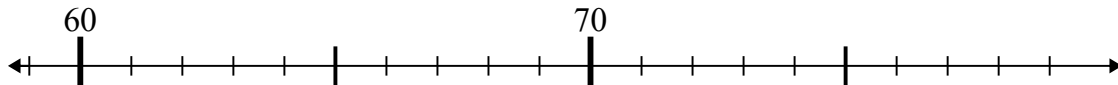
1) $26 - 4 =$



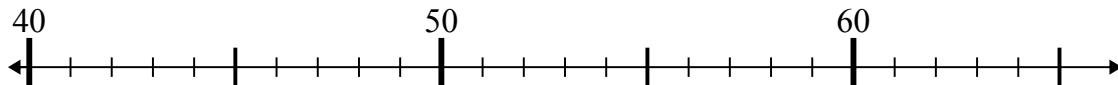
2) $45 - 2 =$



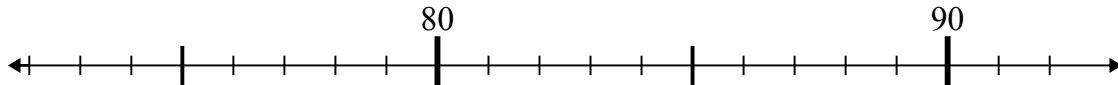
3) $62 + 14 =$



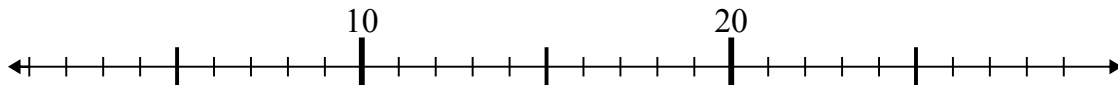
4) $51 - 7 =$



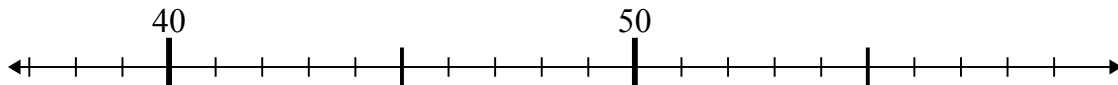
5) $76 + 1 =$



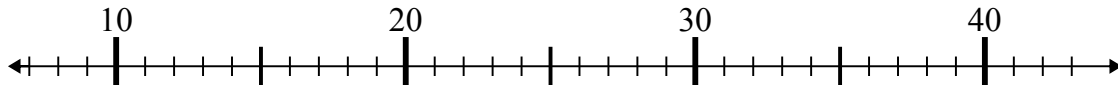
6) $27 - 21 =$



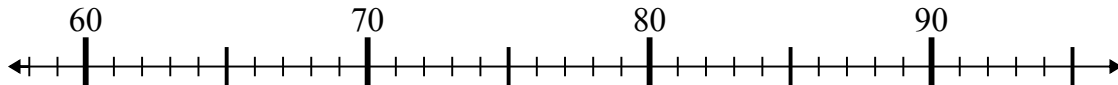
7) $55 - 15 =$



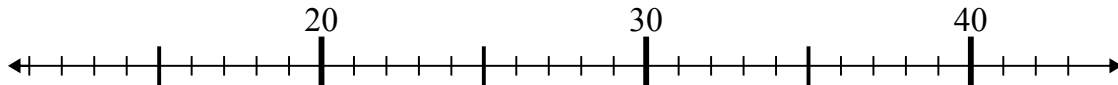
8) $31 - 17 =$



9) $66 + 9 =$



10) $27 + 15 =$

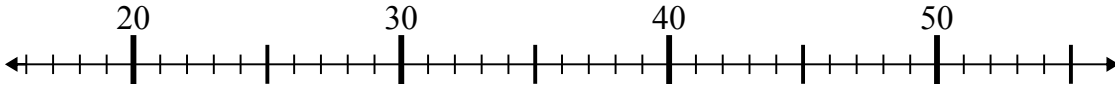


1. _____
2. _____
3. _____
4. _____
5. _____
6. _____
7. _____
8. _____
9. _____
10. _____

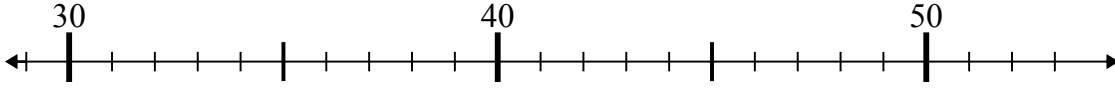


Используйте числовые прямые для решения примеров.

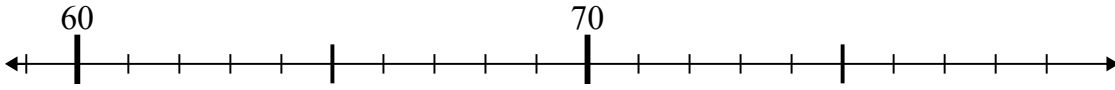
1) $26 - 4 =$



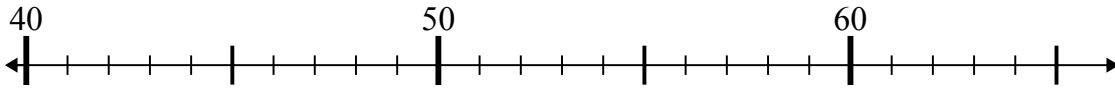
2) $45 - 2 =$



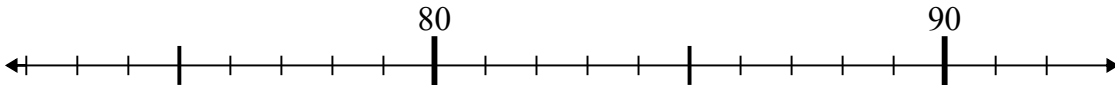
3) $62 + 14 =$



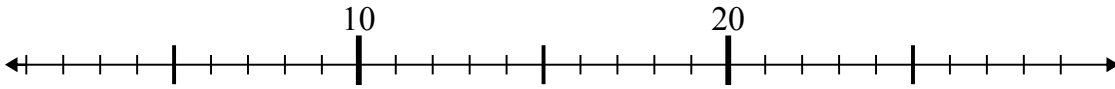
4) $51 - 7 =$



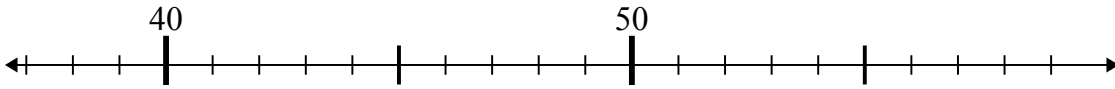
5) $76 + 1 =$



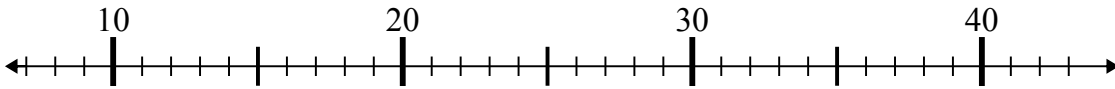
6) $27 - 21 =$



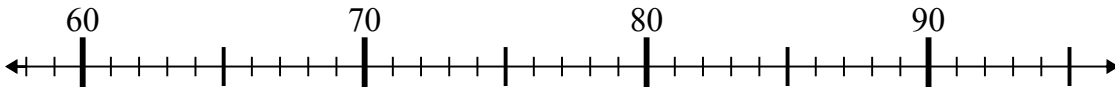
7) $55 - 15 =$



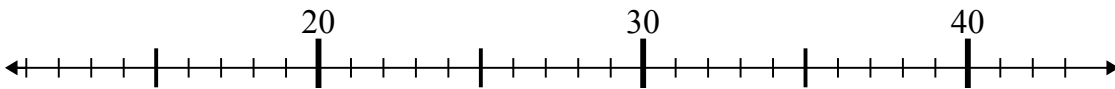
8) $31 - 17 =$



9) $66 + 9 =$



10) $27 + 15 =$

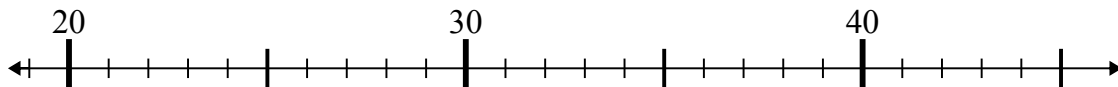
Ответы1. 222. 433. 764. 445. 776. 67. 408. 149. 7510. 42



Используйте числовые прямые для решения примеров.

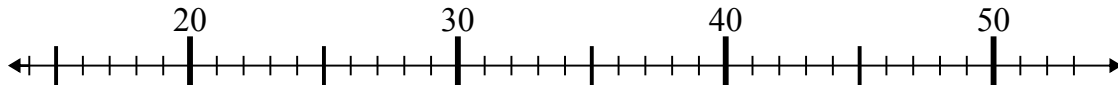
Ответы

1) $29 + 7 =$



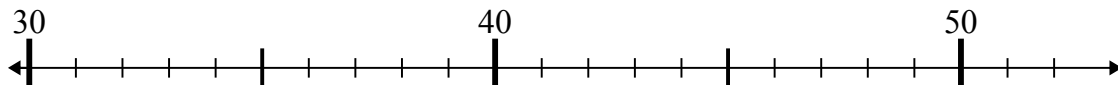
1. _____

2) $36 - 6 =$



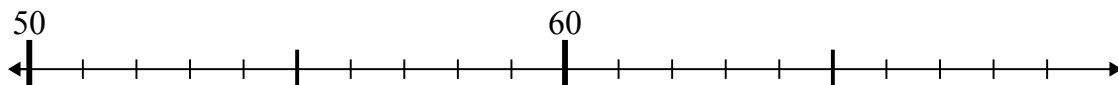
2. _____

3) $50 - 1 =$



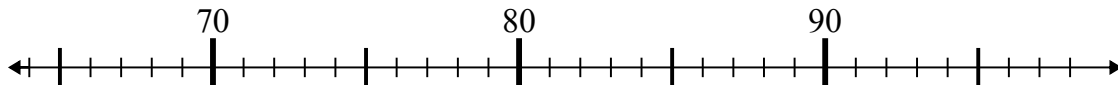
3. _____

4) $68 - 6 =$



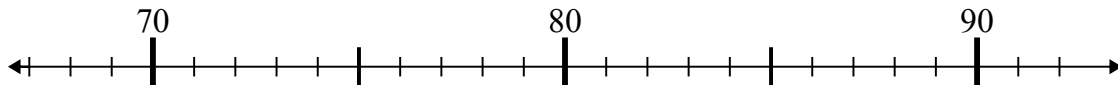
4. _____

5) $71 + 11 =$



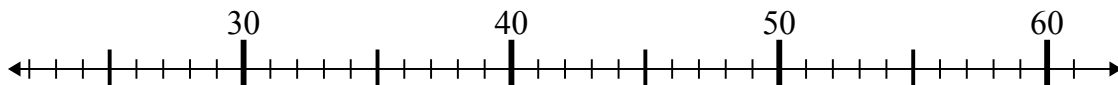
5. _____

6) $68 + 4 =$



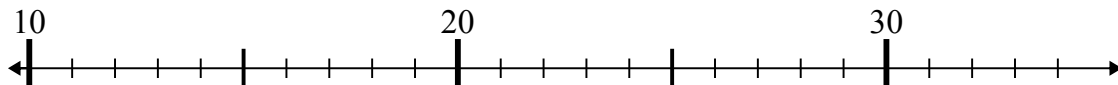
6. _____

7) $35 - 9 =$



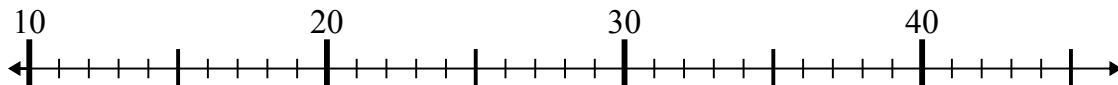
7. _____

8) $34 + 0 =$



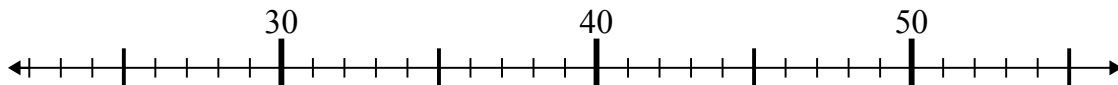
8. _____

9) $42 - 21 =$



9. _____

10) $45 - 3 =$

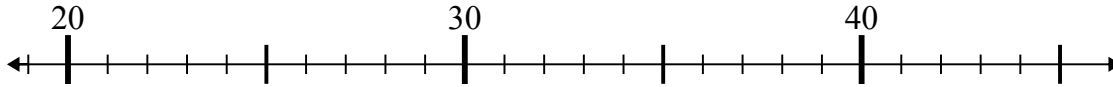


10. _____

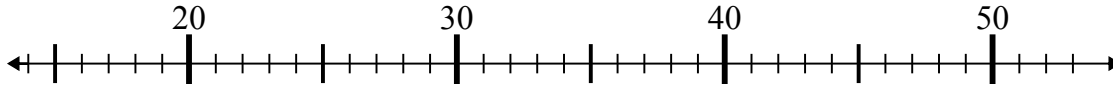


Используйте числовые прямые для решения примеров.

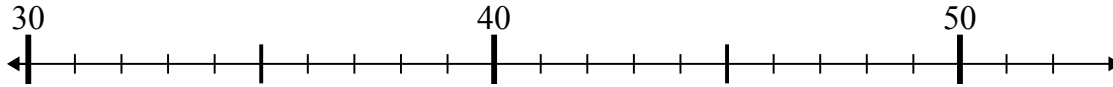
1) $29 + 7 =$



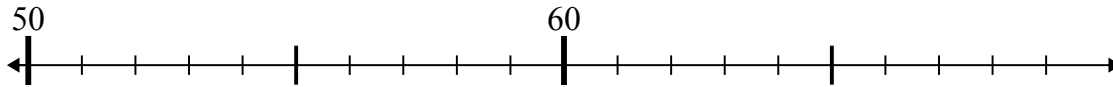
2) $36 - 6 =$



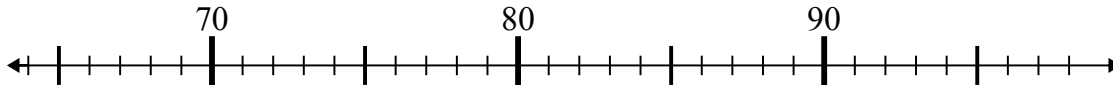
3) $50 - 1 =$



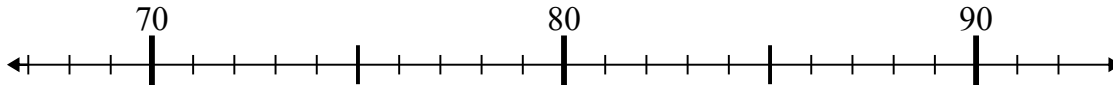
4) $68 - 6 =$



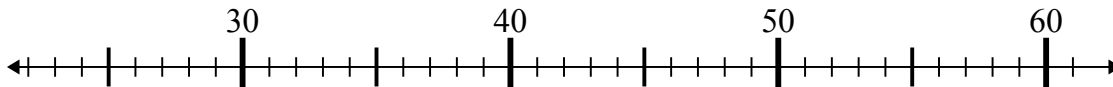
5) $71 + 11 =$



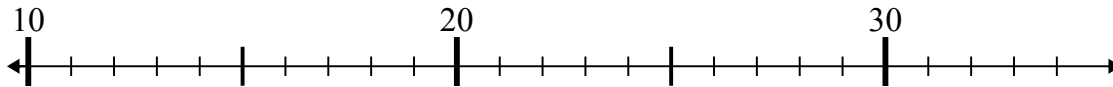
6) $68 + 4 =$



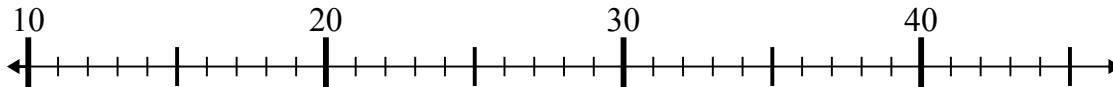
7) $35 - 9 =$



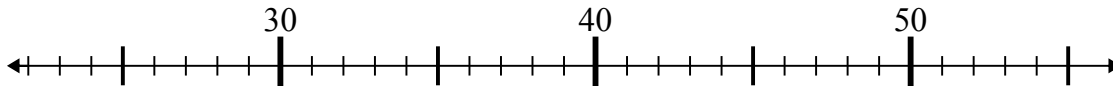
8) $34 + 0 =$



9) $42 - 21 =$



10) $45 - 3 =$

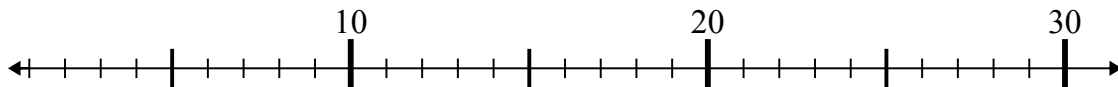
**Отв**1. 362. 303. 494. 625. 826. 727. 268. 349. 2110. 42



Используйте числовые прямые для решения примеров.

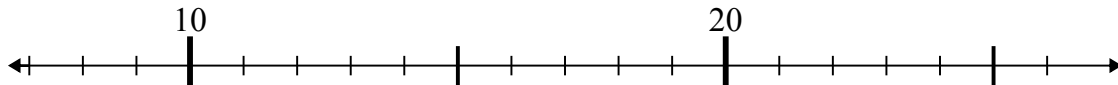
Отвeты

1) $3 + 17 =$



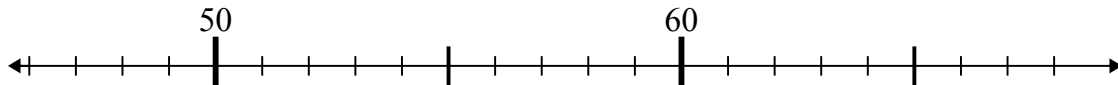
1. _____

2) $14 + 9 =$



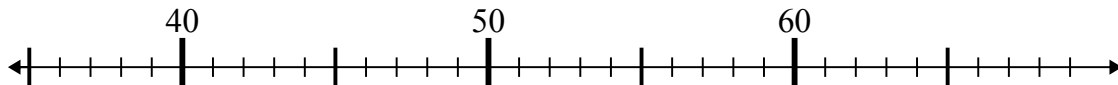
2. _____

3) $59 - 8 =$



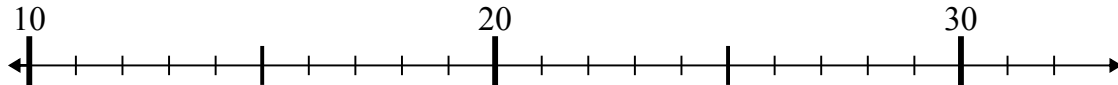
3. _____

4) $43 - 5 =$



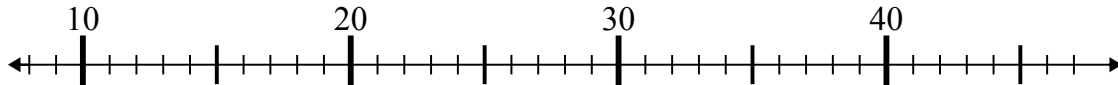
4. _____

5) $26 - 14 =$



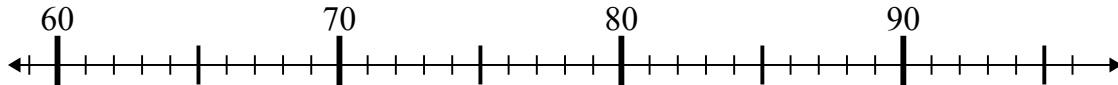
5. _____

6) $15 + 23 =$



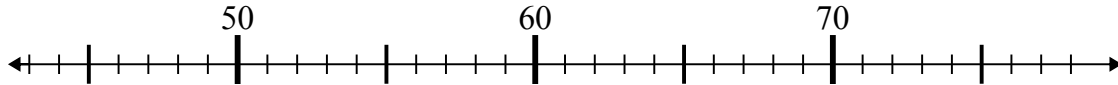
6. _____

7) $91 + 2 =$



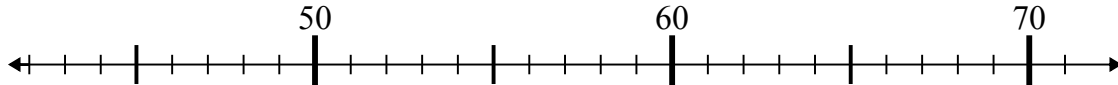
7. _____

8) $47 + 1 =$



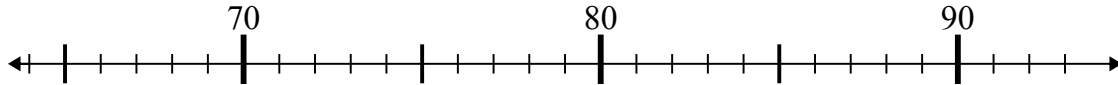
8. _____

9) $71 - 8 =$



9. _____

10) $72 + 16 =$

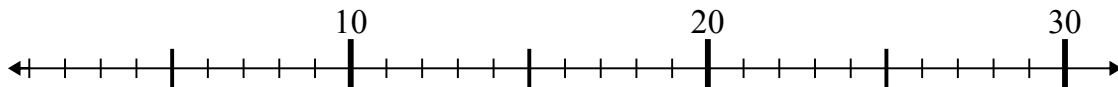


10. _____

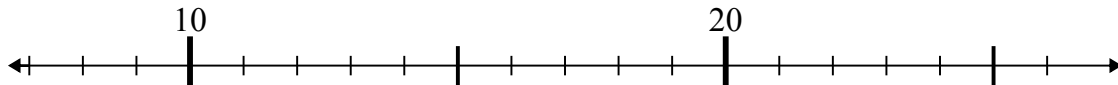


Используйте числовые прямые для решения примеров.

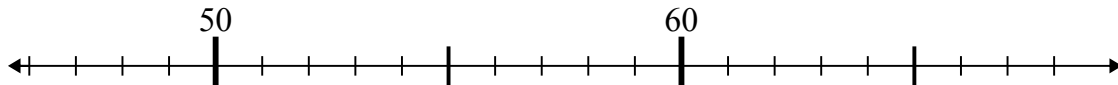
1) $3 + 17 =$



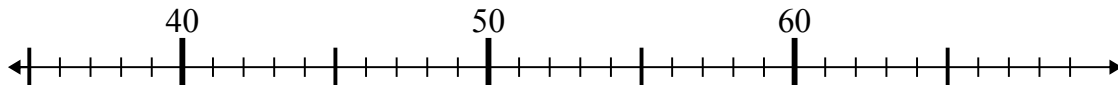
2) $14 + 9 =$



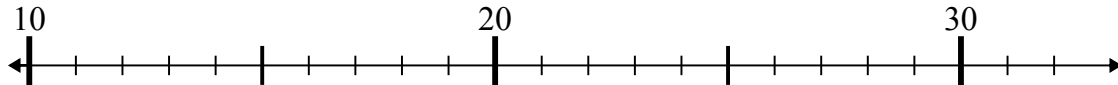
3) $59 - 8 =$



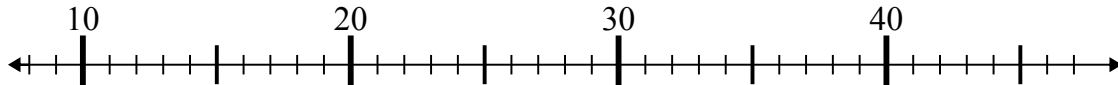
4) $43 - 5 =$



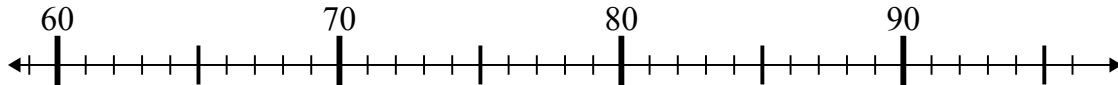
5) $26 - 14 =$



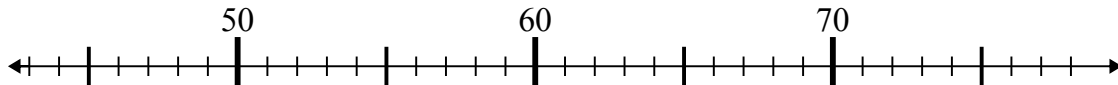
6) $15 + 23 =$



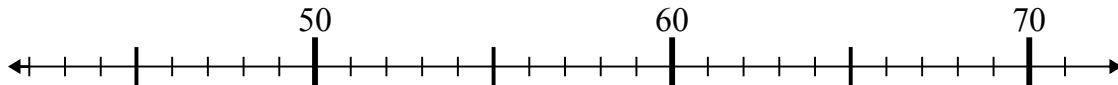
7) $91 + 2 =$



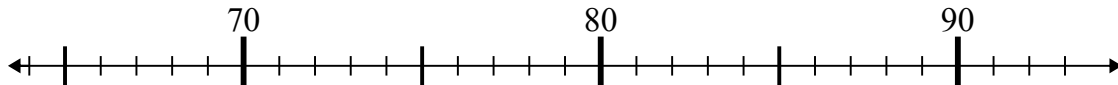
8) $47 + 1 =$



9) $71 - 8 =$



10) $72 + 16 =$

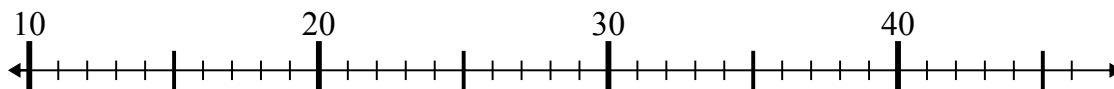
**Отв**еты1. 202. 233. 514. 385. 126. 387. 938. 489. 6310. 88



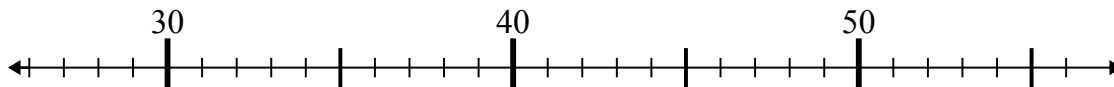
Используйте числовые прямые для решения примеров.

Ответы

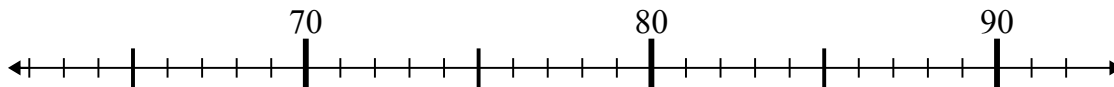
1) $24 - 11 =$



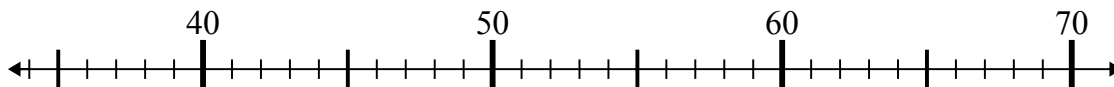
2) $29 + 6 =$



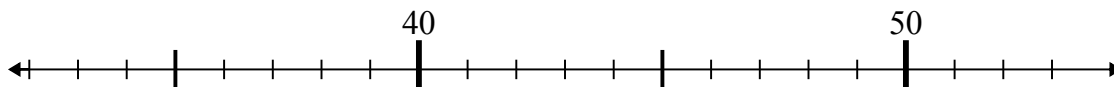
3) $72 + 7 =$



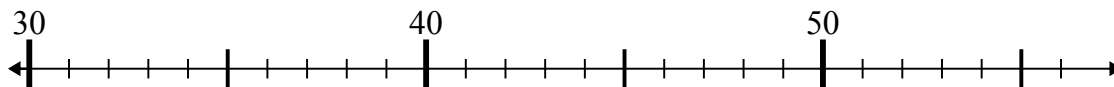
4) $41 + 16 =$



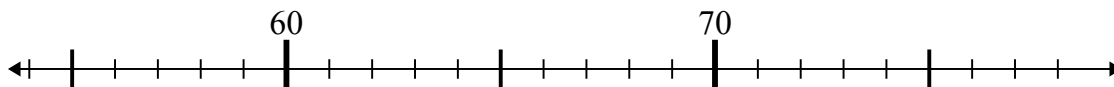
5) $51 - 3 =$



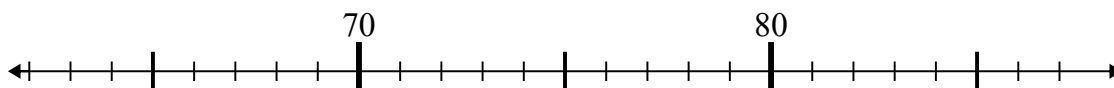
6) $35 - 0 =$



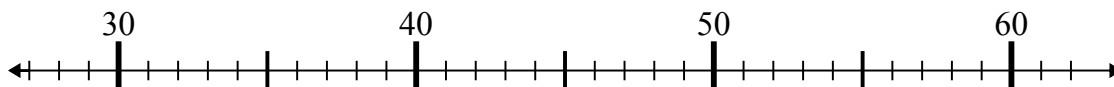
7) $65 + 10 =$



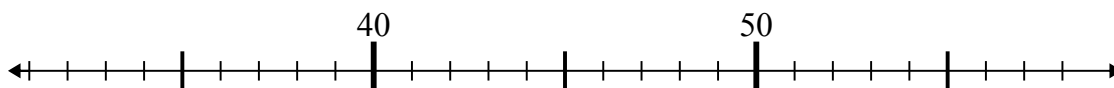
8) $65 + 14 =$



9) $57 - 16 =$



10) $58 - 19 =$

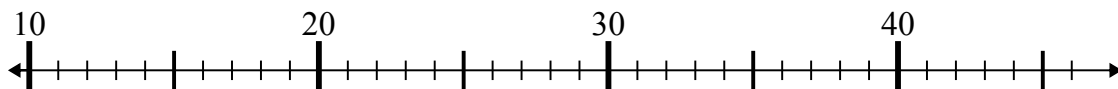


1. _____
2. _____
3. _____
4. _____
5. _____
6. _____
7. _____
8. _____
9. _____
10. _____

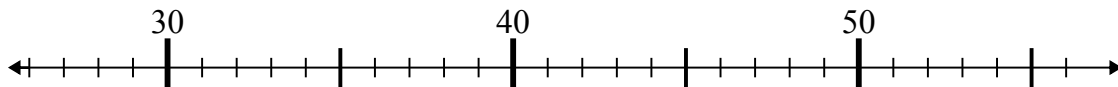


Используйте числовые прямые для решения примеров.

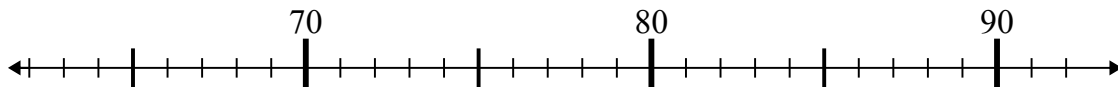
1) $24 - 11 =$



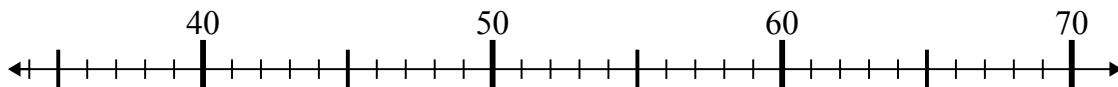
2) $29 + 6 =$



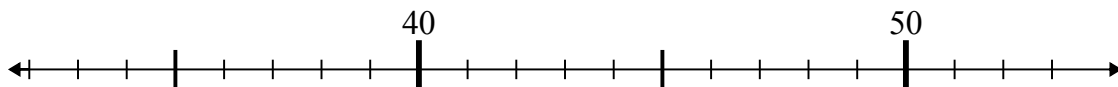
3) $72 + 7 =$



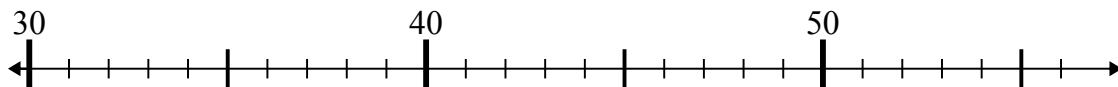
4) $41 + 16 =$



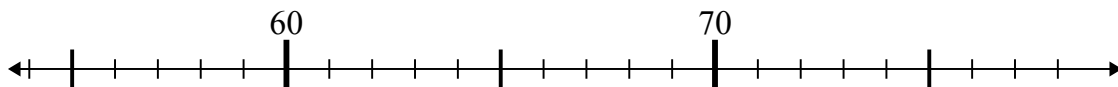
5) $51 - 3 =$



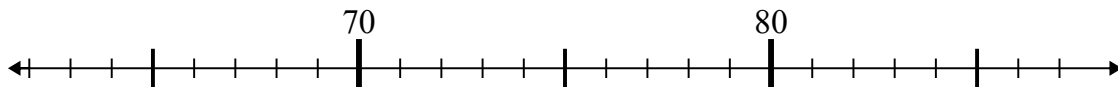
6) $35 - 0 =$



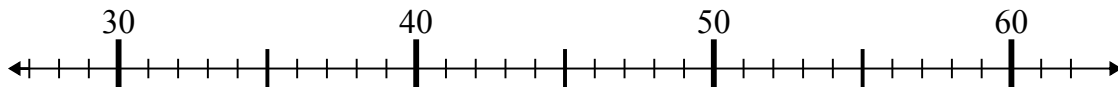
7) $65 + 10 =$



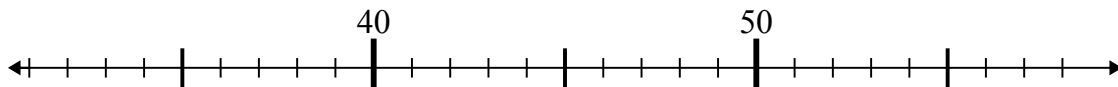
8) $65 + 14 =$



9) $57 - 16 =$



10) $58 - 19 =$

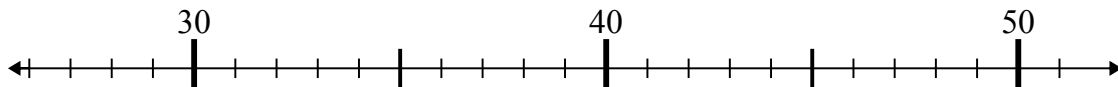
Ответы1. 132. 353. 794. 575. 486. 357. 758. 799. 4110. 39



Используйте числовые прямые для решения примеров.

Ответы

1) $32 - 5 =$



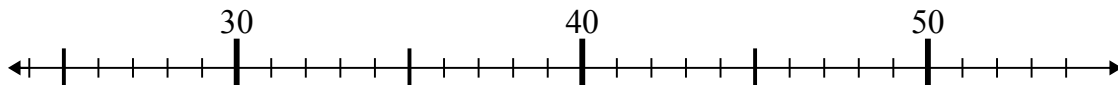
1. _____

2) $16 + 7 =$



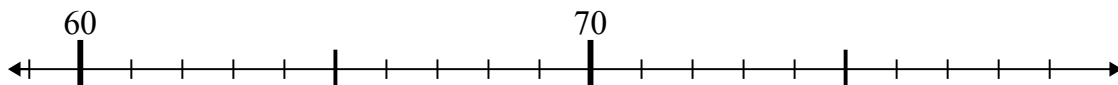
2. _____

3) $25 + 12 =$



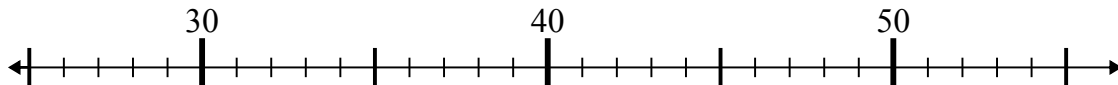
3. _____

4) $75 - 14 =$



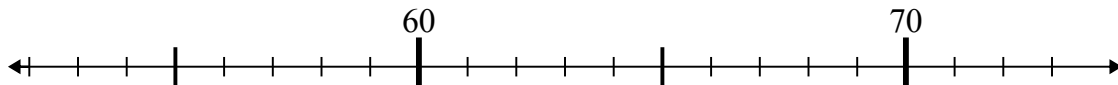
4. _____

5) $28 + 26 =$



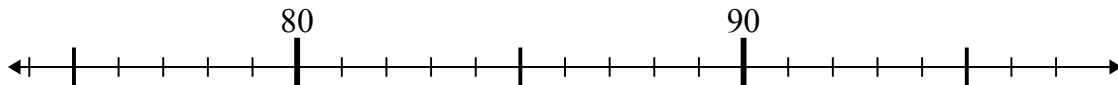
5. _____

6) $65 - 10 =$



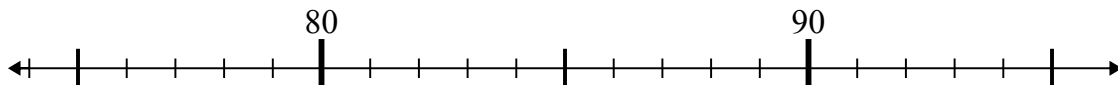
6. _____

7) $81 - 2 =$



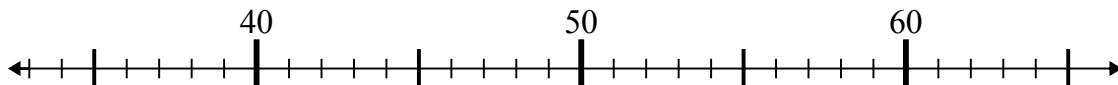
7. _____

8) $95 - 8 =$



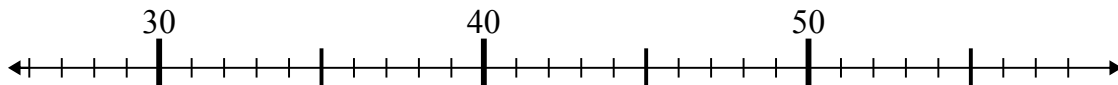
8. _____

9) $48 - 11 =$



9. _____

10) $32 + 18 =$

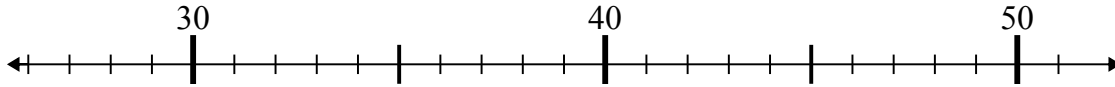


10. _____

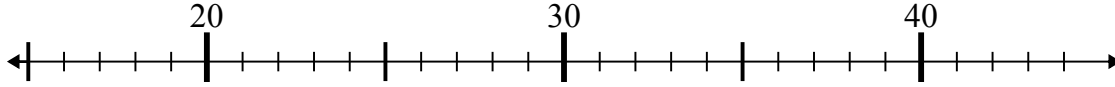


Используйте числовые прямые для решения примеров.

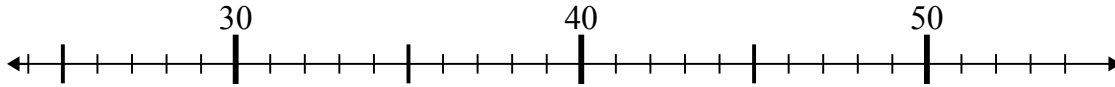
1) $32 - 5 =$



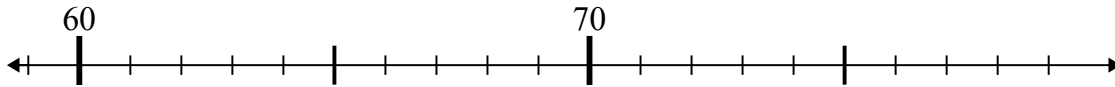
2) $16 + 7 =$



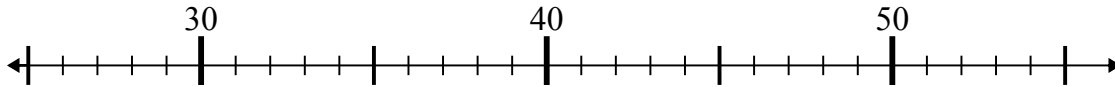
3) $25 + 12 =$



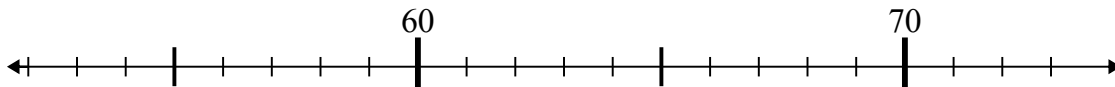
4) $75 - 14 =$



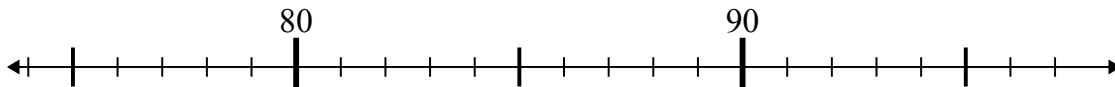
5) $28 + 26 =$



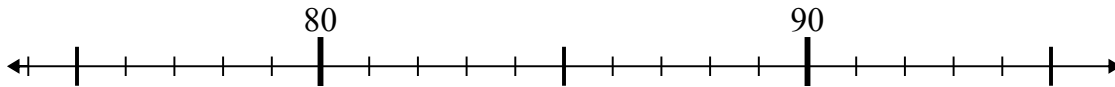
6) $65 - 10 =$



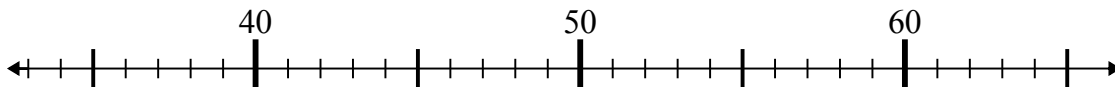
7) $81 - 2 =$



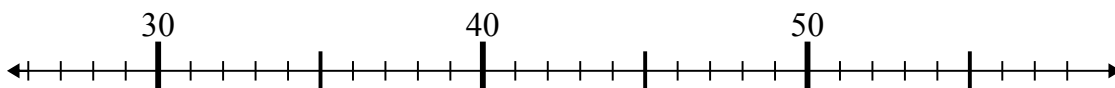
8) $95 - 8 =$



9) $48 - 11 =$



10) $32 + 18 =$

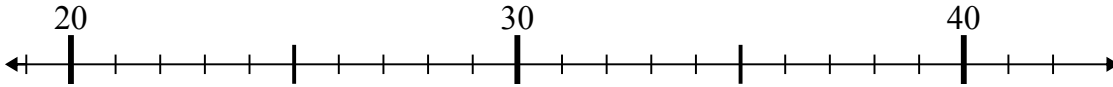
Ответы1. 272. 233. 374. 615. 546. 557. 798. 879. 3710. 50



Используйте числовые прямые для решения примеров.

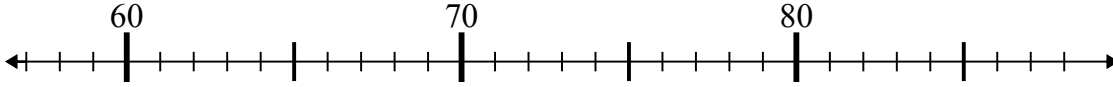
Отвeты

1) $31 + 4 =$



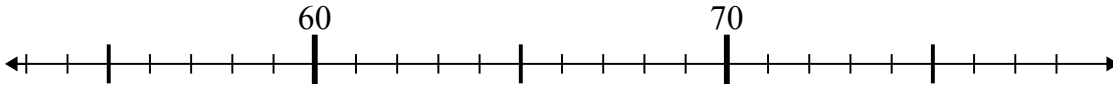
1. _____

2) $76 - 18 =$



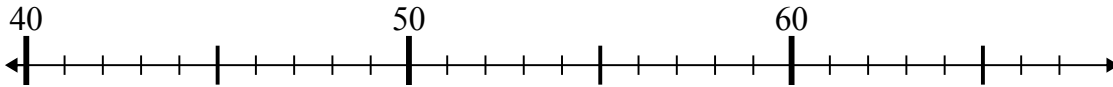
2. _____

3) $57 + 5 =$



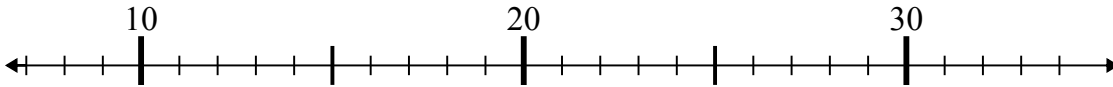
3. _____

4) $40 + 8 =$



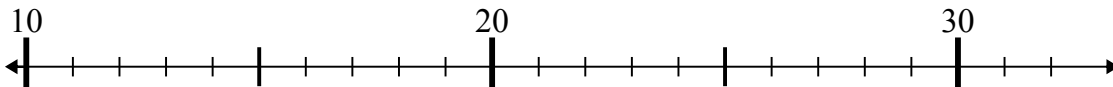
4. _____

5) $8 + 20 =$



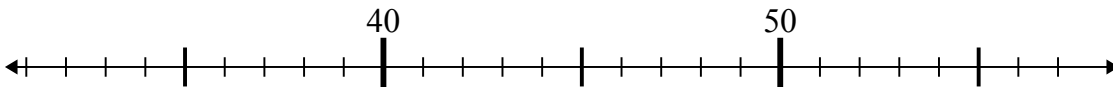
5. _____

6) $13 + 4 =$



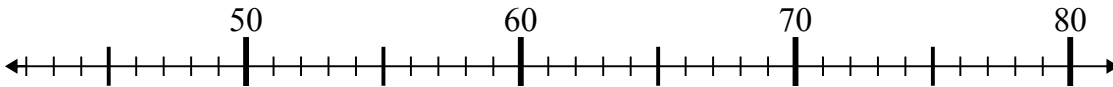
6. _____

7) $56 - 18 =$



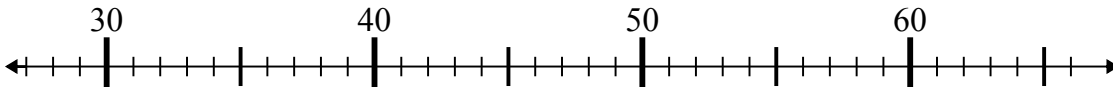
7. _____

8) $61 - 13 =$



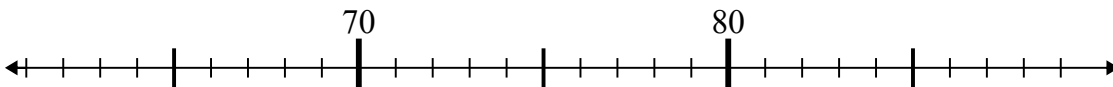
8. _____

9) $40 + 16 =$



9. _____

10) $78 + 3 =$

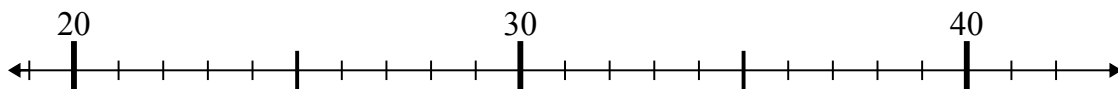


10. _____

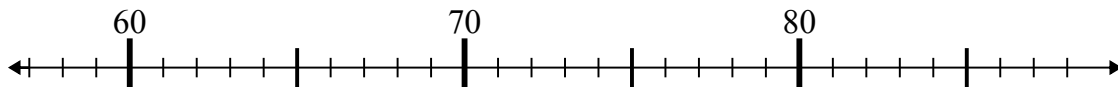


Используйте числовые прямые для решения примеров.

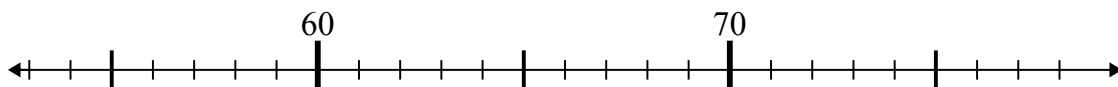
1) $31 + 4 =$



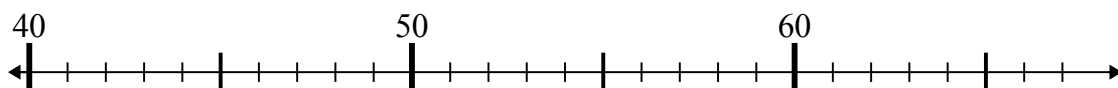
2) $76 - 18 =$



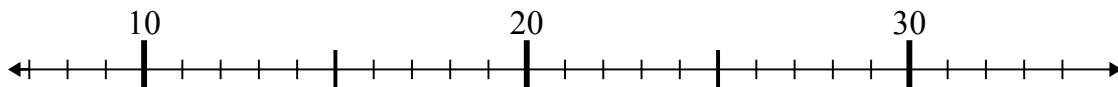
3) $57 + 5 =$



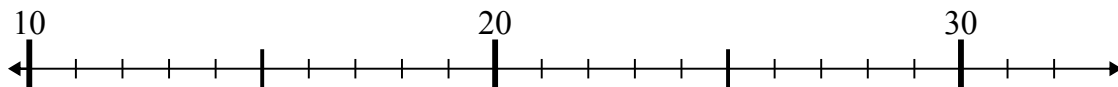
4) $40 + 8 =$



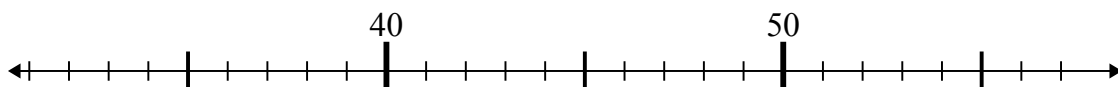
5) $8 + 20 =$



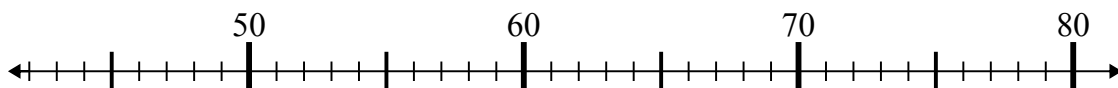
6) $13 + 4 =$



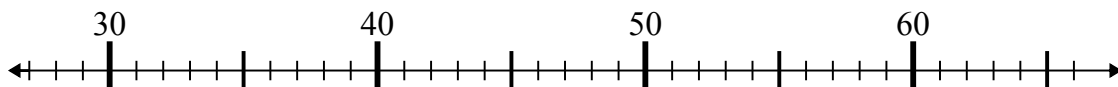
7) $56 - 18 =$



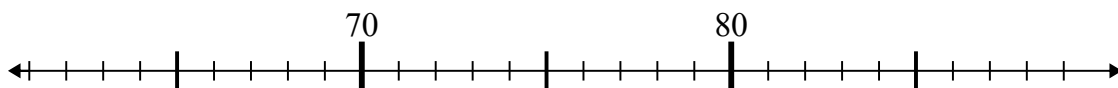
8) $61 - 13 =$



9) $40 + 16 =$



10) $78 + 3 =$

Ответы1. 352. 583. 624. 485. 286. 177. 388. 489. 5610. 81