



Определите под какой буквой находится правильный ответ.

1) $\frac{2}{3} + \frac{1}{3}$

2) $\frac{2}{5} + \frac{1}{5}$

3) $\frac{5}{8} + \frac{4}{8}$

4) $\frac{6}{8} + \frac{4}{8}$

5) $\frac{8}{10} + \frac{5}{10}$

6) $\frac{1}{6} + \frac{4}{6}$

7) $\frac{5}{8} + \frac{6}{8}$

8) $\frac{3}{4} + \frac{3}{4}$

9) $\frac{7}{10} + \frac{3}{10}$

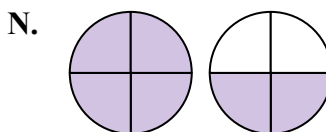
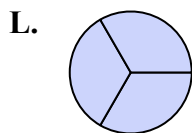
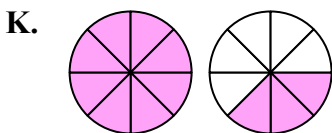
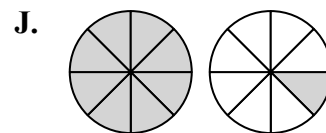
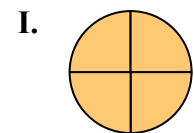
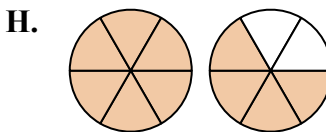
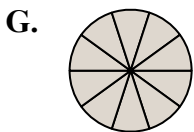
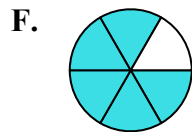
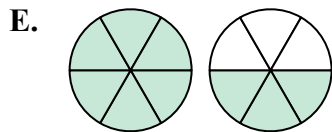
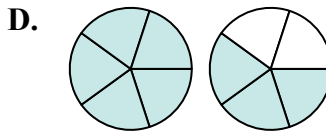
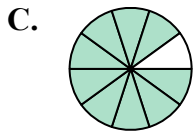
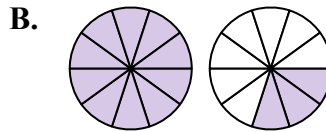
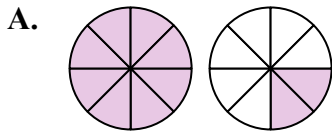
10) $\frac{2}{4} + \frac{2}{4}$

11) $\frac{4}{6} + \frac{5}{6}$

12) $\frac{5}{6} + \frac{5}{6}$

13) $\frac{4}{10} + \frac{5}{10}$

14) $\frac{4}{5} + \frac{4}{5}$



Ответы

1. _____

2. _____

3. _____

4. _____

5. _____

6. _____

7. _____

8. _____

9. _____

10. _____

11. _____

12. _____

13. _____

14. _____



Определите под какой буквой находится правильный ответ.

1) $\frac{2}{3} + \frac{1}{3}$

2) $\frac{2}{5} + \frac{1}{5}$

3) $\frac{5}{8} + \frac{4}{8}$

4) $\frac{6}{8} + \frac{4}{8}$

5) $\frac{8}{10} + \frac{5}{10}$

6) $\frac{1}{6} + \frac{4}{6}$

7) $\frac{5}{8} + \frac{6}{8}$

8) $\frac{3}{4} + \frac{3}{4}$

9) $\frac{7}{10} + \frac{3}{10}$

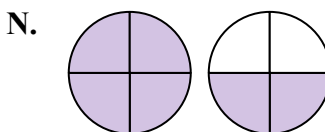
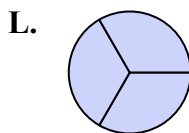
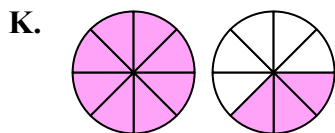
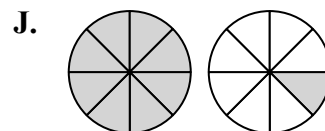
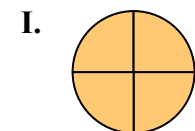
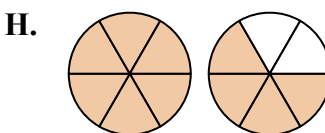
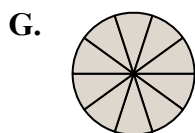
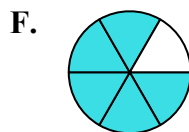
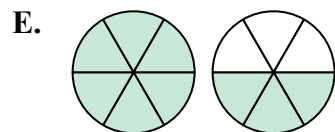
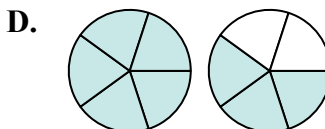
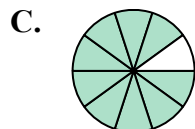
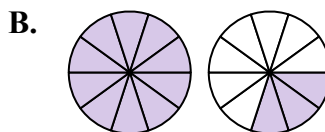
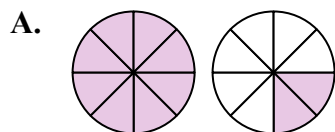
10) $\frac{2}{4} + \frac{2}{4}$

11) $\frac{4}{6} + \frac{5}{6}$

12) $\frac{5}{6} + \frac{5}{6}$

13) $\frac{4}{10} + \frac{5}{10}$

14) $\frac{4}{5} + \frac{4}{5}$



ОТВЕТЫ

1. L $\frac{3}{3}$

2. M $\frac{3}{5}$

3. J $1\frac{1}{8}$

4. A $1\frac{2}{8}$

5. B $1\frac{3}{10}$

6. F $\frac{5}{6}$

7. K $1\frac{3}{8}$

8. N $1\frac{2}{4}$

9. G $\frac{10}{10}$

10. I $\frac{4}{4}$

11. E $1\frac{3}{6}$

12. H $1\frac{4}{6}$

13. C $\frac{9}{10}$

14. D $1\frac{3}{5}$