



Определите под какой буквой находится правильный ответ.

1)  $\frac{1}{8} + \frac{2}{8}$

3)  $\frac{2}{6} + \frac{3}{6}$

5)  $\frac{3}{5} + \frac{1}{5}$

7)  $\frac{1}{2} + \frac{1}{2}$

9)  $\frac{3}{6} + \frac{5}{6}$

11)  $\frac{3}{10} + \frac{5}{10}$

13)  $\frac{5}{8} + \frac{2}{8}$

2)  $\frac{4}{6} + \frac{3}{6}$

4)  $\frac{4}{6} + \frac{2}{6}$

6)  $\frac{3}{4} + \frac{3}{4}$

8)  $\frac{4}{5} + \frac{4}{5}$

10)  $\frac{2}{10} + \frac{9}{10}$

12)  $\frac{1}{6} + \frac{1}{6}$

14)  $\frac{2}{8} + \frac{2}{8}$

**ОТВЕТЫ**

1. \_\_\_\_\_

2. \_\_\_\_\_

3. \_\_\_\_\_

4. \_\_\_\_\_

5. \_\_\_\_\_

6. \_\_\_\_\_

7. \_\_\_\_\_

8. \_\_\_\_\_

9. \_\_\_\_\_

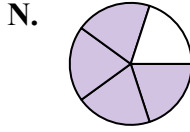
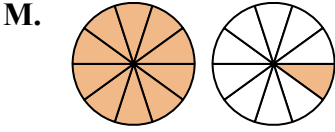
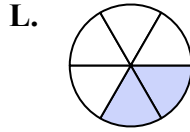
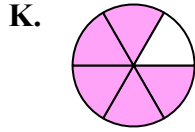
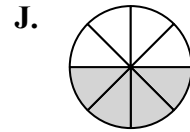
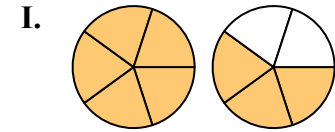
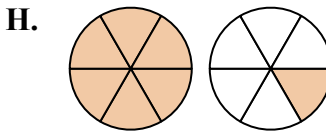
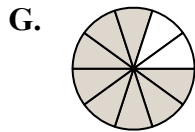
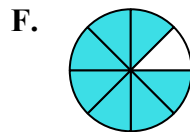
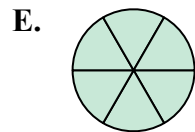
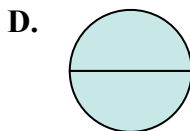
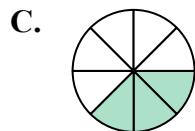
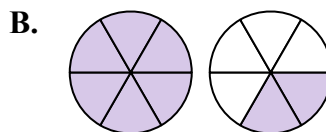
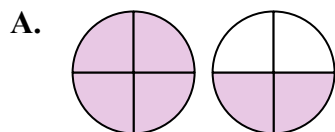
10. \_\_\_\_\_

11. \_\_\_\_\_

12. \_\_\_\_\_

13. \_\_\_\_\_

14. \_\_\_\_\_





Определите под какой буквой находится правильный ответ.

1)  $\frac{1}{8} + \frac{2}{8}$

3)  $\frac{2}{6} + \frac{3}{6}$

5)  $\frac{3}{5} + \frac{1}{5}$

7)  $\frac{1}{2} + \frac{1}{2}$

9)  $\frac{3}{6} + \frac{5}{6}$

11)  $\frac{3}{10} + \frac{5}{10}$

13)  $\frac{5}{8} + \frac{2}{8}$

2)  $\frac{4}{6} + \frac{3}{6}$

4)  $\frac{4}{6} + \frac{2}{6}$

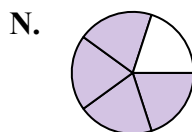
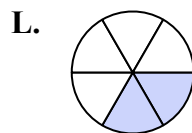
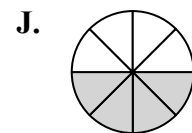
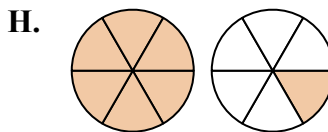
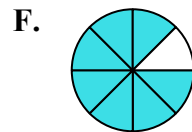
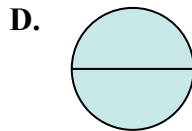
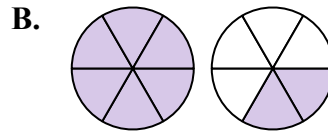
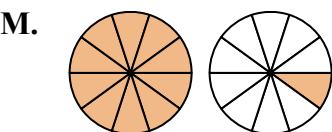
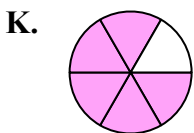
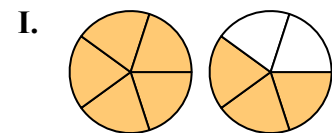
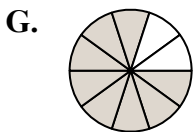
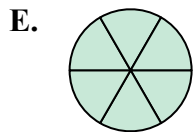
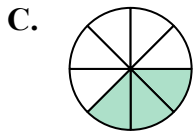
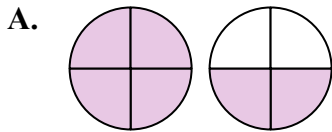
6)  $\frac{3}{4} + \frac{3}{4}$

8)  $\frac{4}{5} + \frac{4}{5}$

10)  $\frac{2}{10} + \frac{9}{10}$

12)  $\frac{1}{6} + \frac{1}{6}$

14)  $\frac{2}{8} + \frac{2}{8}$

**ОТВЕТЫ**1. **C**  $\frac{3}{8}$ 2. **H**  $1\frac{1}{6}$ 3. **K**  $\frac{5}{6}$ 4. **E**  $\frac{6}{6}$ 5. **N**  $\frac{4}{5}$ 6. **A**  $1\frac{2}{4}$ 7. **D**  $\frac{2}{2}$ 8. **I**  $1\frac{3}{5}$ 9. **B**  $1\frac{2}{6}$ 10. **M**  $1\frac{1}{10}$ 11. **G**  $\frac{8}{10}$ 12. **L**  $\frac{2}{6}$ 13. **F**  $\frac{7}{8}$ 14. **J**  $\frac{4}{8}$