



Найдите соответствующий ответ и напишите его.


об) $\frac{1}{6} + \frac{1}{6} + \frac{1}{6}$



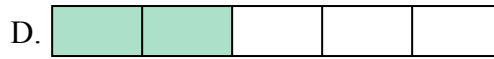
1) $\frac{1}{8} + \frac{1}{8} + \frac{1}{8} + \frac{1}{8}$



2) $\frac{1}{6} + \frac{1}{6}$



3) $\frac{1}{4} + \frac{1}{4}$



4) $\frac{1}{12} + \frac{1}{12} + \frac{1}{12} + \frac{1}{12}$



5) $\frac{1}{10} + \frac{1}{10} + \frac{1}{10}$



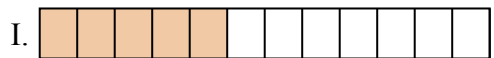
6) $\frac{1}{10} + \frac{1}{10} + \frac{1}{10} + \frac{1}{10} + \frac{1}{10} + \frac{1}{10}$




7) $\frac{1}{3} + \frac{1}{3}$




8) $\frac{1}{6} + \frac{1}{6} + \frac{1}{6} + \frac{1}{6} + \frac{1}{6}$




9) $\frac{1}{5} + \frac{1}{5}$




10) $\frac{1}{10} + \frac{1}{10}$



11) $\frac{1}{10} + \frac{1}{10} + \frac{1}{10} + \frac{1}{10} + \frac{1}{10} + \frac{1}{10} + \frac{1}{10}$




12) $\frac{1}{12} + \frac{1}{12} + \frac{1}{12} + \frac{1}{12} + \frac{1}{12}$




13) $\frac{1}{4} + \frac{1}{4} + \frac{1}{4}$



14) $\frac{1}{6} + \frac{1}{6} + \frac{1}{6} + \frac{1}{6}$



15) $\frac{1}{5} + \frac{1}{5} + \frac{1}{5} + \frac{1}{5}$

**Ответы**об. A

1. _____

2. _____

3. _____

4. _____

5. _____

6. _____

7. _____

8. _____

9. _____

10. _____

11. _____

12. _____

13. _____

14. _____

15. _____



Найдите соответствующий ответ и напишите его.


об) $\frac{1}{6} + \frac{1}{6} + \frac{1}{6}$



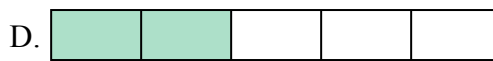
1) $\frac{1}{8} + \frac{1}{8} + \frac{1}{8} + \frac{1}{8}$



2) $\frac{1}{6} + \frac{1}{6}$




3) $\frac{1}{4} + \frac{1}{4}$



4) $\frac{1}{12} + \frac{1}{12} + \frac{1}{12} + \frac{1}{12}$



5) $\frac{1}{10} + \frac{1}{10} + \frac{1}{10}$



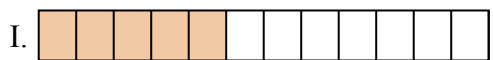
6) $\frac{1}{10} + \frac{1}{10} + \frac{1}{10} + \frac{1}{10} + \frac{1}{10} + \frac{1}{10}$



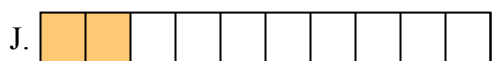
7) $\frac{1}{3} + \frac{1}{3}$



8) $\frac{1}{6} + \frac{1}{6} + \frac{1}{6} + \frac{1}{6} + \frac{1}{6}$




9) $\frac{1}{5} + \frac{1}{5}$




10) $\frac{1}{10} + \frac{1}{10}$



11) $\frac{1}{10} + \frac{1}{10} + \frac{1}{10} + \frac{1}{10} + \frac{1}{10} + \frac{1}{10} + \frac{1}{10}$




12) $\frac{1}{12} + \frac{1}{12} + \frac{1}{12} + \frac{1}{12} + \frac{1}{12}$




13) $\frac{1}{4} + \frac{1}{4} + \frac{1}{4}$



14) $\frac{1}{6} + \frac{1}{6} + \frac{1}{6} + \frac{1}{6}$



15) $\frac{1}{5} + \frac{1}{5} + \frac{1}{5} + \frac{1}{5}$

ОТВЕТЫоб. **A**1. **L**2. **O**3. **P**4. **B**5. **M**6. **G**7. **F**8. **N**9. **D**10. **J**11. **E**12. **I**13. **K**14. **H**15. **C**