




Найдите соответствующий ответ и напишите его.

Ответы

об) $\frac{1}{4} + \frac{1}{4} + \frac{1}{4}$

об. **N**

1) $\frac{1}{8} + \frac{1}{8} + \frac{1}{8} + \frac{1}{8} + \frac{1}{8} + \frac{1}{8} + \frac{1}{8}$

1.


2) $\frac{1}{10} + \frac{1}{10} + \frac{1}{10}$

2.


3) $\frac{1}{6} + \frac{1}{6} + \frac{1}{6} + \frac{1}{6}$

3.

4) $\frac{1}{10} + \frac{1}{10} + \frac{1}{10} + \frac{1}{10} + \frac{1}{10} + \frac{1}{10} + \frac{1}{10}$

4.

5) $\frac{1}{8} + \frac{1}{8} + \frac{1}{8}$

5.


6) $\frac{1}{12} + \frac{1}{12} + \frac{1}{12} + \frac{1}{12} + \frac{1}{12} + \frac{1}{12}$

6.

7) $\frac{1}{5} + \frac{1}{5} + \frac{1}{5}$

7.

8) $\frac{1}{3} + \frac{1}{3}$

8.

9) $\frac{1}{5} + \frac{1}{5} + \frac{1}{5} + \frac{1}{5}$

9.

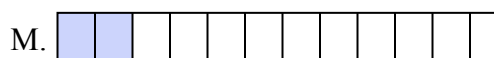
10) $\frac{1}{12} + \frac{1}{12} + \frac{1}{12}$

10.

11) $\frac{1}{10} + \frac{1}{10} + \frac{1}{10} + \frac{1}{10} + \frac{1}{10} + \frac{1}{10}$

11.

12) $\frac{1}{12} + \frac{1}{12}$

12.

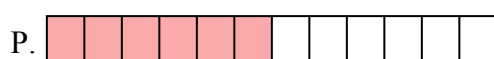
13) $\frac{1}{10} + \frac{1}{10}$

13.

14) $\frac{1}{6} + \frac{1}{6} + \frac{1}{6}$

14.

15) $\frac{1}{8} + \frac{1}{8} + \frac{1}{8} + \frac{1}{8} + \frac{1}{8} + \frac{1}{8}$

15.



Найдите соответствующий ответ и напишите его.

об) $\frac{1}{4} + \frac{1}{4} + \frac{1}{4}$



1) $\frac{1}{8} + \frac{1}{8} + \frac{1}{8} + \frac{1}{8} + \frac{1}{8} + \frac{1}{8} + \frac{1}{8}$



2) $\frac{1}{10} + \frac{1}{10} + \frac{1}{10}$



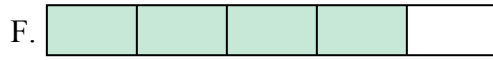
3) $\frac{1}{6} + \frac{1}{6} + \frac{1}{6} + \frac{1}{6}$



4) $\frac{1}{10} + \frac{1}{10} + \frac{1}{10} + \frac{1}{10} + \frac{1}{10} + \frac{1}{10} + \frac{1}{10}$



5) $\frac{1}{8} + \frac{1}{8} + \frac{1}{8}$



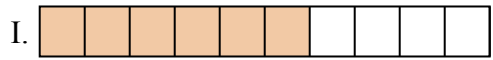
6) $\frac{1}{12} + \frac{1}{12} + \frac{1}{12} + \frac{1}{12} + \frac{1}{12} + \frac{1}{12}$




7) $\frac{1}{5} + \frac{1}{5} + \frac{1}{5}$



8) $\frac{1}{3} + \frac{1}{3}$



9) $\frac{1}{5} + \frac{1}{5} + \frac{1}{5} + \frac{1}{5}$




10) $\frac{1}{12} + \frac{1}{12} + \frac{1}{12}$



11) $\frac{1}{10} + \frac{1}{10} + \frac{1}{10} + \frac{1}{10} + \frac{1}{10} + \frac{1}{10}$




12) $\frac{1}{12} + \frac{1}{12}$



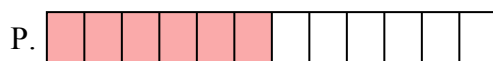
13) $\frac{1}{10} + \frac{1}{10}$



14) $\frac{1}{6} + \frac{1}{6} + \frac{1}{6}$



15) $\frac{1}{8} + \frac{1}{8} + \frac{1}{8} + \frac{1}{8} + \frac{1}{8} + \frac{1}{8}$

ОТВЕТЫоб. **N**1. **J**2. **G**3. **E**4. **K**5. **O**6. **P**7. **H**8. **C**9. **F**10. **D**11. **I**12. **M**13. **B**14. **L**15. **A**