



Найдите соответствующий ответ и напишите его.

**Ответы**


об)  $\frac{1}{6} + \frac{1}{6} + \frac{1}{6}$

об.          **A**


1)  $\frac{1}{8} + \frac{1}{8} + \frac{1}{8} + \frac{1}{8}$

1.         

2)  $\frac{1}{6} + \frac{1}{6}$

2.         

3)  $\frac{1}{4} + \frac{1}{4}$

3.         

4)  $\frac{1}{12} + \frac{1}{12} + \frac{1}{12} + \frac{1}{12}$

4.         

5)  $\frac{1}{10} + \frac{1}{10} + \frac{1}{10}$

5.         

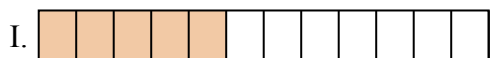
6)  $\frac{1}{10} + \frac{1}{10} + \frac{1}{10} + \frac{1}{10} + \frac{1}{10} + \frac{1}{10}$

6.         

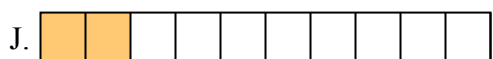
7)  $\frac{1}{3} + \frac{1}{3}$

7.         

8)  $\frac{1}{6} + \frac{1}{6} + \frac{1}{6} + \frac{1}{6} + \frac{1}{6}$

8.         


9)  $\frac{1}{5} + \frac{1}{5}$

9.         

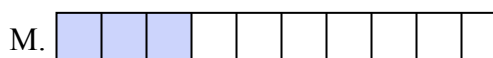
10)  $\frac{1}{10} + \frac{1}{10}$

10.         

11)  $\frac{1}{10} + \frac{1}{10} + \frac{1}{10} + \frac{1}{10} + \frac{1}{10} + \frac{1}{10} + \frac{1}{10}$

11.         


12)  $\frac{1}{12} + \frac{1}{12} + \frac{1}{12} + \frac{1}{12} + \frac{1}{12}$

12.         


13)  $\frac{1}{4} + \frac{1}{4} + \frac{1}{4}$

13.         

14)  $\frac{1}{6} + \frac{1}{6} + \frac{1}{6} + \frac{1}{6}$

14.         

15)  $\frac{1}{5} + \frac{1}{5} + \frac{1}{5} + \frac{1}{5}$

15.



Найдите соответствующий ответ и напишите его.


об)  $\frac{1}{6} + \frac{1}{6} + \frac{1}{6}$



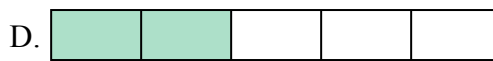
1)  $\frac{1}{8} + \frac{1}{8} + \frac{1}{8} + \frac{1}{8}$



2)  $\frac{1}{6} + \frac{1}{6}$




3)  $\frac{1}{4} + \frac{1}{4}$



4)  $\frac{1}{12} + \frac{1}{12} + \frac{1}{12} + \frac{1}{12}$



5)  $\frac{1}{10} + \frac{1}{10} + \frac{1}{10}$



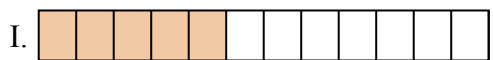
6)  $\frac{1}{10} + \frac{1}{10} + \frac{1}{10} + \frac{1}{10} + \frac{1}{10} + \frac{1}{10}$



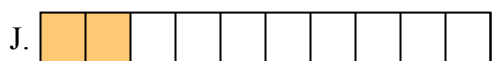
7)  $\frac{1}{3} + \frac{1}{3}$



8)  $\frac{1}{6} + \frac{1}{6} + \frac{1}{6} + \frac{1}{6} + \frac{1}{6}$




9)  $\frac{1}{5} + \frac{1}{5}$




10)  $\frac{1}{10} + \frac{1}{10}$



11)  $\frac{1}{10} + \frac{1}{10} + \frac{1}{10} + \frac{1}{10} + \frac{1}{10} + \frac{1}{10} + \frac{1}{10}$




12)  $\frac{1}{12} + \frac{1}{12} + \frac{1}{12} + \frac{1}{12} + \frac{1}{12}$




13)  $\frac{1}{4} + \frac{1}{4} + \frac{1}{4}$



14)  $\frac{1}{6} + \frac{1}{6} + \frac{1}{6} + \frac{1}{6}$




15)  $\frac{1}{5} + \frac{1}{5} + \frac{1}{5} + \frac{1}{5}$

Ответыоб.          **A**1.          **L**2.          **O**3.          **P**4.          **B**5.          **M**6.          **G**7.          **F**8.          **N**9.          **D**10.          **J**11.          **E**12.          **I**13.          **K**14.          **H**15.          **C**



Найдите соответствующий ответ и напишите его.

об)  $\frac{1}{5} + \frac{1}{5}$




1)  $\frac{1}{10} + \frac{1}{10}$



2)  $\frac{1}{5} + \frac{1}{5} + \frac{1}{5}$



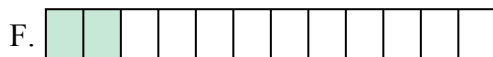
3)  $\frac{1}{3} + \frac{1}{3}$



4)  $\frac{1}{12} + \frac{1}{12}$



5)  $\frac{1}{12} + \frac{1}{12} + \frac{1}{12} + \frac{1}{12}$



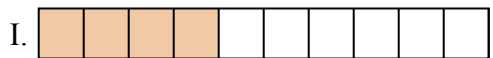
6)  $\frac{1}{4} + \frac{1}{4}$



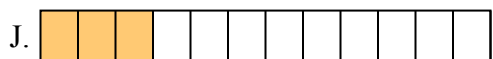
7)  $\frac{1}{6} + \frac{1}{6}$



8)  $\frac{1}{4} + \frac{1}{4} + \frac{1}{4}$



9)  $\frac{1}{10} + \frac{1}{10} + \frac{1}{10} + \frac{1}{10}$




10)  $\frac{1}{6} + \frac{1}{6} + \frac{1}{6} + \frac{1}{6} + \frac{1}{6}$



11)  $\frac{1}{8} + \frac{1}{8} + \frac{1}{8} + \frac{1}{8}$




12)  $\frac{1}{12} + \frac{1}{12} + \frac{1}{12}$




13)  $\frac{1}{8} + \frac{1}{8}$



14)  $\frac{1}{6} + \frac{1}{6} + \frac{1}{6} + \frac{1}{6}$



15)  $\frac{1}{8} + \frac{1}{8} + \frac{1}{8} + \frac{1}{8} + \frac{1}{8}$

**Отв**об.         **G**        

1. \_\_\_\_\_

2. \_\_\_\_\_

3. \_\_\_\_\_

4. \_\_\_\_\_

5. \_\_\_\_\_

6. \_\_\_\_\_

7. \_\_\_\_\_

8. \_\_\_\_\_

9. \_\_\_\_\_

10. \_\_\_\_\_

11. \_\_\_\_\_

12. \_\_\_\_\_

13. \_\_\_\_\_

14. \_\_\_\_\_

15. \_\_\_\_\_




Найдите соответствующий ответ и напишите его.

об)  $\frac{1}{5} + \frac{1}{5}$




1)  $\frac{1}{10} + \frac{1}{10}$



2)  $\frac{1}{5} + \frac{1}{5} + \frac{1}{5}$



3)  $\frac{1}{3} + \frac{1}{3}$



4)  $\frac{1}{12} + \frac{1}{12}$



5)  $\frac{1}{12} + \frac{1}{12} + \frac{1}{12} + \frac{1}{12}$



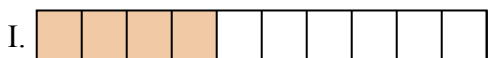
6)  $\frac{1}{4} + \frac{1}{4}$



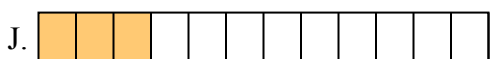
7)  $\frac{1}{6} + \frac{1}{6}$



8)  $\frac{1}{4} + \frac{1}{4} + \frac{1}{4}$




9)  $\frac{1}{10} + \frac{1}{10} + \frac{1}{10} + \frac{1}{10}$




10)  $\frac{1}{6} + \frac{1}{6} + \frac{1}{6} + \frac{1}{6} + \frac{1}{6}$



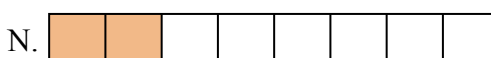
11)  $\frac{1}{8} + \frac{1}{8} + \frac{1}{8} + \frac{1}{8}$




12)  $\frac{1}{12} + \frac{1}{12} + \frac{1}{12}$




13)  $\frac{1}{8} + \frac{1}{8}$



14)  $\frac{1}{6} + \frac{1}{6} + \frac{1}{6} + \frac{1}{6}$



15)  $\frac{1}{8} + \frac{1}{8} + \frac{1}{8} + \frac{1}{8} + \frac{1}{8}$



**ОТВЕТЫ**

об.         **G**        

1.         **E**        

2.         **O**        

3.         **K**        

4.         **F**        

5.         **M**        

6.         **D**        

7.         **A**        

8.         **P**        

9.         **I**        

10.         **B**        

11.         **C**        

12.         **J**        

13.         **N**        

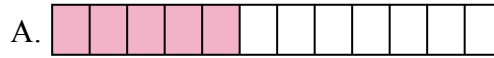
14.         **L**        

15.         **H**



Найдите соответствующий ответ и напишите его.


об)  $\frac{1}{10} + \frac{1}{10} + \frac{1}{10} + \frac{1}{10} + \frac{1}{10} + \frac{1}{10} + \frac{1}{10}$



1)  $\frac{1}{12} + \frac{1}{12} + \frac{1}{12} + \frac{1}{12}$




2)  $\frac{1}{5} + \frac{1}{5} + \frac{1}{5} + \frac{1}{5}$



3)  $\frac{1}{6} + \frac{1}{6} + \frac{1}{6}$



4)  $\frac{1}{8} + \frac{1}{8} + \frac{1}{8} + \frac{1}{8}$



5)  $\frac{1}{4} + \frac{1}{4}$




6)  $\frac{1}{5} + \frac{1}{5} + \frac{1}{5}$




7)  $\frac{1}{8} + \frac{1}{8} + \frac{1}{8} + \frac{1}{8} + \frac{1}{8}$




8)  $\frac{1}{3} + \frac{1}{3}$



9)  $\frac{1}{5} + \frac{1}{5}$




10)  $\frac{1}{12} + \frac{1}{12}$



11)  $\frac{1}{8} + \frac{1}{8}$



12)  $\frac{1}{10} + \frac{1}{10} + \frac{1}{10}$




13)  $\frac{1}{4} + \frac{1}{4} + \frac{1}{4}$



14)  $\frac{1}{12} + \frac{1}{12} + \frac{1}{12} + \frac{1}{12} + \frac{1}{12}$



15)  $\frac{1}{6} + \frac{1}{6} + \frac{1}{6} + \frac{1}{6} + \frac{1}{6}$

Ответыоб.         Н        

1. \_\_\_\_\_

2. \_\_\_\_\_

3. \_\_\_\_\_

4. \_\_\_\_\_

5. \_\_\_\_\_

6. \_\_\_\_\_

7. \_\_\_\_\_

8. \_\_\_\_\_

9. \_\_\_\_\_

10. \_\_\_\_\_

11. \_\_\_\_\_

12. \_\_\_\_\_

13. \_\_\_\_\_

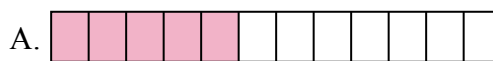
14. \_\_\_\_\_

15. \_\_\_\_\_



Найдите соответствующий ответ и напишите его.

об)  $\frac{1}{10} + \frac{1}{10} + \frac{1}{10} + \frac{1}{10} + \frac{1}{10} + \frac{1}{10} + \frac{1}{10}$



1)  $\frac{1}{12} + \frac{1}{12} + \frac{1}{12} + \frac{1}{12}$



2)  $\frac{1}{5} + \frac{1}{5} + \frac{1}{5} + \frac{1}{5}$



3)  $\frac{1}{6} + \frac{1}{6} + \frac{1}{6}$



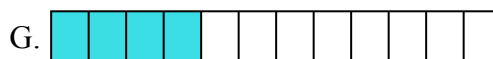
4)  $\frac{1}{8} + \frac{1}{8} + \frac{1}{8} + \frac{1}{8}$




5)  $\frac{1}{4} + \frac{1}{4}$




6)  $\frac{1}{5} + \frac{1}{5} + \frac{1}{5}$



7)  $\frac{1}{8} + \frac{1}{8} + \frac{1}{8} + \frac{1}{8} + \frac{1}{8}$



8)  $\frac{1}{3} + \frac{1}{3}$




9)  $\frac{1}{5} + \frac{1}{5}$




10)  $\frac{1}{12} + \frac{1}{12}$



11)  $\frac{1}{8} + \frac{1}{8}$



12)  $\frac{1}{10} + \frac{1}{10} + \frac{1}{10}$




13)  $\frac{1}{4} + \frac{1}{4} + \frac{1}{4}$



14)  $\frac{1}{12} + \frac{1}{12} + \frac{1}{12} + \frac{1}{12} + \frac{1}{12}$



15)  $\frac{1}{6} + \frac{1}{6} + \frac{1}{6} + \frac{1}{6} + \frac{1}{6}$

ОТВЕТЫоб.          **H**1.          **G**2.          **M**3.          **J**4.          **O**5.          **L**6.          **P**7.          **C**8.          **F**9.          **K**10.          **D**11.          **I**12.          **B**13.          **N**14.          **A**15.          **E**



Найдите соответствующий ответ и напишите его.

об)  $\frac{1}{4} + \frac{1}{4}$



1)  $\frac{1}{10} + \frac{1}{10} + \frac{1}{10} + \frac{1}{10} + \frac{1}{10} + \frac{1}{10} + \frac{1}{10}$




2)  $\frac{1}{5} + \frac{1}{5}$




3)  $\frac{1}{5} + \frac{1}{5} + \frac{1}{5}$




4)  $\frac{1}{8} + \frac{1}{8}$



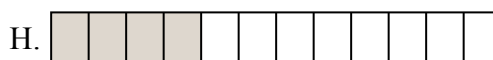
5)  $\frac{1}{10} + \frac{1}{10} + \frac{1}{10} + \frac{1}{10} + \frac{1}{10}$




6)  $\frac{1}{3} + \frac{1}{3}$



7)  $\frac{1}{10} + \frac{1}{10} + \frac{1}{10} + \frac{1}{10}$



8)  $\frac{1}{4} + \frac{1}{4} + \frac{1}{4}$




9)  $\frac{1}{12} + \frac{1}{12}$




10)  $\frac{1}{8} + \frac{1}{8} + \frac{1}{8} + \frac{1}{8} + \frac{1}{8} + \frac{1}{8}$



11)  $\frac{1}{12} + \frac{1}{12} + \frac{1}{12} + \frac{1}{12}$




12)  $\frac{1}{6} + \frac{1}{6} + \frac{1}{6}$




13)  $\frac{1}{5} + \frac{1}{5} + \frac{1}{5} + \frac{1}{5}$



14)  $\frac{1}{8} + \frac{1}{8} + \frac{1}{8} + \frac{1}{8}$



15)  $\frac{1}{10} + \frac{1}{10} + \frac{1}{10}$



**Отвѣты**

об.         I        

1. \_\_\_\_\_

2. \_\_\_\_\_

3. \_\_\_\_\_

4. \_\_\_\_\_

5. \_\_\_\_\_

6. \_\_\_\_\_

7. \_\_\_\_\_

8. \_\_\_\_\_

9. \_\_\_\_\_

10. \_\_\_\_\_

11. \_\_\_\_\_

12. \_\_\_\_\_

13. \_\_\_\_\_

14. \_\_\_\_\_

15. \_\_\_\_\_



Найдите соответствующий ответ и напишите его.

об)  $\frac{1}{4} + \frac{1}{4}$



1)  $\frac{1}{10} + \frac{1}{10} + \frac{1}{10} + \frac{1}{10} + \frac{1}{10} + \frac{1}{10} + \frac{1}{10}$




2)  $\frac{1}{5} + \frac{1}{5}$




3)  $\frac{1}{5} + \frac{1}{5} + \frac{1}{5}$



4)  $\frac{1}{8} + \frac{1}{8}$



5)  $\frac{1}{10} + \frac{1}{10} + \frac{1}{10} + \frac{1}{10} + \frac{1}{10}$




6)  $\frac{1}{3} + \frac{1}{3}$




7)  $\frac{1}{10} + \frac{1}{10} + \frac{1}{10} + \frac{1}{10}$




8)  $\frac{1}{4} + \frac{1}{4} + \frac{1}{4}$




9)  $\frac{1}{12} + \frac{1}{12}$




10)  $\frac{1}{8} + \frac{1}{8} + \frac{1}{8} + \frac{1}{8} + \frac{1}{8} + \frac{1}{8}$



11)  $\frac{1}{12} + \frac{1}{12} + \frac{1}{12} + \frac{1}{12}$




12)  $\frac{1}{6} + \frac{1}{6} + \frac{1}{6}$




13)  $\frac{1}{5} + \frac{1}{5} + \frac{1}{5} + \frac{1}{5}$



14)  $\frac{1}{8} + \frac{1}{8} + \frac{1}{8} + \frac{1}{8}$



15)  $\frac{1}{10} + \frac{1}{10} + \frac{1}{10}$



**ОТВЕТЫ**

об. I

1. L

2. K

3. M

4. G

5. E

6. N

7. J

8. A

9. D

10. C

11. H

12. B

13. P

14. O

15. F






Найдите соответствующий ответ и напишите его.

**Ответы**

об)  $\frac{1}{12} + \frac{1}{12} + \frac{1}{12}$

об.          **N**


1)  $\frac{1}{6} + \frac{1}{6} + \frac{1}{6} + \frac{1}{6} + \frac{1}{6}$

1.         

2)  $\frac{1}{8} + \frac{1}{8} + \frac{1}{8} + \frac{1}{8} + \frac{1}{8}$

2.         


3)  $\frac{1}{5} + \frac{1}{5}$

3.         

4)  $\frac{1}{3} + \frac{1}{3}$

4.         

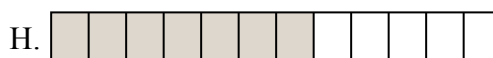
5)  $\frac{1}{10} + \frac{1}{10} + \frac{1}{10} + \frac{1}{10} + \frac{1}{10} + \frac{1}{10} + \frac{1}{10}$

6.         


6)  $\frac{1}{5} + \frac{1}{5} + \frac{1}{5} + \frac{1}{5}$

7.         

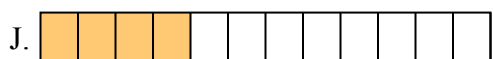
7)  $\frac{1}{4} + \frac{1}{4}$

8.         

8)  $\frac{1}{6} + \frac{1}{6}$

9.         

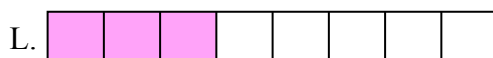
9)  $\frac{1}{10} + \frac{1}{10} + \frac{1}{10} + \frac{1}{10} + \frac{1}{10}$

10.         

10)  $\frac{1}{6} + \frac{1}{6} + \frac{1}{6}$

11.         

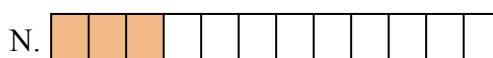
11)  $\frac{1}{8} + \frac{1}{8} + \frac{1}{8}$

12.         

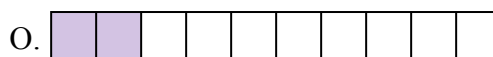
12)  $\frac{1}{12} + \frac{1}{12} + \frac{1}{12} + \frac{1}{12}$

13.         


13)  $\frac{1}{6} + \frac{1}{6} + \frac{1}{6} + \frac{1}{6}$

14.         

14)  $\frac{1}{10} + \frac{1}{10}$

15.         

15)  $\frac{1}{12} + \frac{1}{12} + \frac{1}{12} + \frac{1}{12} + \frac{1}{12} + \frac{1}{12} + \frac{1}{12}$





Найдите соответствующий ответ и напишите его.

об)  $\frac{1}{12} + \frac{1}{12} + \frac{1}{12}$



1)  $\frac{1}{6} + \frac{1}{6} + \frac{1}{6} + \frac{1}{6} + \frac{1}{6}$



2)  $\frac{1}{8} + \frac{1}{8} + \frac{1}{8} + \frac{1}{8} + \frac{1}{8}$




3)  $\frac{1}{5} + \frac{1}{5}$



4)  $\frac{1}{3} + \frac{1}{3}$



5)  $\frac{1}{10} + \frac{1}{10} + \frac{1}{10} + \frac{1}{10} + \frac{1}{10} + \frac{1}{10} + \frac{1}{10}$




6)  $\frac{1}{5} + \frac{1}{5} + \frac{1}{5} + \frac{1}{5}$



7)  $\frac{1}{4} + \frac{1}{4}$




8)  $\frac{1}{6} + \frac{1}{6}$



9)  $\frac{1}{10} + \frac{1}{10} + \frac{1}{10} + \frac{1}{10} + \frac{1}{10}$



10)  $\frac{1}{6} + \frac{1}{6} + \frac{1}{6}$



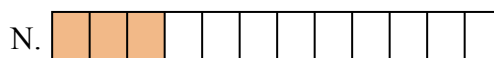
11)  $\frac{1}{8} + \frac{1}{8} + \frac{1}{8}$




12)  $\frac{1}{12} + \frac{1}{12} + \frac{1}{12} + \frac{1}{12}$




13)  $\frac{1}{6} + \frac{1}{6} + \frac{1}{6} + \frac{1}{6}$



14)  $\frac{1}{10} + \frac{1}{10}$



15)  $\frac{1}{12} + \frac{1}{12} + \frac{1}{12} + \frac{1}{12} + \frac{1}{12} + \frac{1}{12} + \frac{1}{12}$


Ответыоб.     N    1.     I    2.     C    3.     D    4.     M    5.     F    6.     A    7.     E    8.     B    9.     P    10.    G   11.    L   12.    J   13.    K   14.    O   15.    H



Найдите соответствующий ответ и напишите его.

**ОТВЕТЫ**

об)  $\frac{1}{4} + \frac{1}{4} + \frac{1}{4}$

об.          **N**

1)  $\frac{1}{8} + \frac{1}{8} + \frac{1}{8} + \frac{1}{8} + \frac{1}{8} + \frac{1}{8} + \frac{1}{8}$

1.         

2)  $\frac{1}{10} + \frac{1}{10} + \frac{1}{10}$

2.         


3)  $\frac{1}{6} + \frac{1}{6} + \frac{1}{6} + \frac{1}{6}$

3.         

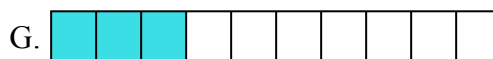
4)  $\frac{1}{10} + \frac{1}{10} + \frac{1}{10} + \frac{1}{10} + \frac{1}{10} + \frac{1}{10} + \frac{1}{10}$

4.         


5)  $\frac{1}{8} + \frac{1}{8} + \frac{1}{8}$

6.         


6)  $\frac{1}{12} + \frac{1}{12} + \frac{1}{12} + \frac{1}{12} + \frac{1}{12} + \frac{1}{12}$

7.         

7)  $\frac{1}{5} + \frac{1}{5} + \frac{1}{5}$

8.         


8)  $\frac{1}{3} + \frac{1}{3}$

9.         

9)  $\frac{1}{5} + \frac{1}{5} + \frac{1}{5} + \frac{1}{5}$

10.         

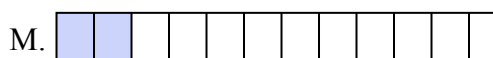
10)  $\frac{1}{12} + \frac{1}{12} + \frac{1}{12}$

11.         

11)  $\frac{1}{10} + \frac{1}{10} + \frac{1}{10} + \frac{1}{10} + \frac{1}{10} + \frac{1}{10}$

12.         

12)  $\frac{1}{12} + \frac{1}{12}$

13.         

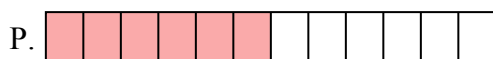
13)  $\frac{1}{10} + \frac{1}{10}$

14.         

14)  $\frac{1}{6} + \frac{1}{6} + \frac{1}{6}$

15.         

15)  $\frac{1}{8} + \frac{1}{8} + \frac{1}{8} + \frac{1}{8} + \frac{1}{8} + \frac{1}{8}$





Найдите соответствующий ответ и напишите его.

об)  $\frac{1}{4} + \frac{1}{4} + \frac{1}{4}$



1)  $\frac{1}{8} + \frac{1}{8} + \frac{1}{8} + \frac{1}{8} + \frac{1}{8} + \frac{1}{8} + \frac{1}{8}$



2)  $\frac{1}{10} + \frac{1}{10} + \frac{1}{10}$



3)  $\frac{1}{6} + \frac{1}{6} + \frac{1}{6} + \frac{1}{6}$



4)  $\frac{1}{10} + \frac{1}{10} + \frac{1}{10} + \frac{1}{10} + \frac{1}{10} + \frac{1}{10} + \frac{1}{10}$



5)  $\frac{1}{8} + \frac{1}{8} + \frac{1}{8}$



6)  $\frac{1}{12} + \frac{1}{12} + \frac{1}{12} + \frac{1}{12} + \frac{1}{12} + \frac{1}{12}$



7)  $\frac{1}{5} + \frac{1}{5} + \frac{1}{5}$



8)  $\frac{1}{3} + \frac{1}{3}$



9)  $\frac{1}{5} + \frac{1}{5} + \frac{1}{5} + \frac{1}{5}$



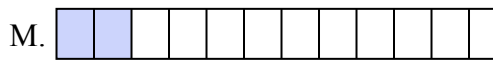
10)  $\frac{1}{12} + \frac{1}{12} + \frac{1}{12}$



11)  $\frac{1}{10} + \frac{1}{10} + \frac{1}{10} + \frac{1}{10} + \frac{1}{10} + \frac{1}{10}$



12)  $\frac{1}{12} + \frac{1}{12}$




13)  $\frac{1}{10} + \frac{1}{10}$



14)  $\frac{1}{6} + \frac{1}{6} + \frac{1}{6}$



15)  $\frac{1}{8} + \frac{1}{8} + \frac{1}{8} + \frac{1}{8} + \frac{1}{8} + \frac{1}{8}$



**ОТВЕТЫ**

об.         N        

1.         J        

2.         G        

3.         E        

4.         K        

5.         O        

6.         P        

7.         H        

8.         C        

9.         F        

10.         D        

11.         I        

12.         M        

13.         B        

14.         L        


15.         A



Найдите соответствующий ответ и напишите его.


**ОТВЕТЫ**

об)  $\frac{1}{10} + \frac{1}{10}$



об.          **G**

1)  $\frac{1}{5} + \frac{1}{5} + \frac{1}{5}$




1. \_\_\_\_\_

2)  $\frac{1}{10} + \frac{1}{10} + \frac{1}{10} + \frac{1}{10} + \frac{1}{10} + \frac{1}{10}$




2. \_\_\_\_\_

3)  $\frac{1}{8} + \frac{1}{8} + \frac{1}{8}$




3. \_\_\_\_\_

4)  $\frac{1}{6} + \frac{1}{6} + \frac{1}{6} + \frac{1}{6} + \frac{1}{6}$




4. \_\_\_\_\_

5)  $\frac{1}{4} + \frac{1}{4}$




6. \_\_\_\_\_

6)  $\frac{1}{3} + \frac{1}{3}$




7. \_\_\_\_\_

7)  $\frac{1}{12} + \frac{1}{12} + \frac{1}{12} + \frac{1}{12} + \frac{1}{12}$



8. \_\_\_\_\_

8)  $\frac{1}{10} + \frac{1}{10} + \frac{1}{10} + \frac{1}{10} + \frac{1}{10} + \frac{1}{10} + \frac{1}{10}$



9. \_\_\_\_\_

9)  $\frac{1}{8} + \frac{1}{8}$




10. \_\_\_\_\_

10)  $\frac{1}{10} + \frac{1}{10} + \frac{1}{10} + \frac{1}{10}$



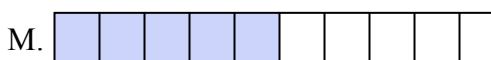
11. \_\_\_\_\_

11)  $\frac{1}{10} + \frac{1}{10} + \frac{1}{10} + \frac{1}{10} + \frac{1}{10}$



12. \_\_\_\_\_

12)  $\frac{1}{5} + \frac{1}{5} + \frac{1}{5} + \frac{1}{5}$




13. \_\_\_\_\_

13)  $\frac{1}{4} + \frac{1}{4} + \frac{1}{4}$




14. \_\_\_\_\_

14)  $\frac{1}{6} + \frac{1}{6} + \frac{1}{6} + \frac{1}{6}$



15. \_\_\_\_\_


15)  $\frac{1}{12} + \frac{1}{12} + \frac{1}{12} + \frac{1}{12}$






Найдите соответствующий ответ и напишите его.

об)  $\frac{1}{10} + \frac{1}{10}$




1)  $\frac{1}{5} + \frac{1}{5} + \frac{1}{5}$



2)  $\frac{1}{10} + \frac{1}{10} + \frac{1}{10} + \frac{1}{10} + \frac{1}{10} + \frac{1}{10}$




3)  $\frac{1}{8} + \frac{1}{8} + \frac{1}{8}$



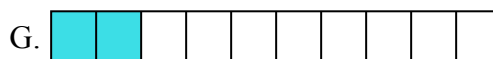
4)  $\frac{1}{6} + \frac{1}{6} + \frac{1}{6} + \frac{1}{6} + \frac{1}{6}$



5)  $\frac{1}{4} + \frac{1}{4}$




6)  $\frac{1}{3} + \frac{1}{3}$



7)  $\frac{1}{12} + \frac{1}{12} + \frac{1}{12} + \frac{1}{12} + \frac{1}{12}$




8)  $\frac{1}{10} + \frac{1}{10} + \frac{1}{10} + \frac{1}{10} + \frac{1}{10} + \frac{1}{10} + \frac{1}{10}$



9)  $\frac{1}{8} + \frac{1}{8}$




10)  $\frac{1}{10} + \frac{1}{10} + \frac{1}{10} + \frac{1}{10}$



11)  $\frac{1}{10} + \frac{1}{10} + \frac{1}{10} + \frac{1}{10} + \frac{1}{10}$



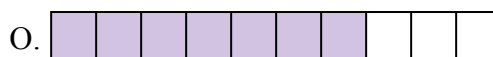
12)  $\frac{1}{5} + \frac{1}{5} + \frac{1}{5} + \frac{1}{5}$




13)  $\frac{1}{4} + \frac{1}{4} + \frac{1}{4}$



14)  $\frac{1}{6} + \frac{1}{6} + \frac{1}{6} + \frac{1}{6}$



15)  $\frac{1}{12} + \frac{1}{12} + \frac{1}{12} + \frac{1}{12}$

ОТВЕТЫоб.          **G**1.          **B**2.          **E**3.          **N**4.          **I**5.          **C**6.          **H**7.          **J**8.          **O**9.          **K**10.          **L**11.          **M**12.          **D**13.          **F**14.          **P**15.          **A**



Найдите соответствующий ответ и напишите его.

об)  $\frac{1}{5} + \frac{1}{5}$



1)  $\frac{1}{10} + \frac{1}{10} + \frac{1}{10} + \frac{1}{10} + \frac{1}{10} + \frac{1}{10} + \frac{1}{10}$



2)  $\frac{1}{12} + \frac{1}{12} + \frac{1}{12} + \frac{1}{12}$




3)  $\frac{1}{6} + \frac{1}{6}$



4)  $\frac{1}{8} + \frac{1}{8} + \frac{1}{8} + \frac{1}{8} + \frac{1}{8} + \frac{1}{8} + \frac{1}{8}$



5)  $\frac{1}{10} + \frac{1}{10} + \frac{1}{10} + \frac{1}{10} + \frac{1}{10} + \frac{1}{10}$




6)  $\frac{1}{5} + \frac{1}{5} + \frac{1}{5} + \frac{1}{5}$



7)  $\frac{1}{10} + \frac{1}{10} + \frac{1}{10} + \frac{1}{10}$




8)  $\frac{1}{4} + \frac{1}{4}$



9)  $\frac{1}{3} + \frac{1}{3}$



10)  $\frac{1}{8} + \frac{1}{8} + \frac{1}{8} + \frac{1}{8} + \frac{1}{8}$



11)  $\frac{1}{4} + \frac{1}{4} + \frac{1}{4}$



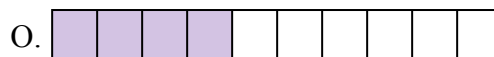
12)  $\frac{1}{10} + \frac{1}{10} + \frac{1}{10} + \frac{1}{10} + \frac{1}{10}$




13)  $\frac{1}{8} + \frac{1}{8} + \frac{1}{8}$



14)  $\frac{1}{8} + \frac{1}{8} + \frac{1}{8} + \frac{1}{8} + \frac{1}{8} + \frac{1}{8}$



15)  $\frac{1}{8} + \frac{1}{8} + \frac{1}{8} + \frac{1}{8}$

Ответыоб. Е

1. \_\_\_\_\_

2. \_\_\_\_\_

3. \_\_\_\_\_

4. \_\_\_\_\_

5. \_\_\_\_\_

6. \_\_\_\_\_

7. \_\_\_\_\_

8. \_\_\_\_\_

9. \_\_\_\_\_

10. \_\_\_\_\_

11. \_\_\_\_\_

12. \_\_\_\_\_

13. \_\_\_\_\_


14. \_\_\_\_\_

15. \_\_\_\_\_



Найдите соответствующий ответ и напишите его.

об)  $\frac{1}{5} + \frac{1}{5}$



1)  $\frac{1}{10} + \frac{1}{10} + \frac{1}{10} + \frac{1}{10} + \frac{1}{10} + \frac{1}{10} + \frac{1}{10}$




2)  $\frac{1}{12} + \frac{1}{12} + \frac{1}{12} + \frac{1}{12}$




3)  $\frac{1}{6} + \frac{1}{6}$



4)  $\frac{1}{8} + \frac{1}{8} + \frac{1}{8} + \frac{1}{8} + \frac{1}{8} + \frac{1}{8} + \frac{1}{8}$



5)  $\frac{1}{10} + \frac{1}{10} + \frac{1}{10} + \frac{1}{10} + \frac{1}{10} + \frac{1}{10}$




6)  $\frac{1}{5} + \frac{1}{5} + \frac{1}{5} + \frac{1}{5}$



7)  $\frac{1}{10} + \frac{1}{10} + \frac{1}{10} + \frac{1}{10}$




8)  $\frac{1}{4} + \frac{1}{4}$




9)  $\frac{1}{3} + \frac{1}{3}$



10)  $\frac{1}{8} + \frac{1}{8} + \frac{1}{8} + \frac{1}{8} + \frac{1}{8}$




11)  $\frac{1}{4} + \frac{1}{4} + \frac{1}{4}$



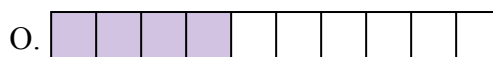
12)  $\frac{1}{10} + \frac{1}{10} + \frac{1}{10} + \frac{1}{10} + \frac{1}{10}$




13)  $\frac{1}{8} + \frac{1}{8} + \frac{1}{8}$



14)  $\frac{1}{8} + \frac{1}{8} + \frac{1}{8} + \frac{1}{8} + \frac{1}{8} + \frac{1}{8}$



15)  $\frac{1}{8} + \frac{1}{8} + \frac{1}{8} + \frac{1}{8}$

Ответыоб. Е1. К2. Д3. В4. Г5. Р6. А7. О8. М9. Ж10. И11. Л12. С13. Ф14. Н15. И





Найдите соответствующий ответ и напишите его.

**Отвѣты**

об)  $\frac{1}{8} + \frac{1}{8} + \frac{1}{8} + \frac{1}{8} + \frac{1}{8}$




об.         A        

1)  $\frac{1}{4} + \frac{1}{4} + \frac{1}{4}$



1. \_\_\_\_\_

2)  $\frac{1}{10} + \frac{1}{10} + \frac{1}{10} + \frac{1}{10} + \frac{1}{10} + \frac{1}{10}$



2. \_\_\_\_\_

3)  $\frac{1}{6} + \frac{1}{6}$




3. \_\_\_\_\_

4)  $\frac{1}{8} + \frac{1}{8} + \frac{1}{8} + \frac{1}{8} + \frac{1}{8} + \frac{1}{8} + \frac{1}{8}$



4. \_\_\_\_\_

5)  $\frac{1}{6} + \frac{1}{6} + \frac{1}{6} + \frac{1}{6}$



5. \_\_\_\_\_

6)  $\frac{1}{12} + \frac{1}{12} + \frac{1}{12} + \frac{1}{12} + \frac{1}{12}$



6. \_\_\_\_\_

7)  $\frac{1}{8} + \frac{1}{8} + \frac{1}{8} + \frac{1}{8}$



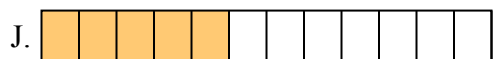
7. \_\_\_\_\_

8)  $\frac{1}{3} + \frac{1}{3}$



8. \_\_\_\_\_

9)  $\frac{1}{6} + \frac{1}{6} + \frac{1}{6} + \frac{1}{6} + \frac{1}{6}$



9. \_\_\_\_\_

10)  $\frac{1}{12} + \frac{1}{12} + \frac{1}{12} + \frac{1}{12}$



10. \_\_\_\_\_

11)  $\frac{1}{10} + \frac{1}{10} + \frac{1}{10} + \frac{1}{10}$




11. \_\_\_\_\_

12)  $\frac{1}{5} + \frac{1}{5} + \frac{1}{5} + \frac{1}{5}$



12. \_\_\_\_\_

13)  $\frac{1}{4} + \frac{1}{4}$




13. \_\_\_\_\_

14)  $\frac{1}{8} + \frac{1}{8} + \frac{1}{8} + \frac{1}{8} + \frac{1}{8} + \frac{1}{8}$



14. \_\_\_\_\_

15)  $\frac{1}{5} + \frac{1}{5}$



15. \_\_\_\_\_



Найдите соответствующий ответ и напишите его.


об)  $\frac{1}{8} + \frac{1}{8} + \frac{1}{8} + \frac{1}{8} + \frac{1}{8}$



1)  $\frac{1}{4} + \frac{1}{4} + \frac{1}{4}$



2)  $\frac{1}{10} + \frac{1}{10} + \frac{1}{10} + \frac{1}{10} + \frac{1}{10} + \frac{1}{10}$




3)  $\frac{1}{6} + \frac{1}{6}$



4)  $\frac{1}{8} + \frac{1}{8} + \frac{1}{8} + \frac{1}{8} + \frac{1}{8} + \frac{1}{8} + \frac{1}{8}$



5)  $\frac{1}{6} + \frac{1}{6} + \frac{1}{6} + \frac{1}{6}$



6)  $\frac{1}{12} + \frac{1}{12} + \frac{1}{12} + \frac{1}{12} + \frac{1}{12}$



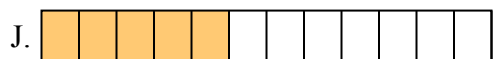
7)  $\frac{1}{8} + \frac{1}{8} + \frac{1}{8} + \frac{1}{8}$



8)  $\frac{1}{3} + \frac{1}{3}$



9)  $\frac{1}{6} + \frac{1}{6} + \frac{1}{6} + \frac{1}{6} + \frac{1}{6}$



10)  $\frac{1}{12} + \frac{1}{12} + \frac{1}{12} + \frac{1}{12}$




11)  $\frac{1}{10} + \frac{1}{10} + \frac{1}{10} + \frac{1}{10}$



12)  $\frac{1}{5} + \frac{1}{5} + \frac{1}{5} + \frac{1}{5}$




13)  $\frac{1}{4} + \frac{1}{4}$



14)  $\frac{1}{8} + \frac{1}{8} + \frac{1}{8} + \frac{1}{8} + \frac{1}{8} + \frac{1}{8}$



15)  $\frac{1}{5} + \frac{1}{5}$



**ОТВЕТЫ**

об.         **A**        

1.         **F**        

2.         **P**        

3.         **N**        

4.         **O**        

5.         **H**        

6.         **J**        

7.         **C**        

8.         **K**        

9.         **L**        

10.         **I**        

11.         **D**        

12.         **B**        

13.         **M**        

14.         **G**        

15.         **E**



Найдите соответствующий ответ и напишите его.

об)  $\frac{1}{8} + \frac{1}{8} + \frac{1}{8} + \frac{1}{8} + \frac{1}{8}$




1)  $\frac{1}{5} + \frac{1}{5} + \frac{1}{5}$



2)  $\frac{1}{4} + \frac{1}{4}$



3)  $\frac{1}{5} + \frac{1}{5} + \frac{1}{5} + \frac{1}{5}$



4)  $\frac{1}{8} + \frac{1}{8}$




5)  $\frac{1}{4} + \frac{1}{4} + \frac{1}{4}$




6)  $\frac{1}{5} + \frac{1}{5}$



7)  $\frac{1}{8} + \frac{1}{8} + \frac{1}{8} + \frac{1}{8} + \frac{1}{8} + \frac{1}{8}$




8)  $\frac{1}{6} + \frac{1}{6} + \frac{1}{6} + \frac{1}{6} + \frac{1}{6}$




9)  $\frac{1}{6} + \frac{1}{6} + \frac{1}{6} + \frac{1}{6}$



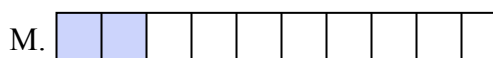
10)  $\frac{1}{12} + \frac{1}{12} + \frac{1}{12} + \frac{1}{12} + \frac{1}{12} + \frac{1}{12}$



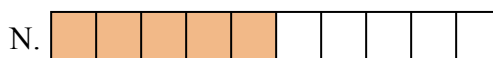
11)  $\frac{1}{10} + \frac{1}{10} + \frac{1}{10}$




12)  $\frac{1}{10} + \frac{1}{10} + \frac{1}{10} + \frac{1}{10} + \frac{1}{10}$




13)  $\frac{1}{3} + \frac{1}{3}$



14)  $\frac{1}{8} + \frac{1}{8} + \frac{1}{8} + \frac{1}{8}$



15)  $\frac{1}{10} + \frac{1}{10}$

Ответыоб.         J        

1. \_\_\_\_\_

2. \_\_\_\_\_

3. \_\_\_\_\_

4. \_\_\_\_\_

5. \_\_\_\_\_

6. \_\_\_\_\_

7. \_\_\_\_\_

8. \_\_\_\_\_

9. \_\_\_\_\_

10. \_\_\_\_\_

11. \_\_\_\_\_

12. \_\_\_\_\_

13. \_\_\_\_\_


14. \_\_\_\_\_

15. \_\_\_\_\_

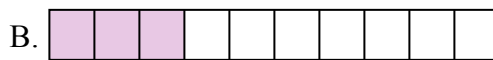


Найдите соответствующий ответ и напишите его.

об)  $\frac{1}{8} + \frac{1}{8} + \frac{1}{8} + \frac{1}{8} + \frac{1}{8}$




1)  $\frac{1}{5} + \frac{1}{5} + \frac{1}{5}$



2)  $\frac{1}{4} + \frac{1}{4}$




3)  $\frac{1}{5} + \frac{1}{5} + \frac{1}{5} + \frac{1}{5}$



4)  $\frac{1}{8} + \frac{1}{8}$




5)  $\frac{1}{4} + \frac{1}{4} + \frac{1}{4}$




6)  $\frac{1}{5} + \frac{1}{5}$



7)  $\frac{1}{8} + \frac{1}{8} + \frac{1}{8} + \frac{1}{8} + \frac{1}{8} + \frac{1}{8}$



8)  $\frac{1}{6} + \frac{1}{6} + \frac{1}{6} + \frac{1}{6} + \frac{1}{6}$




9)  $\frac{1}{6} + \frac{1}{6} + \frac{1}{6} + \frac{1}{6}$




10)  $\frac{1}{12} + \frac{1}{12} + \frac{1}{12} + \frac{1}{12} + \frac{1}{12} + \frac{1}{12}$



11)  $\frac{1}{10} + \frac{1}{10} + \frac{1}{10}$



12)  $\frac{1}{10} + \frac{1}{10} + \frac{1}{10} + \frac{1}{10} + \frac{1}{10}$



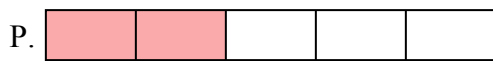
13)  $\frac{1}{3} + \frac{1}{3}$



14)  $\frac{1}{8} + \frac{1}{8} + \frac{1}{8} + \frac{1}{8}$



15)  $\frac{1}{10} + \frac{1}{10}$



**ОТВЕТЫ**

об.         **J**        

1.         **L**        

2.         **D**        

3.         **H**        

4.         **K**        

5.         **E**        

6.         **P**        

7.         **I**        

8.         **G**        

9.         **A**        

10.         **O**        

11.         **B**        

12.         **N**        

13.         **F**        

14.         **C**        

15.         **M**