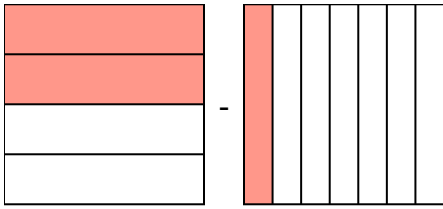


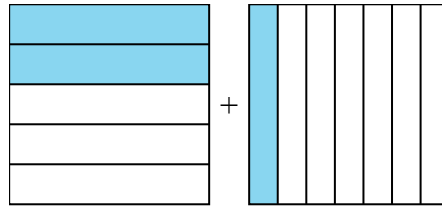


Решите каждую задачу.

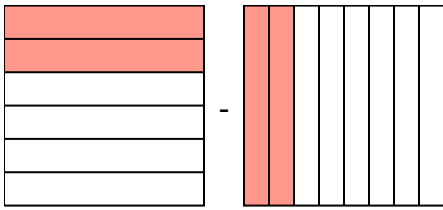
1)  $\frac{2}{4} - \frac{1}{7} =$



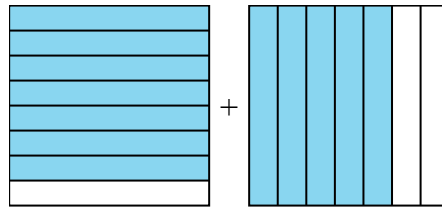
2)  $\frac{2}{5} + \frac{1}{7} =$



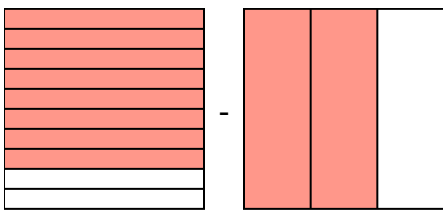
3)  $\frac{2}{6} - \frac{2}{8} =$



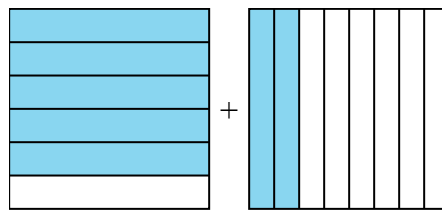
4)  $\frac{7}{8} + \frac{5}{7} =$



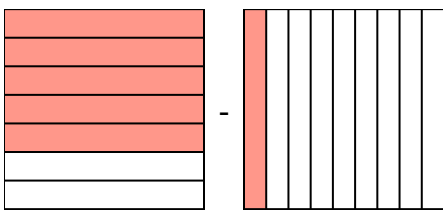
5)  $\frac{8}{10} - \frac{2}{3} =$



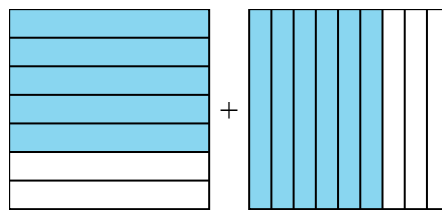
6)  $\frac{5}{6} + \frac{2}{8} =$



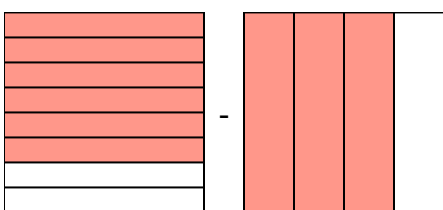
7)  $\frac{5}{7} - \frac{1}{9} =$



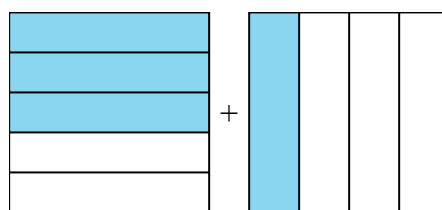
8)  $\frac{5}{7} + \frac{6}{9} =$



9)  $\frac{6}{8} - \frac{3}{4} =$



10)  $\frac{3}{5} + \frac{1}{4} =$



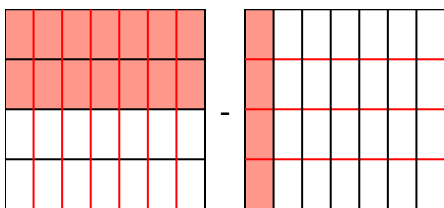
**Ответы**

1. \_\_\_\_\_
2. \_\_\_\_\_
3. \_\_\_\_\_
4. \_\_\_\_\_
5. \_\_\_\_\_
6. \_\_\_\_\_
7. \_\_\_\_\_
8. \_\_\_\_\_
9. \_\_\_\_\_
10. \_\_\_\_\_

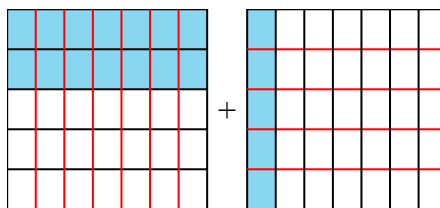


Решите каждую задачу.

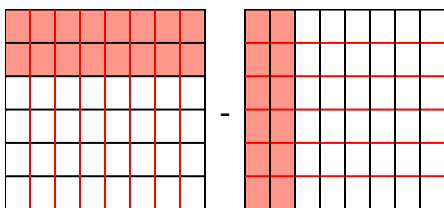
1)  $\frac{2}{4} - \frac{1}{7} = \frac{14}{28} - \frac{4}{28} = \frac{10}{28}$



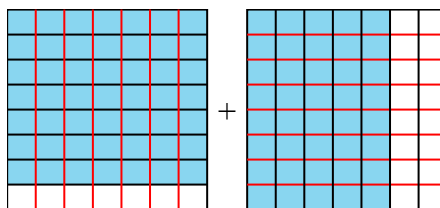
2)  $\frac{2}{5} + \frac{1}{7} = \frac{14}{35} + \frac{5}{35} = \frac{19}{35}$



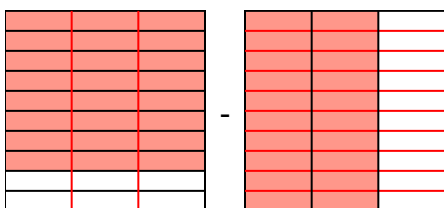
3)  $\frac{2}{6} - \frac{2}{8} = \frac{8}{24} - \frac{6}{24} = \frac{2}{24}$



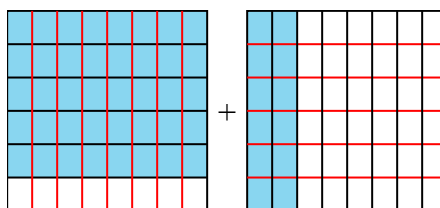
4)  $\frac{7}{8} + \frac{5}{7} = \frac{49}{56} + \frac{40}{56} = 1\frac{33}{56}$



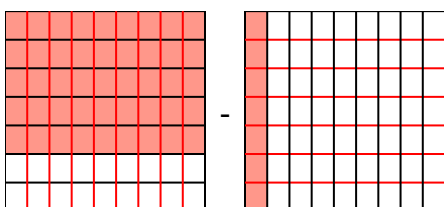
5)  $\frac{8}{10} - \frac{2}{3} = \frac{24}{30} - \frac{20}{30} = \frac{4}{30}$



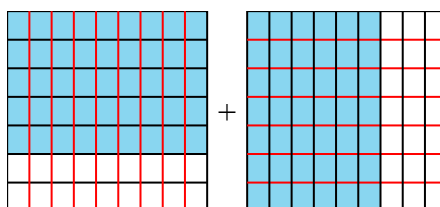
6)  $\frac{5}{6} + \frac{2}{8} = \frac{20}{24} + \frac{6}{24} = 1\frac{2}{24}$



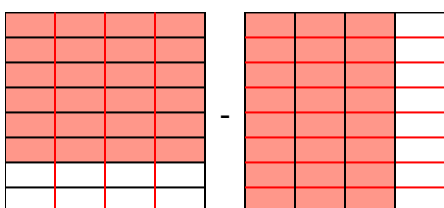
7)  $\frac{5}{7} - \frac{1}{9} = \frac{45}{63} - \frac{7}{63} = \frac{38}{63}$



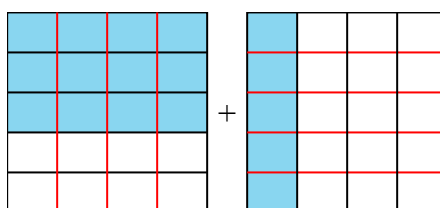
8)  $\frac{5}{7} + \frac{6}{9} = \frac{45}{63} + \frac{42}{63} = 1\frac{24}{63}$



9)  $\frac{6}{8} - \frac{3}{4} = \frac{6}{8} - \frac{6}{8} = \frac{0}{8}$



10)  $\frac{3}{5} + \frac{1}{4} = \frac{12}{20} + \frac{5}{20} = \frac{17}{20}$



**ОТВЕТЫ**

1.  $\frac{10}{28}$
2.  $\frac{19}{35}$
3.  $\frac{2}{24}$
4.  $1\frac{33}{56}$
5.  $\frac{4}{30}$
6.  $1\frac{2}{24}$
7.  $\frac{38}{63}$
8.  $1\frac{24}{63}$
9.  $\frac{0}{8}$
10.  $\frac{17}{20}$