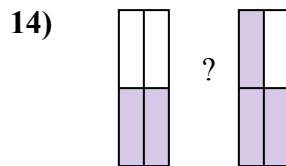
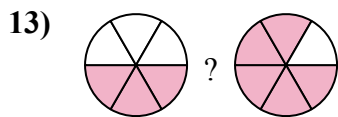
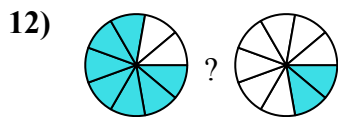
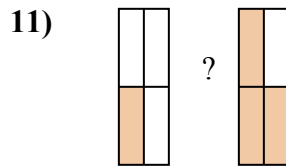
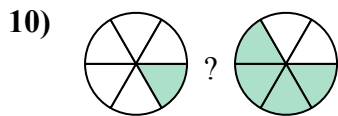
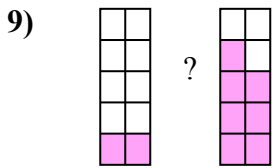
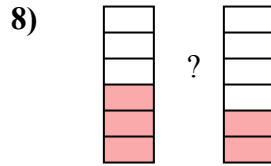

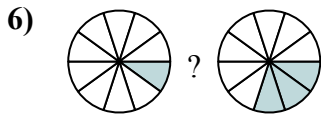
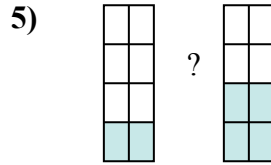
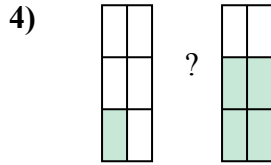
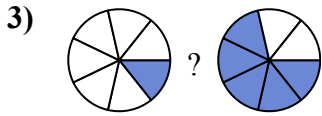
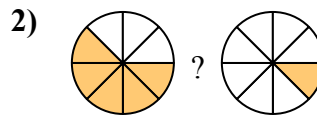

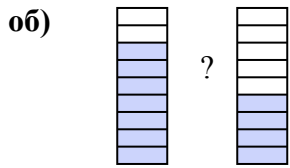




Сравните числители дробей, используя 'больше', 'меньше' или 'равно'.



**ОТВЕТЫ**

об.  $\frac{7}{9}$   $>$   $\frac{4}{9}$

1. \_\_\_\_\_

2. \_\_\_\_\_

3. \_\_\_\_\_

4. \_\_\_\_\_

5. \_\_\_\_\_

6. \_\_\_\_\_

7. \_\_\_\_\_

8. \_\_\_\_\_

9. \_\_\_\_\_

10. \_\_\_\_\_

11. \_\_\_\_\_

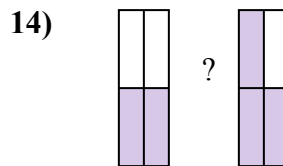
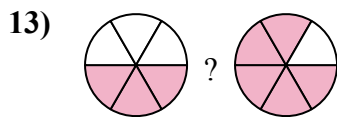
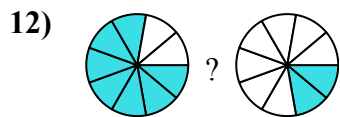
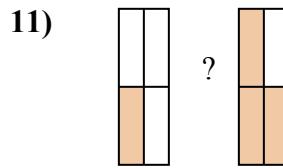
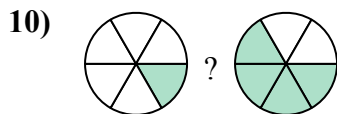
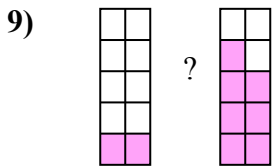
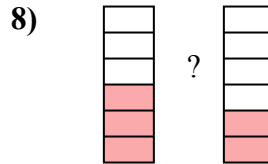

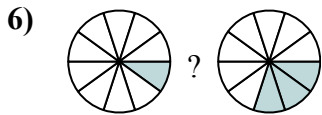
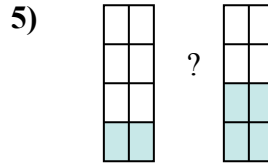
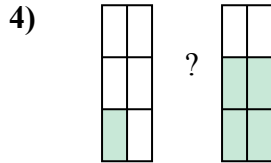
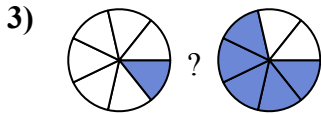
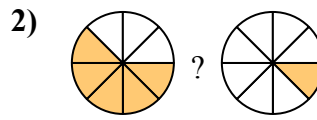

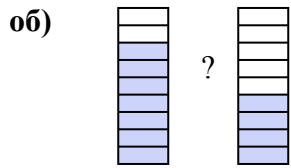
12. \_\_\_\_\_

13. \_\_\_\_\_

14. \_\_\_\_\_



Сравните числители дробей, используя 'больше', 'меньше' или 'равно'.



**ОТВЕТЫ**

об.	$\frac{7}{9}$	>	$\frac{4}{9}$
1.	$\frac{5}{9}$	<	$\frac{8}{9}$
2.	$\frac{5}{8}$	>	$\frac{1}{8}$
3.	$\frac{1}{7}$	<	$\frac{5}{7}$
4.	$\frac{1}{6}$	<	$\frac{4}{6}$
5.	$\frac{2}{8}$	<	$\frac{4}{8}$
6.	$\frac{1}{10}$	<	$\frac{3}{10}$
7.	$\frac{4}{5}$	>	$\frac{3}{5}$
8.	$\frac{3}{6}$	>	$\frac{2}{6}$
9.	$\frac{2}{10}$	<	$\frac{7}{10}$
10.	$\frac{1}{6}$	<	$\frac{4}{6}$
11.	$\frac{1}{4}$	<	$\frac{3}{4}$
12.	$\frac{7}{9}$	>	$\frac{2}{9}$
13.	$\frac{3}{6}$	<	$\frac{5}{6}$
14.	$\frac{2}{4}$	<	$\frac{3}{4}$