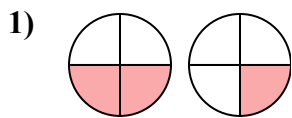




Определите под какой буквой находятся соответствующие дроби.

ОТВЕТЫ

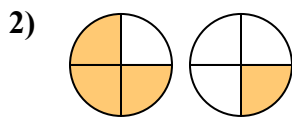


A. $\frac{2}{2} < \frac{1}{3}$

B. $\frac{2}{2} > \frac{1}{3}$

C. $\frac{2}{4} > \frac{1}{4}$

D. $\frac{2}{4} < \frac{1}{4}$

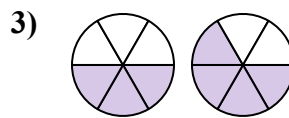


A. $\frac{1}{3} > \frac{3}{1}$

B. $\frac{3}{1} > \frac{1}{3}$

C. $\frac{3}{4} > \frac{1}{4}$

D. $\frac{3}{4} < \frac{1}{4}$

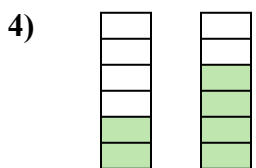


A. $\frac{3}{6} < \frac{4}{6}$

B. $\frac{3}{3} < \frac{2}{4}$

C. $\frac{6}{3} > \frac{6}{4}$

D. $\frac{3}{6} > \frac{4}{6}$

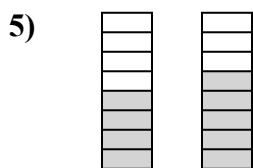


A. $\frac{2}{4} < \frac{4}{2}$

B. $\frac{2}{6} < \frac{4}{6}$

C. $\frac{2}{4} > \frac{4}{2}$

D. $\frac{2}{6} > \frac{4}{6}$

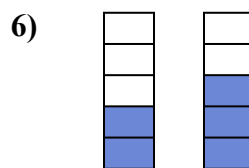


A. $\frac{8}{4} > \frac{8}{5}$

B. $\frac{4}{8} > \frac{5}{8}$

C. $\frac{4}{4} > \frac{5}{3}$

D. $\frac{4}{8} < \frac{5}{8}$

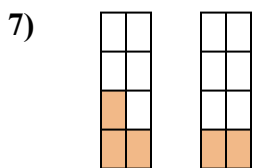


A. $\frac{2}{5} > \frac{3}{5}$

B. $\frac{2}{3} > \frac{3}{2}$

C. $\frac{5}{2} > \frac{5}{3}$

D. $\frac{2}{5} < \frac{3}{5}$

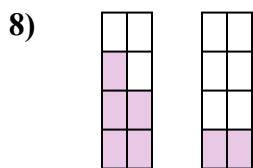


A. $\frac{3}{5} > \frac{2}{6}$

B. $\frac{3}{8} < \frac{2}{8}$

C. $\frac{3}{8} > \frac{2}{8}$

D. $\frac{5}{3} < \frac{6}{2}$

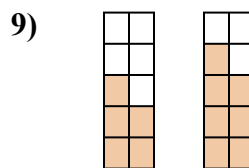


A. $\frac{5}{3} < \frac{2}{6}$

B. $\frac{5}{3} > \frac{2}{6}$

C. $\frac{5}{8} > \frac{2}{8}$

D. $\frac{3}{5} > \frac{6}{2}$



A. $\frac{10}{5} > \frac{10}{7}$

B. $\frac{5}{5} < \frac{7}{3}$

C. $\frac{5}{5} < \frac{3}{7}$

D. $\frac{5}{10} < \frac{7}{10}$

1. _____

2. _____

3. _____

4. _____

5. _____

6. _____

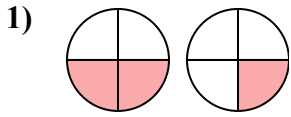
7. _____

8. _____

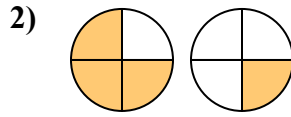
9. _____



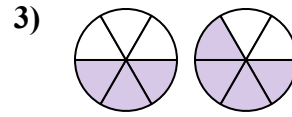
Определите под какой буквой находятся соответствующие дроби.



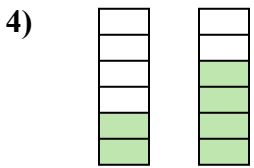
- A. $\frac{2}{2} < \frac{1}{3}$
 B. $\frac{2}{2} > \frac{1}{3}$
 C. $\frac{2}{4} > \frac{1}{4}$
 D. $\frac{2}{4} < \frac{1}{4}$



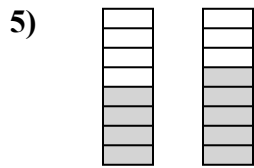
- A. $\frac{1}{3} > \frac{3}{1}$
 B. $\frac{3}{1} > \frac{1}{3}$
 C. $\frac{3}{4} > \frac{1}{4}$
 D. $\frac{3}{4} < \frac{1}{4}$



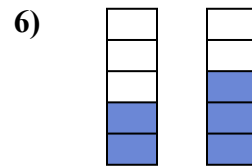
- A. $\frac{3}{6} < \frac{4}{6}$
 B. $\frac{3}{3} < \frac{2}{4}$
 C. $\frac{6}{3} > \frac{6}{4}$
 D. $\frac{3}{6} > \frac{4}{6}$



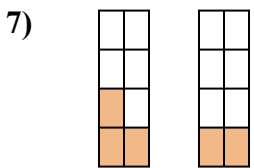
- A. $\frac{2}{4} < \frac{4}{2}$
 B. $\frac{2}{6} < \frac{4}{6}$
 C. $\frac{2}{4} > \frac{4}{2}$
 D. $\frac{2}{6} > \frac{4}{6}$



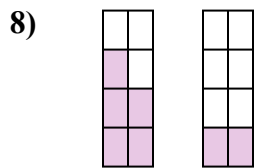
- A. $\frac{8}{4} > \frac{8}{5}$
 B. $\frac{4}{8} > \frac{5}{8}$
 C. $\frac{4}{4} > \frac{5}{3}$
 D. $\frac{4}{8} < \frac{5}{8}$



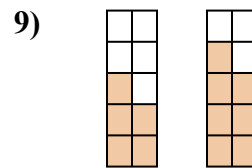
- A. $\frac{2}{5} > \frac{3}{5}$
 B. $\frac{2}{3} > \frac{3}{2}$
 C. $\frac{5}{2} > \frac{5}{3}$
 D. $\frac{2}{5} < \frac{3}{5}$



- A. $\frac{3}{5} > \frac{2}{6}$
 B. $\frac{3}{8} < \frac{2}{8}$
 C. $\frac{3}{8} > \frac{2}{8}$
 D. $\frac{5}{3} < \frac{6}{2}$



- A. $\frac{5}{3} < \frac{2}{6}$
 B. $\frac{5}{3} > \frac{2}{6}$
 C. $\frac{5}{8} > \frac{2}{8}$
 D. $\frac{3}{5} > \frac{6}{2}$



- A. $\frac{10}{5} > \frac{10}{7}$
 B. $\frac{5}{5} < \frac{7}{3}$
 C. $\frac{5}{5} < \frac{3}{7}$
 D. $\frac{5}{10} < \frac{7}{10}$

ОТВЕТЫ

1. **C**
 2. **C**
 3. **A**
 4. **B**
 5. **D**
 6. **D**
 7. **C**
 8. **C**
 9. **D**