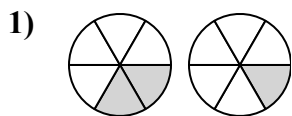




Определите под какой буквой находятся соответствующие дроби.

**ОТВЕТЫ**

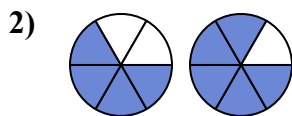


A.  $\frac{4}{2} < \frac{5}{1}$

B.  $\frac{2}{6} > \frac{1}{6}$

C.  $\frac{6}{2} > \frac{6}{1}$

D.  $\frac{4}{2} > \frac{5}{1}$

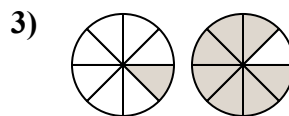


A.  $\frac{4}{6} < \frac{5}{6}$

B.  $\frac{2}{4} > \frac{1}{5}$

C.  $\frac{2}{4} < \frac{1}{5}$

D.  $\frac{6}{4} > \frac{6}{5}$

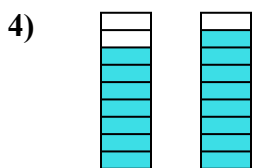


A.  $\frac{7}{1} > \frac{1}{7}$

B.  $\frac{7}{1} < \frac{1}{7}$

C.  $\frac{1}{7} > \frac{7}{1}$

D.  $\frac{1}{8} < \frac{7}{8}$

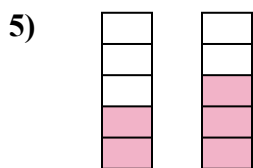


A.  $\frac{7}{9} < \frac{8}{9}$

B.  $\frac{9}{7} > \frac{9}{8}$

C.  $\frac{2}{7} > \frac{1}{8}$

D.  $\frac{2}{7} < \frac{1}{8}$

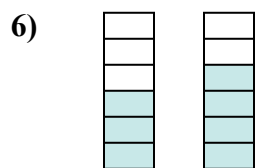


A.  $\frac{3}{2} < \frac{2}{3}$

B.  $\frac{3}{2} > \frac{2}{3}$

C.  $\frac{2}{5} < \frac{3}{5}$

D.  $\frac{2}{3} > \frac{3}{2}$

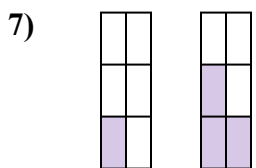


A.  $\frac{3}{3} > \frac{4}{2}$

B.  $\frac{3}{6} < \frac{4}{6}$

C.  $\frac{3}{3} < \frac{4}{2}$

D.  $\frac{3}{3} < \frac{2}{4}$

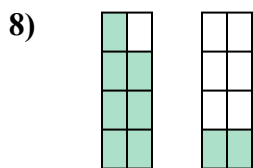


A.  $\frac{6}{1} > \frac{6}{3}$

B.  $\frac{5}{1} > \frac{3}{3}$

C.  $\frac{1}{6} < \frac{3}{6}$

D.  $\frac{1}{6} > \frac{3}{6}$

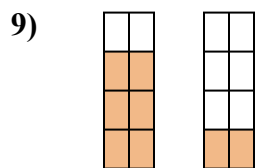


A.  $\frac{1}{7} > \frac{6}{2}$

B.  $\frac{7}{1} > \frac{2}{6}$

C.  $\frac{1}{7} < \frac{6}{2}$

D.  $\frac{7}{8} > \frac{2}{8}$



A.  $\frac{6}{8} > \frac{2}{8}$

B.  $\frac{6}{2} < \frac{2}{6}$

C.  $\frac{2}{6} < \frac{6}{2}$

D.  $\frac{2}{6} > \frac{6}{2}$

1. \_\_\_\_\_

2. \_\_\_\_\_

3. \_\_\_\_\_

4. \_\_\_\_\_

5. \_\_\_\_\_

6. \_\_\_\_\_

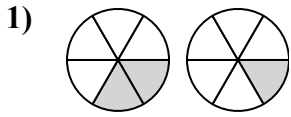
7. \_\_\_\_\_

8. \_\_\_\_\_

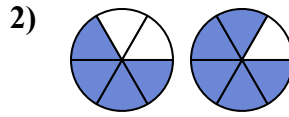
9. \_\_\_\_\_



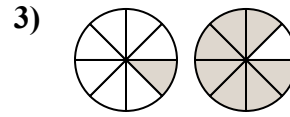
Определите под какой буквой находятся соответствующие дроби.



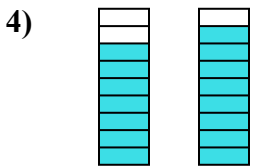
- A.  $\frac{4}{2} < \frac{5}{1}$   
 B.  $\frac{2}{6} > \frac{1}{6}$   
 C.  $\frac{6}{2} > \frac{6}{1}$   
 D.  $\frac{4}{2} > \frac{5}{1}$



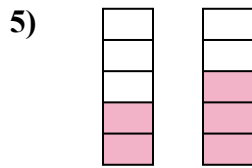
- A.  $\frac{4}{6} < \frac{5}{6}$   
 B.  $\frac{2}{4} > \frac{1}{5}$   
 C.  $\frac{2}{4} < \frac{1}{5}$   
 D.  $\frac{6}{4} > \frac{6}{5}$



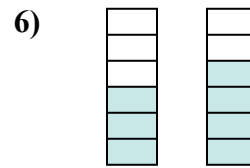
- A.  $\frac{7}{1} > \frac{1}{7}$   
 B.  $\frac{7}{1} < \frac{1}{7}$   
 C.  $\frac{1}{7} > \frac{7}{1}$   
 D.  $\frac{1}{8} < \frac{7}{8}$



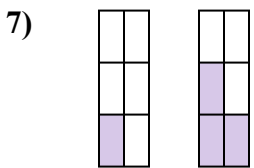
- A.  $\frac{7}{9} < \frac{8}{9}$   
 B.  $\frac{9}{7} > \frac{9}{8}$   
 C.  $\frac{2}{7} > \frac{1}{8}$   
 D.  $\frac{2}{7} < \frac{1}{8}$



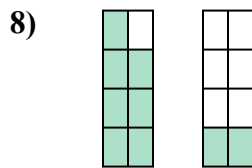
- A.  $\frac{3}{2} < \frac{2}{3}$   
 B.  $\frac{3}{2} > \frac{2}{3}$   
 C.  $\frac{2}{5} < \frac{3}{5}$   
 D.  $\frac{2}{3} > \frac{3}{2}$



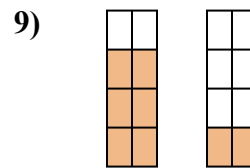
- A.  $\frac{3}{3} > \frac{4}{2}$   
 B.  $\frac{3}{6} < \frac{4}{6}$   
 C.  $\frac{3}{3} < \frac{4}{2}$   
 D.  $\frac{3}{3} < \frac{2}{4}$



- A.  $\frac{6}{1} > \frac{6}{3}$   
 B.  $\frac{5}{1} > \frac{3}{3}$   
 C.  $\frac{1}{6} < \frac{3}{6}$   
 D.  $\frac{1}{6} > \frac{3}{6}$



- A.  $\frac{1}{7} > \frac{6}{2}$   
 B.  $\frac{7}{1} > \frac{2}{6}$   
 C.  $\frac{1}{7} < \frac{6}{2}$   
 D.  $\frac{7}{8} > \frac{2}{8}$



- A.  $\frac{6}{8} > \frac{2}{8}$   
 B.  $\frac{6}{2} < \frac{2}{6}$   
 C.  $\frac{2}{6} < \frac{6}{2}$   
 D.  $\frac{2}{6} > \frac{6}{2}$

**ОТВЕТЫ**

1. В  
 2. А  
 3. Д  
 4. А  
 5. С  
 6. В  
 7. С  
 8. Д  
 9. А