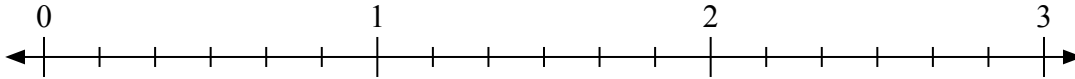




Используйте числовую прямую для решения задачи.

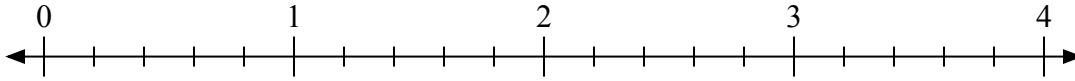
Ответы

1) $3:\frac{3}{6}$



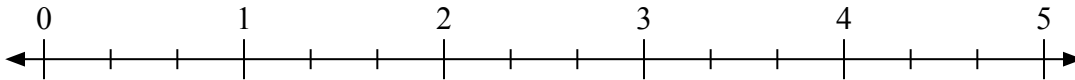
1. _____

2) $2:\frac{4}{5}$



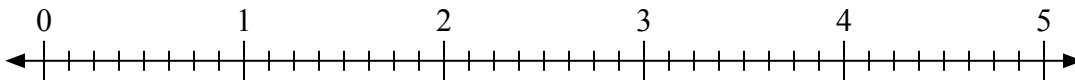
2. _____

3) $5:\frac{1}{3}$



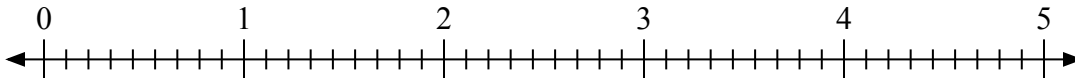
3. _____

4) $3:\frac{5}{8}$



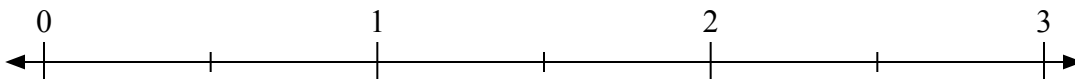
4. _____

5) $3:\frac{7}{9}$



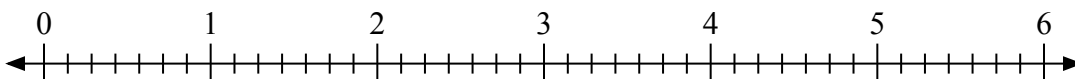
5. _____

6) $3:\frac{1}{2}$



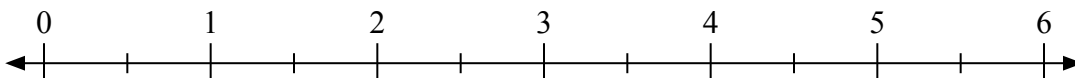
6. _____

7) $5:\frac{3}{7}$



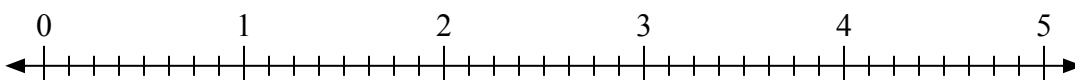
7. _____

8) $5:\frac{1}{2}$



8. _____

9) $4:\frac{4}{8}$

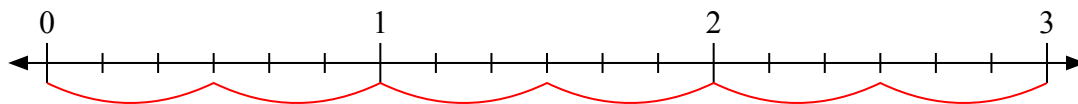


9. _____

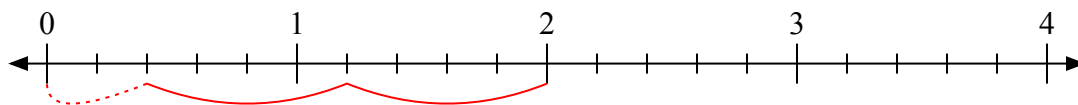


Используйте числовую прямую для решения задачи.

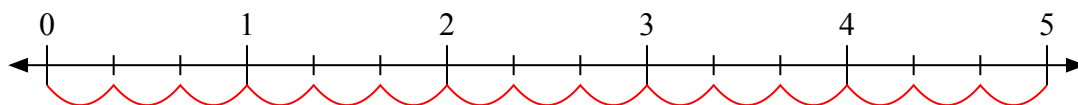
1) $3:\frac{3}{6}$



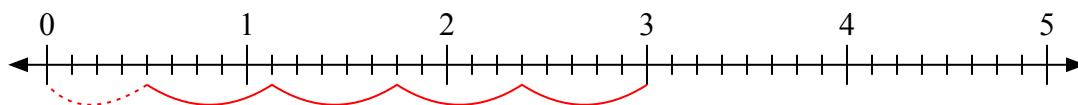
2) $2:\frac{4}{5}$



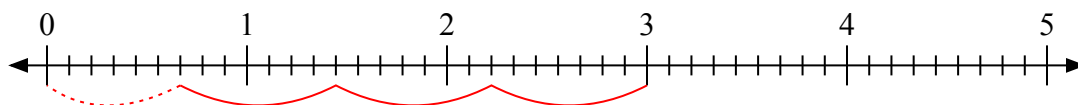
3) $5:\frac{1}{3}$



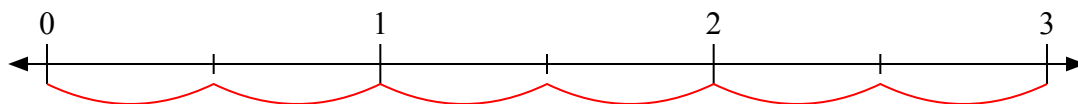
4) $3:\frac{5}{8}$



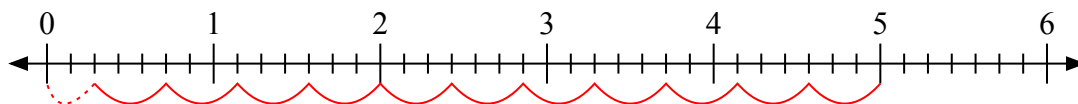
5) $3:\frac{7}{9}$



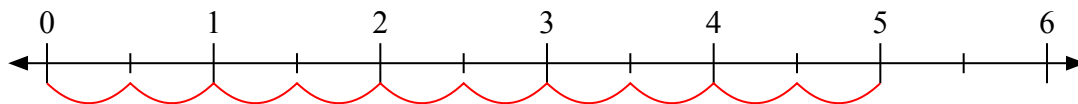
6) $3:\frac{1}{2}$



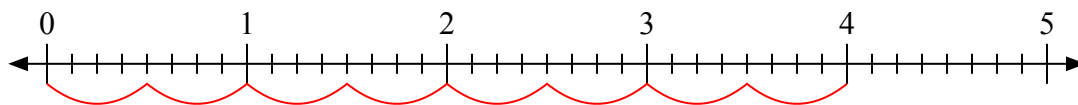
7) $5:\frac{3}{7}$



8) $5:\frac{1}{2}$



9) $4:\frac{4}{8}$



Ответы

1. 6

2. $2\frac{2}{4}$

3. 15

4. $4\frac{4}{5}$

5. $3\frac{6}{7}$

6. 6

7. $11\frac{2}{3}$

8. 10

9. 8