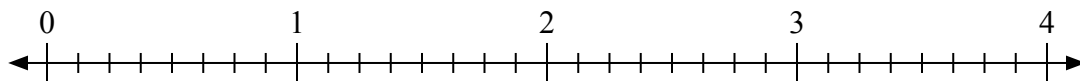




Используйте числовую прямую для решения задачи.

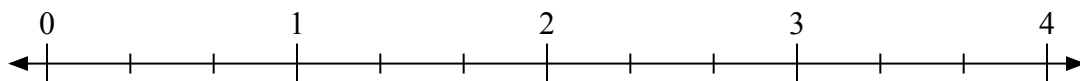
Ответы

1) $2:\frac{1}{8}$



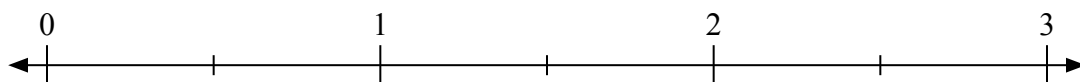
1. _____

2) $2:\frac{2}{3}$



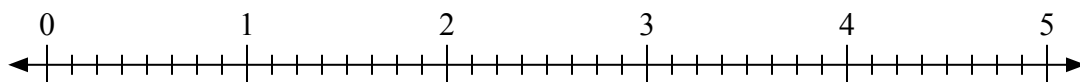
2. _____

3) $2:\frac{1}{2}$



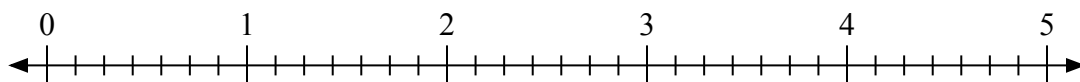
3. _____

4) $3:\frac{5}{8}$



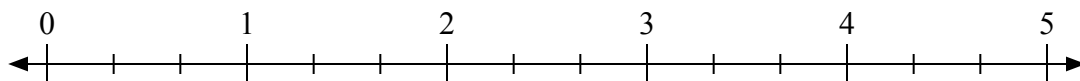
4. _____

5) $2:\frac{6}{7}$



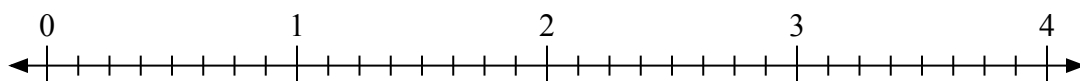
5. _____

6) $4:\frac{1}{3}$



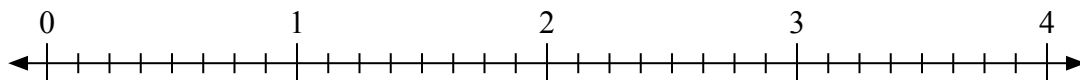
6. _____

7) $2:\frac{3}{8}$



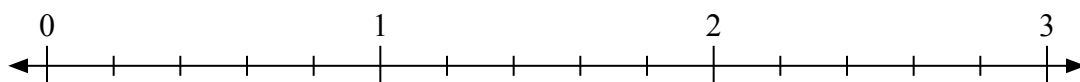
7. _____

8) $2:\frac{2}{8}$



8. _____

9) $2:\frac{3}{5}$

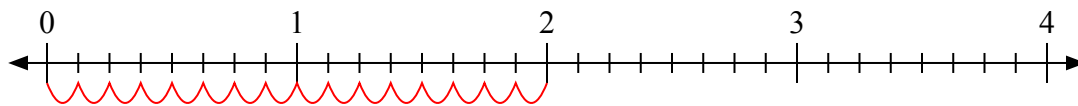


9. _____

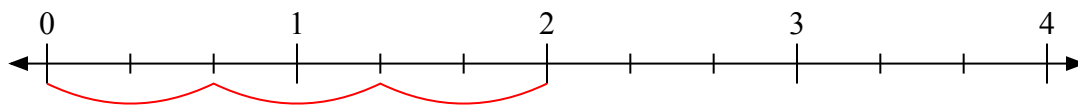


Используйте числовую прямую для решения задачи.

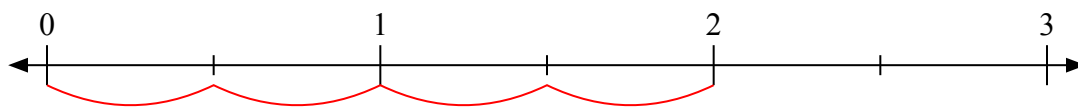
1) $2 : \frac{1}{8}$



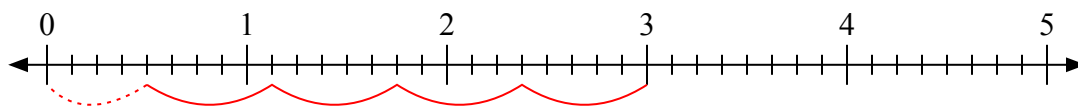
2) $2 : \frac{2}{3}$



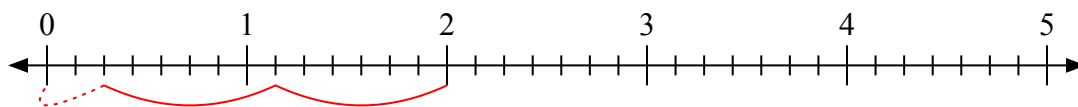
3) $2 : \frac{1}{2}$



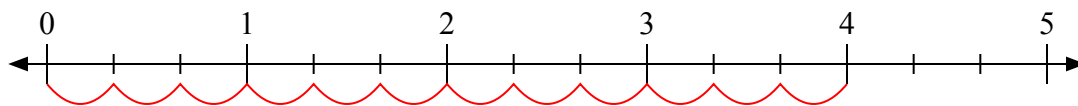
4) $3 : \frac{5}{8}$



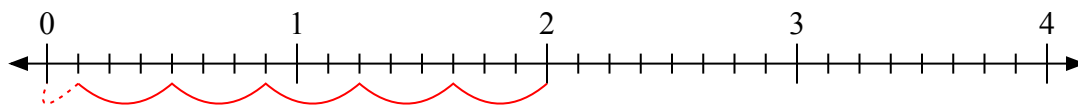
5) $2 : \frac{6}{7}$



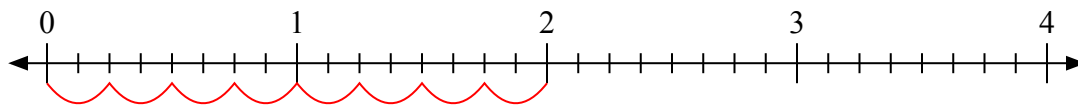
6) $4 : \frac{1}{3}$



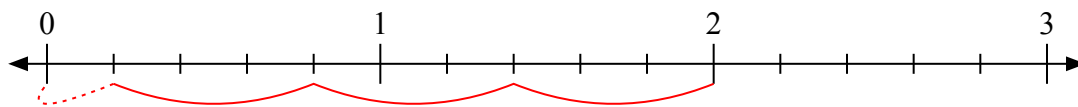
7) $2 : \frac{3}{8}$



8) $2 : \frac{2}{8}$



9) $2 : \frac{3}{5}$



Ответы

1. 16

2. 3

3. 4

4. $4 \frac{4}{5}$

5. $2 \frac{2}{6}$

6. 12

7. $5 \frac{1}{3}$

8. 8

9. $3 \frac{1}{3}$