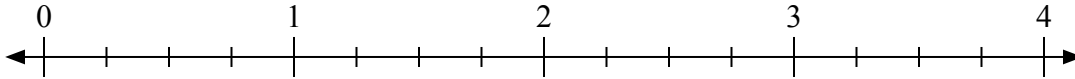




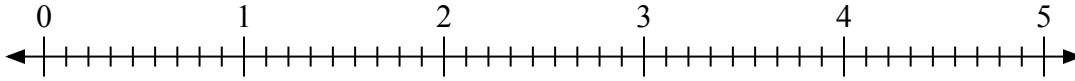
Используйте числовую прямую для решения задачи.

Ответы

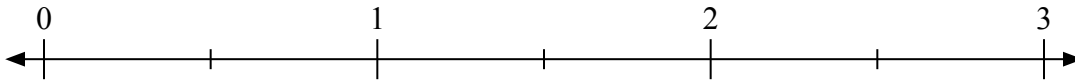
1) $4:\frac{3}{4}$



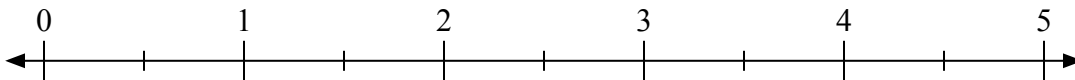
2) $2:\frac{2}{9}$



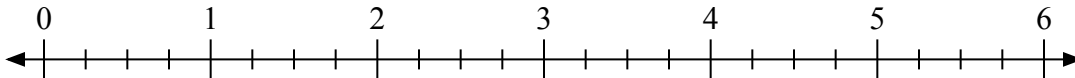
3) $3:\frac{1}{2}$



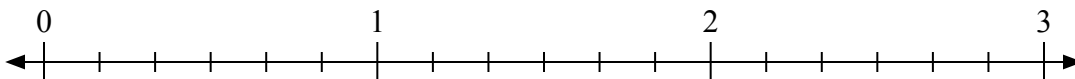
4) $5:\frac{1}{2}$



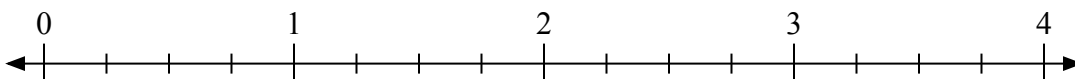
5) $4:\frac{2}{4}$



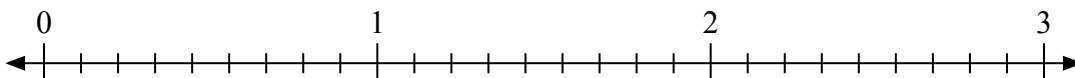
6) $2:\frac{1}{6}$



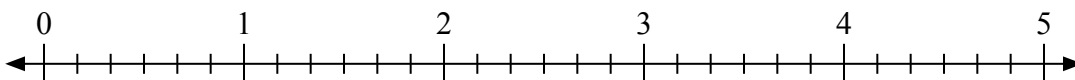
7) $3:\frac{3}{4}$



8) $2:\frac{7}{9}$



9) $3:\frac{2}{6}$



1. _____

2. _____

3. _____

4. _____

5. _____

6. _____

7. _____

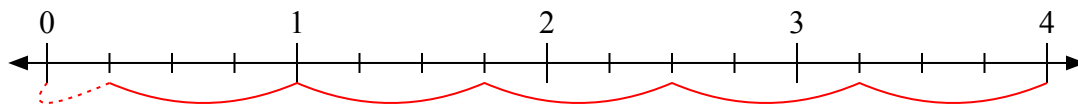
8. _____

9. _____

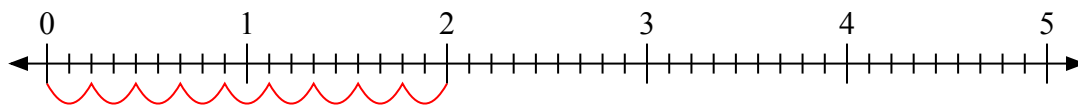


Используйте числовую прямую для решения задачи.

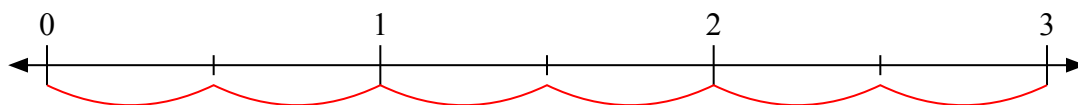
1) $4 : \frac{3}{4}$



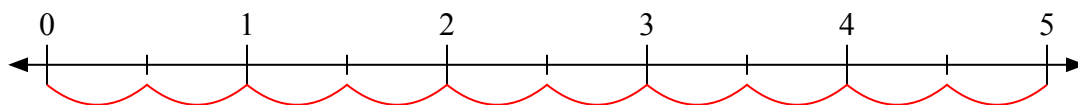
2) $2 : \frac{2}{9}$



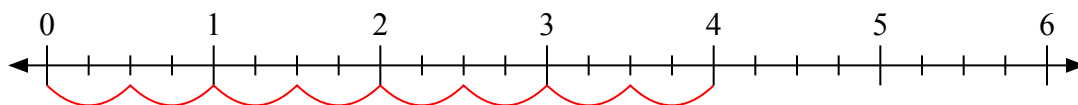
3) $3 : \frac{1}{2}$



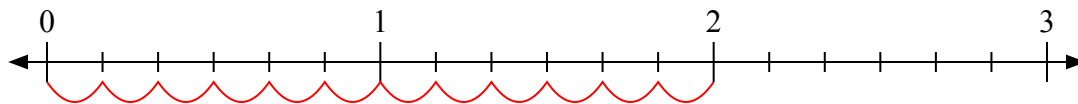
4) $5 : \frac{1}{2}$



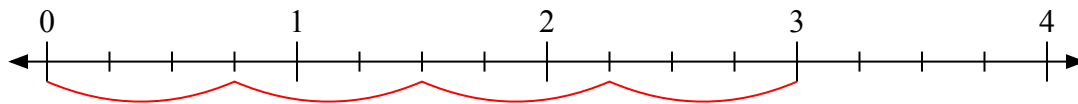
5) $4 : \frac{2}{4}$



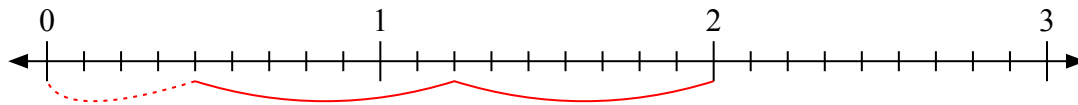
6) $2 : \frac{1}{6}$



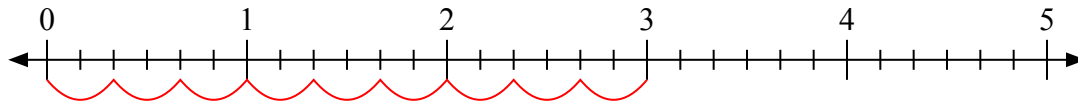
7) $3 : \frac{3}{4}$



8) $2 : \frac{7}{9}$



9) $3 : \frac{2}{6}$



ОТВЕТЫ

1. 5 $\frac{1}{3}$

2. 9

3. 6

4. 10

5. 8

6. 12

7. 4

8. 2 $\frac{4}{7}$

9. 9