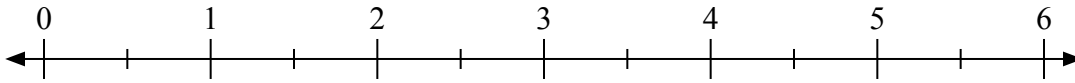




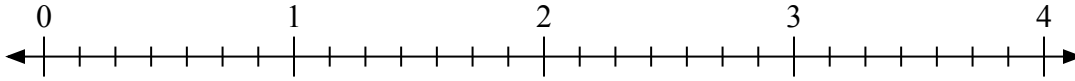
Используйте числовую прямую для решения задачи.

Отвѣты

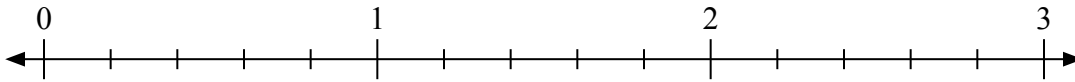
1) $5 : \frac{1}{2}$



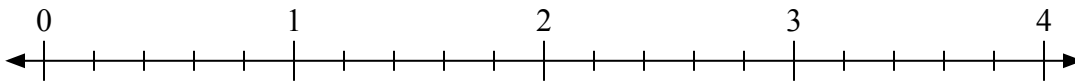
2) $4 : \frac{4}{7}$



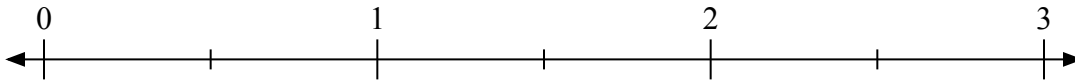
3) $3 : \frac{1}{5}$



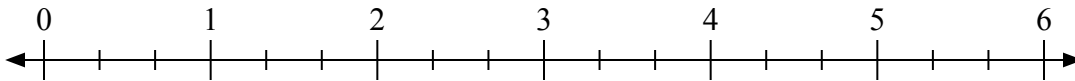
4) $2 : \frac{2}{5}$



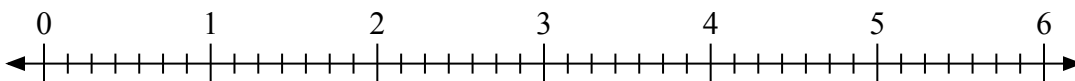
5) $2 : \frac{1}{2}$



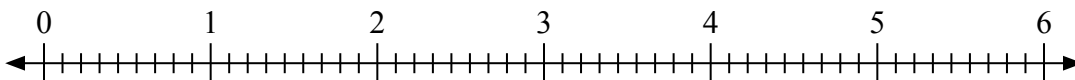
6) $3 : \frac{2}{3}$



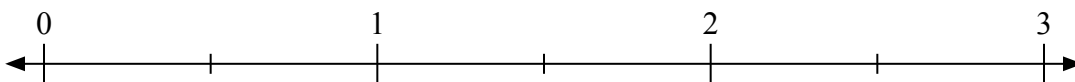
7) $2 : \frac{2}{7}$



8) $2 : \frac{4}{9}$



9) $3 : \frac{1}{2}$

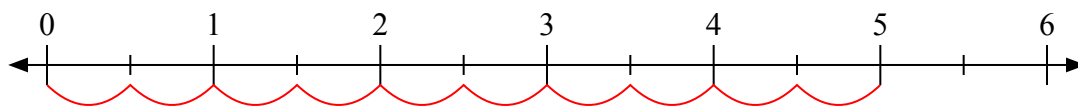


1. _____
2. _____
3. _____
4. _____
5. _____
6. _____
7. _____
8. _____
9. _____

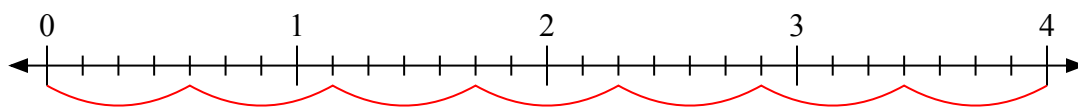


Используйте числовую прямую для решения задачи.

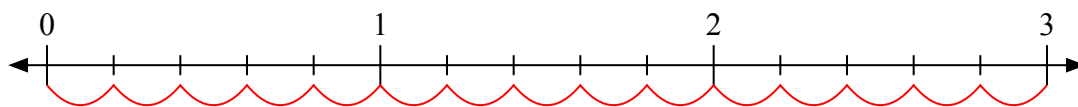
1) $5 : \frac{1}{2}$



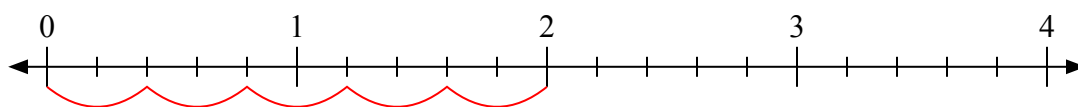
2) $4 : \frac{4}{7}$



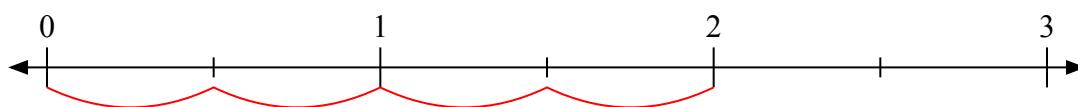
3) $3 : \frac{1}{5}$



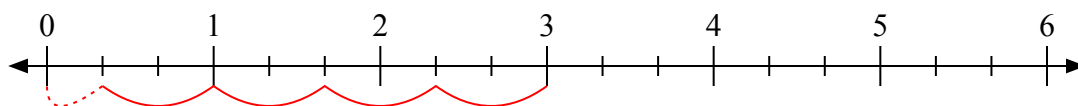
4) $2 : \frac{2}{5}$



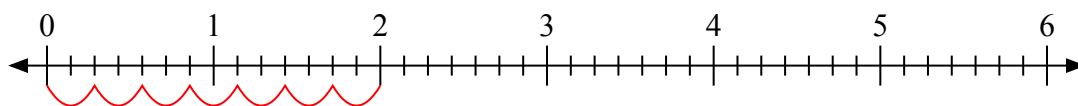
5) $2 : \frac{1}{2}$



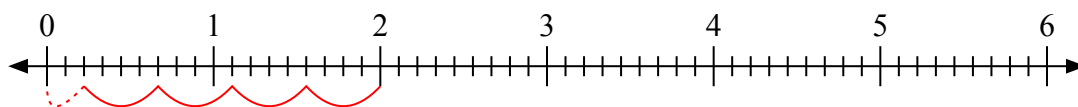
6) $3 : \frac{2}{3}$



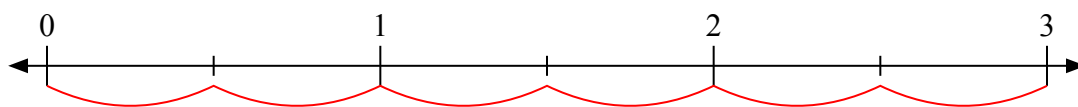
7) $2 : \frac{2}{7}$



8) $2 : \frac{4}{9}$



9) $3 : \frac{1}{2}$



Отвѣты

1. 10

2. 7

3. 15

4. 5

5. 4

6. 4 1/2

7. 7

8. 4 2/4

9. 6