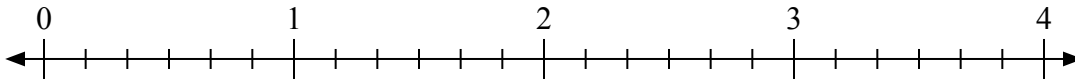




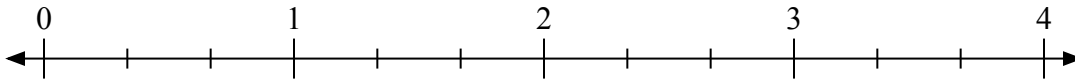
Используйте числовую прямую для решения задачи.

**Ответы**

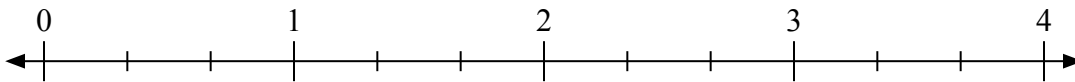
1)  $3:\frac{2}{6}$



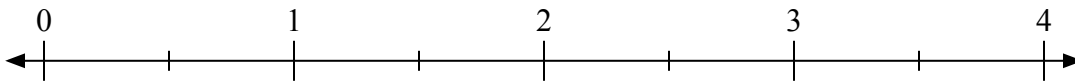
2)  $2:\frac{2}{3}$



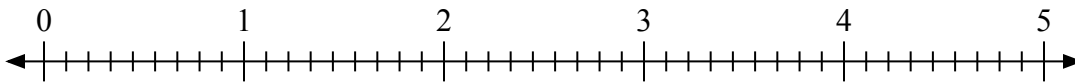
3)  $4:\frac{1}{3}$



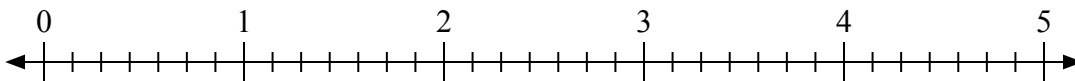
4)  $2:\frac{1}{2}$



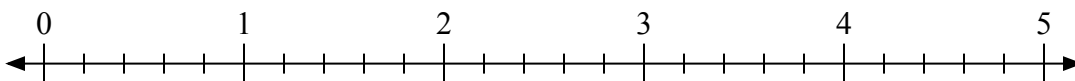
5)  $3:\frac{5}{9}$



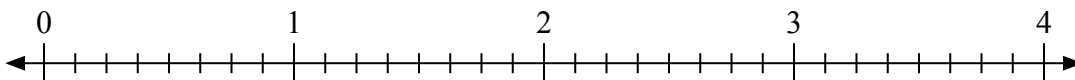
6)  $4:\frac{1}{7}$



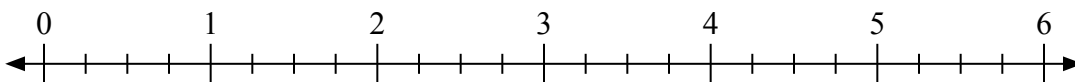
7)  $4:\frac{2}{5}$



8)  $4:\frac{3}{8}$



9)  $2:\frac{1}{4}$



1. \_\_\_\_\_

2. \_\_\_\_\_

3. \_\_\_\_\_

4. \_\_\_\_\_

5. \_\_\_\_\_

6. \_\_\_\_\_

7. \_\_\_\_\_

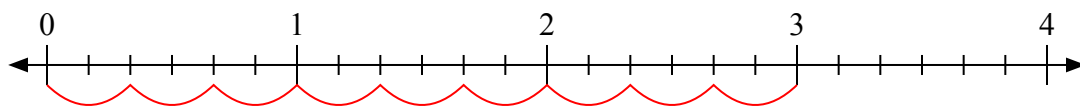
8. \_\_\_\_\_

9. \_\_\_\_\_

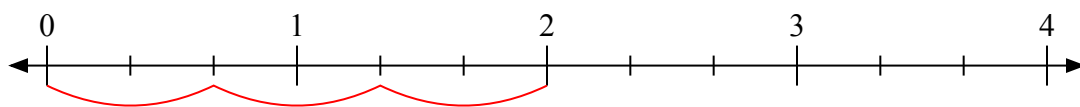


Используйте числовую прямую для решения задачи.

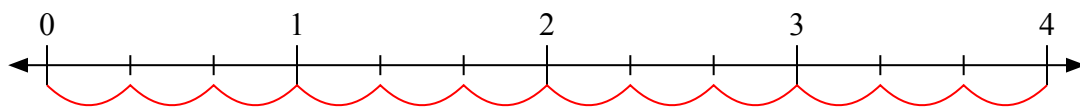
1)  $3:\frac{2}{6}$



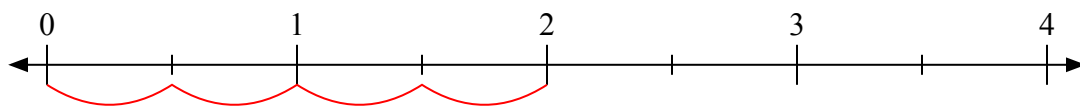
2)  $2:\frac{2}{3}$



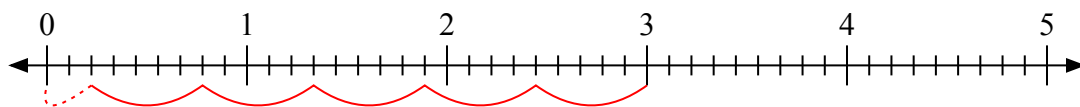
3)  $4:\frac{1}{3}$



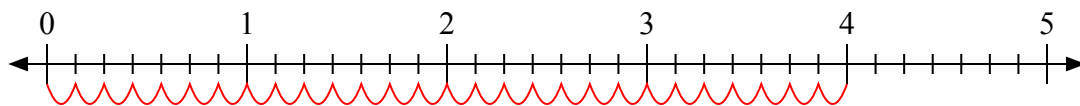
4)  $2:\frac{1}{2}$



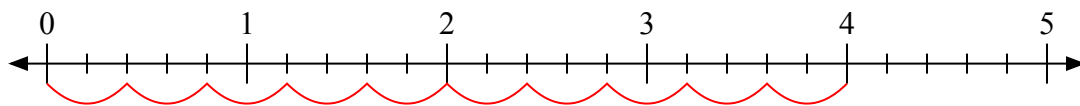
5)  $3:\frac{5}{9}$



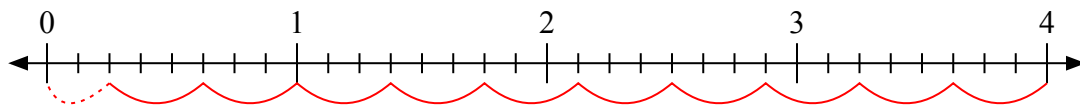
6)  $4:\frac{1}{7}$



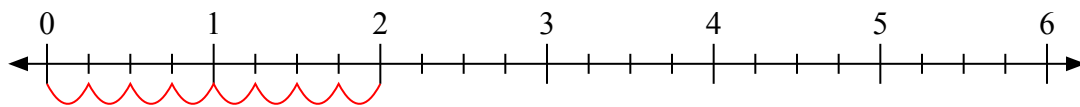
7)  $4:\frac{2}{5}$



8)  $4:\frac{3}{8}$



9)  $2:\frac{1}{4}$



**Ответы**

1. 9

2. 3

3. 12

4. 4

5.  $5\frac{2}{5}$

6. 28

7. 10

8.  $10\frac{2}{3}$

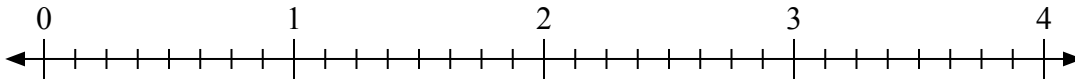
9. 8



Используйте числовую прямую для решения задачи.

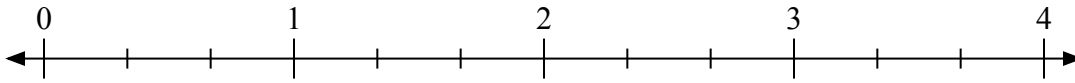
**Отвѣты**

1)  $2:\frac{1}{8}$



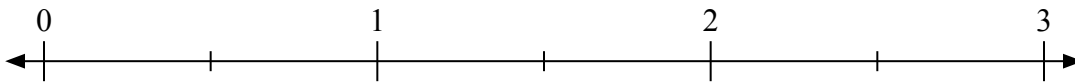
1. \_\_\_\_\_

2)  $2:\frac{2}{3}$



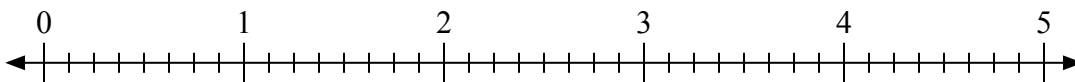
2. \_\_\_\_\_

3)  $2:\frac{1}{2}$



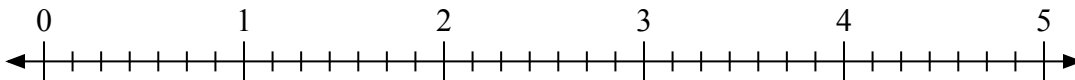
3. \_\_\_\_\_

4)  $3:\frac{5}{8}$



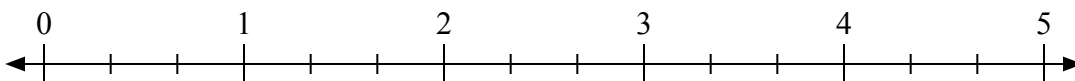
4. \_\_\_\_\_

5)  $2:\frac{6}{7}$



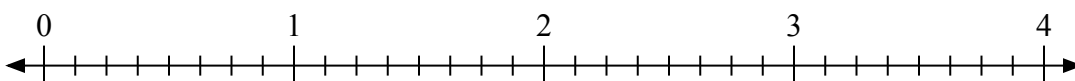
5. \_\_\_\_\_

6)  $4:\frac{1}{3}$



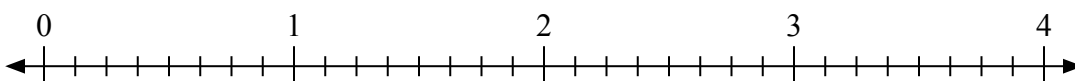
6. \_\_\_\_\_

7)  $2:\frac{3}{8}$



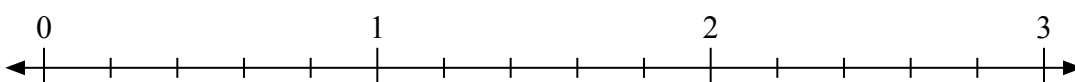
7. \_\_\_\_\_

8)  $2:\frac{2}{8}$



8. \_\_\_\_\_

9)  $2:\frac{3}{5}$

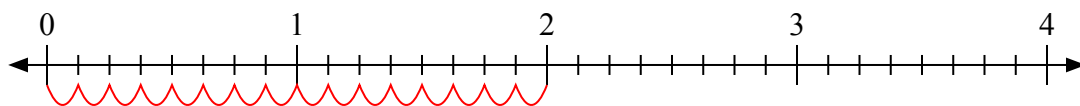


9. \_\_\_\_\_

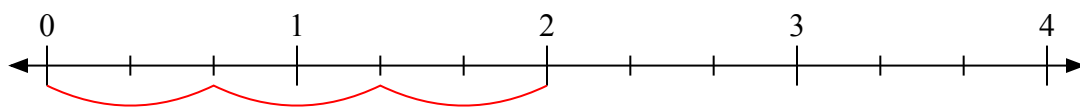


Используйте числовую прямую для решения задачи.

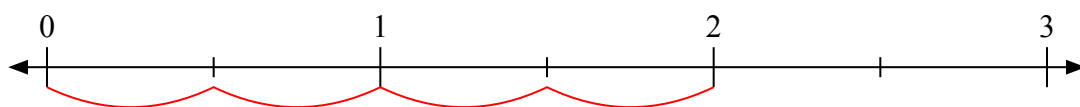
1)  $2 : \frac{1}{8}$



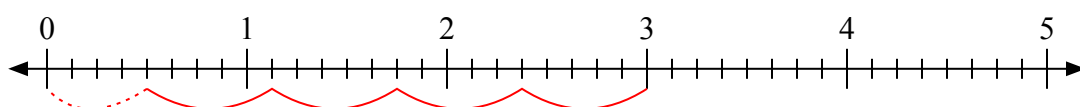
2)  $2 : \frac{2}{3}$



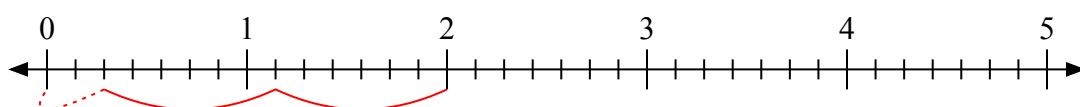
3)  $2 : \frac{1}{2}$



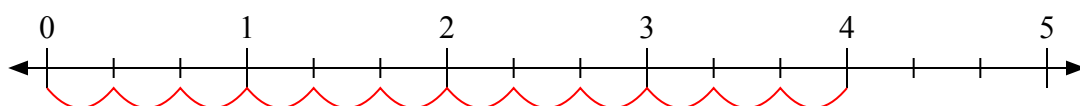
4)  $3 : \frac{5}{8}$



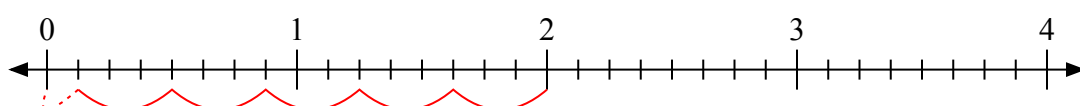
5)  $2 : \frac{6}{7}$



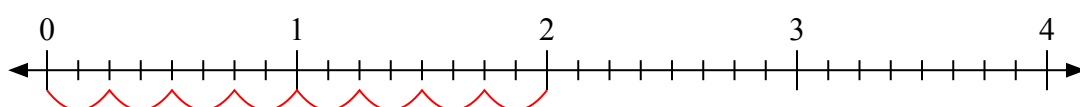
6)  $4 : \frac{1}{3}$



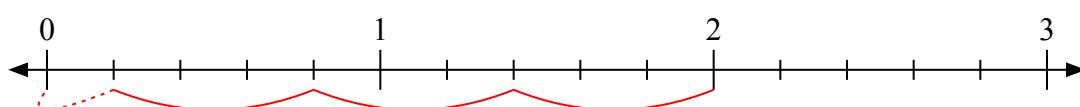
7)  $2 : \frac{3}{8}$



8)  $2 : \frac{2}{8}$



9)  $2 : \frac{3}{5}$



**Ответы**

1. 16

2. 3

3. 4

4.  $4 \frac{4}{5}$

5.  $2 \frac{2}{6}$

6. 12

7.  $5 \frac{1}{3}$

8. 8

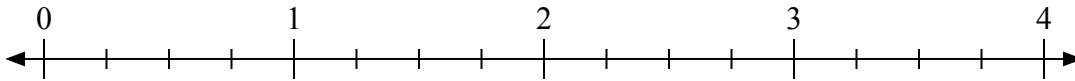
9.  $3 \frac{1}{3}$



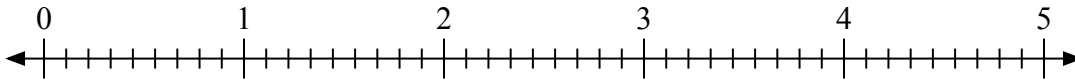
Используйте числовую прямую для решения задачи.

Ответы

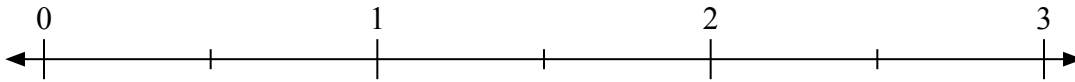
1)  $4:\frac{3}{4}$



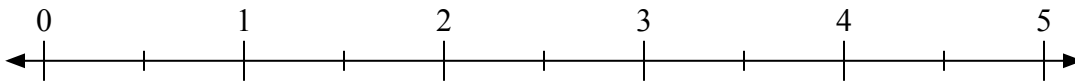
2)  $2:\frac{2}{9}$



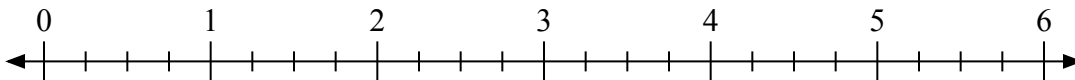
3)  $3:\frac{1}{2}$



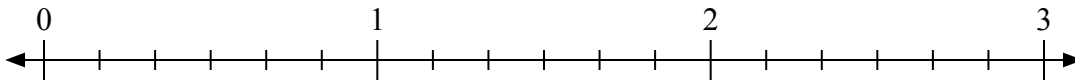
4)  $5:\frac{1}{2}$



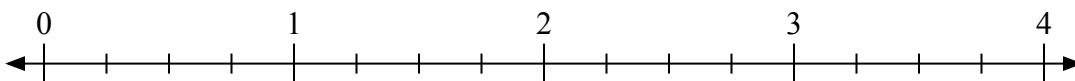
5)  $4:\frac{2}{4}$



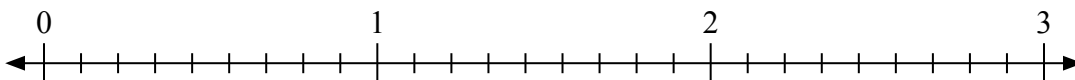
6)  $2:\frac{1}{6}$



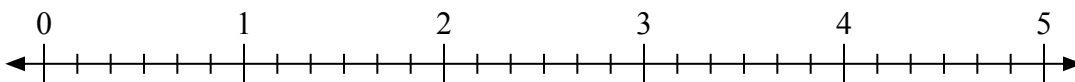
7)  $3:\frac{3}{4}$



8)  $2:\frac{7}{9}$



9)  $3:\frac{2}{6}$

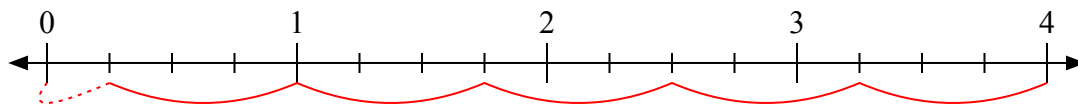


1. \_\_\_\_\_
2. \_\_\_\_\_
3. \_\_\_\_\_
4. \_\_\_\_\_
5. \_\_\_\_\_
6. \_\_\_\_\_
7. \_\_\_\_\_
8. \_\_\_\_\_
9. \_\_\_\_\_

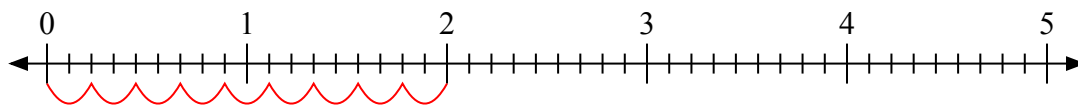


Используйте числовую прямую для решения задачи.

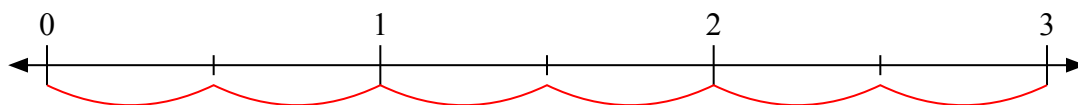
1)  $4 : \frac{3}{4}$



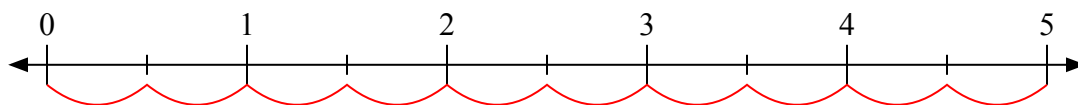
2)  $2 : \frac{2}{9}$



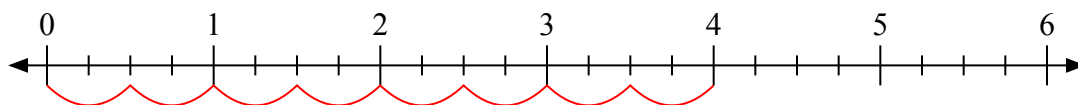
3)  $3 : \frac{1}{2}$



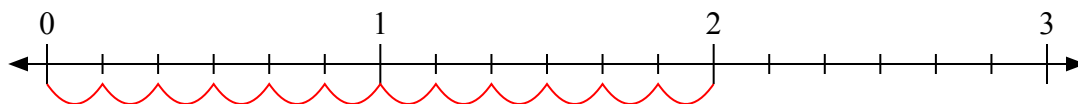
4)  $5 : \frac{1}{2}$



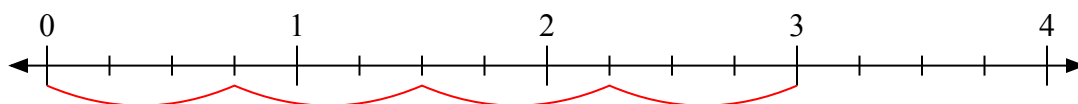
5)  $4 : \frac{2}{4}$



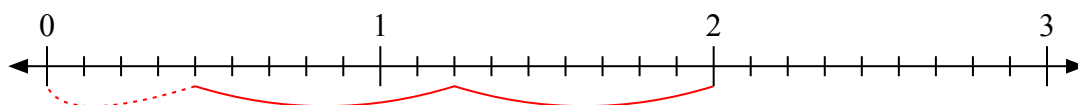
6)  $2 : \frac{1}{6}$



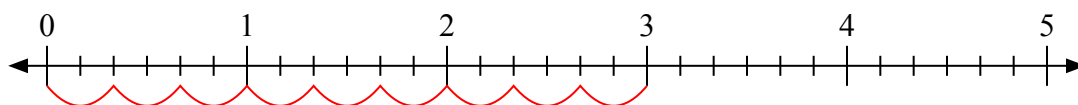
7)  $3 : \frac{3}{4}$



8)  $2 : \frac{7}{9}$



9)  $3 : \frac{2}{6}$



**Ответы**

1. 5  $\frac{1}{3}$

2. 9

3. 6

4. 10

5. 8

6. 12

7. 4

8. 2  $\frac{4}{7}$

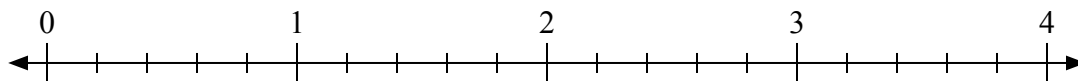
9. 9



Используйте числовую прямую для решения задачи.

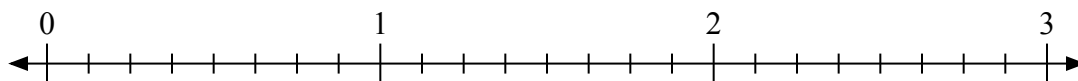
**Отвѣты**

1)  $3:\frac{3}{5}$



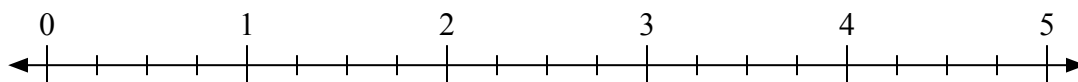
1. \_\_\_\_\_

2)  $3:\frac{7}{8}$



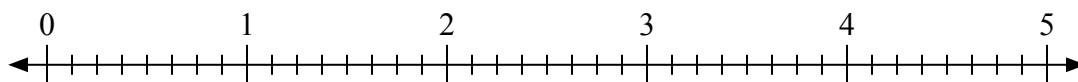
2. \_\_\_\_\_

3)  $2:\frac{1}{4}$



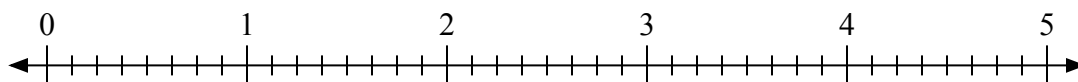
3. \_\_\_\_\_

4)  $4:\frac{6}{8}$




4. \_\_\_\_\_

5)  $2:\frac{7}{8}$



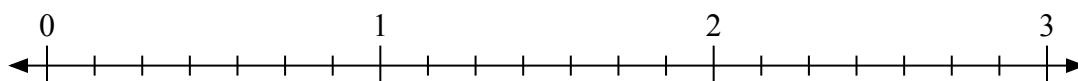
5. \_\_\_\_\_

6)  $2:\frac{1}{3}$



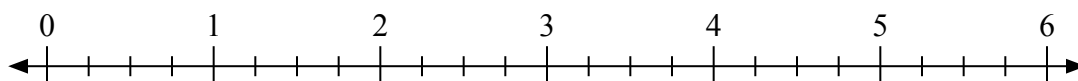
6. \_\_\_\_\_

7)  $3:\frac{4}{7}$



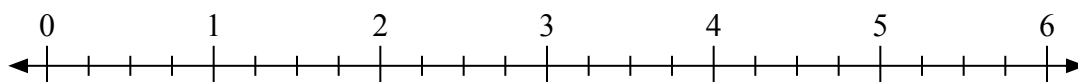
7. \_\_\_\_\_

8)  $5:\frac{3}{4}$



8. \_\_\_\_\_

9)  $6:\frac{3}{4}$

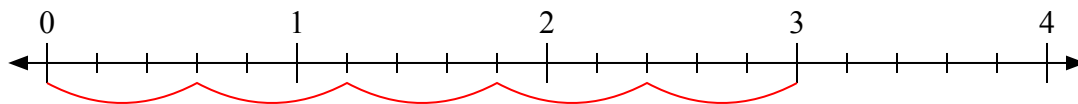


9. \_\_\_\_\_

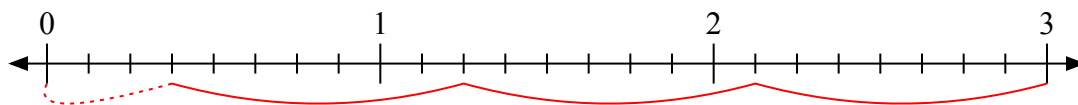


Используйте числовую прямую для решения задачи.

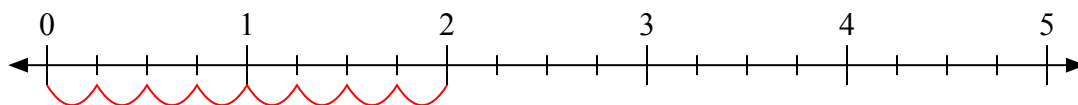
1)  $3 : \frac{3}{5}$



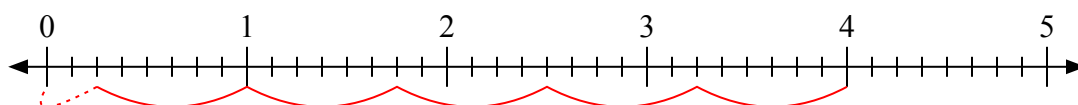
2)  $3 : \frac{7}{8}$



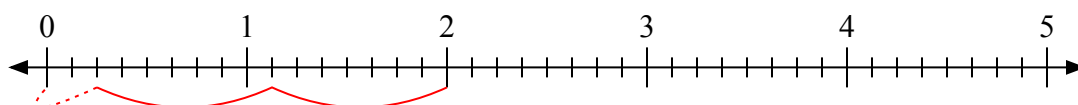
3)  $2 : \frac{1}{4}$



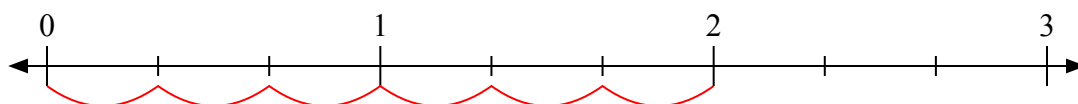
4)  $4 : \frac{6}{8}$



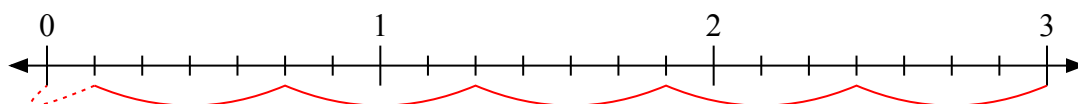
5)  $2 : \frac{7}{8}$



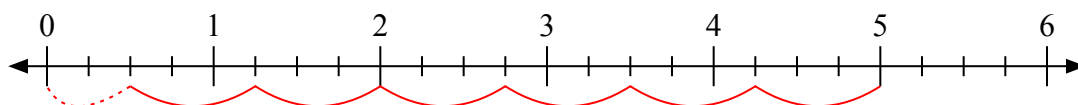
6)  $2 : \frac{1}{3}$



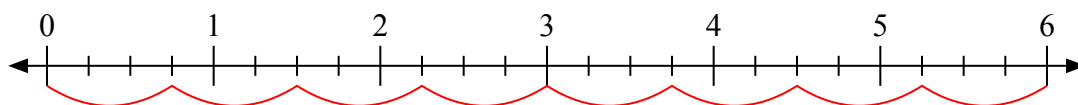
7)  $3 : \frac{4}{7}$



8)  $5 : \frac{3}{4}$



9)  $6 : \frac{3}{4}$



**Ответы**

1. 5

2.  $3 \frac{3}{7}$

3. 8

4.  $5 \frac{2}{6}$

5.  $2 \frac{2}{7}$

6. 6

7.  $5 \frac{1}{4}$

8.  $6 \frac{2}{3}$

9. 8

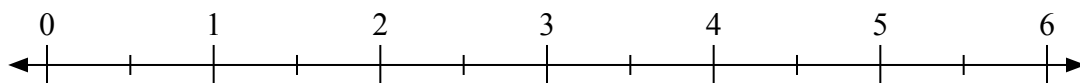




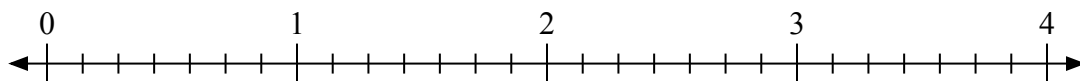
Используйте числовую прямую для решения задачи.

**Ответы**

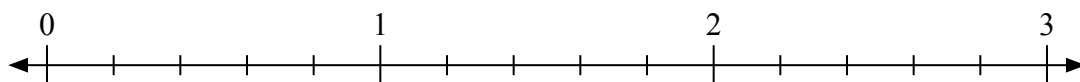
1)  $5:\frac{1}{2}$



2)  $4:\frac{4}{7}$



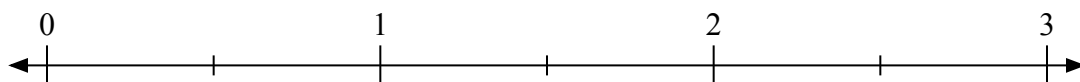
3)  $3:\frac{1}{5}$



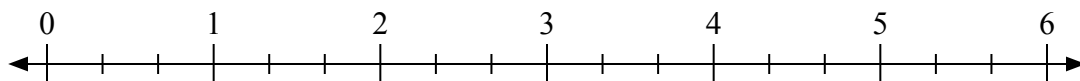
4)  $2:\frac{2}{5}$



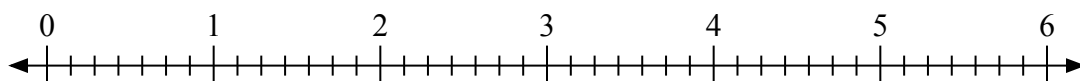
5)  $2:\frac{1}{2}$



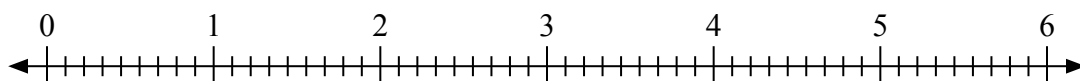
6)  $3:\frac{2}{3}$



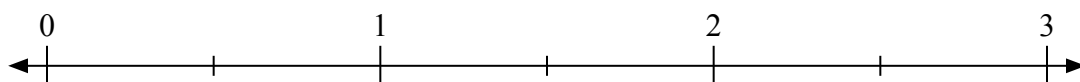
7)  $2:\frac{2}{7}$



8)  $2:\frac{4}{9}$



9)  $3:\frac{1}{2}$



1. \_\_\_\_\_

2. \_\_\_\_\_

3. \_\_\_\_\_

4. \_\_\_\_\_

5. \_\_\_\_\_

6. \_\_\_\_\_

7. \_\_\_\_\_

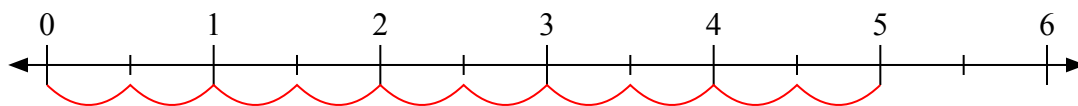
8. \_\_\_\_\_

9. \_\_\_\_\_

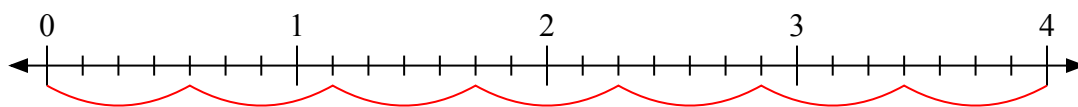


Используйте числовую прямую для решения задачи.

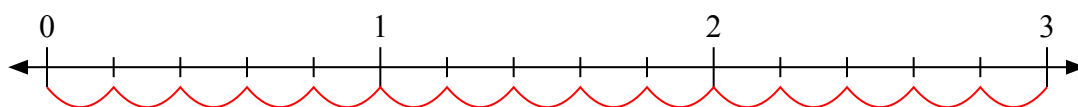
1)  $5 : \frac{1}{2}$



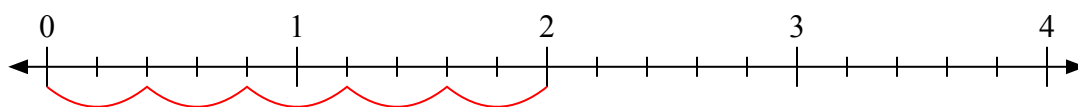
2)  $4 : \frac{4}{7}$



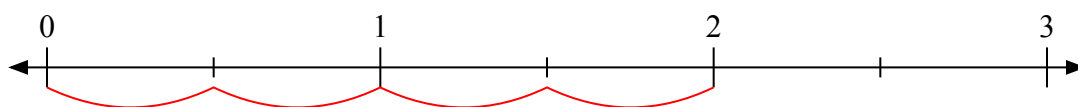
3)  $3 : \frac{1}{5}$



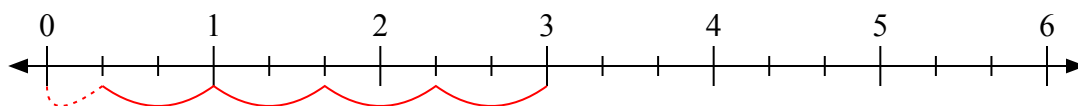
4)  $2 : \frac{2}{5}$



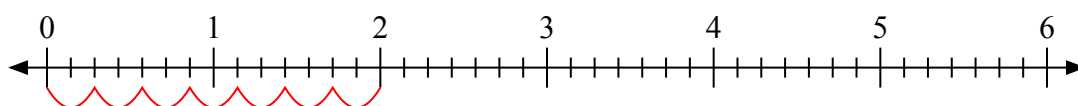
5)  $2 : \frac{1}{2}$



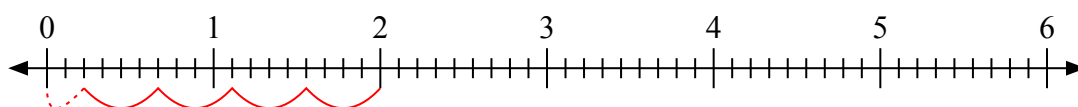
6)  $3 : \frac{2}{3}$



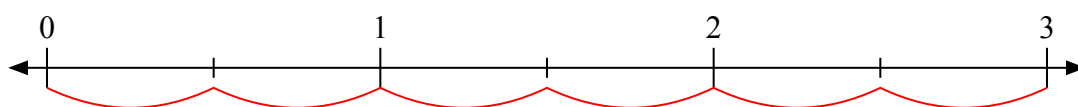
7)  $2 : \frac{2}{7}$



8)  $2 : \frac{4}{9}$



9)  $3 : \frac{1}{2}$



**Отвѣты**

1. 10

2. 7

3. 15

4. 5

5. 4

6.  $4 \frac{1}{2}$

7. 7

8.  $4 \frac{2}{4}$

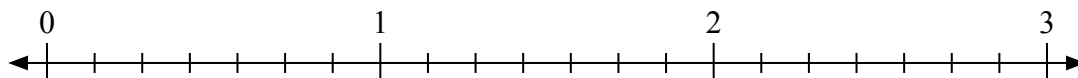
9. 6



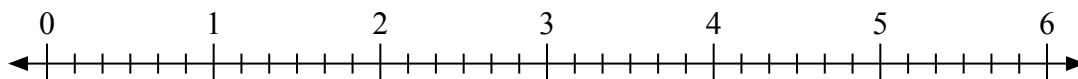
Используйте числовую прямую для решения задачи.

**Ответы**

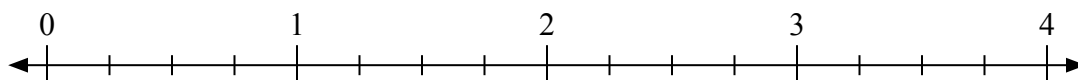
1)  $2:\frac{3}{7}$



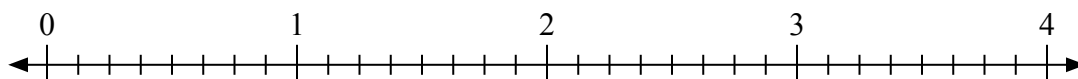
2)  $6:\frac{3}{6}$



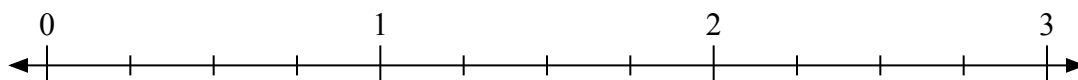
3)  $2:\frac{1}{4}$



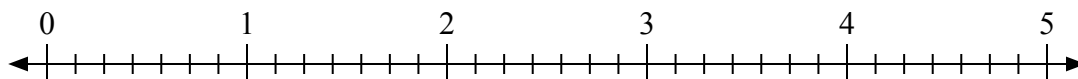
4)  $2:\frac{2}{8}$



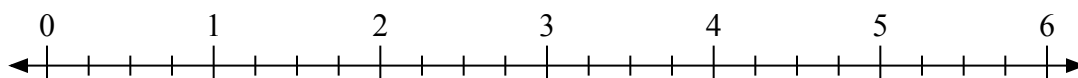
5)  $3:\frac{2}{4}$



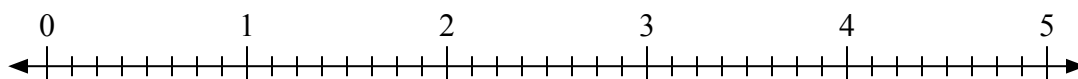
6)  $5:\frac{4}{7}$



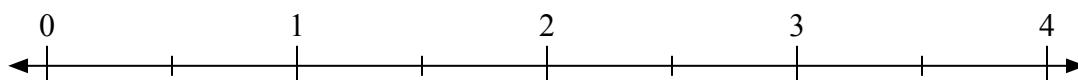
7)  $6:\frac{1}{4}$



8)  $5:\frac{5}{8}$



9)  $3:\frac{1}{2}$



1. \_\_\_\_\_

2. \_\_\_\_\_

3. \_\_\_\_\_

4. \_\_\_\_\_

5. \_\_\_\_\_

6. \_\_\_\_\_

7. \_\_\_\_\_

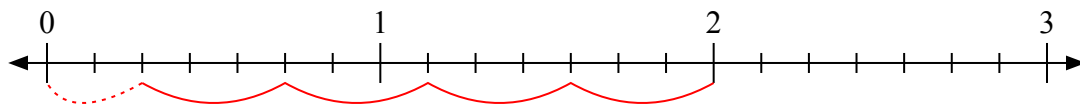
8. \_\_\_\_\_

9. \_\_\_\_\_

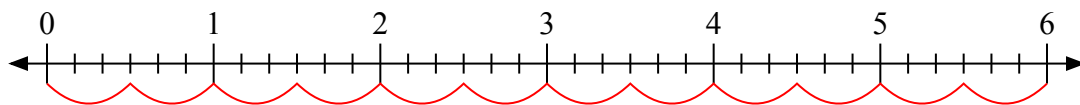


Используйте числовую прямую для решения задачи.

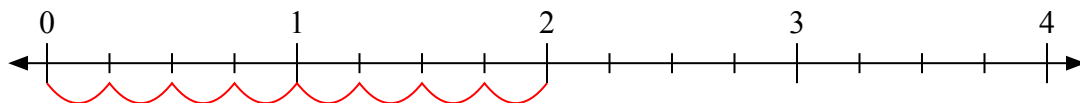
1)  $2 \frac{3}{7}$



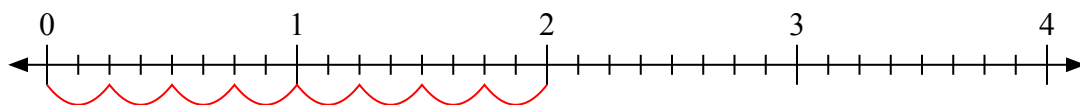
2)  $6 \frac{3}{6}$



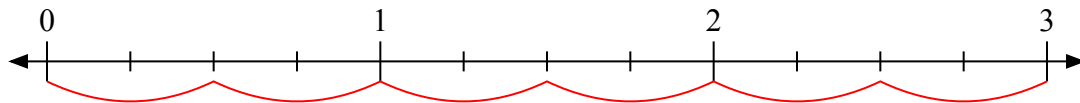
3)  $2 \frac{1}{4}$



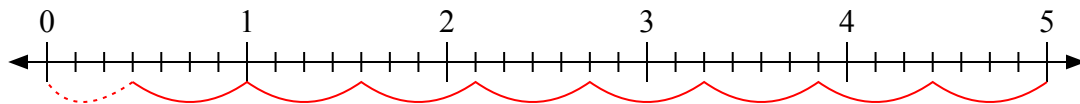
4)  $2 \frac{2}{8}$



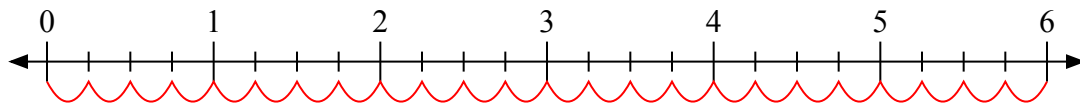
5)  $3 \frac{2}{4}$



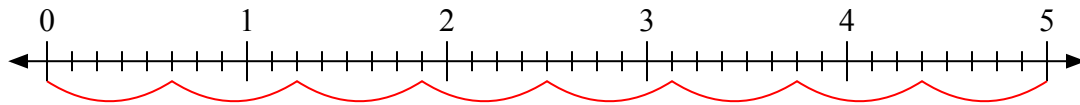
6)  $5 \frac{4}{7}$



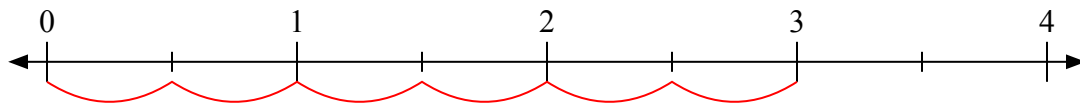
7)  $6 \frac{1}{4}$



8)  $5 \frac{5}{8}$



9)  $3 \frac{1}{2}$



**Отвѣты**

1. 4  $\frac{2}{3}$

2. 12

3. 8

4. 8

5. 6

6. 8  $\frac{3}{4}$

7. 24

8. 8

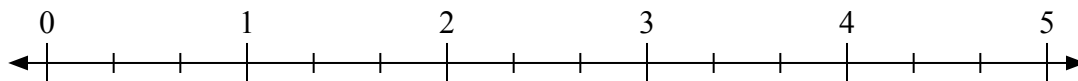
9. 6



Используйте числовую прямую для решения задачи.


Ответы

1)  $2:\frac{2}{3}$



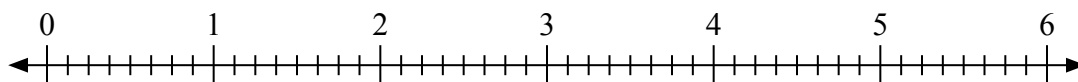
1. \_\_\_\_\_

2)  $2:\frac{1}{3}$



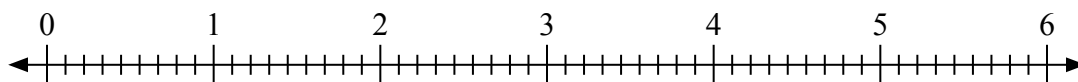
2. \_\_\_\_\_

3)  $4:\frac{3}{8}$



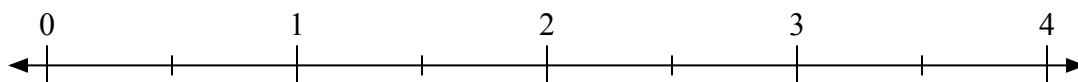
3. \_\_\_\_\_

4)  $6:\frac{8}{9}$



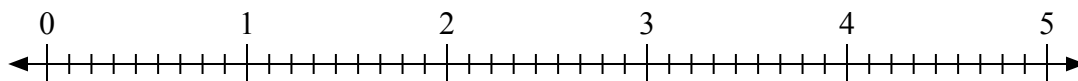
4. \_\_\_\_\_

5)  $2:\frac{1}{2}$



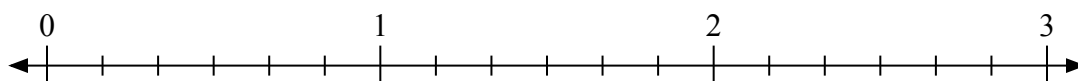
5. \_\_\_\_\_

6)  $3:\frac{8}{9}$



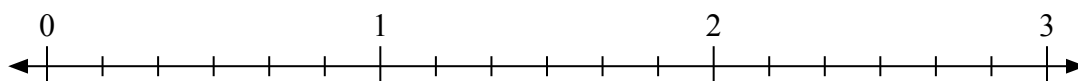
6. \_\_\_\_\_

7)  $2:\frac{3}{6}$



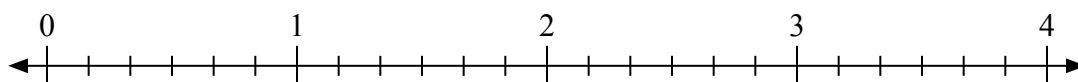
7. \_\_\_\_\_

8)  $2:\frac{4}{6}$



8. \_\_\_\_\_

9)  $3:\frac{5}{6}$

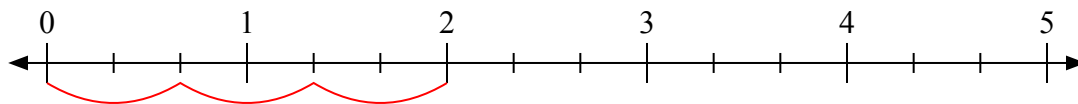


9. \_\_\_\_\_

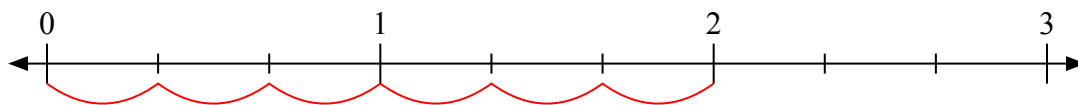


Используйте числовую прямую для решения задачи.

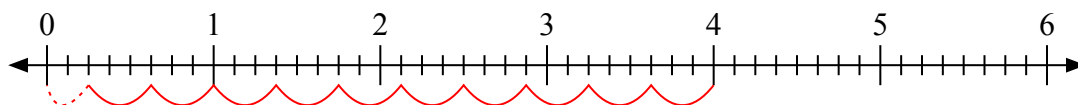
1)  $2:\frac{2}{3}$



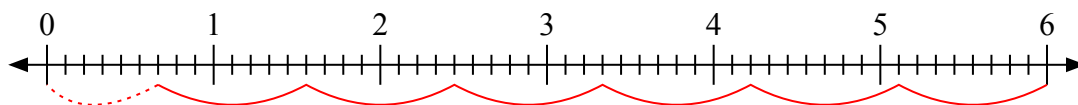
2)  $2:\frac{1}{3}$



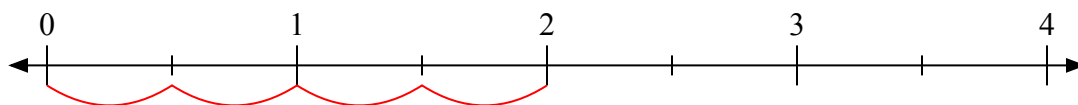
3)  $4:\frac{3}{8}$



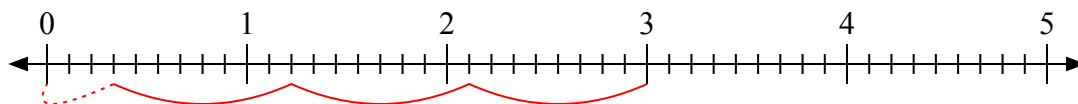
4)  $6:\frac{8}{9}$



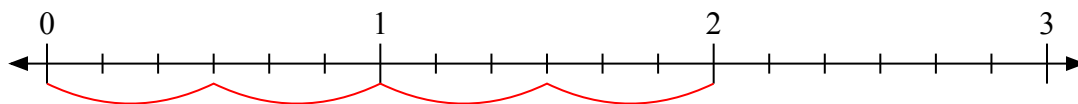
5)  $2:\frac{1}{2}$



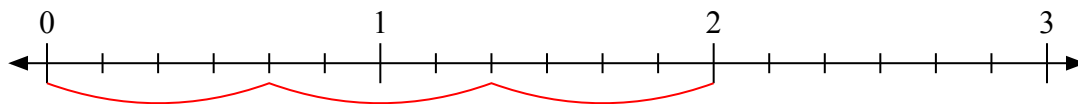
6)  $3:\frac{8}{9}$



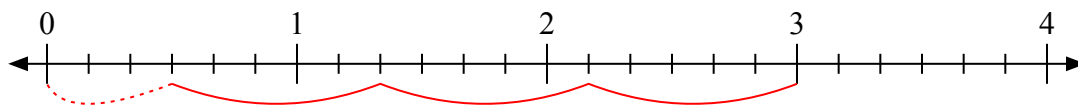
7)  $2:\frac{3}{6}$



8)  $2:\frac{4}{6}$



9)  $3:\frac{5}{6}$



**Ответы**

1. 3

2. 6

3.  $10\frac{2}{3}$

4.  $6\frac{6}{8}$

5. 4

6.  $3\frac{3}{8}$

7. 4

8. 3

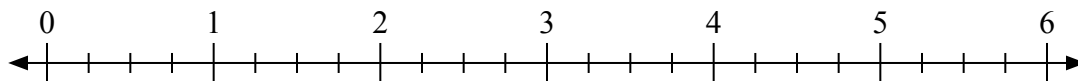
9.  $3\frac{3}{5}$



Используйте числовую прямую для решения задачи.

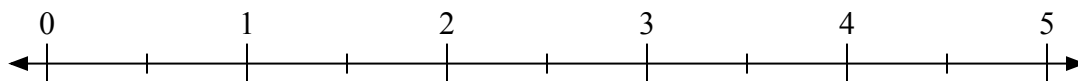
**Отвѣты**

1)  $6 : \frac{3}{4}$



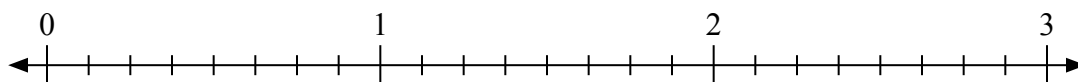
1. \_\_\_\_\_

2)  $5 : \frac{1}{2}$



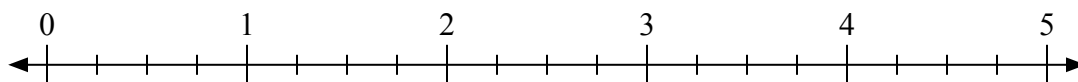
2. \_\_\_\_\_

3)  $3 : \frac{6}{8}$



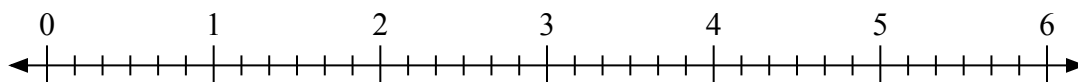
3. \_\_\_\_\_

4)  $3 : \frac{3}{4}$



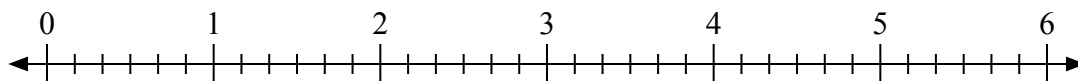
4. \_\_\_\_\_

5)  $6 : \frac{3}{6}$



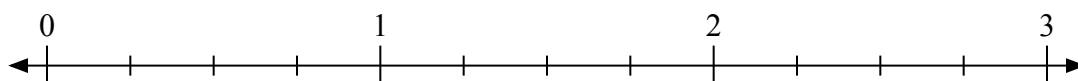
5. \_\_\_\_\_

6)  $5 : \frac{1}{6}$




6. \_\_\_\_\_

7)  $3 : \frac{1}{4}$



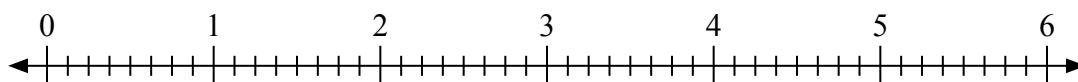
7. \_\_\_\_\_

8)  $3 : \frac{2}{3}$



8. \_\_\_\_\_

9)  $3 : \frac{3}{8}$

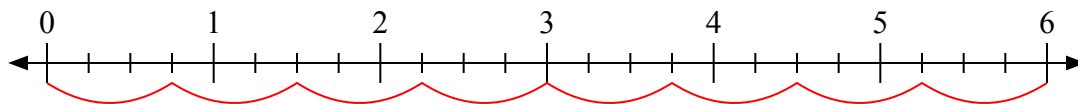


9. \_\_\_\_\_

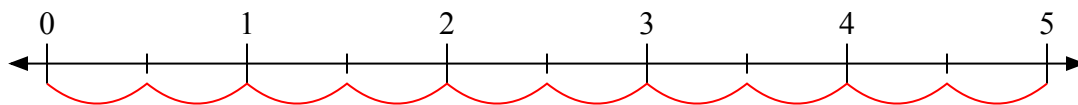


Используйте числовую прямую для решения задачи.

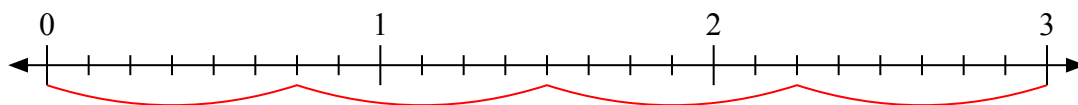
1)  $6 : \frac{3}{4}$



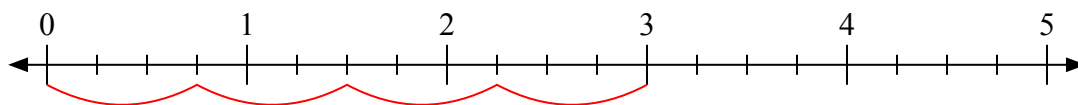
2)  $5 : \frac{1}{2}$



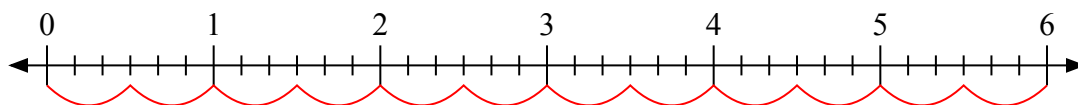
3)  $3 : \frac{6}{8}$



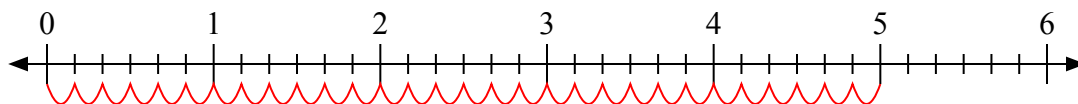
4)  $3 : \frac{3}{4}$



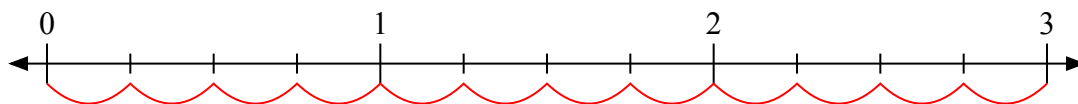
5)  $6 : \frac{3}{6}$



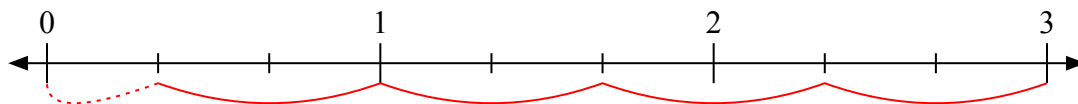
6)  $5 : \frac{1}{6}$



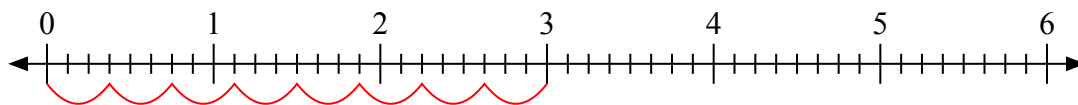
7)  $3 : \frac{1}{4}$



8)  $3 : \frac{2}{3}$



9)  $3 : \frac{3}{8}$



**Отвѣты**

1. 8

2. 10

3. 4

4. 4

5. 12

6. 30

7. 12

8. 4 1/2

9. 8

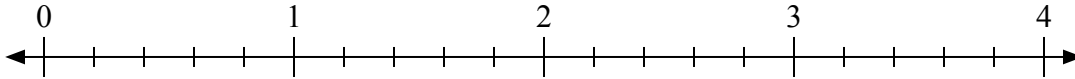




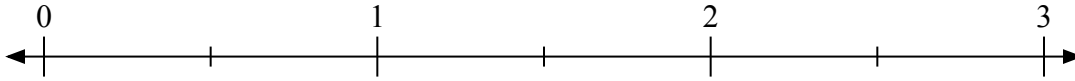
Используйте числовую прямую для решения задачи.

**Отвѣты**

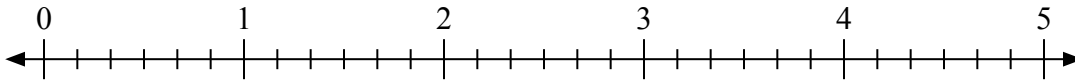
1)  $2:\frac{1}{5}$



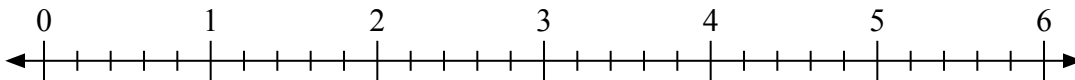
2)  $3:\frac{1}{2}$



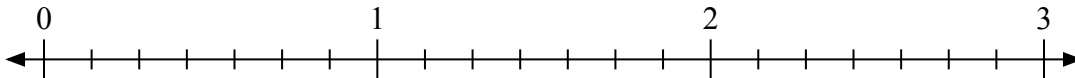
3)  $3:\frac{1}{6}$



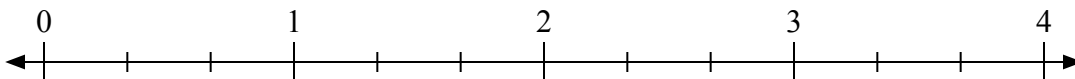
4)  $6:\frac{4}{5}$



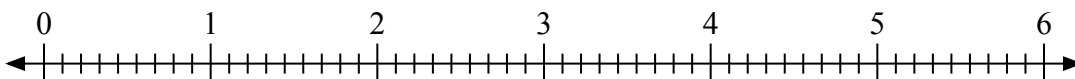
5)  $3:\frac{5}{7}$



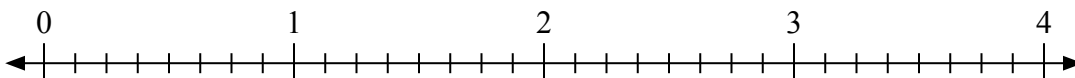
6)  $4:\frac{2}{3}$



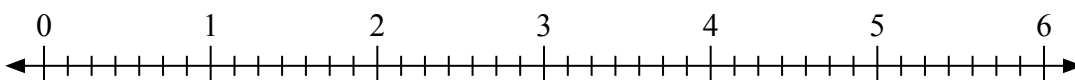
7)  $4:\frac{5}{9}$



8)  $4:\frac{7}{8}$



9)  $5:\frac{3}{7}$

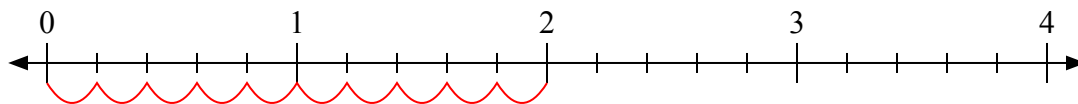


1. \_\_\_\_\_
2. \_\_\_\_\_
3. \_\_\_\_\_
4. \_\_\_\_\_
5. \_\_\_\_\_
6. \_\_\_\_\_
7. \_\_\_\_\_
8. \_\_\_\_\_
9. \_\_\_\_\_

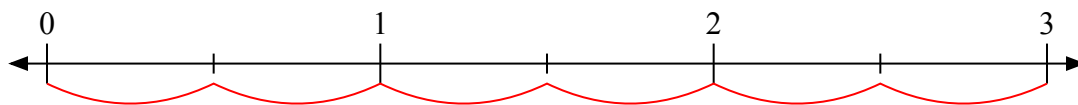


Используйте числовую прямую для решения задачи.

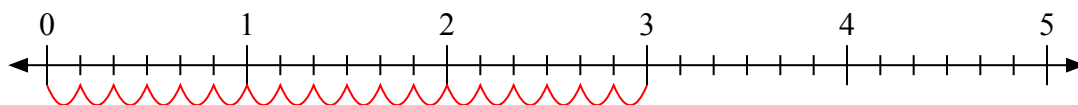
1)  $2 : \frac{1}{5}$



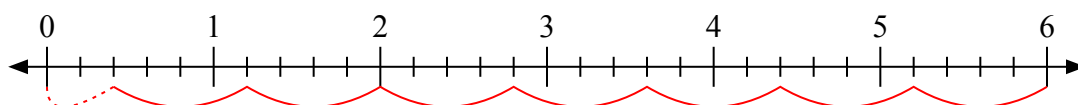
2)  $3 : \frac{1}{2}$



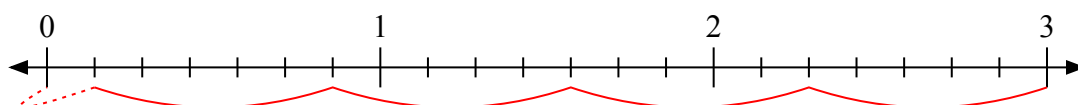
3)  $3 : \frac{1}{6}$



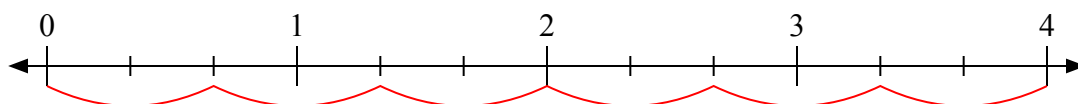
4)  $6 : \frac{4}{5}$



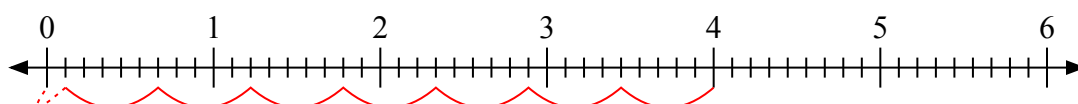
5)  $3 : \frac{5}{7}$



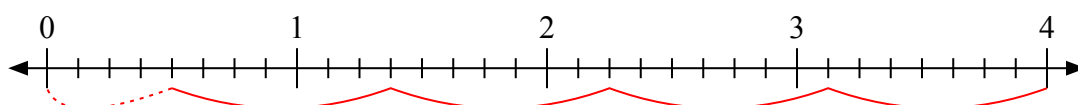
6)  $4 : \frac{2}{3}$



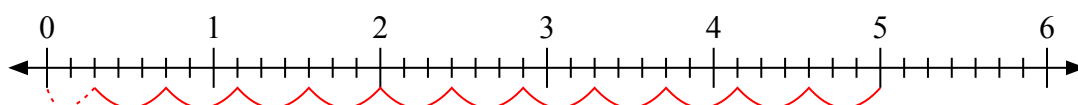
7)  $4 : \frac{5}{9}$



8)  $4 : \frac{7}{8}$



9)  $5 : \frac{3}{7}$



**Отвѣты**

1. 10

2. 6

3. 18

4.  $7 \frac{2}{4}$

5.  $4 \frac{1}{5}$

6. 6

7.  $7 \frac{1}{5}$

8.  $4 \frac{4}{7}$

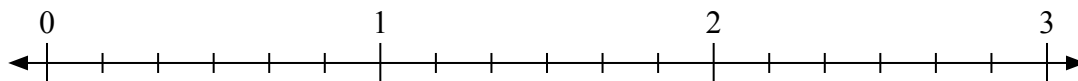
9.  $11 \frac{2}{3}$



Используйте числовую прямую для решения задачи.

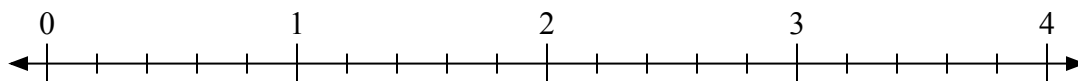
**Отвѣты**

1)  $3:\frac{3}{6}$



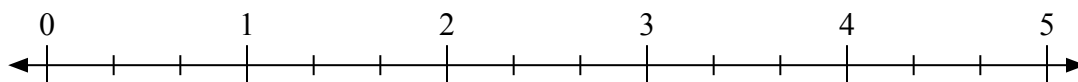
1. \_\_\_\_\_

2)  $2:\frac{4}{5}$



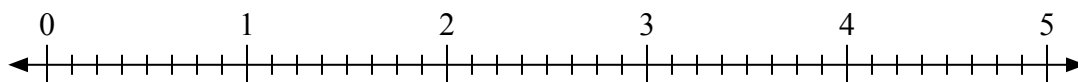
2. \_\_\_\_\_

3)  $5:\frac{1}{3}$



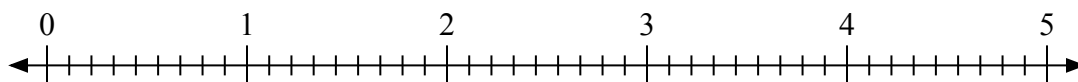
3. \_\_\_\_\_

4)  $3:\frac{5}{8}$



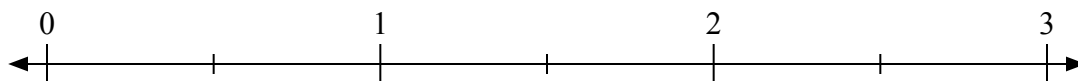
4. \_\_\_\_\_

5)  $3:\frac{7}{9}$



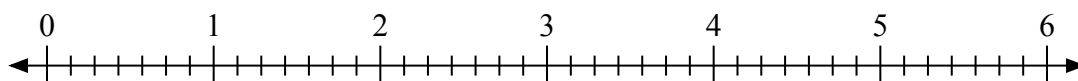
5. \_\_\_\_\_

6)  $3:\frac{1}{2}$



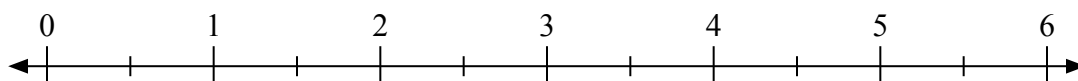
6. \_\_\_\_\_

7)  $5:\frac{3}{7}$



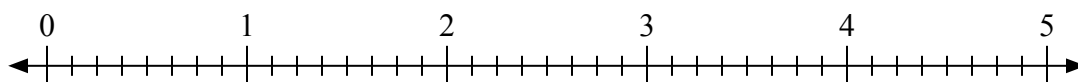
7. \_\_\_\_\_

8)  $5:\frac{1}{2}$



8. \_\_\_\_\_

9)  $4:\frac{4}{8}$

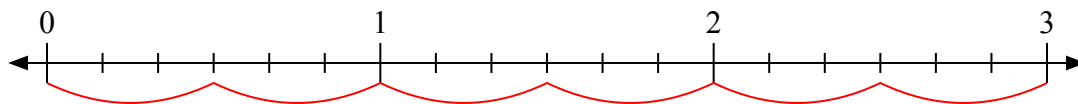


9. \_\_\_\_\_

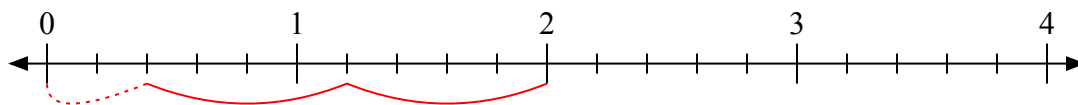


Используйте числовую прямую для решения задачи.

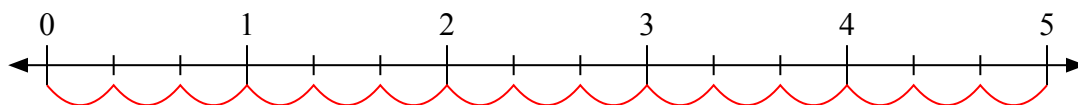
1)  $3 : \frac{3}{6}$



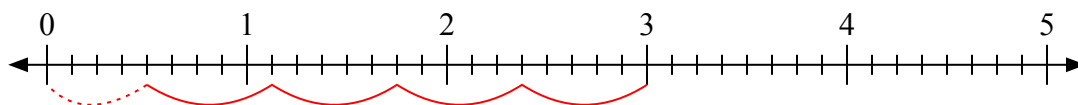
2)  $2 : \frac{4}{5}$



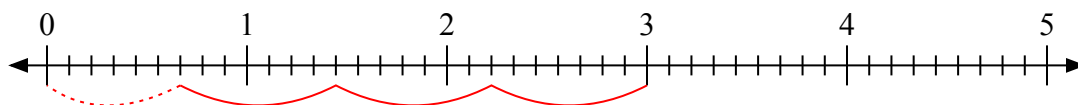
3)  $5 : \frac{1}{3}$



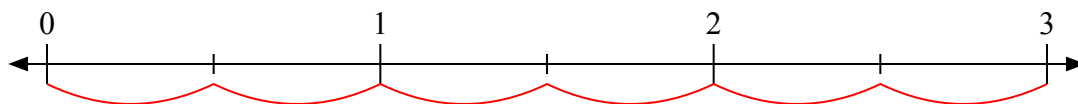
4)  $3 : \frac{5}{8}$



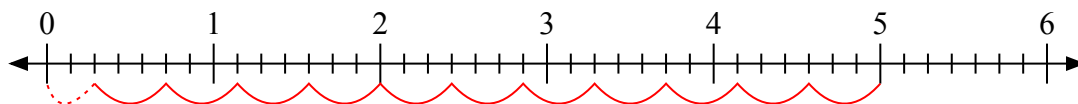
5)  $3 : \frac{7}{9}$



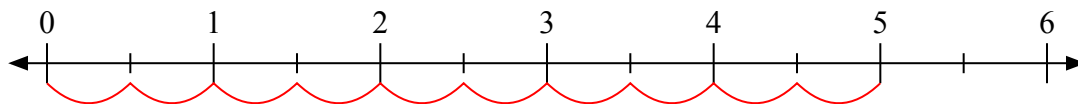
6)  $3 : \frac{1}{2}$



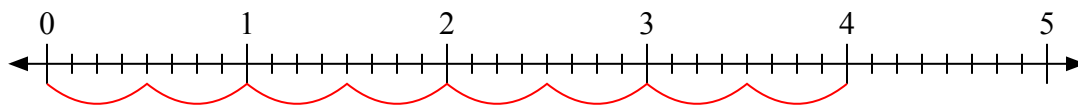
7)  $5 : \frac{3}{7}$



8)  $5 : \frac{1}{2}$



9)  $4 : \frac{4}{8}$



**Ответы**

1. 6

2.  $2 \frac{2}{4}$

3. 15

4.  $4 \frac{4}{5}$

5.  $3 \frac{6}{7}$

6. 6

7.  $11 \frac{2}{3}$

8. 10

9. 8