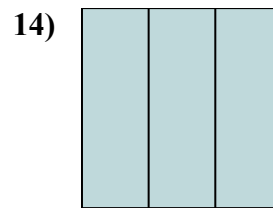
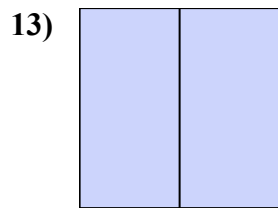
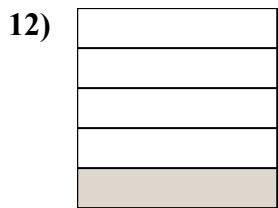
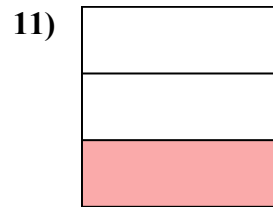
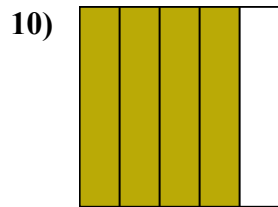
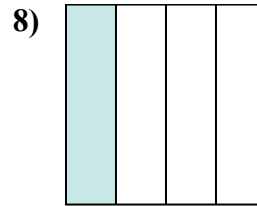
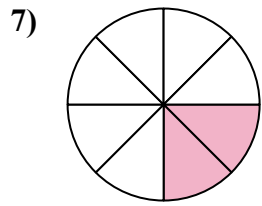
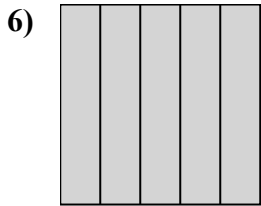
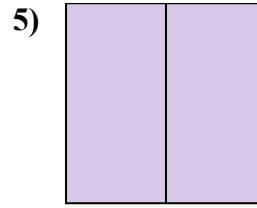
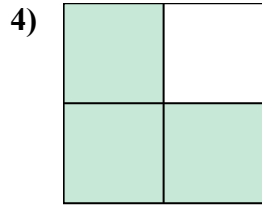
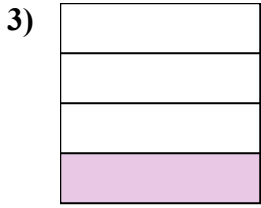
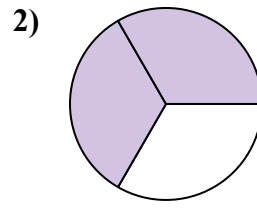
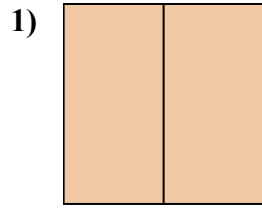
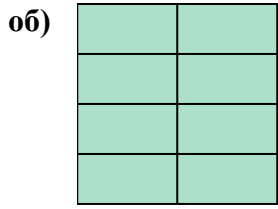




Запишите заштрихованную сумму дробью.



**Ответы**

об.  $\frac{8}{8}$

1. \_\_\_\_\_

2. \_\_\_\_\_

3. \_\_\_\_\_

4. \_\_\_\_\_

5. \_\_\_\_\_

6. \_\_\_\_\_

7. \_\_\_\_\_

8. \_\_\_\_\_

9. \_\_\_\_\_

10. \_\_\_\_\_

11. \_\_\_\_\_

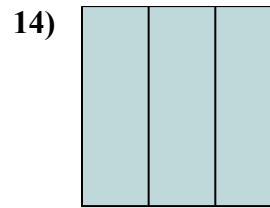
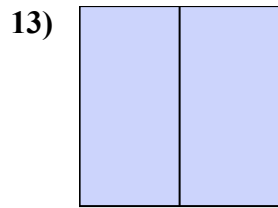
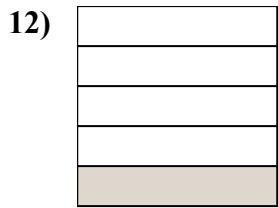
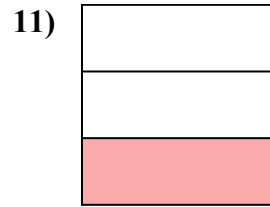
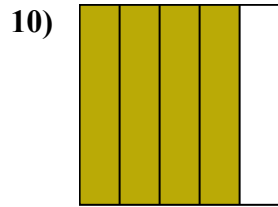
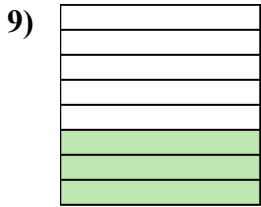
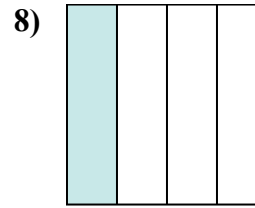
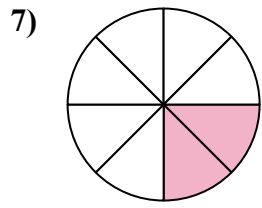
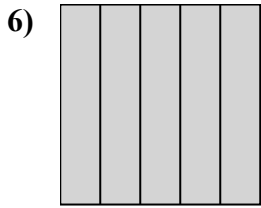
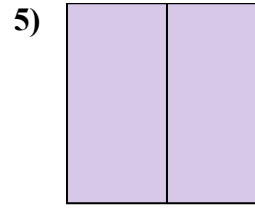
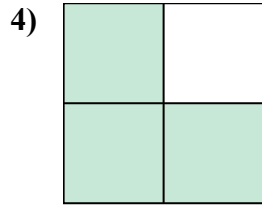
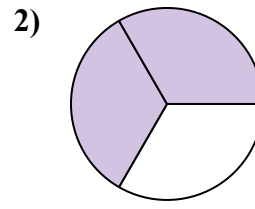
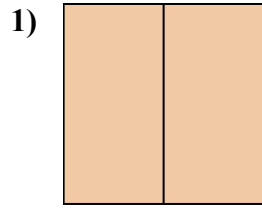
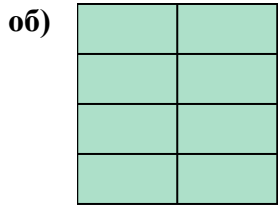
12. \_\_\_\_\_

13. \_\_\_\_\_

14. \_\_\_\_\_



Запишите заштрихованную сумму дробью.



**Ответы**

об.  $\frac{8}{8}$

1.  $\frac{2}{2}$

2.  $\frac{2}{3}$

3.  $\frac{1}{4}$

4.  $\frac{3}{4}$

5.  $\frac{2}{2}$

6.  $\frac{5}{5}$

7.  $\frac{2}{8}$

8.  $\frac{1}{4}$

9.  $\frac{3}{8}$

10.  $\frac{4}{5}$

11.  $\frac{1}{3}$

12.  $\frac{1}{5}$

13.  $\frac{2}{2}$

14.  $\frac{3}{3}$