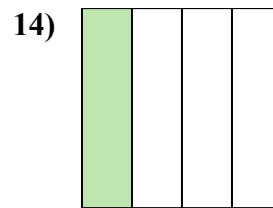
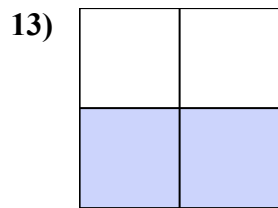
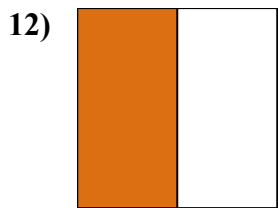
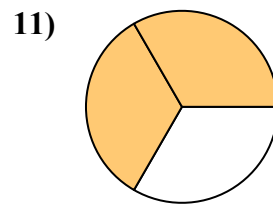
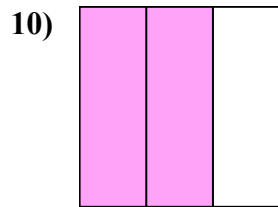
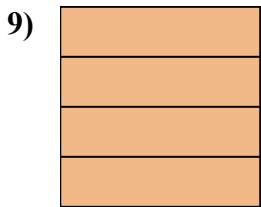
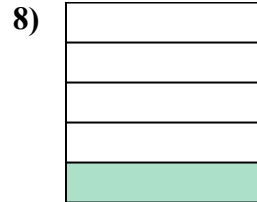
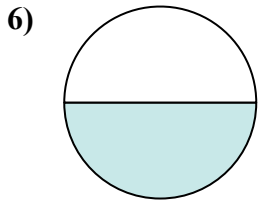
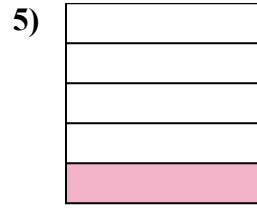
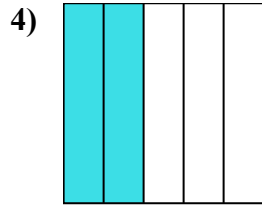
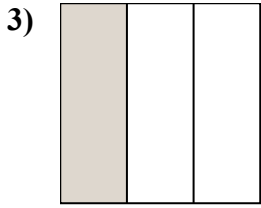
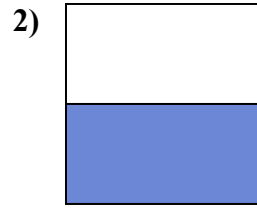
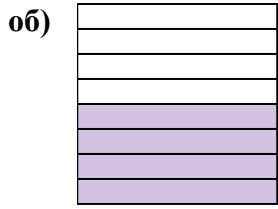




Запишите заштрихованную сумму дробью.



**Ответы**

об.  $\frac{4}{8}$

1. \_\_\_\_\_

2. \_\_\_\_\_

3. \_\_\_\_\_

4. \_\_\_\_\_

5. \_\_\_\_\_

6. \_\_\_\_\_

7. \_\_\_\_\_

8. \_\_\_\_\_

9. \_\_\_\_\_

10. \_\_\_\_\_

11. \_\_\_\_\_

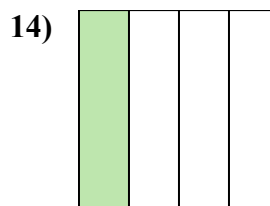
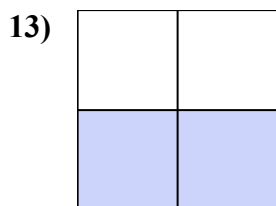
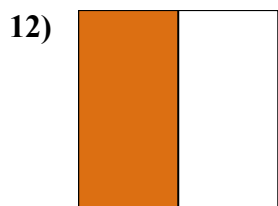
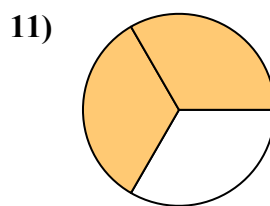
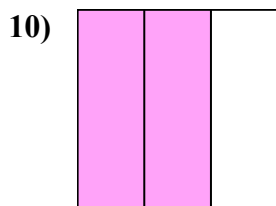
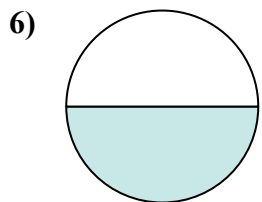
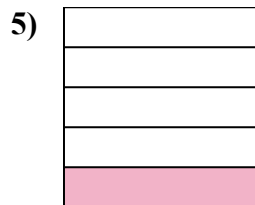
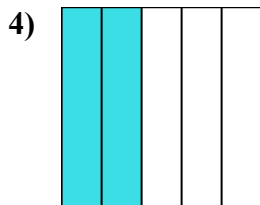
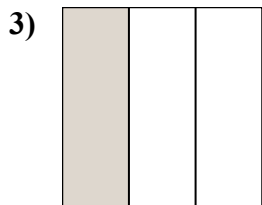
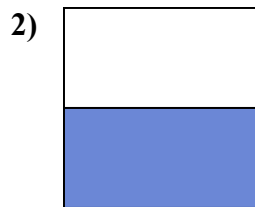


12. \_\_\_\_\_

13. \_\_\_\_\_

14. \_\_\_\_\_



Запишите заштрихованную сумму дробью.



**Отвeты**

об. 4/8

1. 2/8

2. 1/2

3. 1/3

4. 2/5

5. 1/5

6. 1/2

7. 1/8

8. 1/5

9. 4/4

10. 2/3

11. 2/3

12. 1/2

13. 2/4

14. 1/4