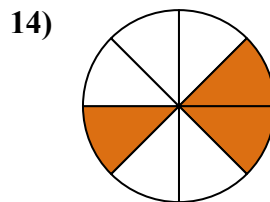
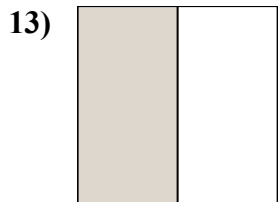
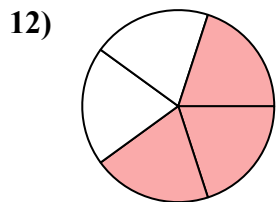
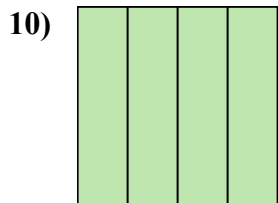
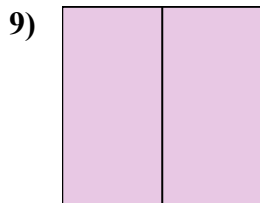
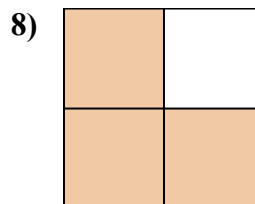

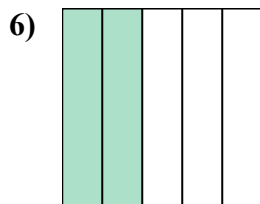

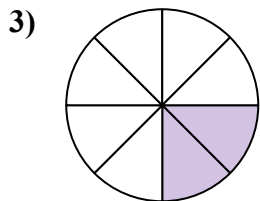
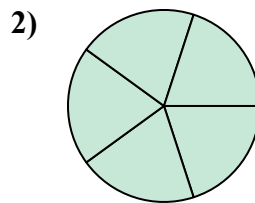
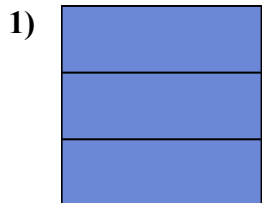
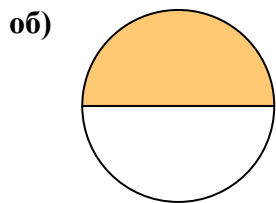




Запишите заштрихованную сумму дробью.

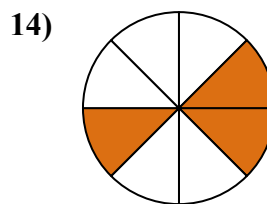
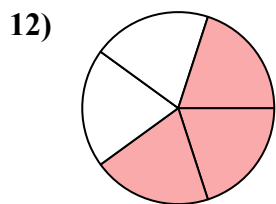
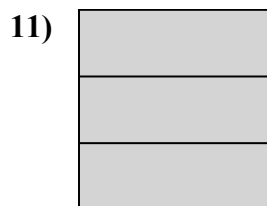
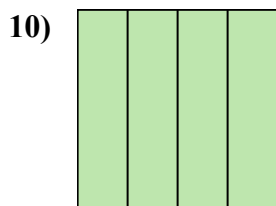
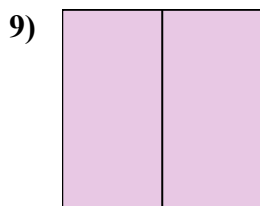
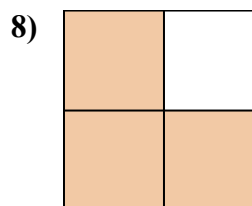
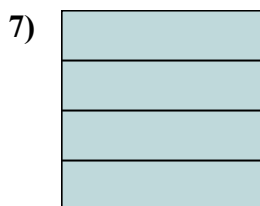
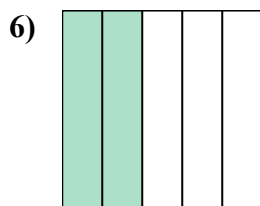

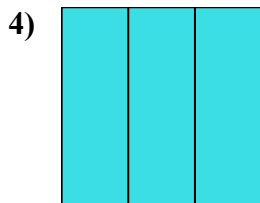
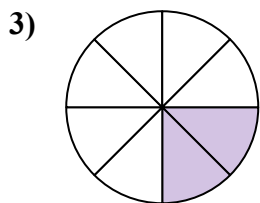
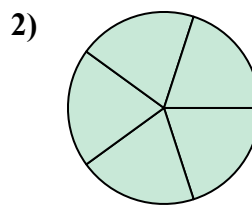
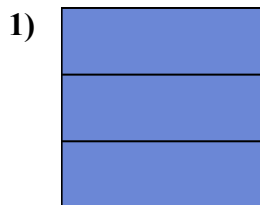
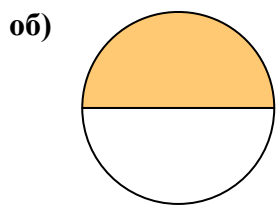


Ответы

- об. $\frac{1}{2}$
1. _____
2. _____
3. _____
4. _____
5. _____
6. _____
7. _____
8. _____
9. _____
10. _____
11. _____
12. _____
13. _____
14. _____



Запишите заштрихованную сумму дробью.



Отвeты

об. 1/2

1. 3/3

2. 5/5

3. 2/8

4. 3/3

5. 1/8

6. 2/5

7. 4/4

8. 3/4

9. 2/2

10. 4/4

11. 3/3

12. 3/5

13. 1/2

14. 3/8