
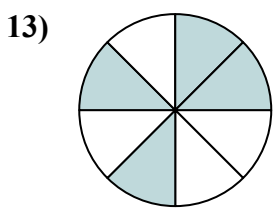
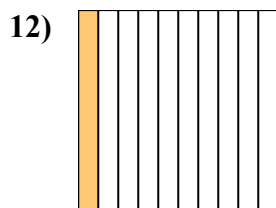
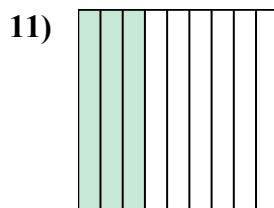
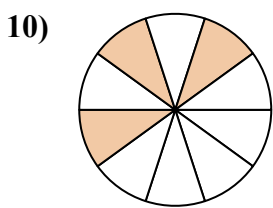
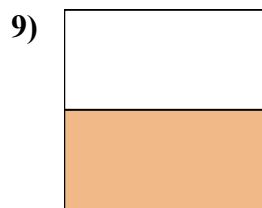
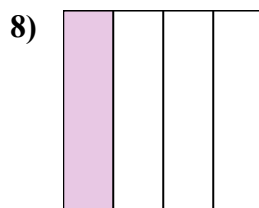
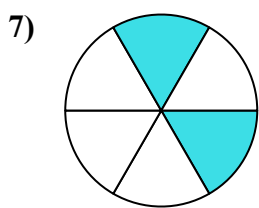
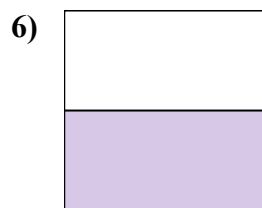
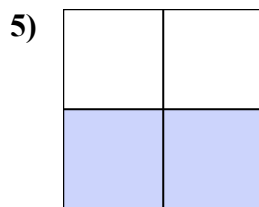
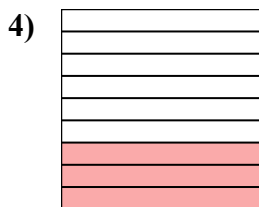
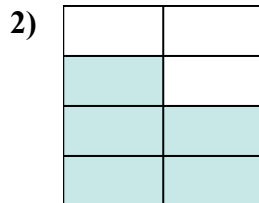
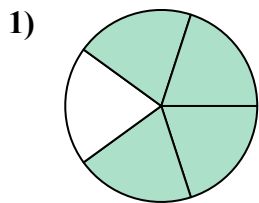
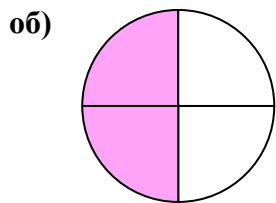




Напишите заштрихованную сумму в форме слова.



**ОТВЕТЫ**

об. две четверти

1. \_\_\_\_\_

2. \_\_\_\_\_

3. \_\_\_\_\_

4. \_\_\_\_\_

5. \_\_\_\_\_

6. \_\_\_\_\_

7. \_\_\_\_\_

8. \_\_\_\_\_

9. \_\_\_\_\_

10. \_\_\_\_\_

11. \_\_\_\_\_


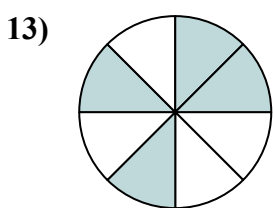
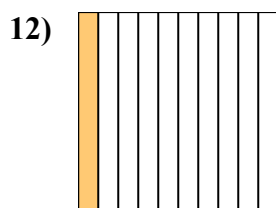
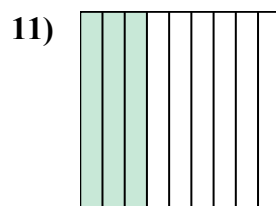
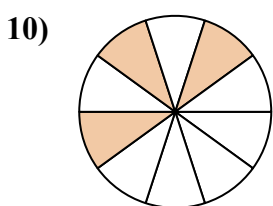
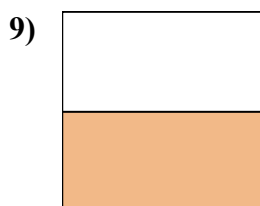
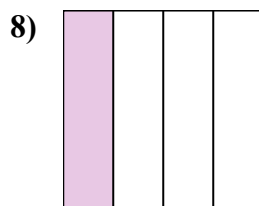
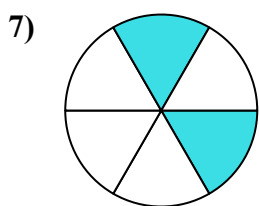
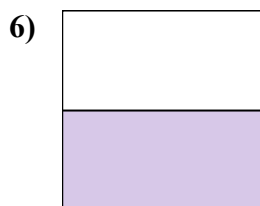
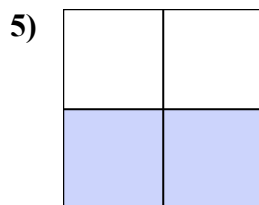
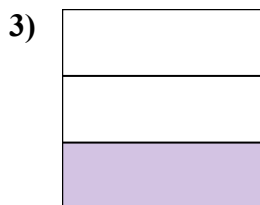
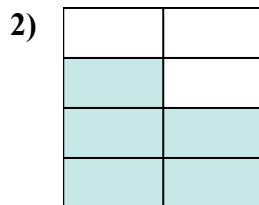
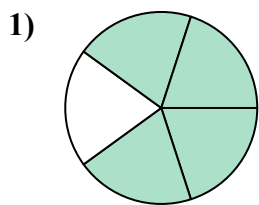
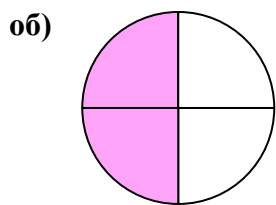
12. \_\_\_\_\_

13. \_\_\_\_\_

14. \_\_\_\_\_



Напишите заштрихованную сумму в форме слова.



**ОТВЕТЫ**

об. две четверти

1. четыре пятых

2. пять седьмых

3. одна треть

4. три девятых

5. две третьих

6. одна половина

7. две шестых

8. одна четвертая

9. одна половина

10. три десятых

11. три девятых

12. одна десятая

13. четыре восьмых

14. пять восьмых