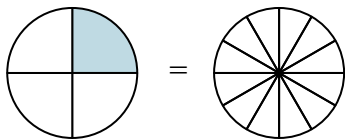


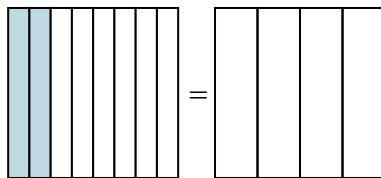


Закрасьте визуальные дроби, чтобы найти ответ.

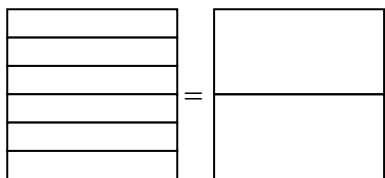
об) $\frac{1}{4} = \frac{3}{12}$



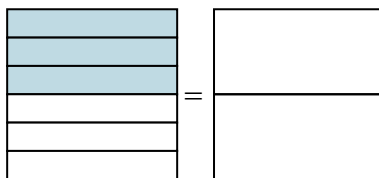
1) $\frac{2}{8} =$



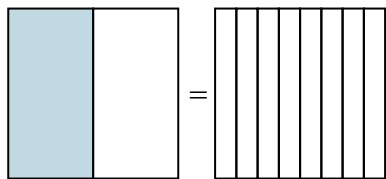
2) $\frac{0}{6} =$



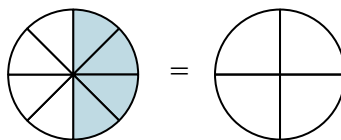
3) $\frac{3}{6} =$



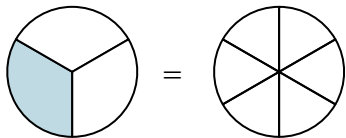
4) $\frac{1}{2} =$



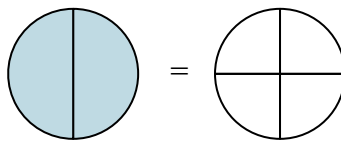
5) $\frac{4}{8} =$



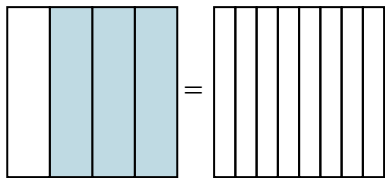
6) $\frac{1}{3} =$



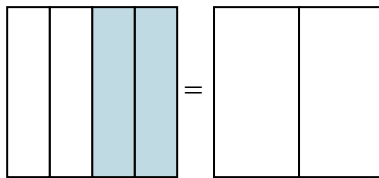
7) $\frac{2}{2} =$



8) $\frac{3}{4} =$



9) $\frac{2}{4} =$

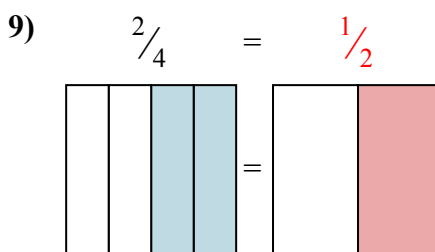
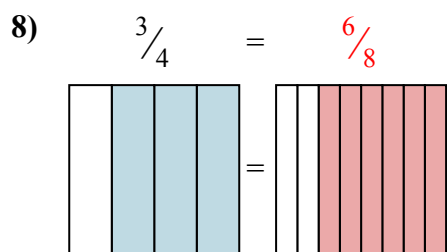
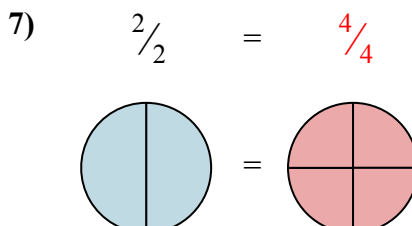
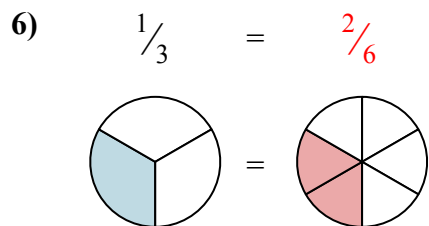
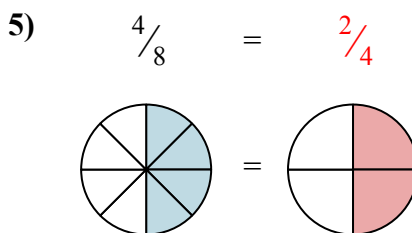
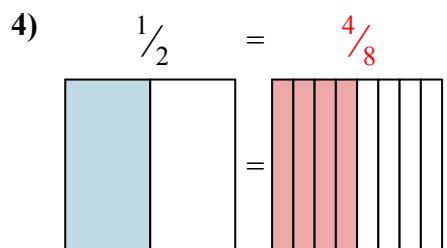
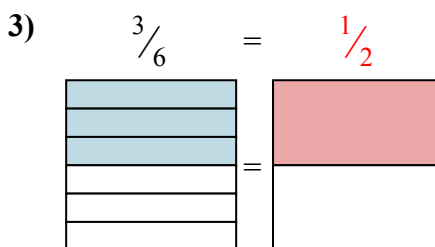
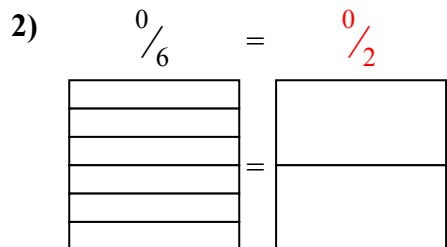
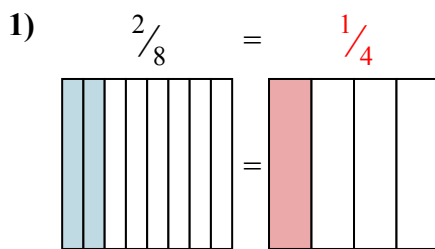
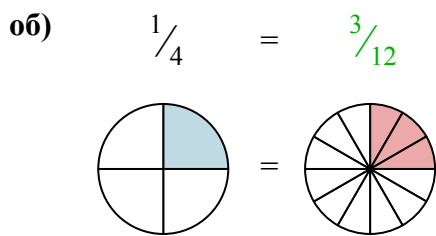


Ответы

- об. $\frac{3}{12}$
- 1. _____
- 2. _____
- 3. _____
- 4. _____
- 5. _____
- 6. _____
- 7. _____
- 8. _____
- 9. _____



Закрасьте визуальные дроби, чтобы найти ответ.



ОТВЕТЫ

- об. $\frac{3}{12}$
- 1. $\frac{1}{4}$
- 2. $\frac{0}{2}$
- 3. $\frac{1}{2}$
- 4. $\frac{4}{8}$
- 5. $\frac{2}{4}$
- 6. $\frac{2}{6}$
- 7. $\frac{4}{4}$
- 8. $\frac{6}{8}$
- 9. $\frac{1}{2}$