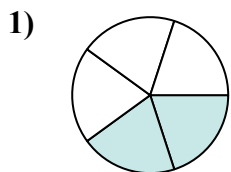


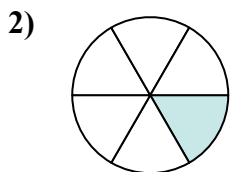


Определите под какой буквой находятся соответствующие дроби.

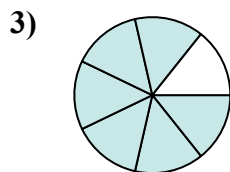
ОТВЕТЫ



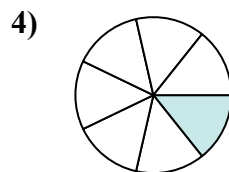
$$\frac{2}{5}$$



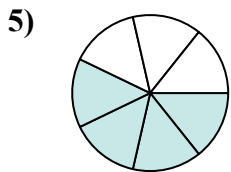
$$\frac{1}{6}$$



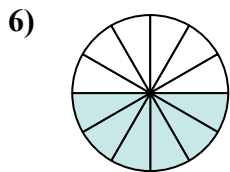
$$\frac{6}{7}$$



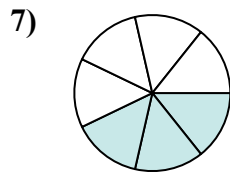
$$\frac{1}{7}$$



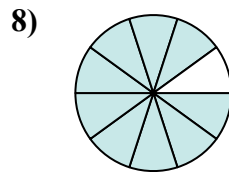
$$\frac{4}{7}$$



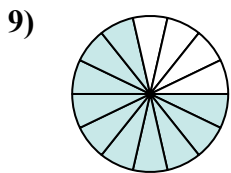
$$\frac{6}{12}$$



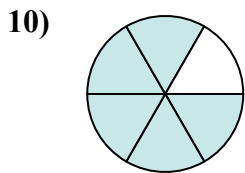
$$\frac{3}{7}$$



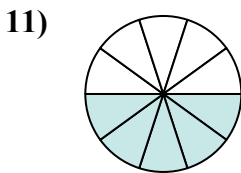
$$\frac{9}{10}$$



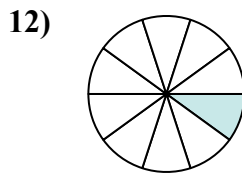
$$\frac{10}{14}$$



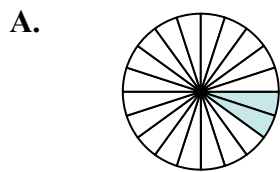
$$\frac{5}{6}$$



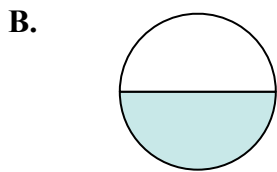
$$\frac{5}{10}$$



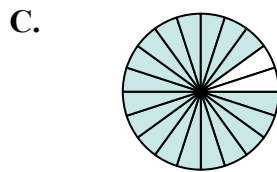
$$\frac{1}{10}$$



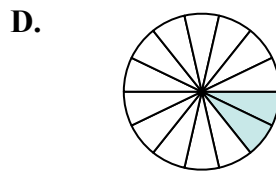
$$\frac{2}{20}$$



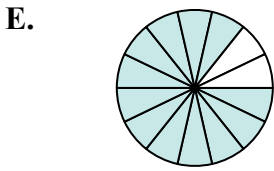
$$\frac{1}{2}$$



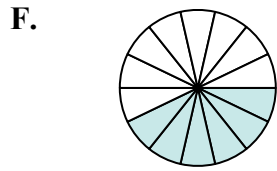
$$\frac{18}{20}$$



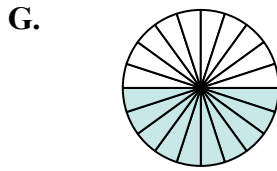
$$\frac{2}{14}$$



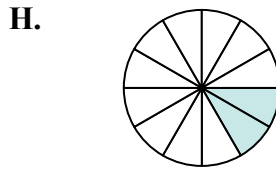
$$\frac{12}{14}$$



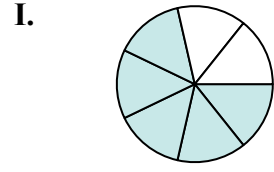
$$\frac{6}{14}$$



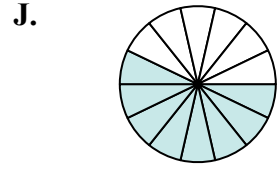
$$\frac{10}{20}$$



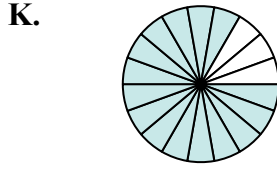
$$\frac{2}{12}$$




$$\frac{5}{7}$$



$$\frac{8}{14}$$



$$\frac{15}{18}$$



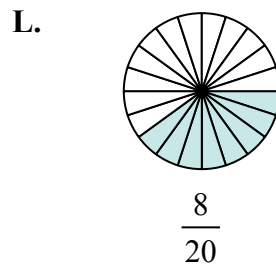
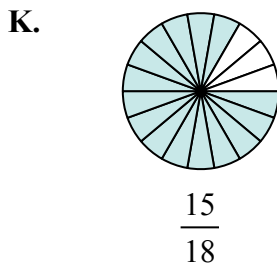
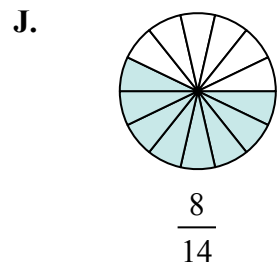
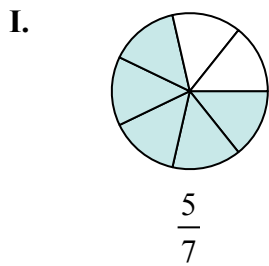
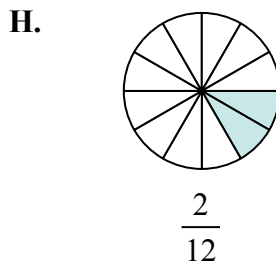
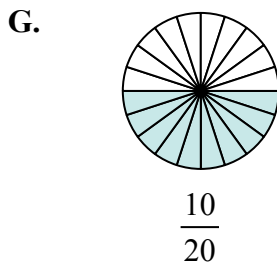
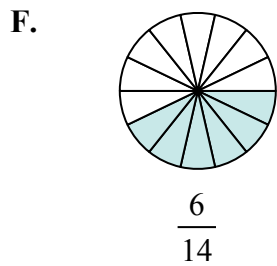
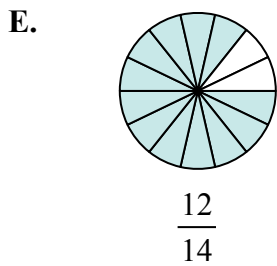
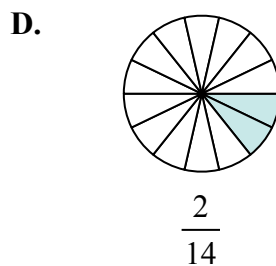
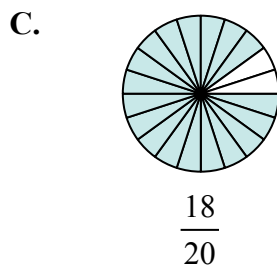
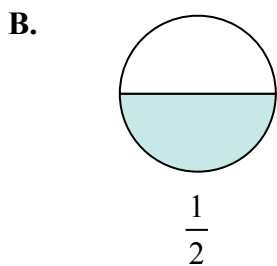
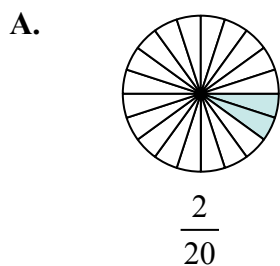
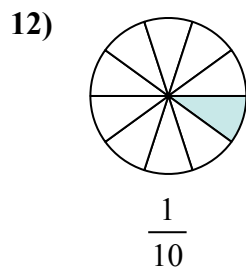
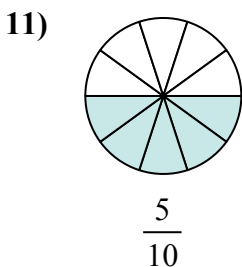
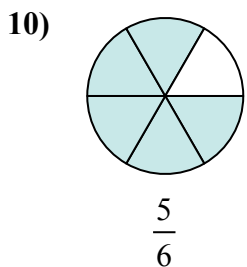
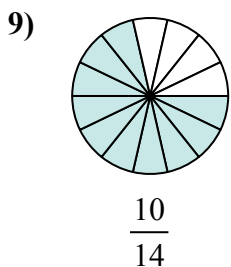
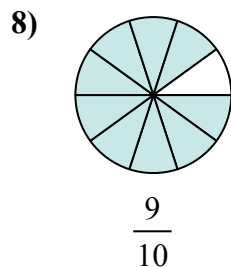
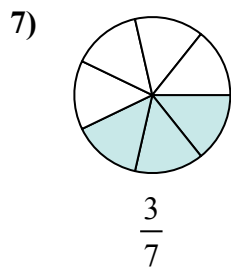
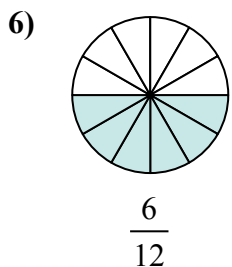
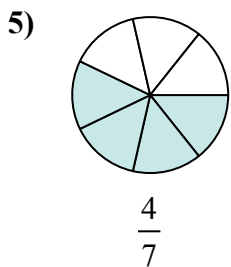
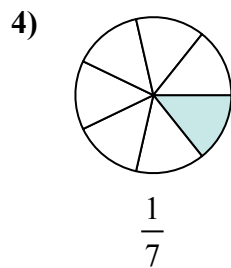
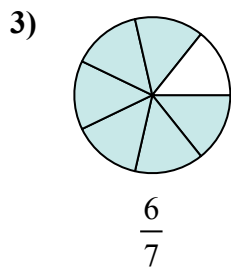
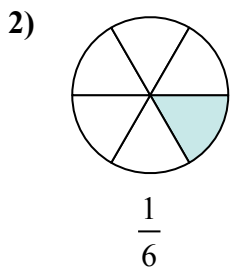
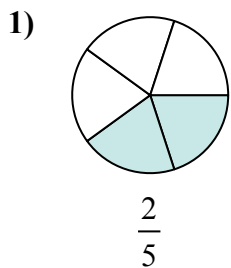
$$\frac{8}{20}$$

1. _____
2. _____
3. _____
4. _____
5. _____
6. _____
7. _____
8. _____
9. _____
10. _____
11. _____
12. _____



Определите под какой буквой находятся соответствующие дроби.

ОТВЕТЫ



1. L

2. H

3. E

4. D

5. J

6. B

7. F

8. C

9. I

10. K

11. G

12. A