




Решите каждую задачу.


ОТВЕТЫ

1) 11:45

A.




B.




2) 7:30

A.




B.




3) 8:15

A.




B.




4) 10:15

A.



B.




5) 8:00

A.




B.




6) 2:30

A.



B.




7) 4:00

A.




B.




8) 12:30

A.



B.




9) 12:30

A.



B.




10) 7:45

A.




B.




11) 11:30

A.



B.



12) 10:45

A.



B.



1. _____

2. _____

3. _____

4. _____

5. _____

6. _____

7. _____

8. _____

9. _____

10. _____

11. _____

12. _____




Решите каждую задачу.


ОТВЕТЫ

1) 11:45

A.




B.




2) 7:30

A.




B.




3) 8:15

A.




B.




4) 10:15

A.




B.




5) 8:00

A.




B.




6) 2:30

A.




B.




7) 4:00

A.




B.




8) 12:30

A.



B.




9) 12:30

A.



B.




10) 7:45

A.




B.




11) 11:30

A.




B.



12) 10:45

A.



B.

1. B2. B3. A4. A5. B6. A7. B8. A9. B10. B11. B12. A