
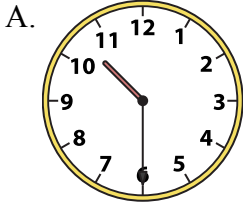




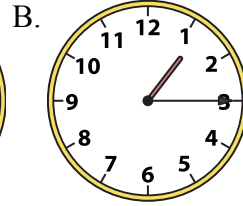
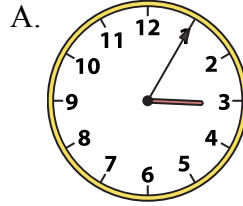
Решите каждую задачу.

ОТВЕТЫ

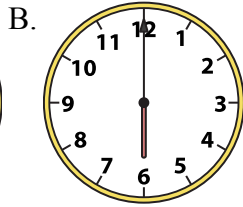
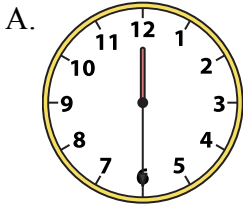
1) 10:30



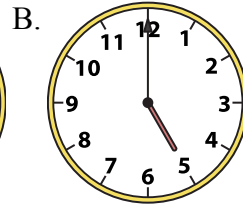
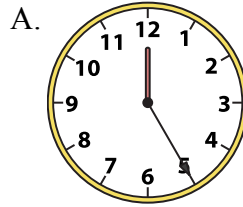
2) 1:15




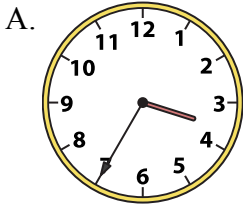
3) 6:00



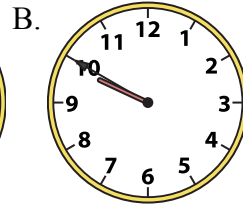
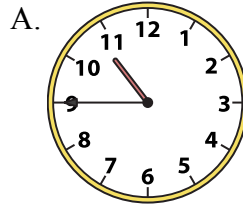
4) 5:00




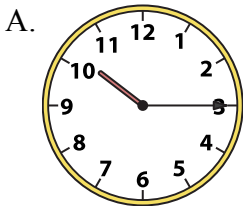
5) 7:15



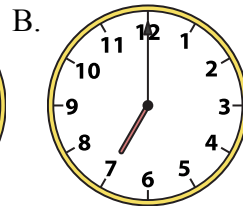
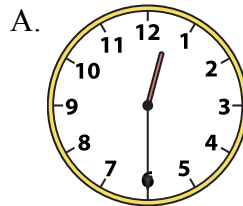
6) 10:45



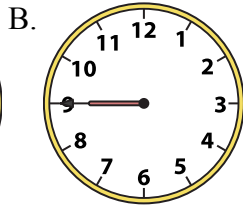
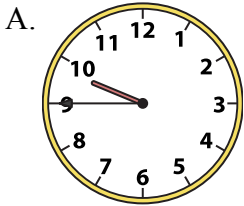
7) 10:15



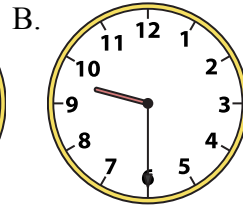
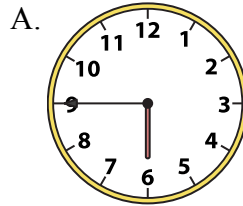
8) 12:30



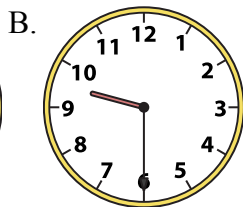
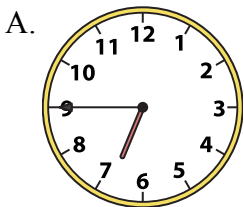
9) 9:45



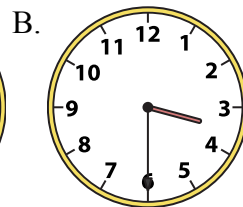
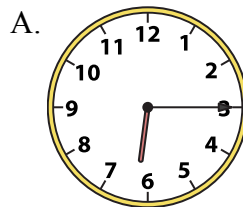
10) 9:30



11) 9:30



12) 3:30



1. _____
2. _____
3. _____
4. _____
5. _____
6. _____
7. _____
8. _____
9. _____
10. _____
11. _____
12. _____




Решите каждую задачу.


ОТВЕТЫ

1) 10:30

A.




B.




2) 1:15

A.




B.


1. A2. B3. B

3) 6:00

A.




B.




4) 5:00

A.



B.


4. B5. B6. A

5) 7:15

A.



B.




6) 10:45

A.



B.


7. A8. A9. A

7) 10:15

A.




B.




8) 12:30

A.



B.

10. B11. B12. B

9) 9:45

A.




B.




10) 9:30

A.




B.



11) 9:30

A.



B.



12) 3:30

A.



B.

