




Решите каждую задачу.


ОТВЕТЫ

1) 6:00

A.




B.




2) 11:00

A.




B.




3) 12:45

A.



B.




4) 9:45

A.



B.




5) 12:45

A.




B.




6) 6:00

A.




B.




7) 10:00

A.




B.




8) 3:30

A.




B.




9) 11:30

A.




B.




10) 4:30

A.



B.




11) 8:45

A.




B.




12) 6:15

A.



B.



1. _____

2. _____

3. _____

4. _____

5. _____

6. _____

7. _____

8. _____

9. _____

10. _____

11. _____

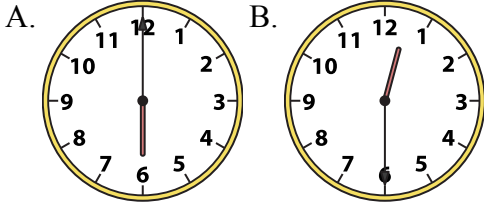
12. _____



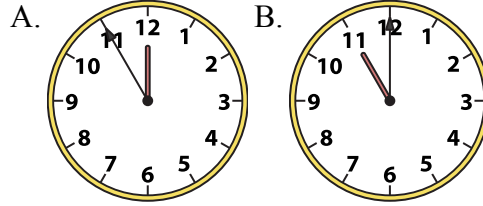
Решите каждую задачу.

ОТВЕТЫ

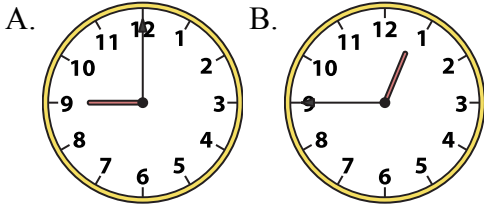
1) 6:00



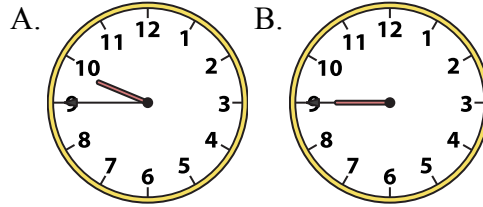
2) 11:00



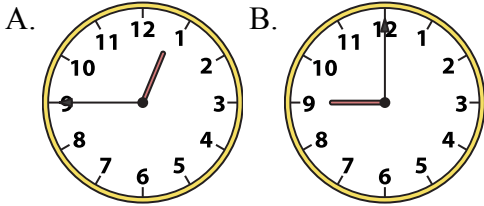
3) 12:45



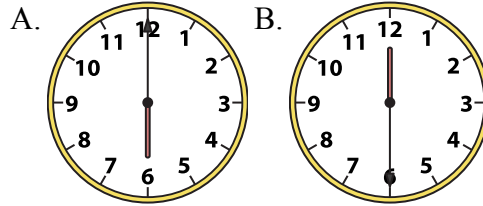
4) 9:45



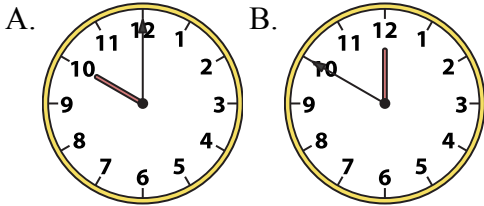
5) 12:45



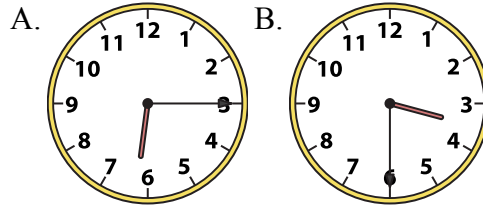
6) 6:00



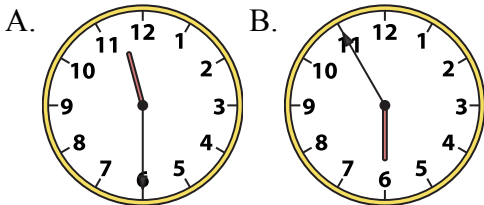
7) 10:00



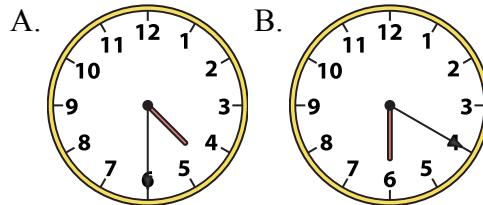
8) 3:30



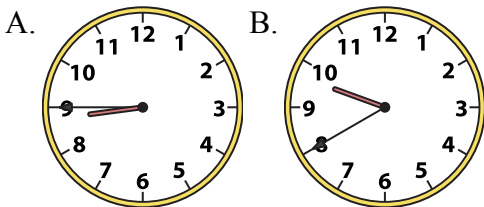
9) 11:30



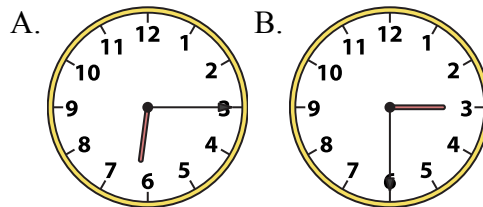
10) 4:30



11) 8:45



12) 6:15

1. A2. B3. B4. A5. A6. A7. A8. B9. A10. A11. A12. A