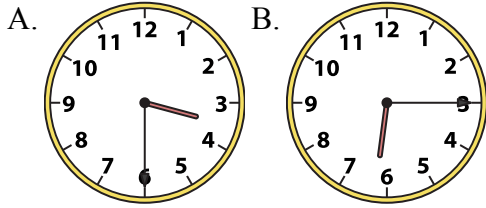




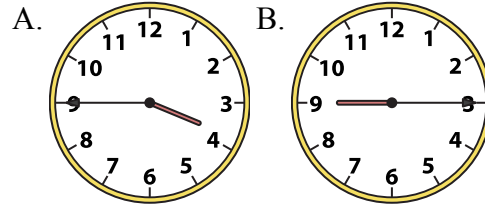
Решите каждую задачу.

**ОТВЕТЫ**

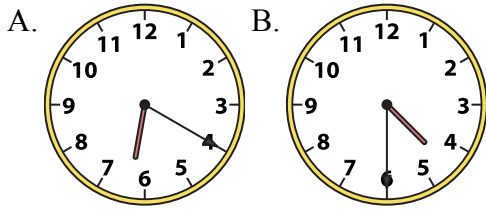
1) 3:30



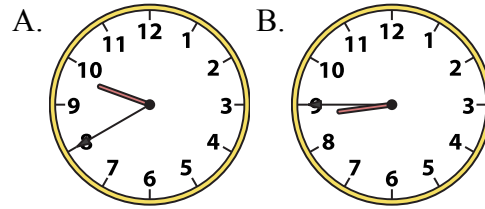
2) 3:45



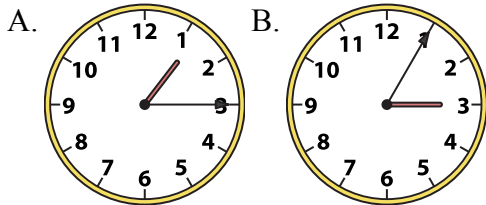
3) 4:30



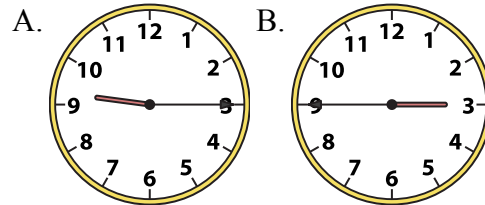
4) 8:45



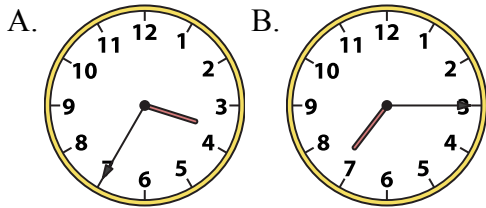
5) 1:15



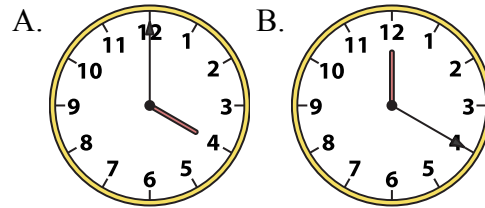
6) 9:15



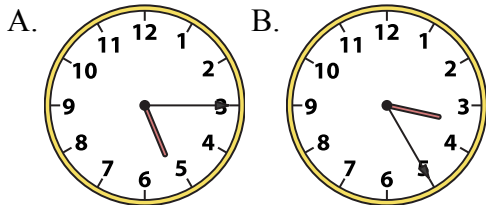
7) 7:15



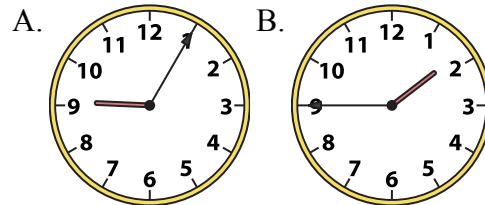
8) 4:00



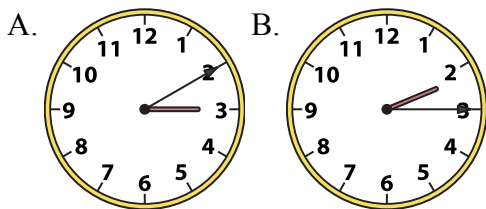
9) 5:15



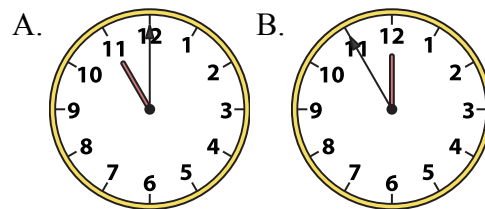
10) 1:45



11) 2:15



12) 11:00



1. \_\_\_\_\_

2. \_\_\_\_\_

3. \_\_\_\_\_

4. \_\_\_\_\_

5. \_\_\_\_\_

6. \_\_\_\_\_

7. \_\_\_\_\_

8. \_\_\_\_\_

9. \_\_\_\_\_

10. \_\_\_\_\_

11. \_\_\_\_\_

12. \_\_\_\_\_




Решите каждую задачу.


**ОТВЕТЫ**

1) 3:30

A.




B.

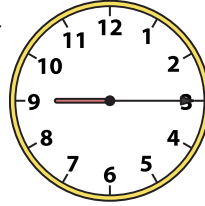


2) 3:45

A.




B.




3) 4:30

A.




B.




4) 8:45

A.




B.




5) 1:15

A.



B.




6) 9:15

A.



B.




7) 7:15

A.




B.




8) 4:00

A.



B.



9) 5:15

A.



B.




10) 1:45

A.



B.



11) 2:15

A.



B.




12) 11:00

A.



B.

1.     **A**    2.     **A**    3.     **B**    4.     **B**    5.     **A**    6.     **A**    7.     **B**    8.     **A**    9.     **A**    10.     **B**    11.     **B**    12.     **A**