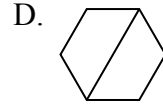
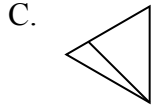
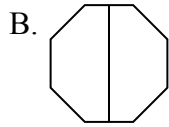
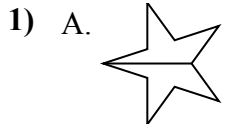




Определите под каким вариантом находятся фигуры, разбитые на равные части.

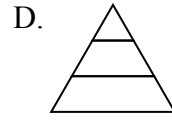
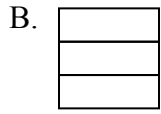
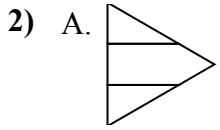
Если такой нет, напишите 'нет'.

ОТВЕТЫ



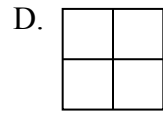
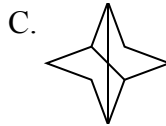
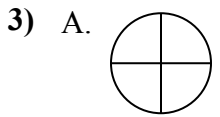
1. \_\_\_\_\_

2. \_\_\_\_\_



3. \_\_\_\_\_

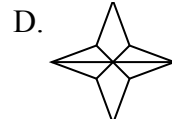
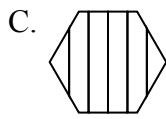
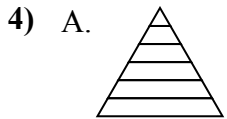
4. \_\_\_\_\_



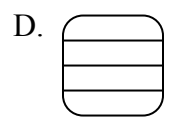
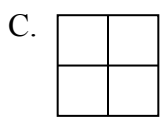
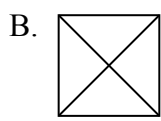
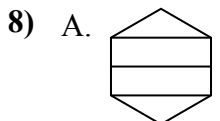
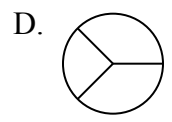
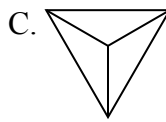
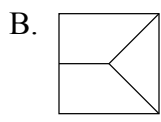
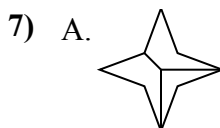
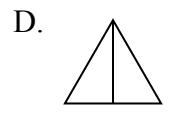
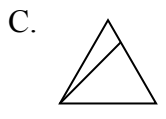
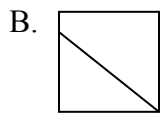
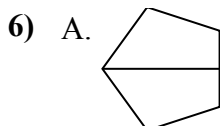
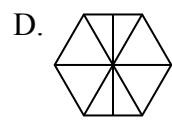
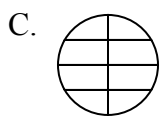
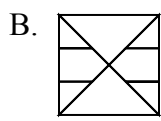
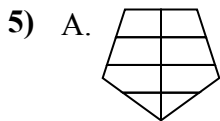
5. \_\_\_\_\_

6. \_\_\_\_\_

7. \_\_\_\_\_



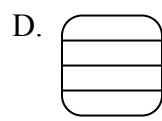
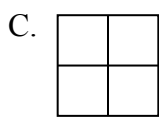
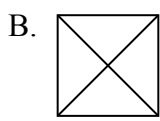
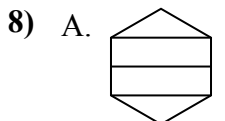
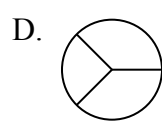
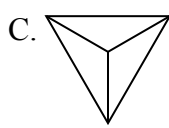
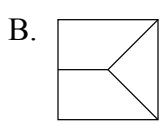
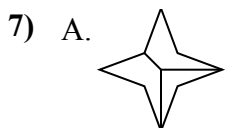
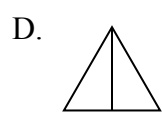
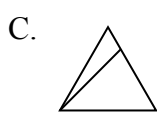
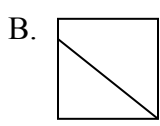
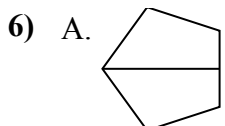
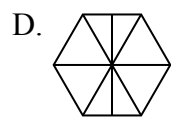
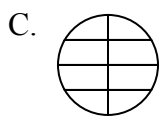
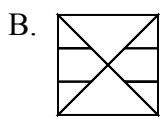
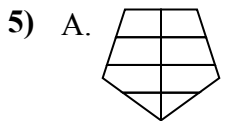
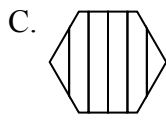
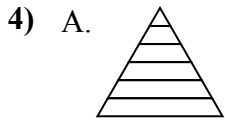
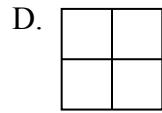
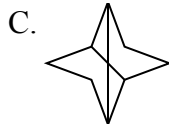

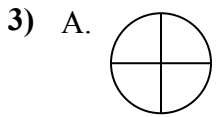
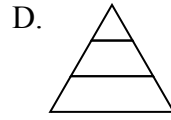
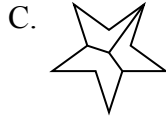
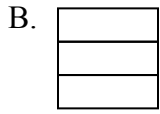
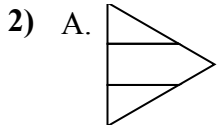
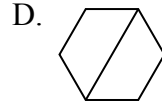
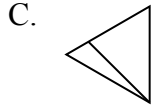
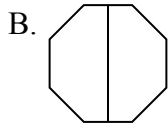
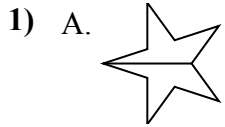
8. \_\_\_\_\_





Определите под каким вариантом находятся фигуры, разбитые на равные части.

Если такой нет, напишите 'нет'.



**ОТВЕТЫ**

1. **A,B,D**

2. **B**

3. **A,B,D**

4. **нет**

5. **нет**

6. **A,D**

7. **C**

8. **B,C**