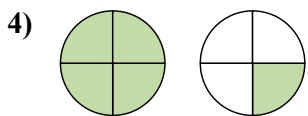
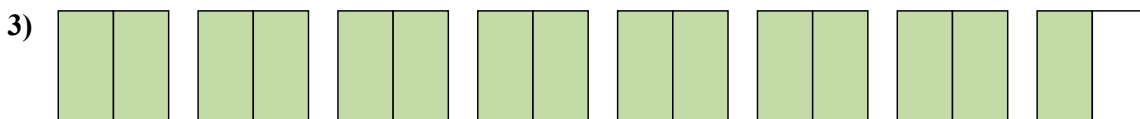
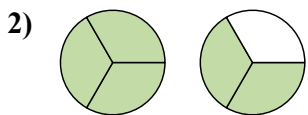
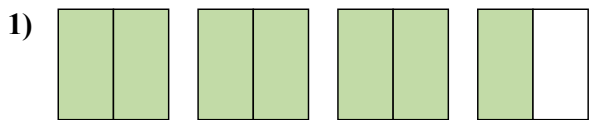
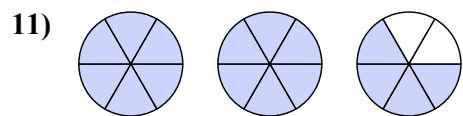
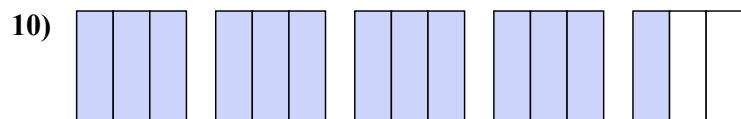
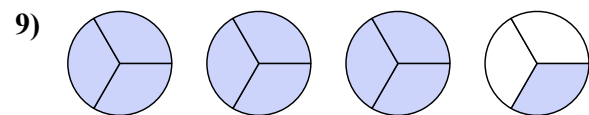
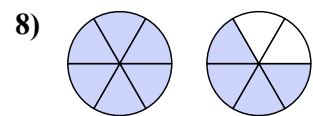
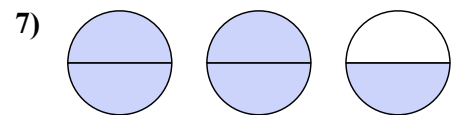
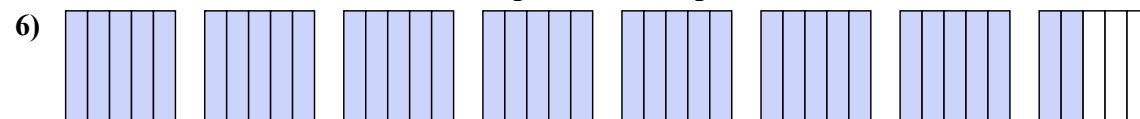




Напишите каждый ряд фигур в виде смешанного числа.



Напишите каждое число в виде неправильной дроби.

**ОТВЕТЫ**

1. $3\frac{1}{2}$

2. $1\frac{2}{3}$

3. $7\frac{1}{2}$

4. $1\frac{1}{4}$

5. $3\frac{1}{4}$

6. $\frac{37}{5}$

7. $\frac{5}{2}$

8. $\frac{10}{6}$

9. $\frac{10}{3}$

10. $\frac{13}{3}$

11. $\frac{16}{6}$