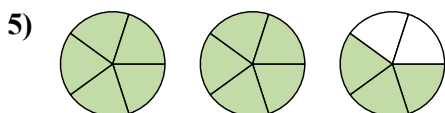
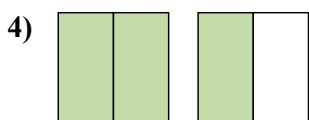
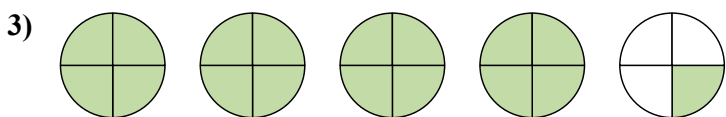
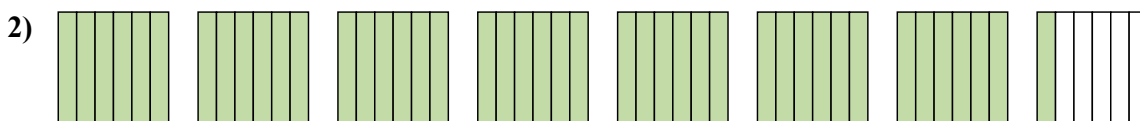
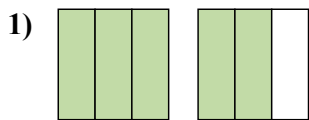


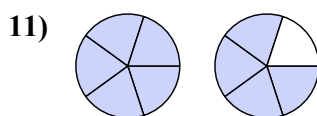
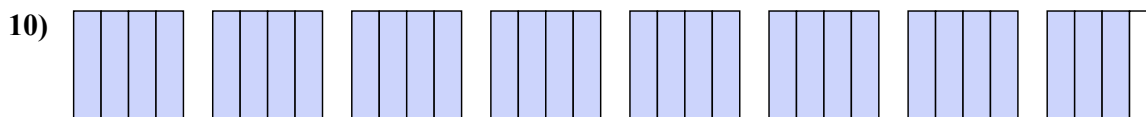
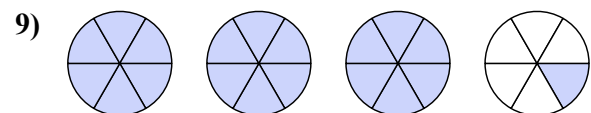
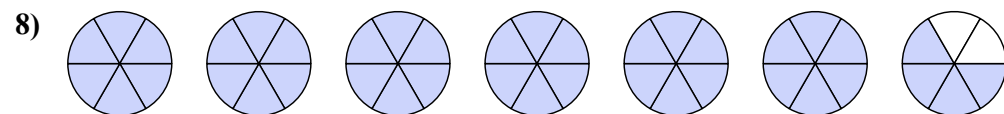
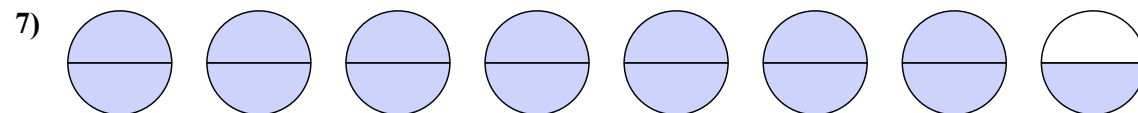
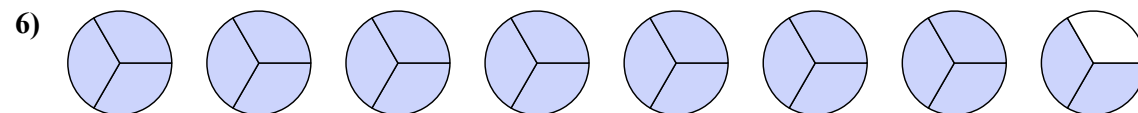




Напишите каждый ряд фигур в виде смешанного числа.



Напишите каждое число в виде неправильной дроби.

**ОТВЕТЫ**

1.  $1\frac{2}{3}$

2.  $7\frac{1}{6}$

3.  $4\frac{1}{4}$

4.  $1\frac{1}{2}$

5.  $2\frac{3}{5}$

6.  $\frac{23}{3}$

7.  $\frac{15}{2}$

8.  $\frac{40}{6}$

9.  $\frac{19}{6}$

10.  $\frac{31}{4}$

11.  $\frac{9}{5}$