





Используйте поля с фигурами, показывающие примеры умножения.


об)  $\frac{3}{6} \times \frac{1}{9} =$




1)  $\frac{2}{3} \times \frac{2}{6} =$




2)  $\frac{2}{3} \times \frac{2}{3} =$




3)  $\frac{6}{7} \times \frac{1}{3} =$




4)  $\frac{1}{7} \times \frac{1}{2} =$




5)  $\frac{3}{8} \times \frac{5}{9} =$




6)  $\frac{3}{4} \times \frac{1}{7} =$




7)  $\frac{2}{8} \times \frac{2}{5} =$




8)  $\frac{3}{7} \times \frac{3}{8} =$




9)  $\frac{4}{5} \times \frac{1}{4} =$



10)  $\frac{2}{4} \times \frac{6}{8} =$



11)  $\frac{2}{7} \times \frac{1}{4} =$

**ОТВЕТЫ**об.  $\frac{3}{54}$ 

1. \_\_\_\_\_

2. \_\_\_\_\_

3. \_\_\_\_\_

4. \_\_\_\_\_

5. \_\_\_\_\_

6. \_\_\_\_\_

7. \_\_\_\_\_

8. \_\_\_\_\_

9. \_\_\_\_\_

10. \_\_\_\_\_

11. \_\_\_\_\_

