





Используйте поля с фигурами, показывающие примеры умножения.


об)  $\frac{2}{4} \times \frac{1}{3} =$




1)  $\frac{1}{2} \times \frac{3}{7} =$




2)  $\frac{5}{9} \times \frac{3}{6} =$




3)  $\frac{1}{3} \times \frac{1}{4} =$




4)  $\frac{4}{7} \times \frac{2}{8} =$




5)  $\frac{1}{2} \times \frac{2}{4} =$




6)  $\frac{7}{8} \times \frac{4}{7} =$




7)  $\frac{2}{9} \times \frac{1}{4} =$




8)  $\frac{3}{4} \times \frac{5}{8} =$



9)  $\frac{2}{7} \times \frac{1}{2} =$



10)  $\frac{1}{5} \times \frac{2}{5} =$



11)  $\frac{2}{9} \times \frac{2}{5} =$

**ОТВЕТЫ**об.  $\frac{2}{12}$ 

1. \_\_\_\_\_

2. \_\_\_\_\_

3. \_\_\_\_\_

4. \_\_\_\_\_

5. \_\_\_\_\_

6. \_\_\_\_\_

7. \_\_\_\_\_

8. \_\_\_\_\_

9. \_\_\_\_\_

10. \_\_\_\_\_

11. \_\_\_\_\_

